




Determine which letter best represents the weight.

Ounce (oz)

An ounce is about the weight of a slice of bread.



Pound (lb)

A pound is about the weight of a can of vegetables.




Remember:
There are 16 ounces in 1 pound.

Answers

1. _____
2. _____
3. _____
4. _____
5. _____
6. _____
7. _____
8. _____
9. _____



- 1) Nail
- A. 16 ounces
 - B. 7 pounds
 - C. 0.10 ounces
 - D. 4 pounds




- 2) Apple
- A. 5 pounds
 - B. 7 ounces
 - C. 10 pounds
 - D. 0.1 ounces



- 3) Candle
- A. 20 pounds
 - B. 0.2 ounces
 - C. 1 pound
 - D. 16 ounces



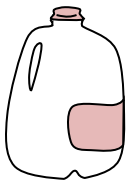
- 4) Popcorn
- A. 10 ounces
 - B. 0.3 pounds
 - C. 0.04 ounces
 - D. 2 pounds



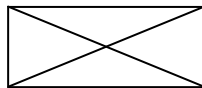
- 5) Battery
- A. 100 pounds
 - B. 0.5 ounces
 - C. 20 pounds
 - D. 10 ounces



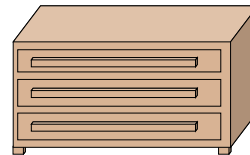
- 6) Stove
- A. 160 ounces
 - B. 16 ounces
 - C. 30 pounds
 - D. 130 pounds



- 7) Gallon of Milk
- A. 6 pounds
 - B. 6 ounces
 - C. 0.6 ounces
 - D. 60 pounds



- 8) Envelope
- A. 1 ounce
 - B. 440 pounds
 - C. 24 ounces
 - D. 11 pounds




- 9) Dresser
- A. 150 pounds
 - B. 3,000 ounces
 - C. 30 pounds
 - D. 10 ounces



Determine which letter best represents the weight.

Ounce (oz)

An ounce is about the weight of a slice of bread.



Pound (lb)

A pound is about the weight of a can of vegetables.




Remember:
There are 16 ounces in 1 pound.

Answers



- 1) Nail
 - A. 16 ounces
 - B. 7 pounds
 - C. 0.10 ounces
 - D. 4 pounds



- 2) Apple
 - A. 5 pounds
 - B. 7 ounces
 - C. 10 pounds
 - D. 0.1 ounces



- 3) Candle
 - A. 20 pounds
 - B. 0.2 ounces
 - C. 1 pound
 - D. 16 ounces



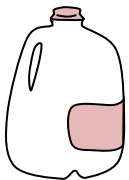
- 4) Popcorn
 - A. 10 ounces
 - B. 0.3 pounds
 - C. 0.04 ounces
 - D. 2 pounds



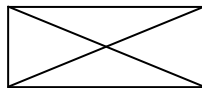
- 5) Battery
 - A. 100 pounds
 - B. 0.5 ounces
 - C. 20 pounds
 - D. 10 ounces



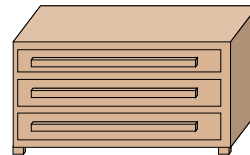
- 6) Stove
 - A. 160 ounces
 - B. 16 ounces
 - C. 30 pounds
 - D. 130 pounds



- 7) Gallon of Milk
 - A. 6 pounds
 - B. 6 ounces
 - C. 0.6 ounces
 - D. 60 pounds



- 8) Envelope
 - A. 1 ounce
 - B. 440 pounds
 - C. 24 ounces
 - D. 11 pounds



- 9) Dresser
 - A. 150 pounds
 - B. 3,000 ounces
 - C. 30 pounds
 - D. 10 ounces

- 1. **C**
- 2. **B**
- 3. **B**
- 4. **C**
- 5. **B**
- 6. **D**
- 7. **A**
- 8. **A**
- 9. **A**