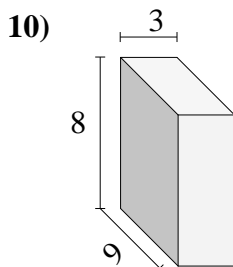
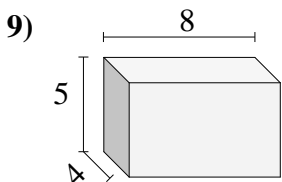
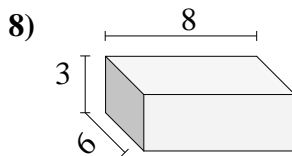
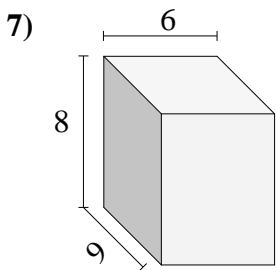
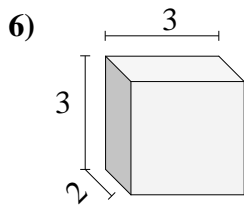
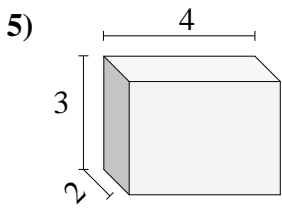
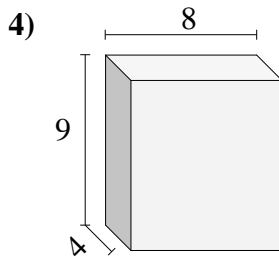
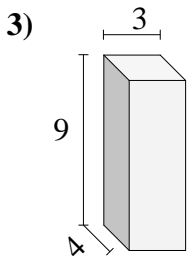
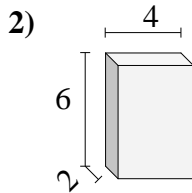
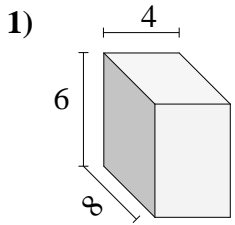




Find the volume of each of the rectangular prisms. Measured in cm (not to scale).

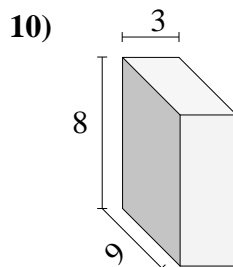
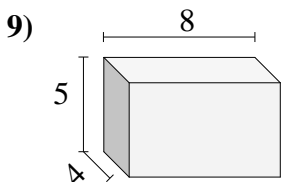
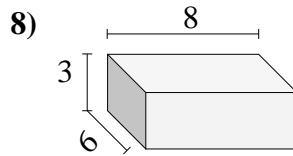
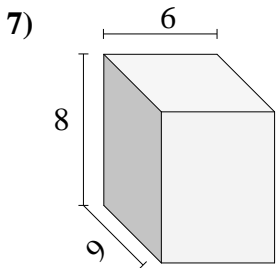
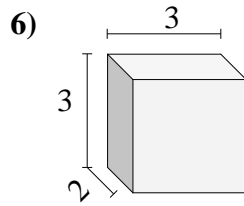
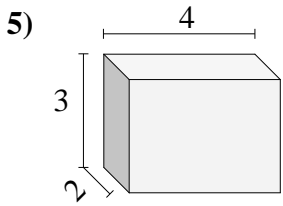
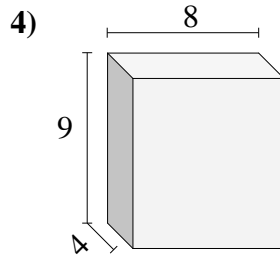
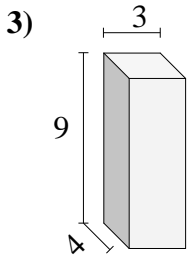
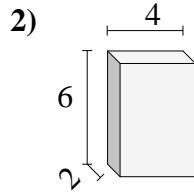
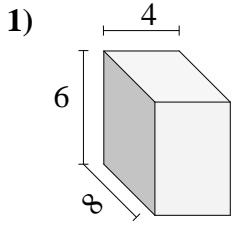


Answers

- 1. _____
- 2. _____
- 3. _____
- 4. _____
- 5. _____
- 6. _____
- 7. _____
- 8. _____
- 9. _____
- 10. _____



Find the volume of each of the rectangular prisms. Measured in cm (not to scale).

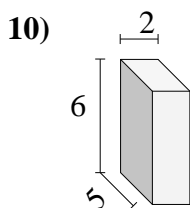
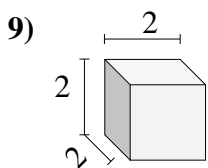
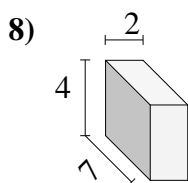
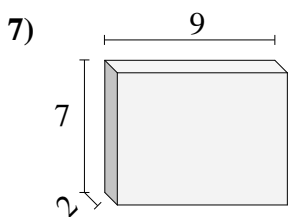
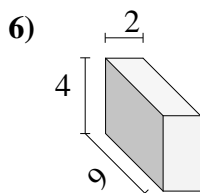
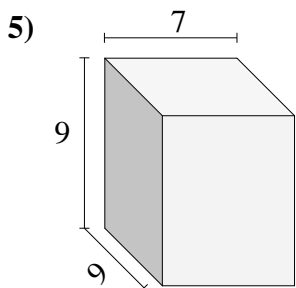
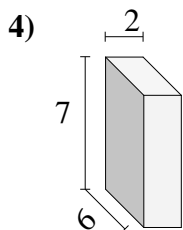
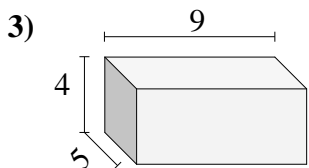
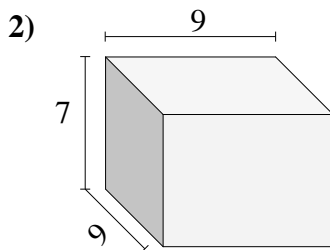
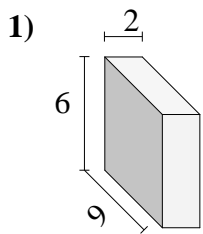


Answers

- 1. 192
- 2. 48
- 3. 108
- 4. 288
- 5. 24
- 6. 18
- 7. 432
- 8. 144
- 9. 160
- 10. 216



Find the volume of each of the rectangular prisms. Measured in cm (not to scale).

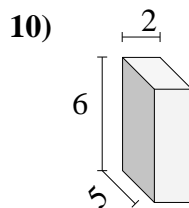
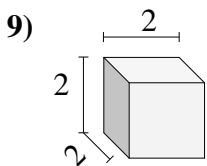
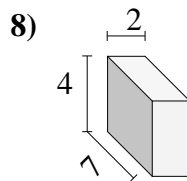
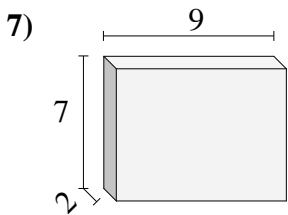
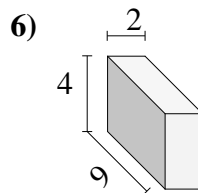
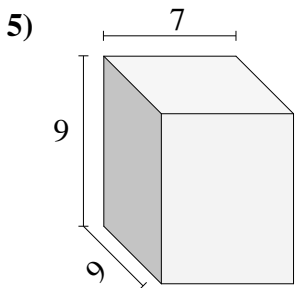
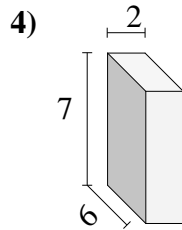
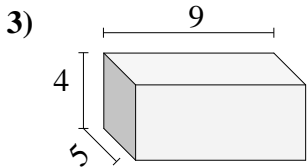
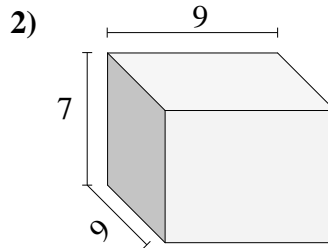
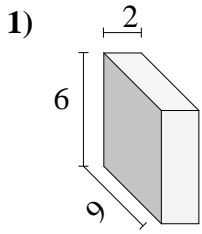


Answers

- 1. _____
- 2. _____
- 3. _____
- 4. _____
- 5. _____
- 6. _____
- 7. _____
- 8. _____
- 9. _____
- 10. _____



Find the volume of each of the rectangular prisms. Measured in cm (not to scale).

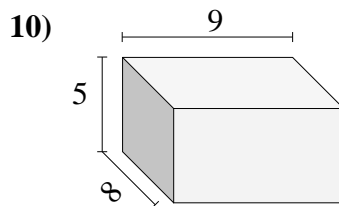
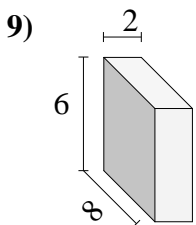
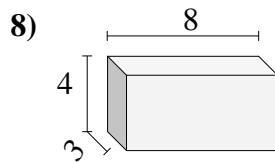
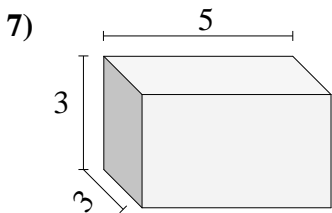
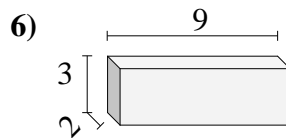
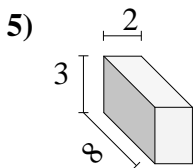
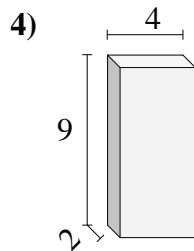
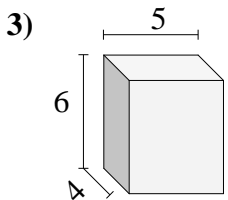
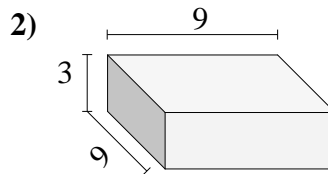
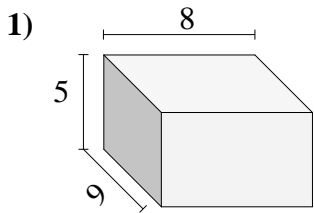


Answers

- 1. 108
- 2. 567
- 3. 180
- 4. 84
- 5. 567
- 6. 72
- 7. 126
- 8. 56
- 9. 8
- 10. 60



Find the volume of each of the rectangular prisms. Measured in cm (not to scale).

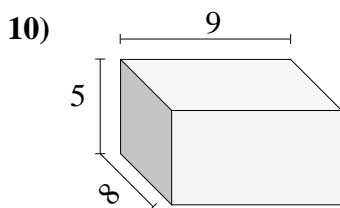
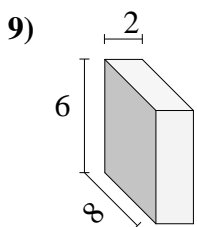
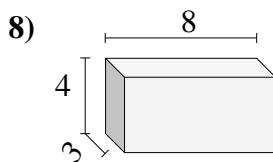
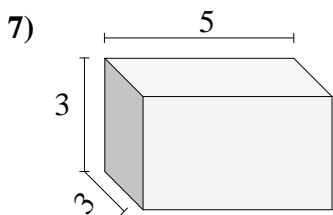
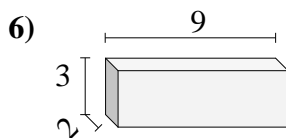
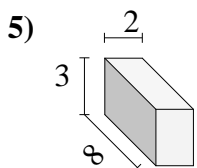
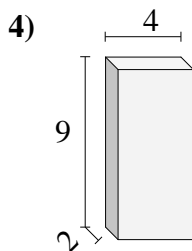
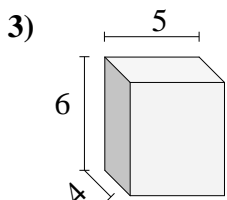
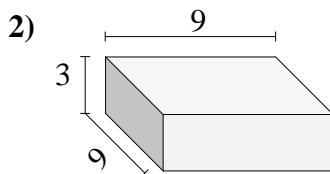
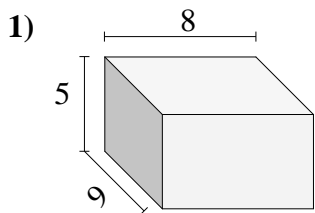


Answers

- 1. _____
- 2. _____
- 3. _____
- 4. _____
- 5. _____
- 6. _____
- 7. _____
- 8. _____
- 9. _____
- 10. _____



Find the volume of each of the rectangular prisms. Measured in cm (not to scale).



Answers

1. 360

2. 243

3. 120

4. 72

5. 48

6. 54

7. 45

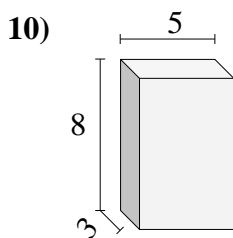
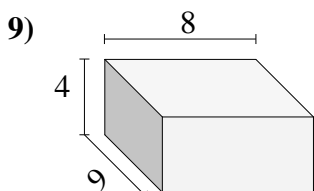
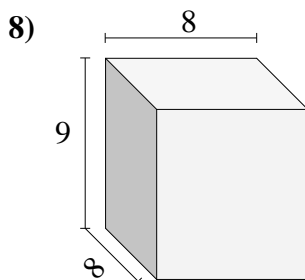
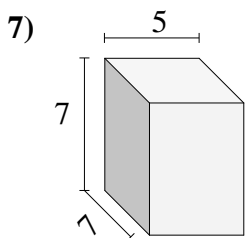
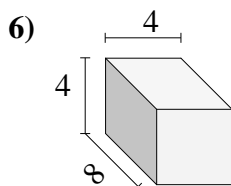
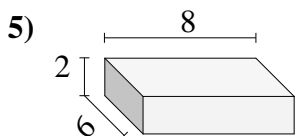
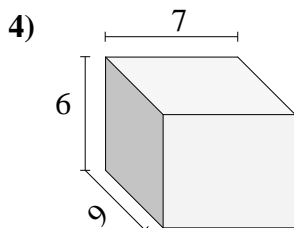
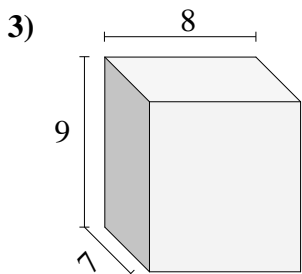
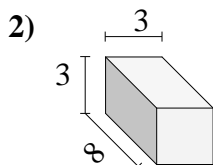
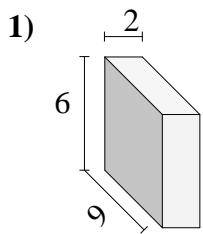
8. 96

9. 96

10. 360



Find the volume of each of the rectangular prisms. Measured in cm (not to scale).

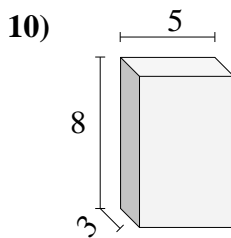
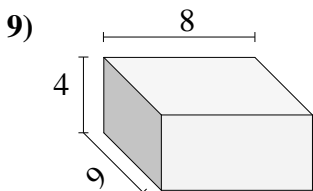
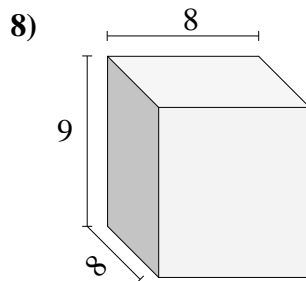
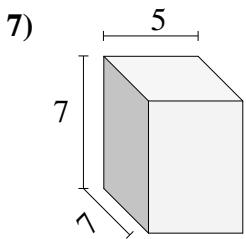
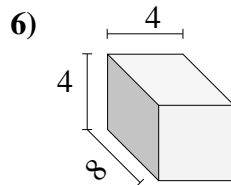
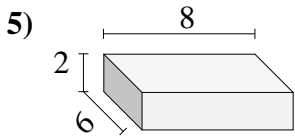
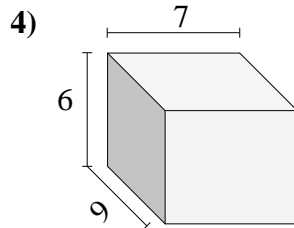
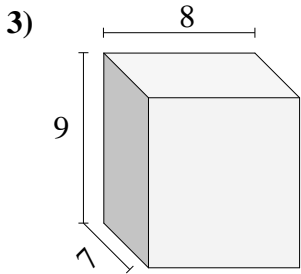
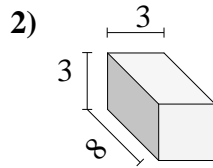
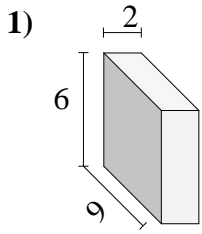


Answers

- 1. _____
- 2. _____
- 3. _____
- 4. _____
- 5. _____
- 6. _____
- 7. _____
- 8. _____
- 9. _____
- 10. _____



Find the volume of each of the rectangular prisms. Measured in cm (not to scale).



Answers

1. 108

2. 72

3. 504

4. 378

5. 96

6. 128

7. 245

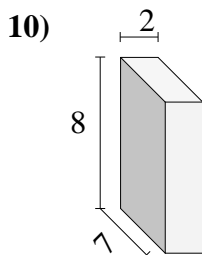
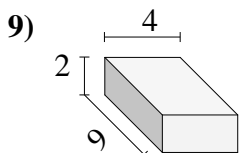
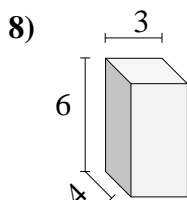
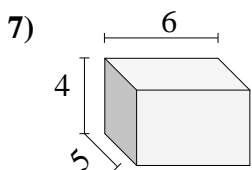
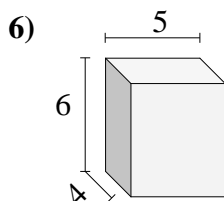
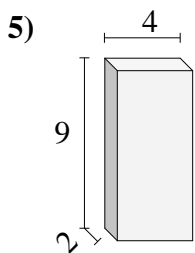
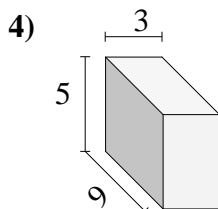
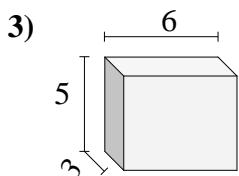
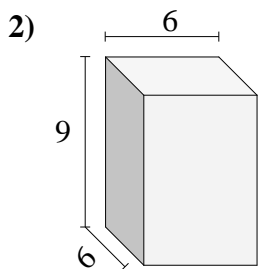
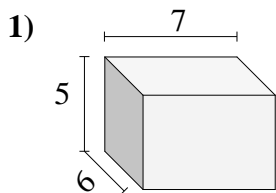
8. 576

9. 288

10. 120



Find the volume of each of the rectangular prisms. Measured in cm (not to scale).

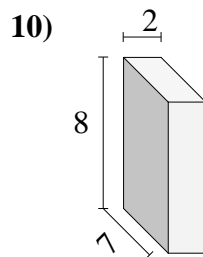
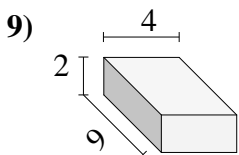
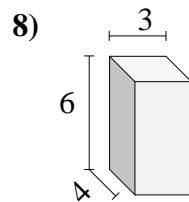
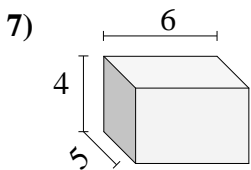
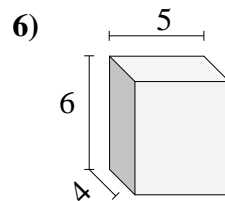
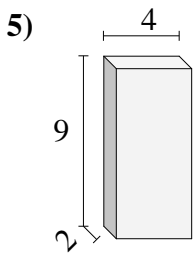
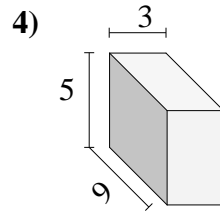
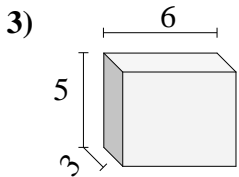
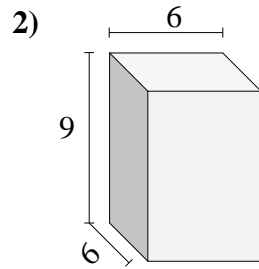
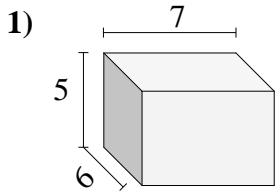


Answers

- 1. _____
- 2. _____
- 3. _____
- 4. _____
- 5. _____
- 6. _____
- 7. _____
- 8. _____
- 9. _____
- 10. _____

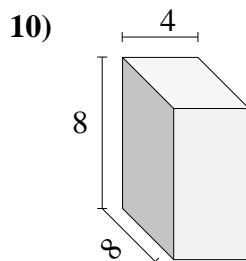
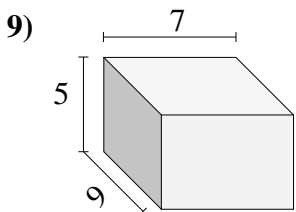
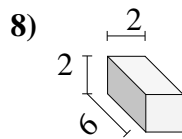
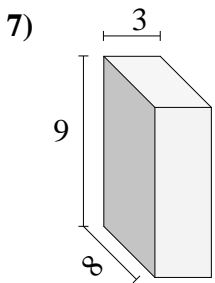
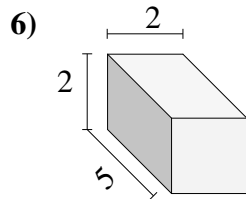
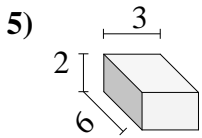
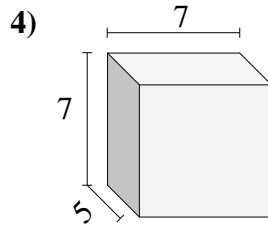
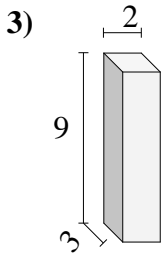
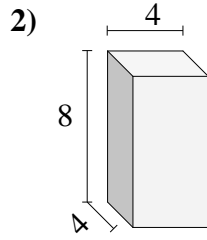
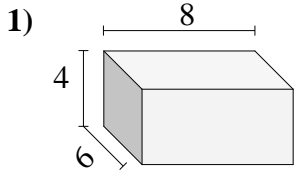


Find the volume of each of the rectangular prisms. Measured in cm (not to scale).

Answers1. 2102. 3243. 904. 1355. 726. 1207. 1208. 729. 7210. 112



Find the volume of each of the rectangular prisms. Measured in cm (not to scale).

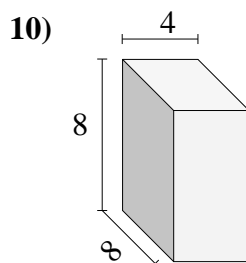
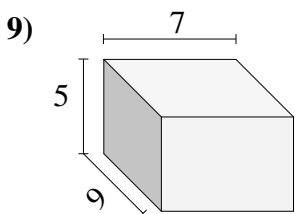
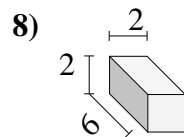
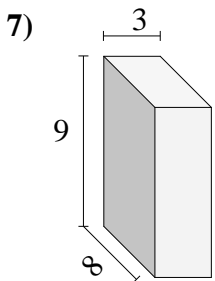
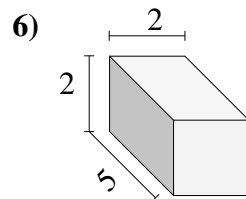
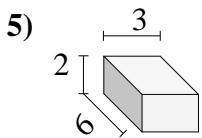
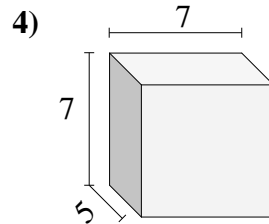
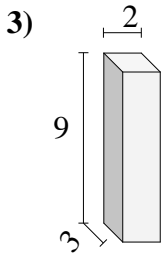
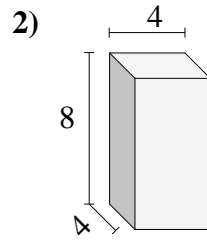
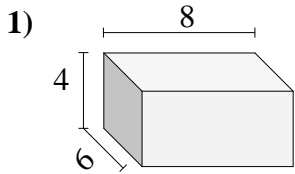


Answers

- 1. _____
- 2. _____
- 3. _____
- 4. _____
- 5. _____
- 6. _____
- 7. _____
- 8. _____
- 9. _____
- 10. _____

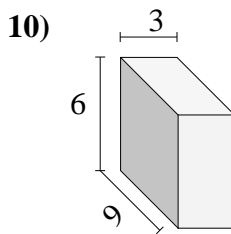
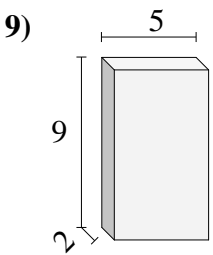
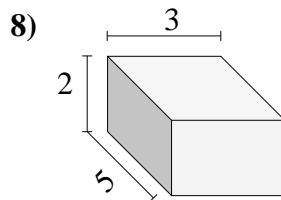
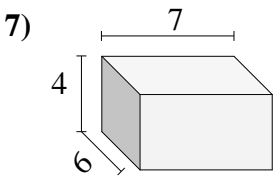
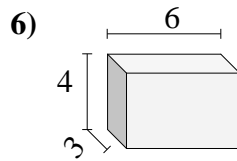
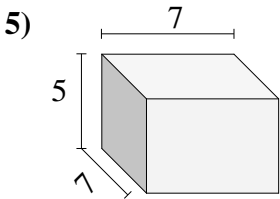
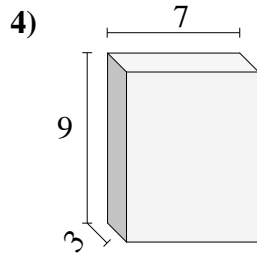
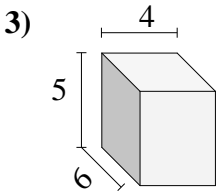
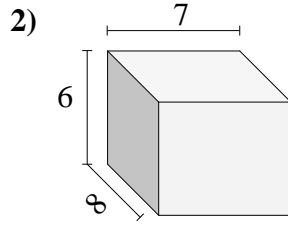
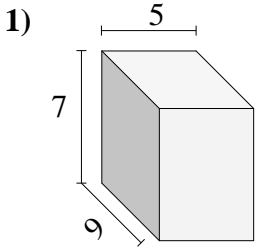


Find the volume of each of the rectangular prisms. Measured in cm (not to scale).

Answers1. 1922. 1283. 544. 2455. 366. 207. 2168. 249. 31510. 256



Find the volume of each of the rectangular prisms. Measured in cm (not to scale).



Answers

1. _____

2. _____

3. _____

4. _____

5. _____

6. _____

7. _____

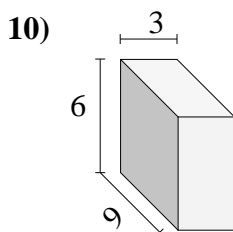
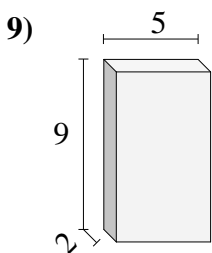
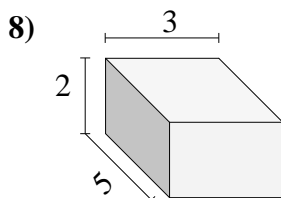
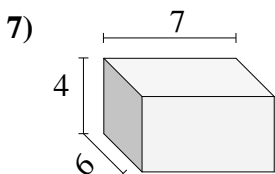
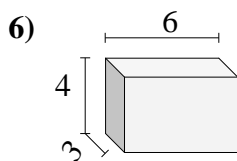
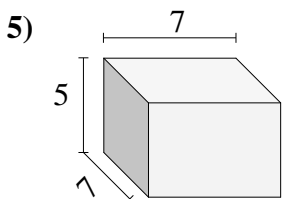
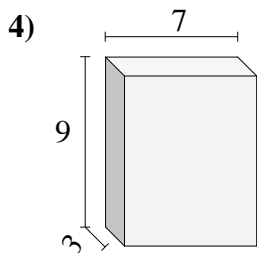
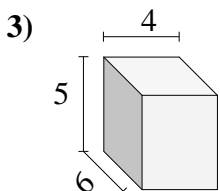
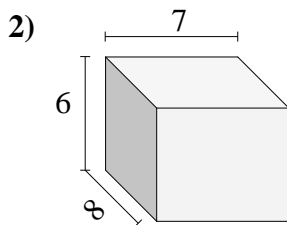
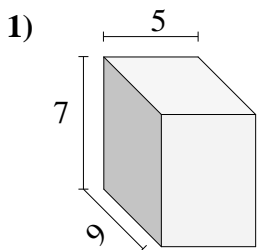
8. _____

9. _____

10. _____



Find the volume of each of the rectangular prisms. Measured in cm (not to scale).



Answers

1. 315

2. 336

3. 120

4. 189

5. 245

6. 72

7. 168

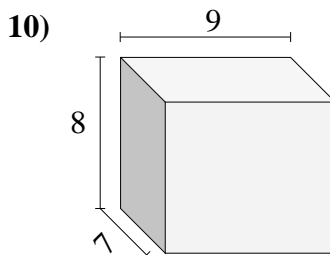
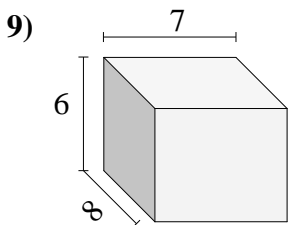
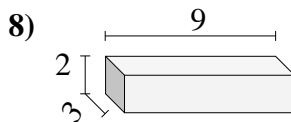
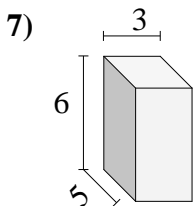
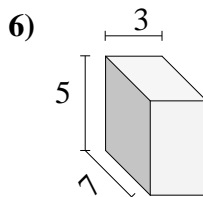
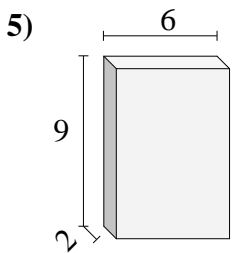
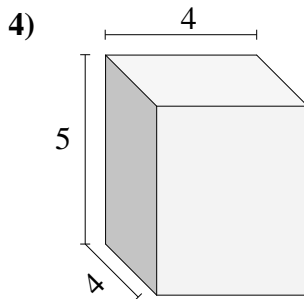
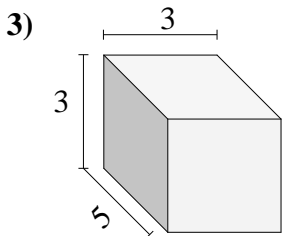
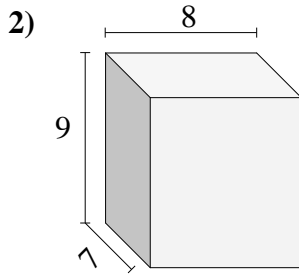
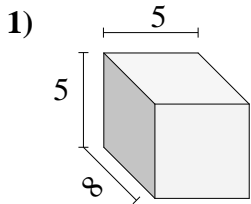
8. 30

9. 90

10. 162



Find the volume of each of the rectangular prisms. Measured in cm (not to scale).

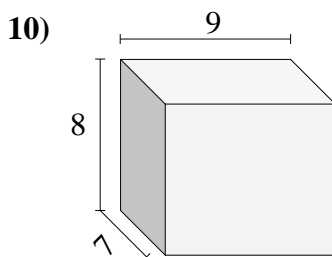
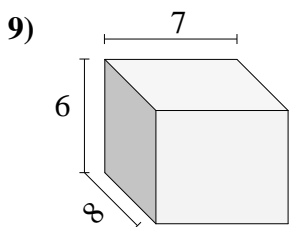
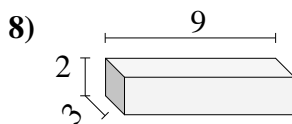
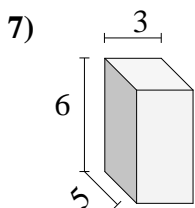
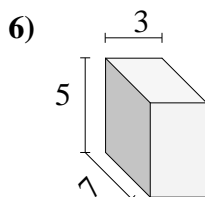
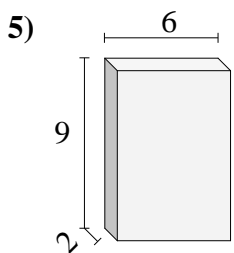
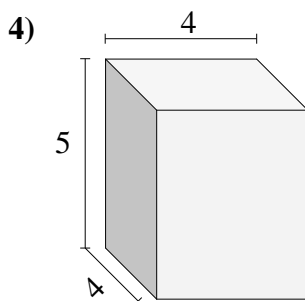
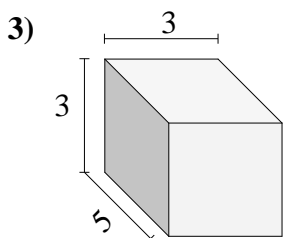
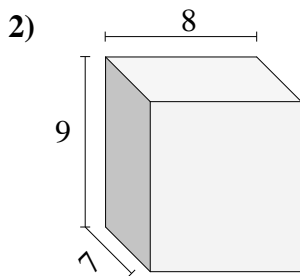
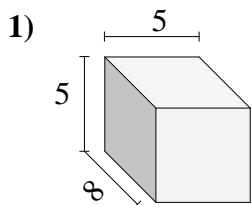


Answers

- 1. _____
- 2. _____
- 3. _____
- 4. _____
- 5. _____
- 6. _____
- 7. _____
- 8. _____
- 9. _____
- 10. _____



Find the volume of each of the rectangular prisms. Measured in cm (not to scale).



Answers

1. 200

2. 504

3. 45

4. 80

5. 108

6. 105

7. 90

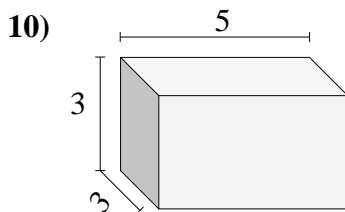
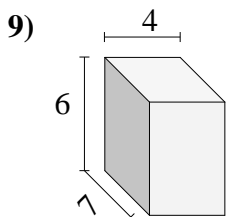
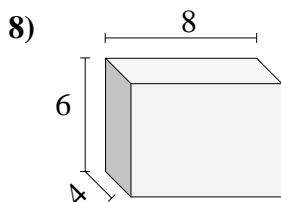
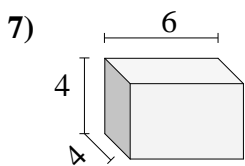
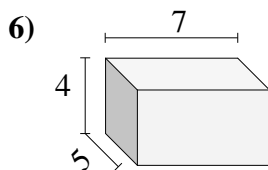
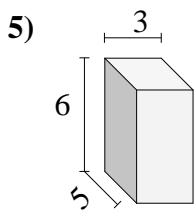
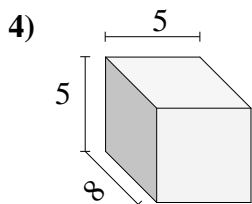
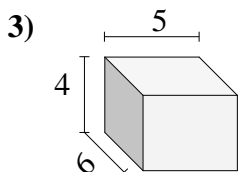
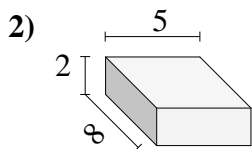
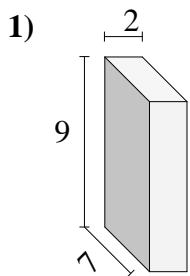
8. 54

9. 336

10. 504



Find the volume of each of the rectangular prisms. Measured in cm (not to scale).

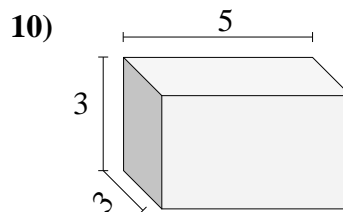
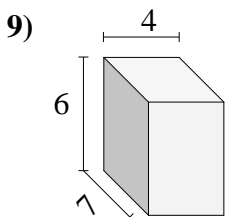
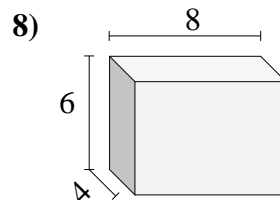
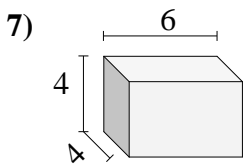
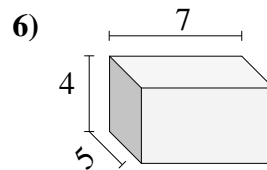
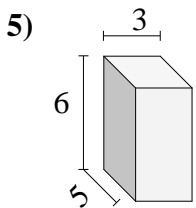
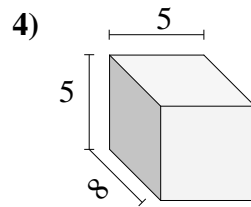
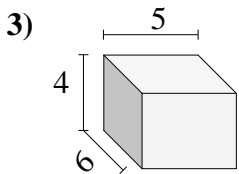
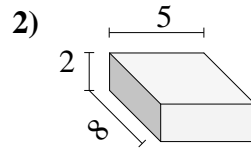
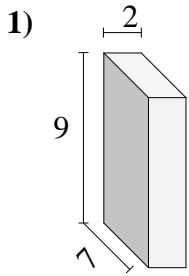


Answers

- 1. _____
- 2. _____
- 3. _____
- 4. _____
- 5. _____
- 6. _____
- 7. _____
- 8. _____
- 9. _____
- 10. _____

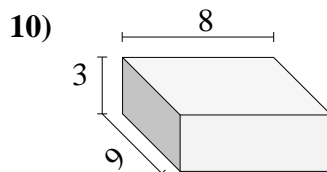
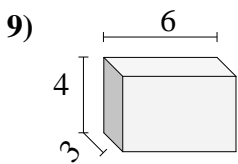
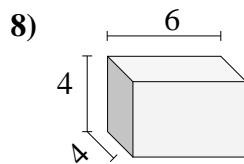
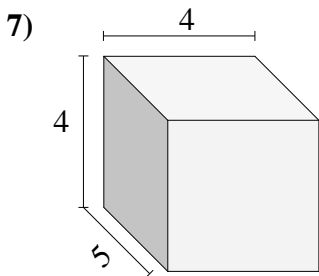
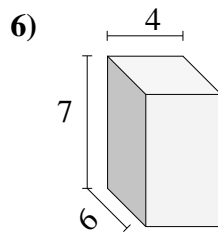
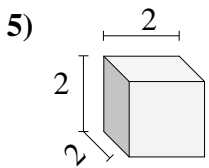
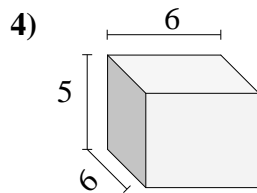
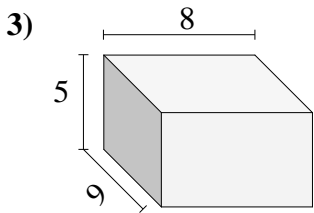
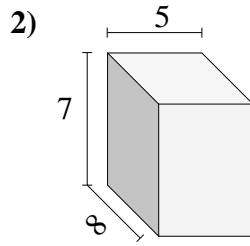
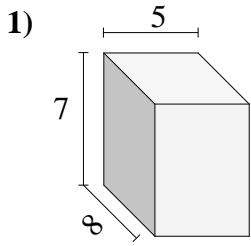


Find the volume of each of the rectangular prisms. Measured in cm (not to scale).

Answers1. 1262. 803. 1204. 2005. 906. 1407. 968. 1929. 16810. 45



Find the volume of each of the rectangular prisms. Measured in cm (not to scale).

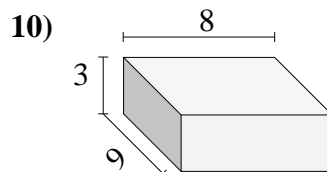
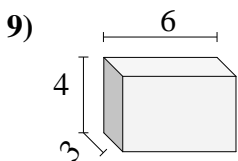
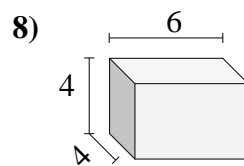
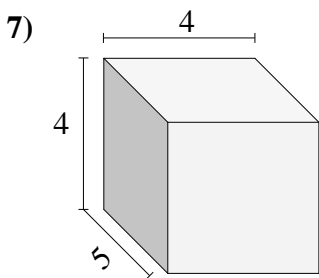
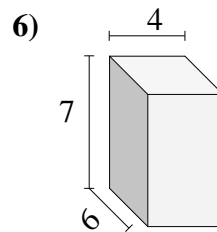
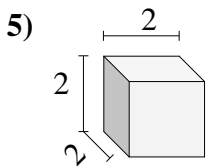
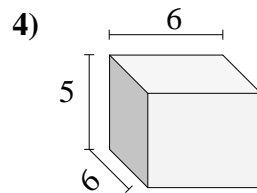
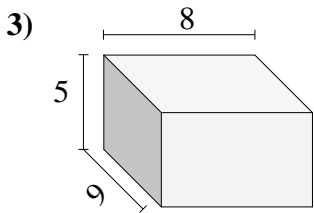
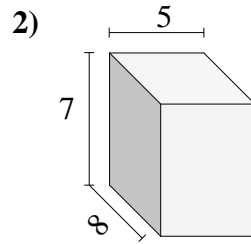
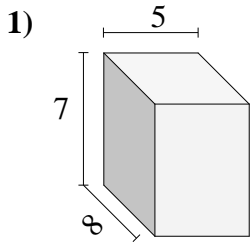


Answers

- 1. _____
- 2. _____
- 3. _____
- 4. _____
- 5. _____
- 6. _____
- 7. _____
- 8. _____
- 9. _____
- 10. _____



Find the volume of each of the rectangular prisms. Measured in cm (not to scale).

Answers1. 2802. 2803. 3604. 1805. 86. 1687. 808. 969. 7210. 216