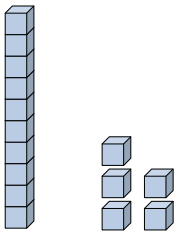




Fill in the blanks to find the amounts.

Answers


Ex)



1 5

Tens Ones

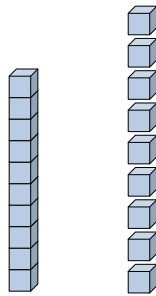
Ex)



0 4

Tens Ones

1)

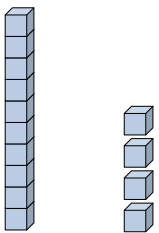


Tens Ones

Ex. 15


Ex. 4

2)




Tens Ones

3)



Tens Ones

4)



Tens Ones

1. _____

2. _____

3. _____

4. _____

5. _____

6. _____

7. _____

8. _____

9. _____

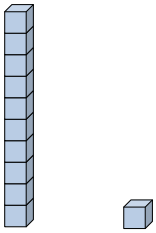
10. _____

5)



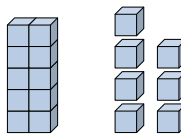
Tens Ones

6)



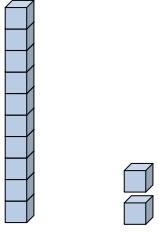
Tens Ones

7)




Tens Ones

8)




Tens Ones

9)



Tens Ones

10)



Tens Ones



Fill in the blanks to find the amounts.

Ex)

1 **5**

Tens Ones

Ex)

0 **4**

Tens Ones

1)

1 **9**

Tens Ones

2)

1 **4**

Tens Ones

3)

0 **5**

Tens Ones

4)

0 **1**

Tens Ones

5)

0 **2**

Tens Ones

6)

1 **1**

Tens Ones

7)

1 **7**

Tens Ones

8)

1 **2**

Tens Ones

9)

0 **3**

Tens Ones

10)

0 **9**

Tens Ones

Answers

Ex. 15

Ex. 4

1. 19

2. 14

3. 5

4. 1

5. 2

6. 11

7. 17

8. 12

9. 3

10. 9