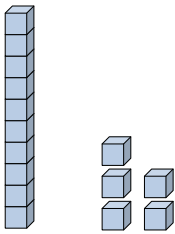




Fill in the blanks to find the amounts.

Answers


Ex)



1 5

Tens Ones

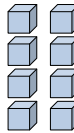
Ex)



0 4

Tens Ones

1)



Tens Ones

Ex. 15

Ex. 4

1. _____

2. _____

3. _____

4. _____

5. _____

6. _____

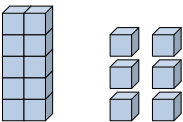
7. _____

8. _____

9. _____


10. _____

2)



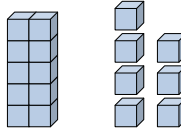
Tens Ones

3)



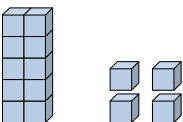
Tens Ones

4)



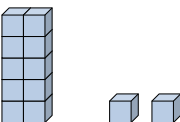
Tens Ones

5)




Tens Ones

6)




Tens Ones

7)




Tens Ones

8)




Tens Ones

9)



Tens Ones

10)

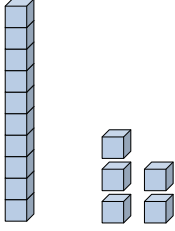


Tens Ones



Fill in the blanks to find the amounts.


Ex)



1 5

Tens Ones

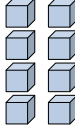
Ex)



0 4

Tens Ones

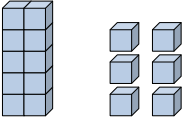
1)



0 8

Tens Ones


2)



1 6

Tens Ones

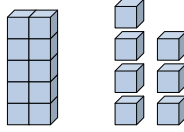
3)



0 2

Tens Ones

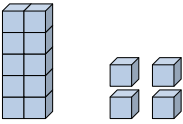
4)



1 7

Tens Ones

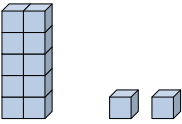
5)



1 4

Tens Ones


6)



1 2

Tens Ones


7)



0 5

Tens Ones


8)



0 3

Tens Ones


9)



0 9

Tens Ones

10)



0 1

Tens Ones

Answers

Ex. 15

Ex. 4

1. 8

2. 16

3. 2

4. 17

5. 14

6. 12

7. 5

8. 3

9. 9

10. 1