



Fill in the blanks to find the amounts.

Answers

Ex)

1 **5**

Tens **Ones**

Ex)

0 **4**

Tens **Ones**

1)

Tens **Ones**

2)

Tens **Ones**

3)

Tens **Ones**

4)

Tens **Ones**

5)

Tens **Ones**

6)

Tens **Ones**

7)

Tens **Ones**

8)

Tens **Ones**

9)

Tens **Ones**

10)

Tens **Ones**

Ex. 15

Ex. 4

1. _____

2. _____

3. _____

4. _____

5. _____

6. _____

7. _____

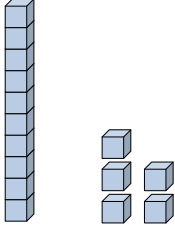
8. _____

9. _____


10. _____



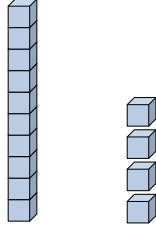
Fill in the blanks to find the amounts.

Ex) 
1 5

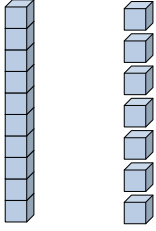
Tens Ones

Ex) 
0 4


Tens Ones

1) 
1 4

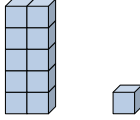
Tens Ones

2) 
1 7


Tens Ones

3) 
1 0

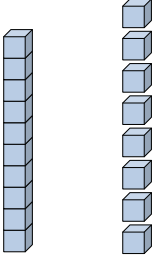
Tens Ones

4) 
1 1

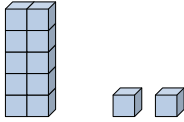
Tens Ones

5) 
0 1

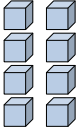
Tens Ones

6) 
1 8

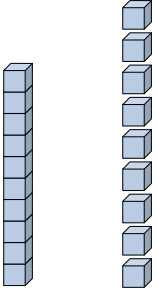
Tens Ones

7) 
1 2


Tens Ones

8) 
0 8

Tens Ones

9) 
1 9

Tens Ones

10) 
0 3

Tens Ones

Answers

Ex. 15

Ex. 4

1. 14

2. 17

3. 10

4. 11

5. 1

6. 18

7. 12

8. 8

9. 19

10. 3