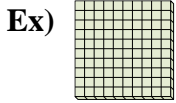
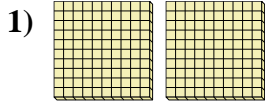




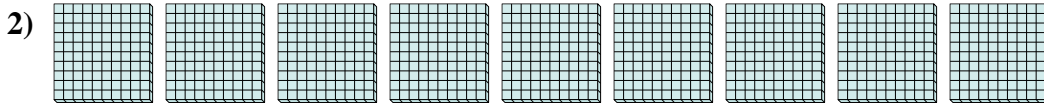
Use the blocks to determine the total quantities.



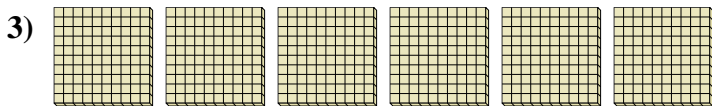
 1 Hundreds = 10 Tens = 100 Ones



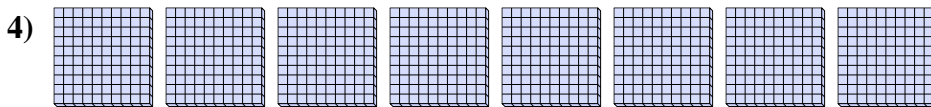
 Hundreds = Tens = Ones



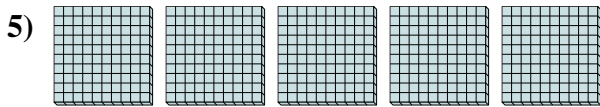
 Hundreds = Tens = Ones



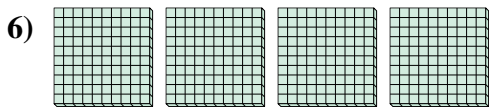
 Hundreds = Tens = Ones



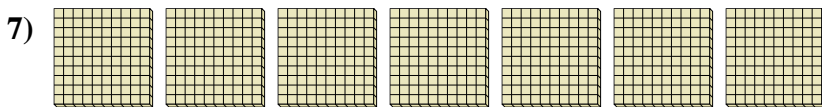
 Hundreds = Tens = Ones




 Hundreds = Tens = Ones



 Hundreds = Tens = Ones



 Hundreds = Tens = Ones



 Hundreds = Tens = Ones

Answers

Ex. 1 10 100

1. _____

2. _____

3. _____

4. _____

5. _____

6. _____


7. _____

8. _____



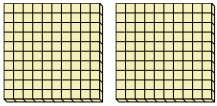
Use the blocks to determine the total quantities.

Ex)




1 Hundreds = 10 Tens = 100 Ones

1)



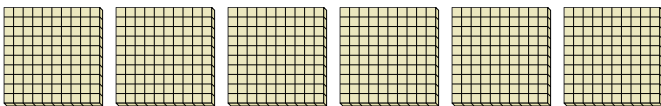
2 Hundreds = 20 Tens = 200 Ones

2)



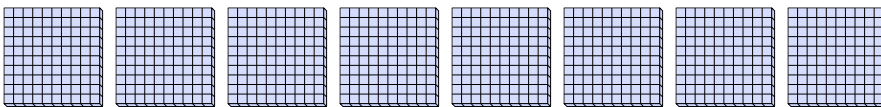
9 Hundreds = 90 Tens = 900 Ones

3)




6 Hundreds = 60 Tens = 600 Ones

4)



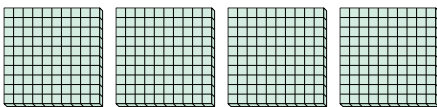
8 Hundreds = 80 Tens = 800 Ones

5)




5 Hundreds = 50 Tens = 500 Ones

6)




4 Hundreds = 40 Tens = 400 Ones

7)



7 Hundreds = 70 Tens = 700 Ones

8)



3 Hundreds = 30 Tens = 300 Ones

Answers

Ex.	<u>1</u>	<u>10</u>	<u>100</u>
1.	<u>2</u>	<u>20</u>	<u>200</u>
2.	<u>9</u>	<u>90</u>	<u>900</u>
3.	<u>6</u>	<u>60</u>	<u>600</u>
4.	<u>8</u>	<u>80</u>	<u>800</u>
5.	<u>5</u>	<u>50</u>	<u>500</u>
6.	<u>4</u>	<u>40</u>	<u>400</u>
7.	<u>7</u>	<u>70</u>	<u>700</u>
8.	<u>3</u>	<u>30</u>	<u>300</u>