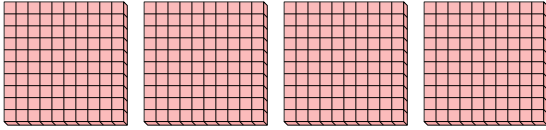


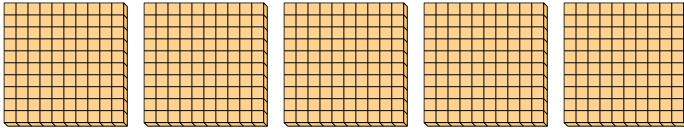


Use the groups to answer each question.

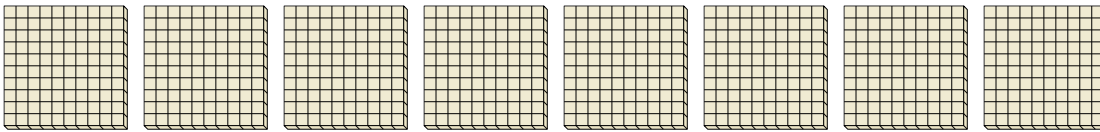
- 1) a. How many groups of 100 are there?
- b. How many small blocks are there total?



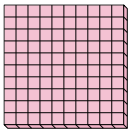
- 2) a. How many groups of 100 are there?
- b. How many small blocks are there total?



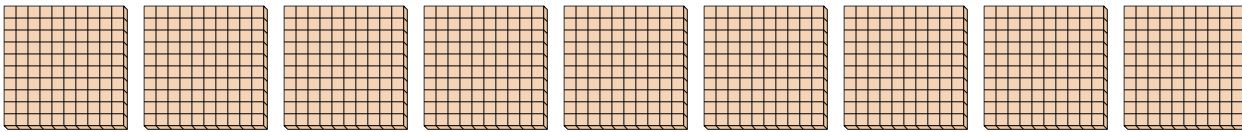
- 3) a. How many groups of 100 are there?
- b. How many small blocks are there total?



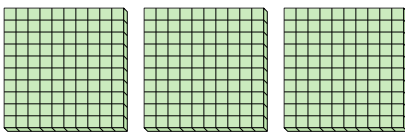
- 4) a. How many groups of 100 are there?
- b. How many small blocks are there total?



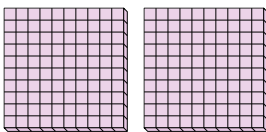
- 5) a. How many groups of 100 are there?
- b. How many small blocks are there total?



- 6) a. How many groups of 100 are there?
- b. How many small blocks are there total?



- 7) a. How many groups of 100 are there?
- b. How many small blocks are there total?



Answers

1a. _____

1b. _____

2a. _____

2b. _____

3a. _____

3b. _____

4a. _____

4b. _____

5a. _____

5b. _____

6a. _____

6b. _____

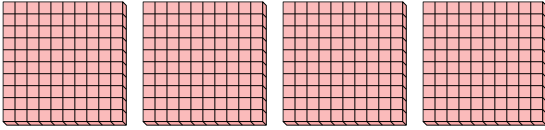
7a. _____

7b. _____

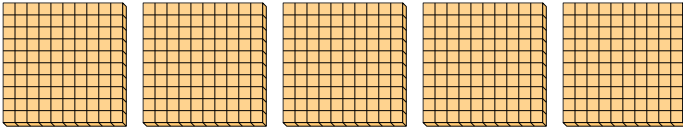


Use the groups to answer each question.

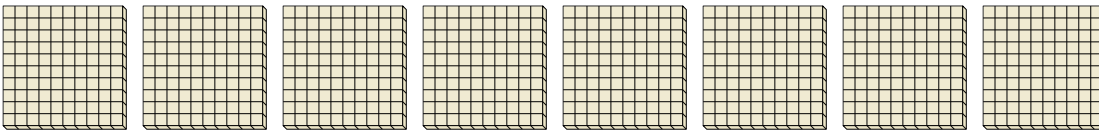
- 1) a. How many groups of 100 are there?
 b. How many small blocks are there total?



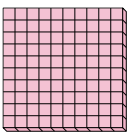
- 2) a. How many groups of 100 are there?
 b. How many small blocks are there total?



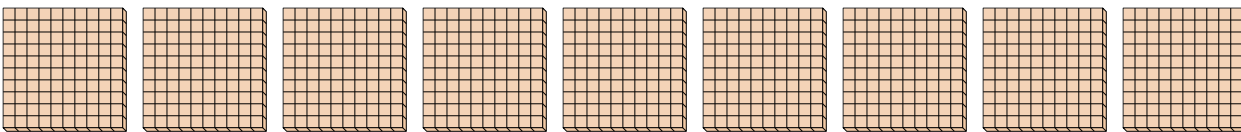
- 3) a. How many groups of 100 are there?
 b. How many small blocks are there total?



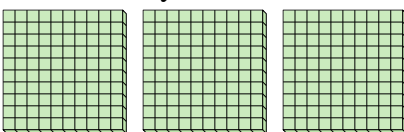
- 4) a. How many groups of 100 are there?
 b. How many small blocks are there total?



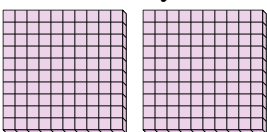
- 5) a. How many groups of 100 are there?
 b. How many small blocks are there total?



- 6) a. How many groups of 100 are there?
 b. How many small blocks are there total?



- 7) a. How many groups of 100 are there?
 b. How many small blocks are there total?



Answers

1a. 4

1b. 400

2a. 5

2b. 500

3a. 8

3b. 800

4a. 1

4b. 100

5a. 9

5b. 900

6a. 3

6b. 300

7a. 2

7b. 200