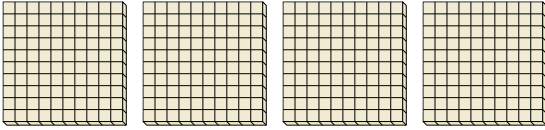


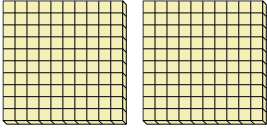


Use the groups to answer each question.

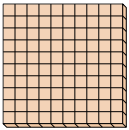
- 1) a. How many groups of 100 are there?
- b. How many small blocks are there total?




- 2) a. How many groups of 100 are there?
- b. How many small blocks are there total?



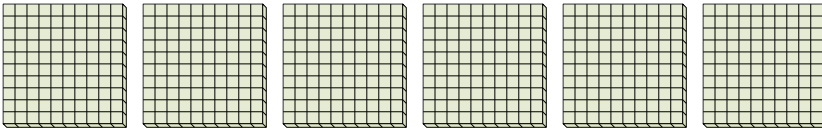
- 3) a. How many groups of 100 are there?
- b. How many small blocks are there total?




- 4) a. How many groups of 100 are there?
- b. How many small blocks are there total?



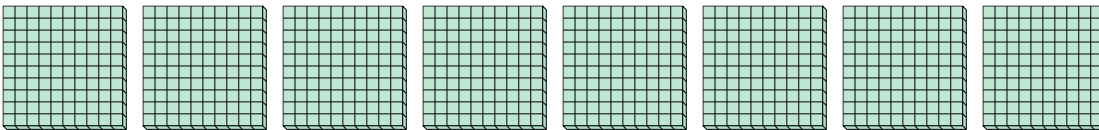
- 5) a. How many groups of 100 are there?
- b. How many small blocks are there total?



- 6) a. How many groups of 100 are there?
- b. How many small blocks are there total?



- 7) a. How many groups of 100 are there?
- b. How many small blocks are there total?



**Answers**

1a. \_\_\_\_\_

1b. \_\_\_\_\_

2a. \_\_\_\_\_

2b. \_\_\_\_\_

3a. \_\_\_\_\_

3b. \_\_\_\_\_

4a. \_\_\_\_\_

4b. \_\_\_\_\_

5a. \_\_\_\_\_

5b. \_\_\_\_\_

6a. \_\_\_\_\_

6b. \_\_\_\_\_

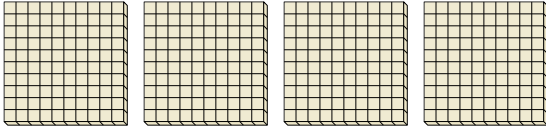
7a. \_\_\_\_\_

7b. \_\_\_\_\_

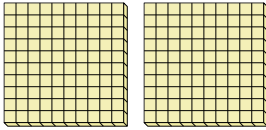


Use the groups to answer each question.

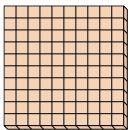
- 1) a. How many groups of 100 are there?  
b. How many small blocks are there total?



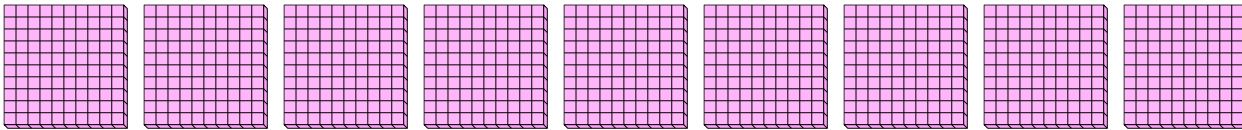
- 2) a. How many groups of 100 are there?  
b. How many small blocks are there total?



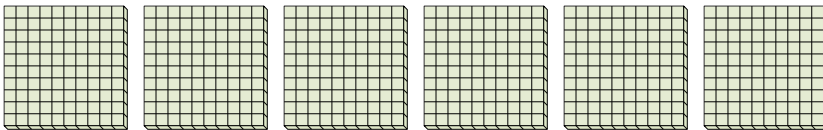
- 3) a. How many groups of 100 are there?  
b. How many small blocks are there total?



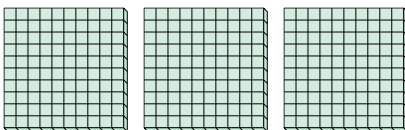
- 4) a. How many groups of 100 are there?  
b. How many small blocks are there total?



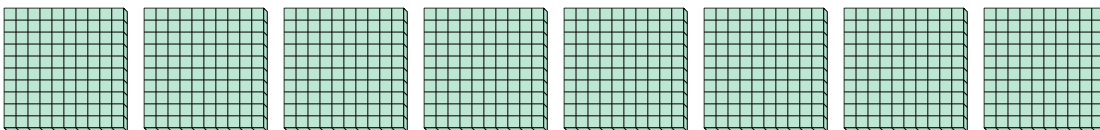
- 5) a. How many groups of 100 are there?  
b. How many small blocks are there total?



- 6) a. How many groups of 100 are there?  
b. How many small blocks are there total?



- 7) a. How many groups of 100 are there?  
b. How many small blocks are there total?



**Answers**

1a. 4

1b. 400

2a. 2

2b. 200

3a. 1

3b. 100

4a. 9

4b. 900

5a. 6

5b. 600

6a. 3

6b. 300

7a. 8

7b. 800