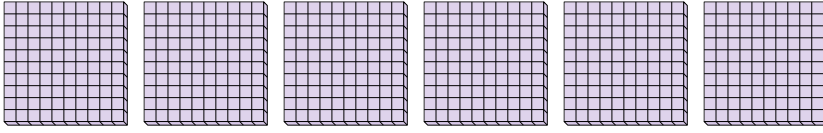




Use the groups to answer each question.

Answers

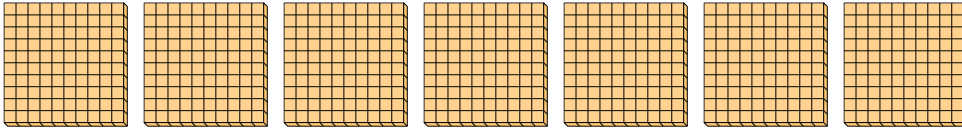
- 1) a. How many groups of 100 are there?
- b. How many small blocks are there total?



1a. _____

1b. _____


- 2) a. How many groups of 100 are there?
- b. How many small blocks are there total?



2a. _____

2b. _____

- 3) a. How many groups of 100 are there?
- b. How many small blocks are there total?



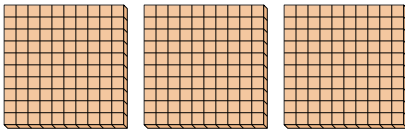
3a. _____

3b. _____

4a. _____

4b. _____

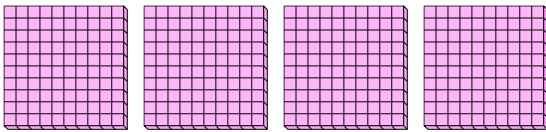
- 4) a. How many groups of 100 are there?
- b. How many small blocks are there total?



5a. _____

5b. _____

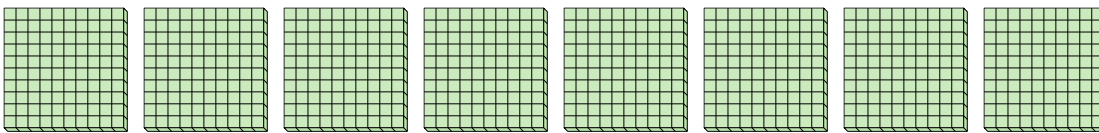
- 5) a. How many groups of 100 are there?
- b. How many small blocks are there total?



6a. _____

6b. _____

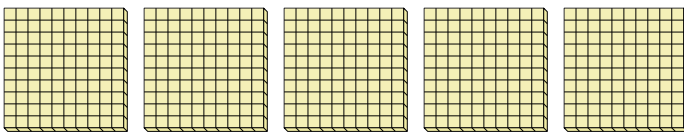
- 6) a. How many groups of 100 are there?
- b. How many small blocks are there total?



7a. _____

7b. _____

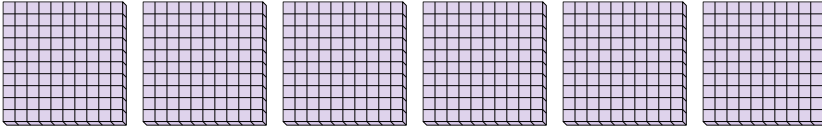
- 7) a. How many groups of 100 are there?
- b. How many small blocks are there total?



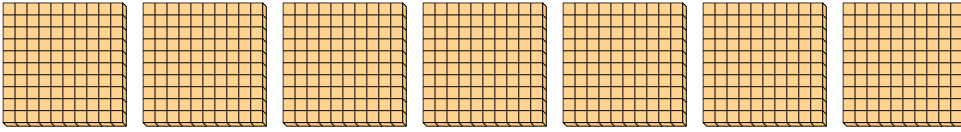


Use the groups to answer each question.


- 1) a. How many groups of 100 are there?
 b. How many small blocks are there total?




- 2) a. How many groups of 100 are there?
 b. How many small blocks are there total?



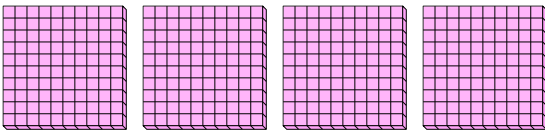
- 3) a. How many groups of 100 are there?
 b. How many small blocks are there total?



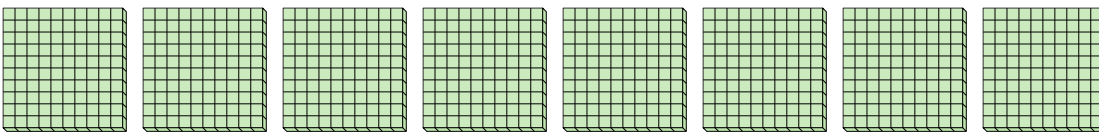
- 4) a. How many groups of 100 are there?
 b. How many small blocks are there total?



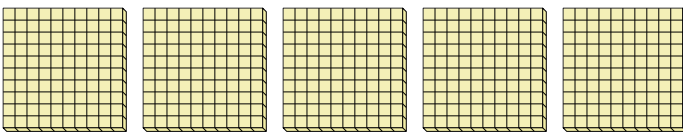
- 5) a. How many groups of 100 are there?
 b. How many small blocks are there total?



- 6) a. How many groups of 100 are there?
 b. How many small blocks are there total?



- 7) a. How many groups of 100 are there?
 b. How many small blocks are there total?



Answers

1a. 6

1b. 600

2a. 7

2b. 700

3a. 1

3b. 100

4a. 3

4b. 300

5a. 4

5b. 400

6a. 8

6b. 800

7a. 5

7b. 500