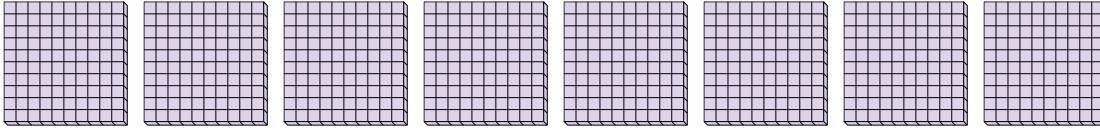




Use the groups to answer each question.

Answers

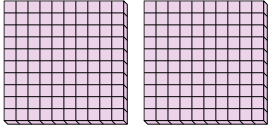
- 1) a. How many groups of 100 are there?
- b. How many small blocks are there total?



1a. _____

1b. _____

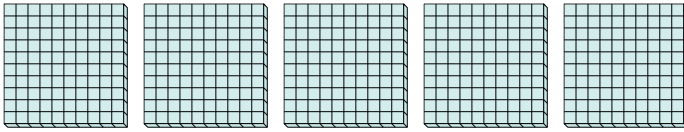
- 2) a. How many groups of 100 are there?
- b. How many small blocks are there total?



2a. _____

2b. _____

- 3) a. How many groups of 100 are there?
- b. How many small blocks are there total?



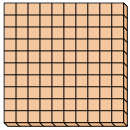
3a. _____

3b. _____

4a. _____

4b. _____

- 4) a. How many groups of 100 are there?
- b. How many small blocks are there total?




5a. _____

5b. _____

6a. _____

- 5) a. How many groups of 100 are there?
- b. How many small blocks are there total?

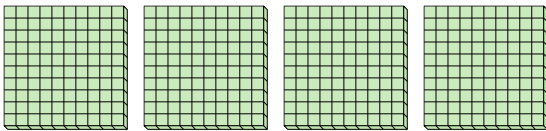


6b. _____

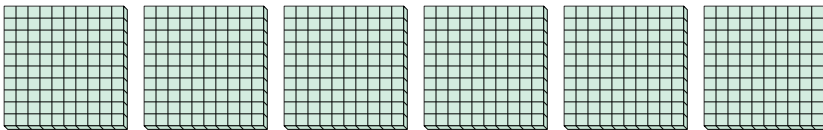
7a. _____

7b. _____

- 6) a. How many groups of 100 are there?
- b. How many small blocks are there total?



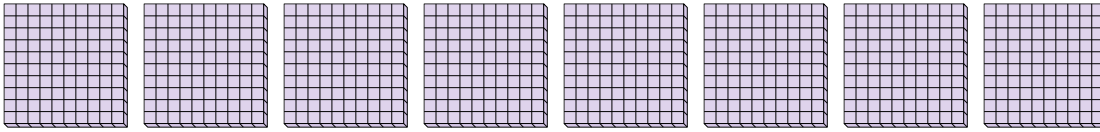
- 7) a. How many groups of 100 are there?
- b. How many small blocks are there total?



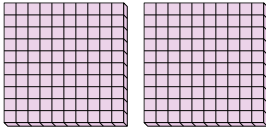


Use the groups to answer each question.

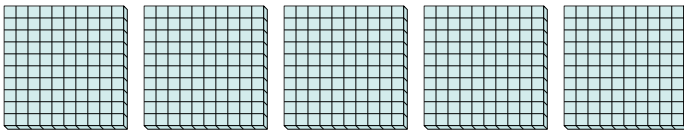
- 1) a. How many groups of 100 are there?
b. How many small blocks are there total?



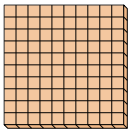
- 2) a. How many groups of 100 are there?
b. How many small blocks are there total?



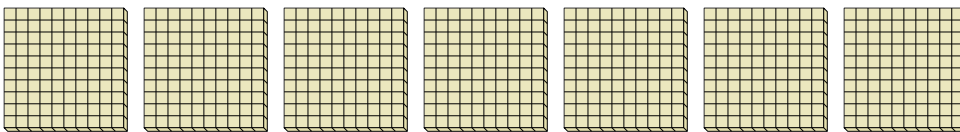
- 3) a. How many groups of 100 are there?
b. How many small blocks are there total?



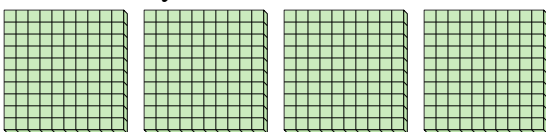
- 4) a. How many groups of 100 are there?
b. How many small blocks are there total?



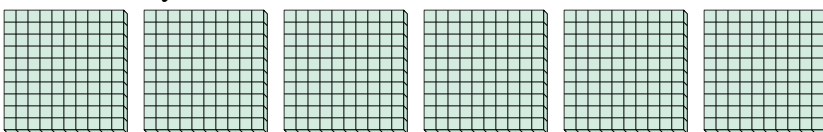
- 5) a. How many groups of 100 are there?
b. How many small blocks are there total?



- 6) a. How many groups of 100 are there?
b. How many small blocks are there total?



- 7) a. How many groups of 100 are there?
b. How many small blocks are there total?



Answers

1a. 8

1b. 800

2a. 2

2b. 200

3a. 5

3b. 500

4a. 1

4b. 100

5a. 7

5b. 700

6a. 4

6b. 400

7a. 6

7b. 600