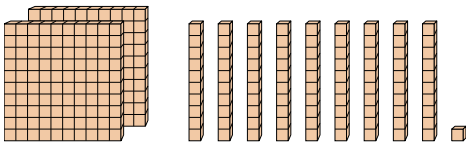




Count the total number of small blocks.

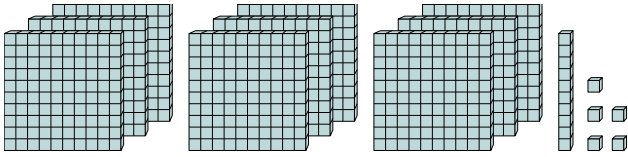
Answers

1)



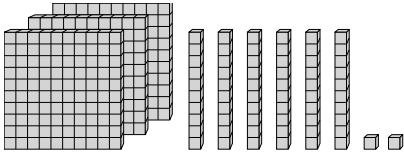
1. _____

2)



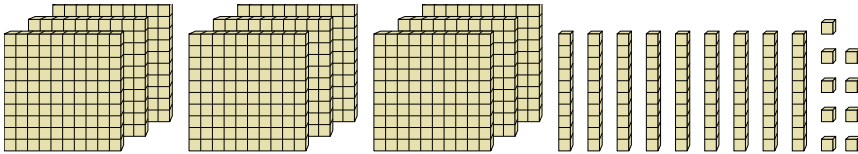
2. _____

3)



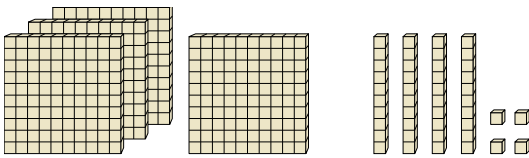
3. _____

4)



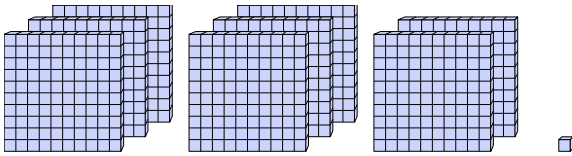
4. _____

5)



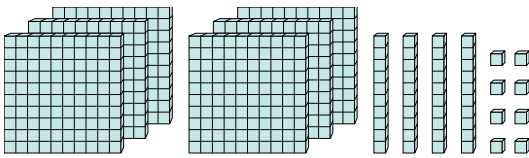
5. _____

6)



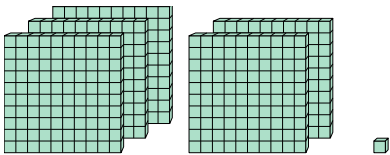
6. _____

7)



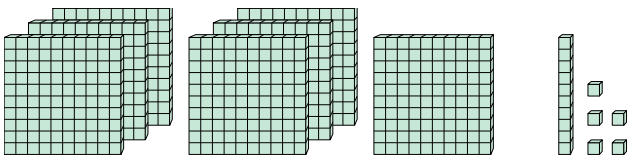
7. _____

8)



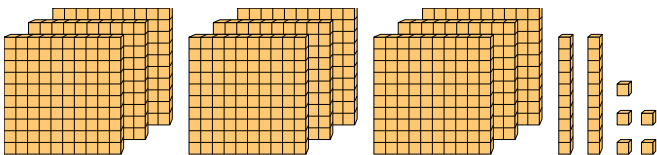
8. _____

9)



9. _____

10)



10. _____



Count the total number of small blocks.

1)

2)

3)

4)

5)

6)

7)

8)

9)

10)

Answers

1. 291
2. 915
3. 362
4. 999
5. 444
6. 801
7. 648
8. 501
9. 715
10. 925