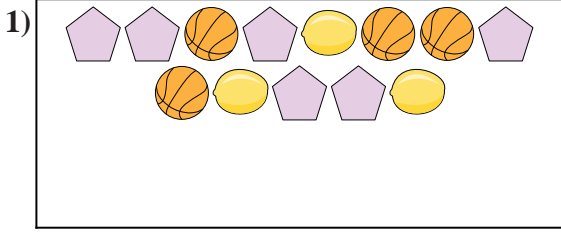


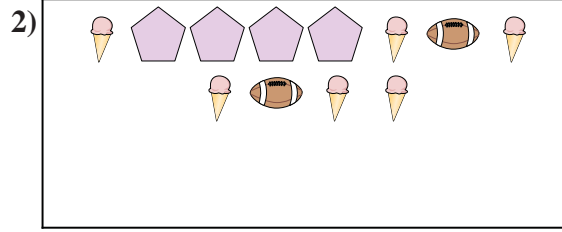


Compare the number of shapes.



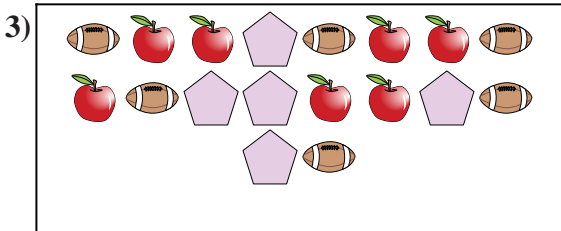
Are there more or more ?

- A.
- B.



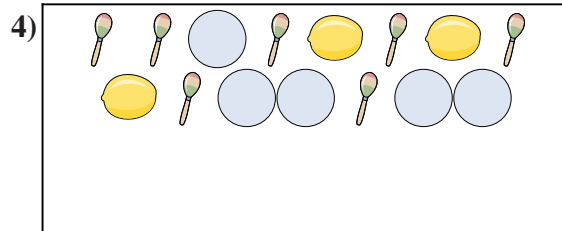
Are there more or more ?

- A.
- B.




Are there more or more ?

- A.
- B.



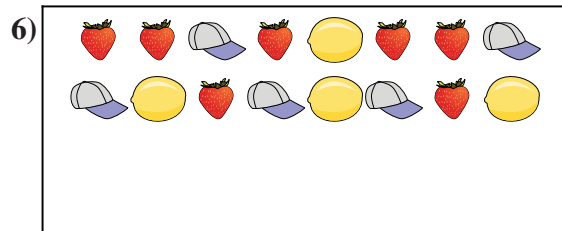
Are there less or less ?

- A.
- B.



Are there less or less ?

- A.
- B.



Are there more or more ?

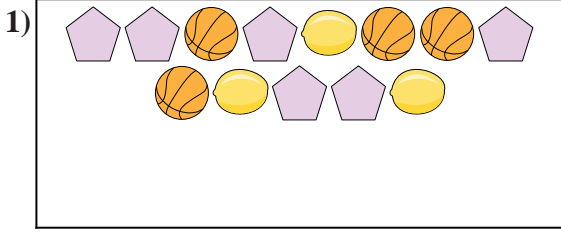
- A.
- B.

Answers

- 1. _____
- 2. _____
- 3. _____
- 4. _____
- 5. _____
- 6. _____

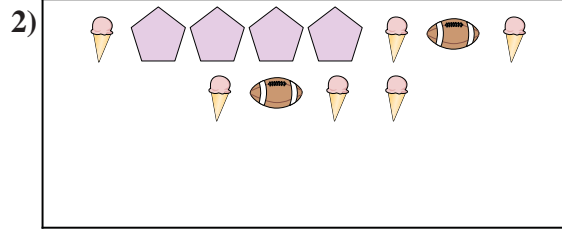


Compare the number of shapes.



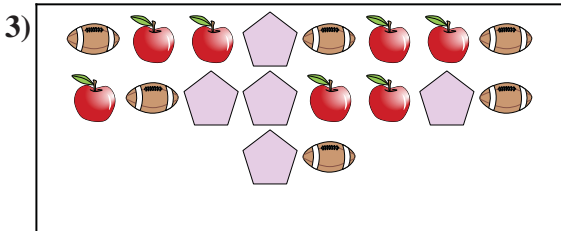
Are there more or more ?

- A.
- B.



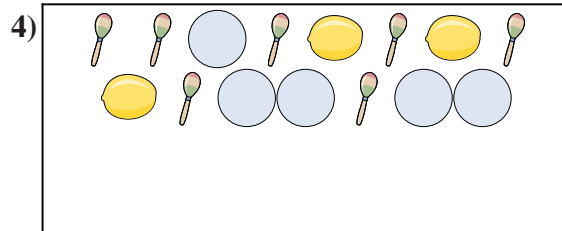
Are there more or more ?

- A.
- B.




Are there more or more ?

- A.
- B.



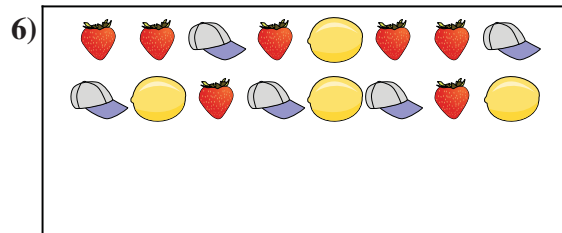
Are there less or less ?

- A.
- B.



Are there less or less ?

- A.
- B.



Are there more or more ?

- A.
- B.

Answers

- 1. **A**
- 2. **B**
- 3. **B**
- 4. **A**
- 5. **B**
- 6. **B**