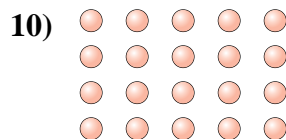
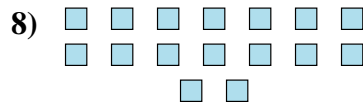
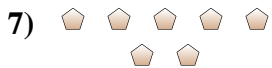
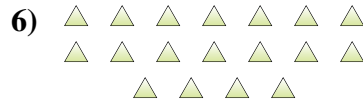
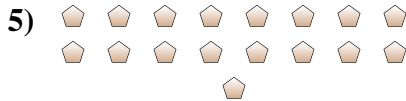
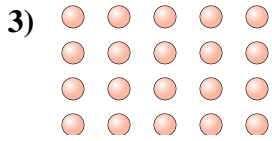




Determine if the number of shapes is even or odd.



Answers

- 1. _____
- 2. _____
- 3. _____
- 4. _____
- 5. _____
- 6. _____
- 7. _____
- 8. _____
- 9. _____
- 10. _____



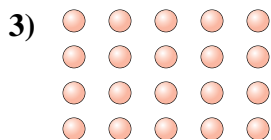
Determine if the number of shapes is even or odd.



10



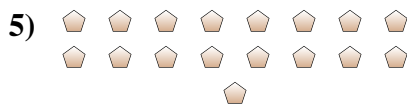
5



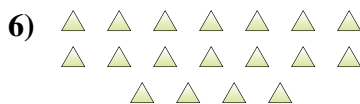
20



9



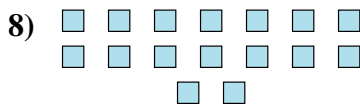
17



18



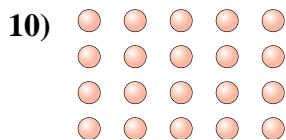
7



16



15



20

Answers

1. even

2. odd

3. even

4. odd

5. odd

6. even

7. odd

8. even

9. odd

10. even