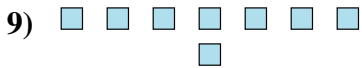
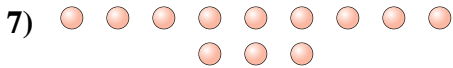
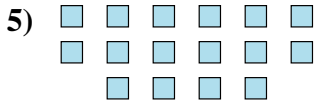
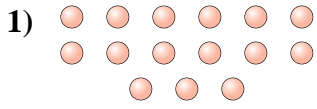




Determine if the number of shapes is even or odd.

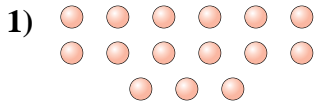


Answers

- 1. \_\_\_\_\_
- 2. \_\_\_\_\_
- 3. \_\_\_\_\_
- 4. \_\_\_\_\_
- 5. \_\_\_\_\_
- 6. \_\_\_\_\_
- 7. \_\_\_\_\_
- 8. \_\_\_\_\_
- 9. \_\_\_\_\_
- 10. \_\_\_\_\_



Determine if the number of shapes is even or odd.



15



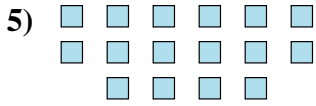
9



6



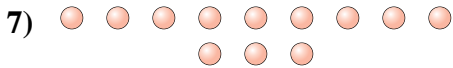
14



16



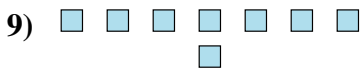
6



12



16



8



5

Answers

1. Odd

2. Odd

3. Even

4. Even

5. Even

6. Even

7. Even

8. Even

9. Even

10. Odd