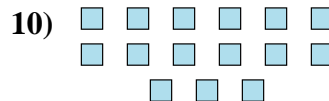
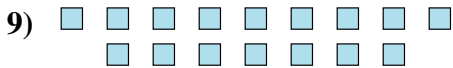
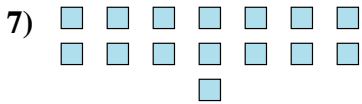
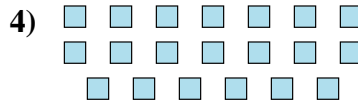
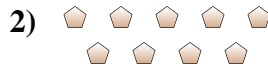




Determine if the number of shapes is even or odd.



Answers

1. _____

2. _____

3. _____

4. _____

5. _____

6. _____

7. _____

8. _____

9. _____

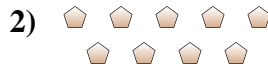
10. _____



Determine if the number of shapes is even or odd.



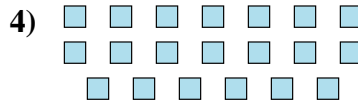
16



9



14



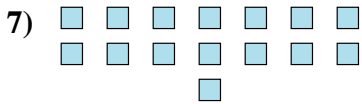
20



15



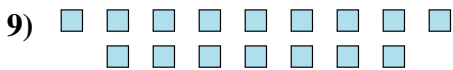
12



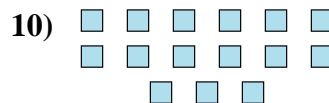
15



5



16



15

Answers

1. Even

2. Odd

3. Even

4. Even

5. Odd

6. Even

7. Odd

8. Odd

9. Even

10. Odd