




Determine if the number of shapes in the box is even or odd.

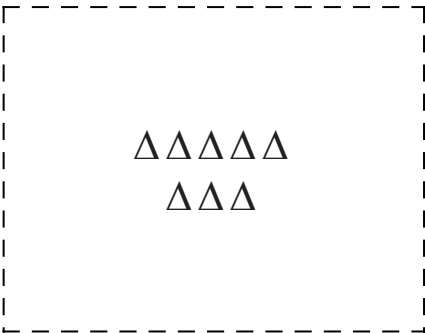
1)



2)



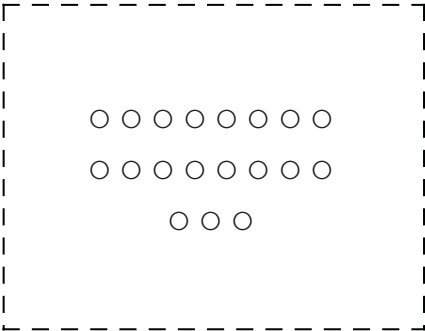
3)




4)



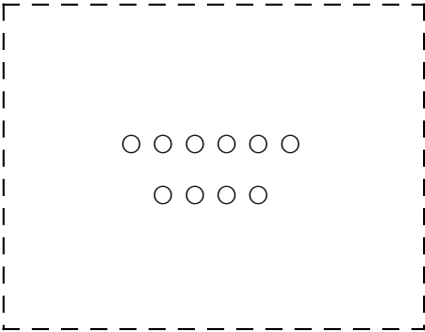
5)




6)




7)




8)



9)



10)



Answers

1. _____

2. _____

3. _____

4. _____

5. _____

6. _____

7. _____

8. _____

9. _____

10. _____



Determine if the number of shapes in the box is even or odd.

1) **9**

2) **13**

3) **8**

4) **11**

5) **19**

6) **16**

7) **10**

8) **15**

9) **20**

10) **17**

Answers

1. Odd

2. Odd

3. Even

4. Odd

5. Odd

6. Even

7. Even

8. Odd

9. Even

10. Odd