


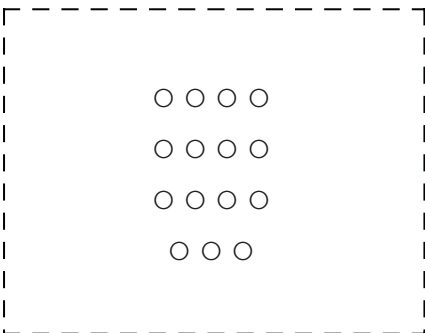


Determine if the number of shapes in the box is even or odd.


1)



2)




3)




4)



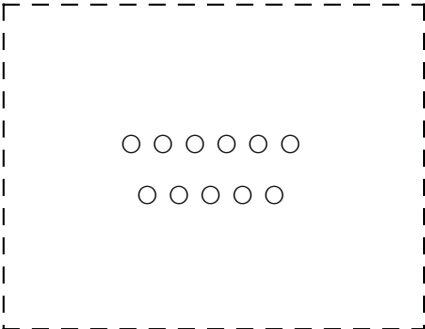
5)




6)




7)




8)



9)



10)



Answers

1. _____
2. _____
3. _____
4. _____
5. _____
6. _____
7. _____
8. _____
9. _____
10. _____



Determine if the number of shapes in the box is even or odd.

1) **20**

2) **15**

3) **18**

4) **12**

5) **14**

6) **6**

7) **11**

8) **10**

9) **7**

10) **9**

Answers

1. Even

2. Odd

3. Even

4. Even

5. Even

6. Even

7. Odd

8. Even

9. Odd

10. Odd