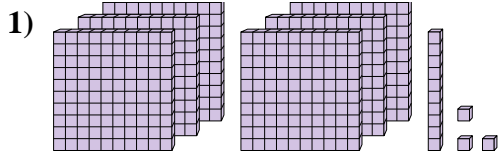


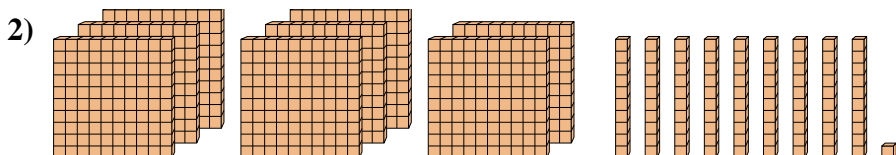


Find the value each set of blocks represents.

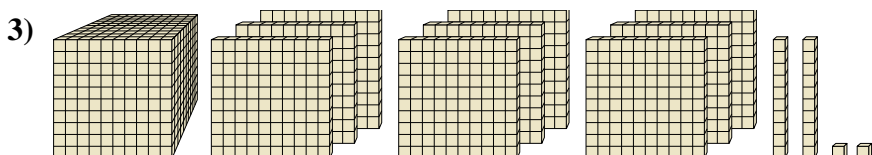
Answers



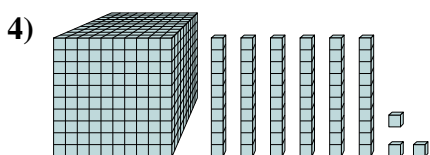
1. _____



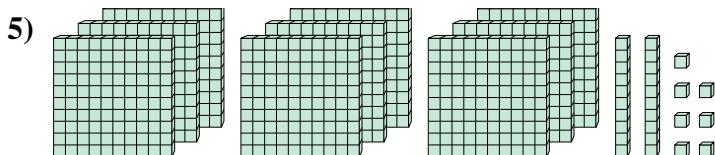
2. _____



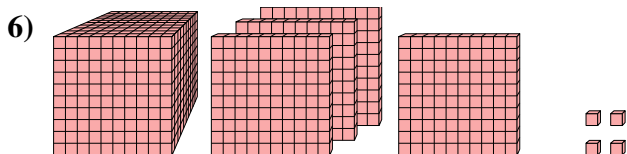
3. _____



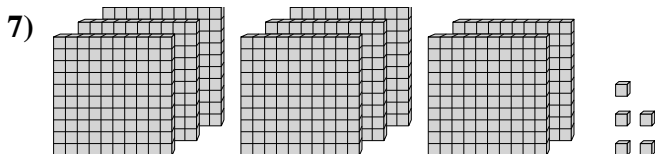
4. _____



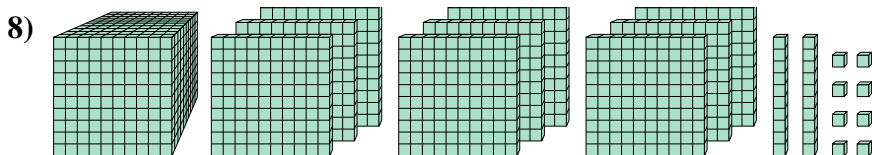
5. _____



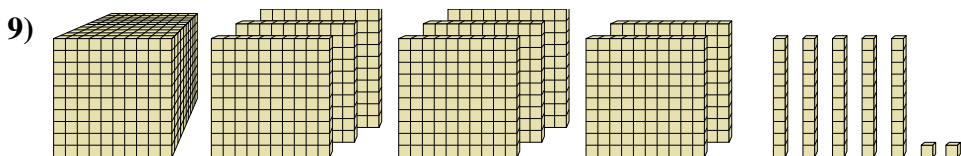
6. _____



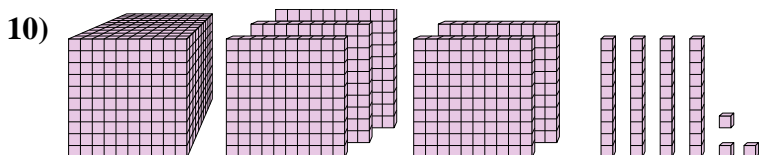
7. _____



8. _____



9. _____



10. _____



Find the value each set of blocks represents.

1)

2)

3)

4)

5)

6)

7)

8)

9)

10)

Answers

1. 613

2. 891

3. 1,922

4. 1,063

5. 927

6. 1,404

7. 805

8. 1,928

9. 1,852

10. 1,543