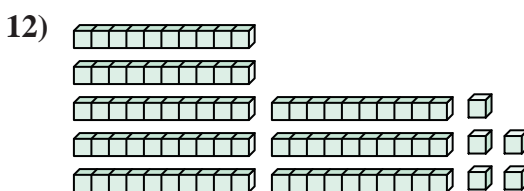
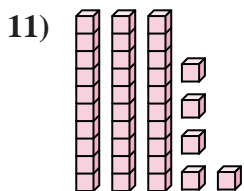
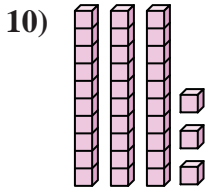
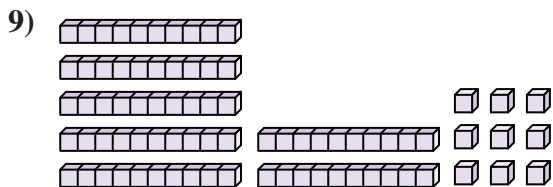
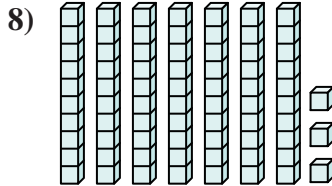
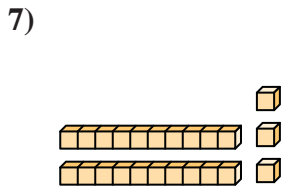
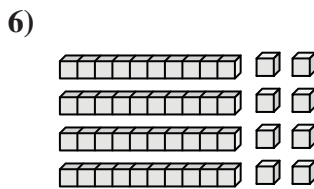
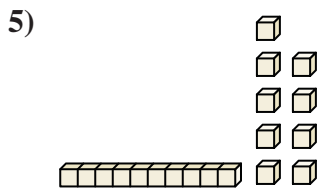
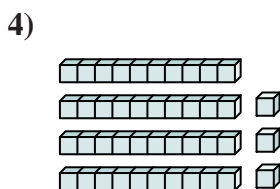
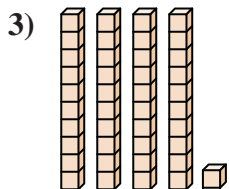
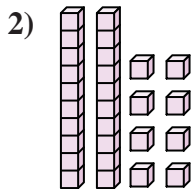
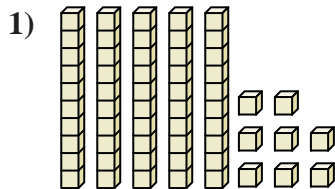




Count the total number of small blocks.

Answers



1. \_\_\_\_\_

2. \_\_\_\_\_

3. \_\_\_\_\_

4. \_\_\_\_\_

5. \_\_\_\_\_

6. \_\_\_\_\_

7. \_\_\_\_\_

8. \_\_\_\_\_

9. \_\_\_\_\_

10. \_\_\_\_\_

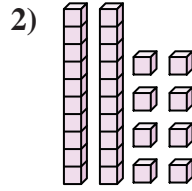
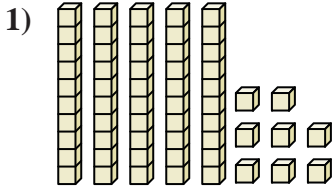
11. \_\_\_\_\_

12. \_\_\_\_\_



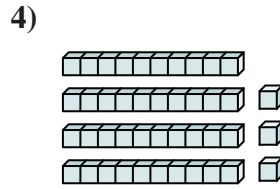
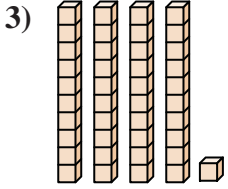
Count the total number of small blocks.

Answers



1. 58

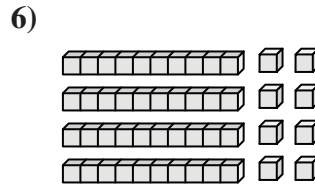
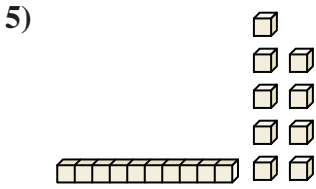
2. 28



3. 41

4. 43

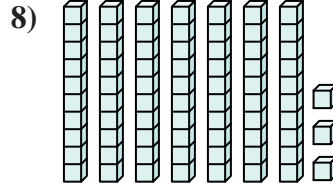
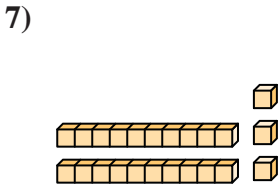
5. 19



6. 48

7. 23

8. 73

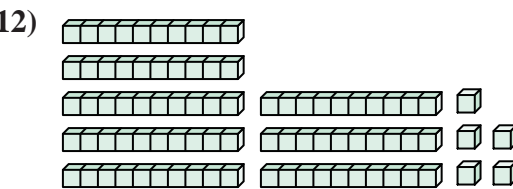
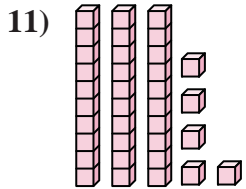
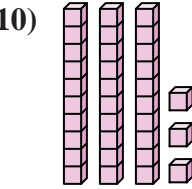
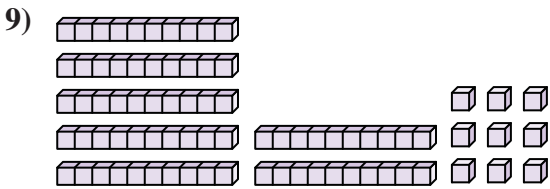


9. 79

10. 33

11. 35

12. 85





Count the total number of small blocks.

**Answers**

58

43

73

41

19

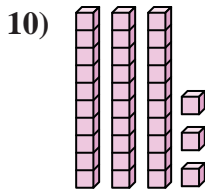
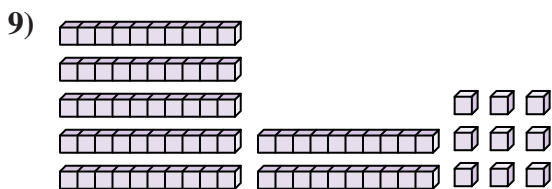
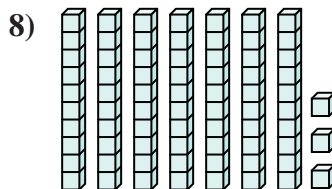
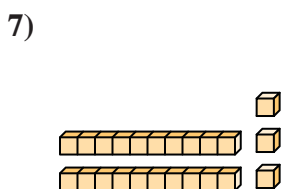
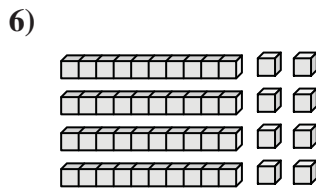
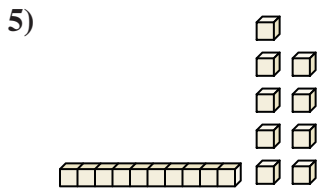
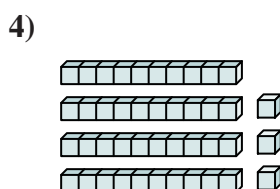
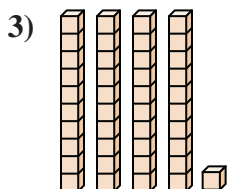
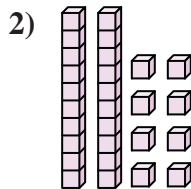
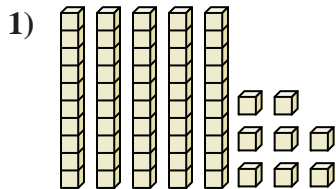
48

79

28

33

23



1. \_\_\_\_\_

2. \_\_\_\_\_

3. \_\_\_\_\_

4. \_\_\_\_\_

5. \_\_\_\_\_

6. \_\_\_\_\_

7. \_\_\_\_\_

8. \_\_\_\_\_

9. \_\_\_\_\_

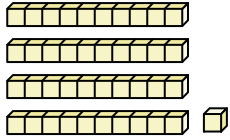
10. \_\_\_\_\_



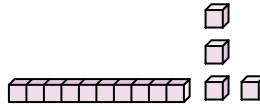
Count the total number of small blocks.

Answers

1)



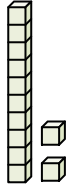
2)



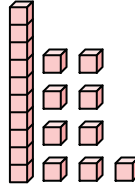
1. \_\_\_\_\_

2. \_\_\_\_\_

3)



4)

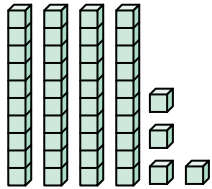


3. \_\_\_\_\_

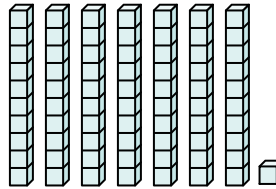
4. \_\_\_\_\_

5. \_\_\_\_\_

5)



6)

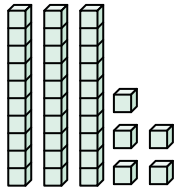


6. \_\_\_\_\_

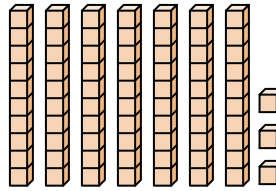
7. \_\_\_\_\_

8. \_\_\_\_\_

7)



8)



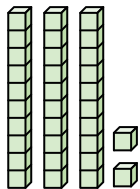
9. \_\_\_\_\_

10. \_\_\_\_\_

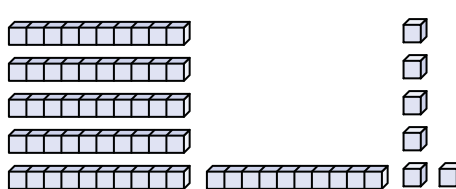
11. \_\_\_\_\_

12. \_\_\_\_\_

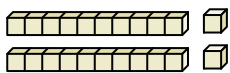
9)



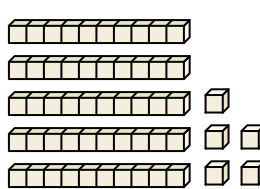
10)



11)



12)

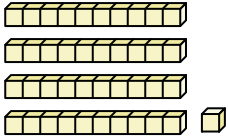




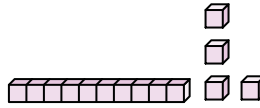
Count the total number of small blocks.

Answers

1)



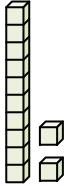
2)



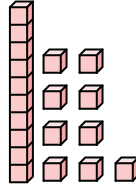
1. 41

2. 14

3)



4)

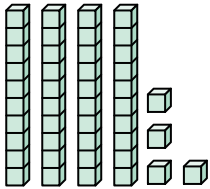


3. 12

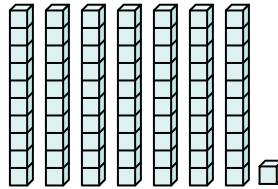
4. 19

5. 44

5)



6)

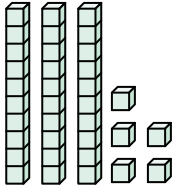


6. 71

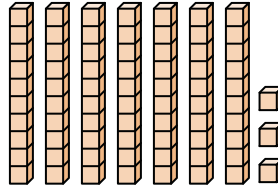
7. 35

8. 73

7)



8)

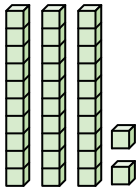


9. 32

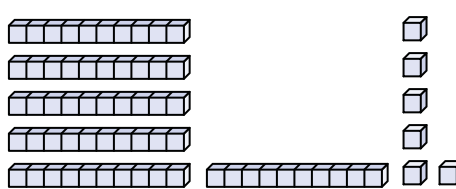
10. 66

11. 22

9)

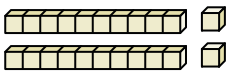


10)

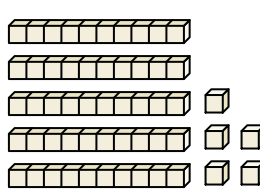


12. 55

11)



12)





Count the total number of small blocks.

Answers

66

14

41

19

71

44

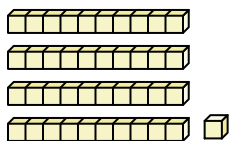
32

35

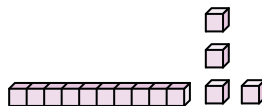
12

73

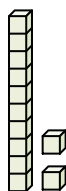
1)



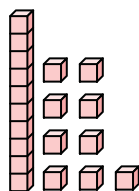
2)



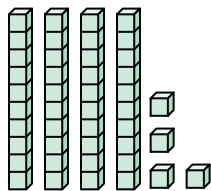
3)



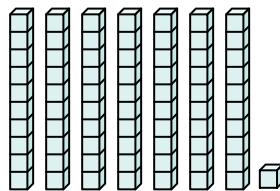
4)



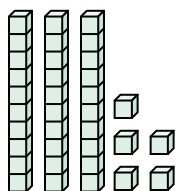
5)



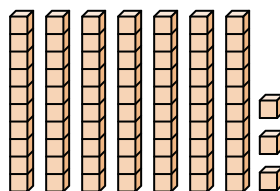
6)



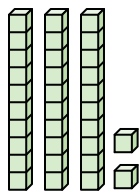
7)



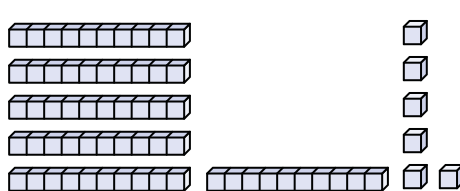
8)



9)



10)



1. \_\_\_\_\_

2. \_\_\_\_\_

3. \_\_\_\_\_

4. \_\_\_\_\_

5. \_\_\_\_\_

6. \_\_\_\_\_

7. \_\_\_\_\_

8. \_\_\_\_\_

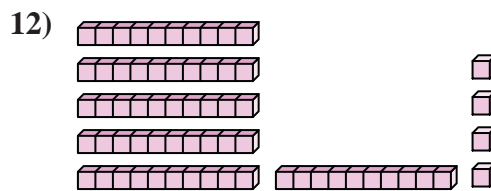
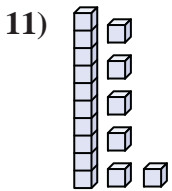
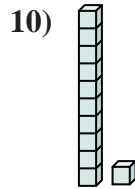
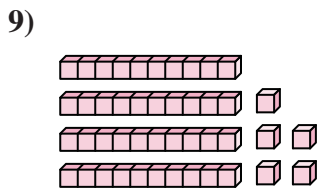
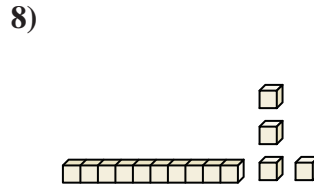
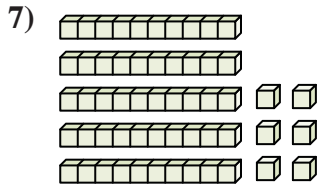
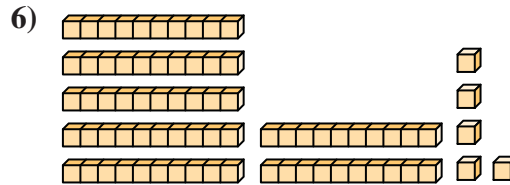
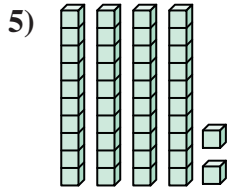
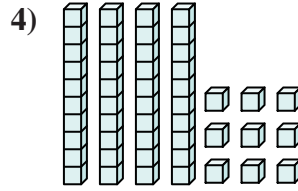
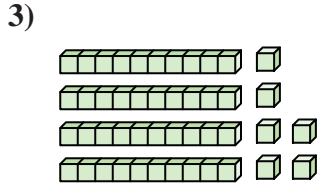
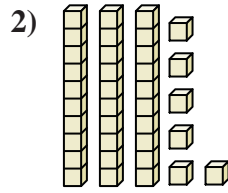
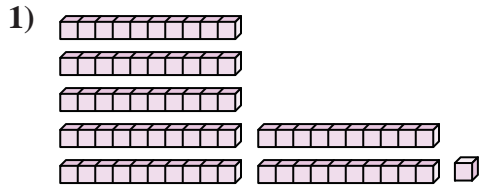
9. \_\_\_\_\_

10. \_\_\_\_\_



Count the total number of small blocks.

Answers



1. \_\_\_\_\_

2. \_\_\_\_\_

3. \_\_\_\_\_

4. \_\_\_\_\_

5. \_\_\_\_\_

6. \_\_\_\_\_

7. \_\_\_\_\_

8. \_\_\_\_\_

9. \_\_\_\_\_

10. \_\_\_\_\_

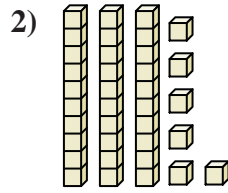
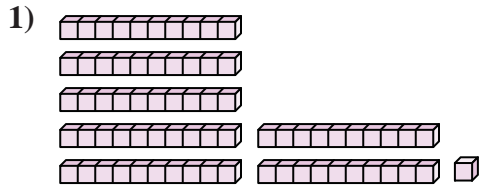
11. \_\_\_\_\_

12. \_\_\_\_\_



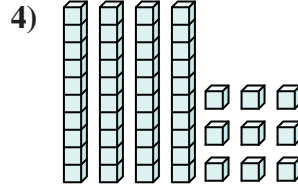
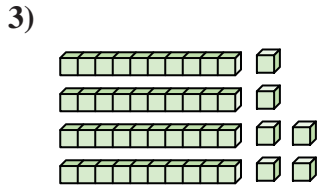
Count the total number of small blocks.

Answers



1. 71

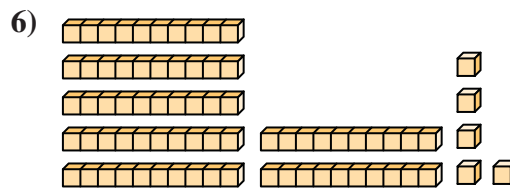
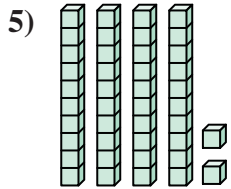
2. 36



3. 46

4. 49

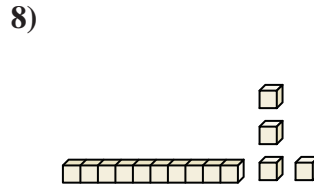
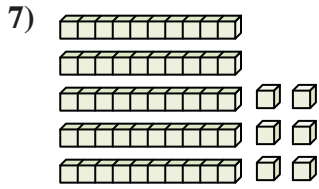
5. 42



6. 75

7. 56

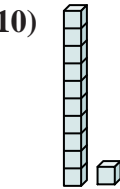
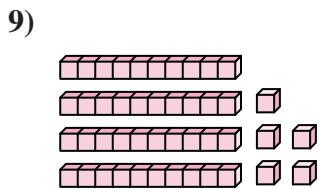
8. 14



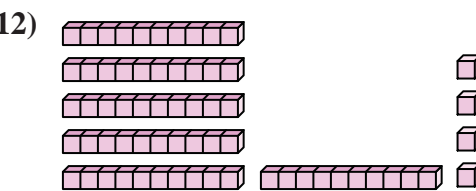
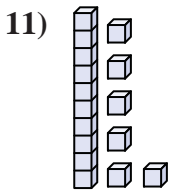
9. 45

10. 11

11. 16



12. 64





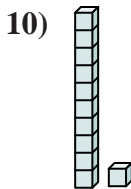
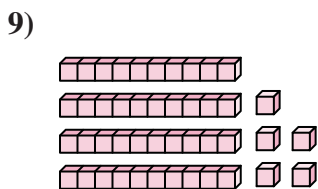

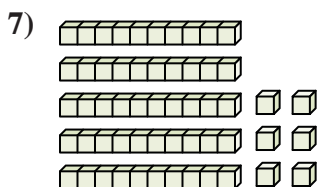
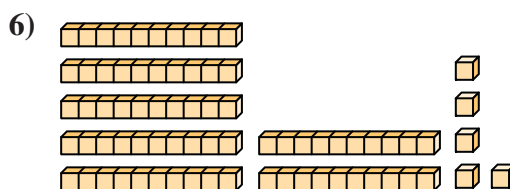
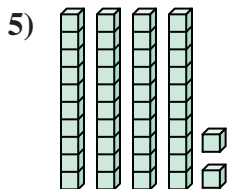
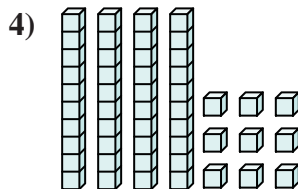
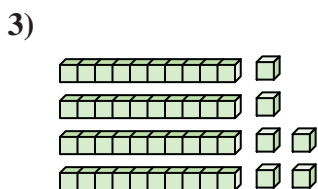
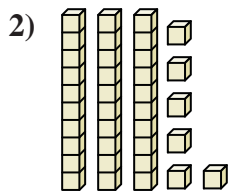
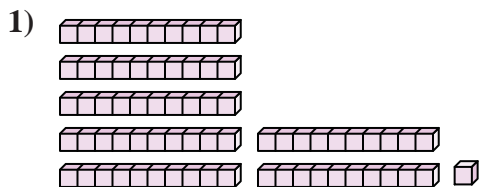


Count the total number of small blocks.

Answers

36	42	49	56	71
46	45	75	14	11

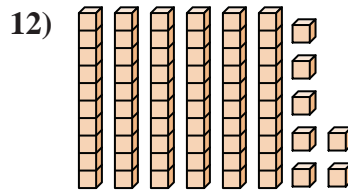
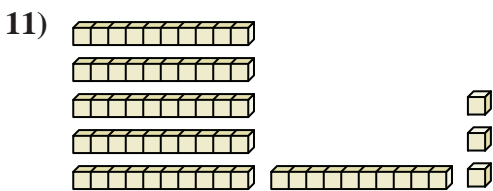
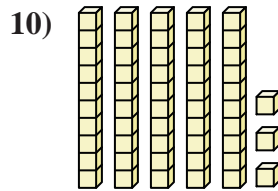
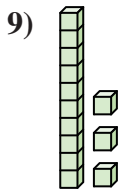
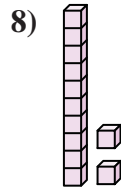
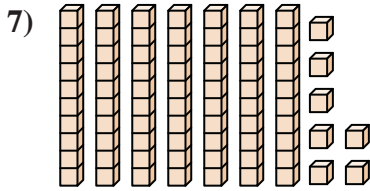
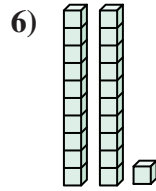
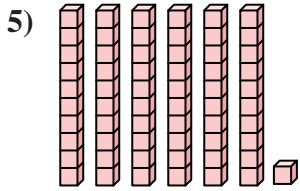
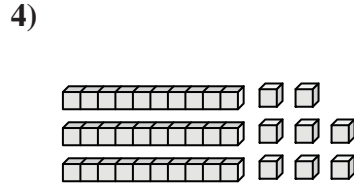
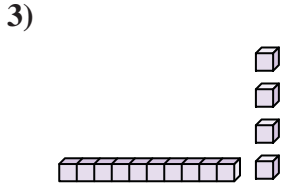
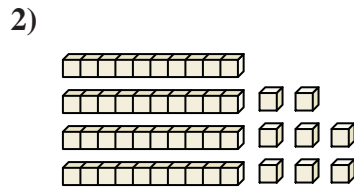
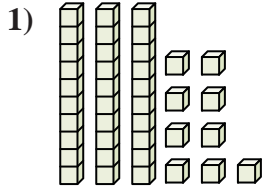
1. \_\_\_\_\_
2. \_\_\_\_\_
3. \_\_\_\_\_
4. \_\_\_\_\_
5. \_\_\_\_\_
6. \_\_\_\_\_
7. \_\_\_\_\_
8. \_\_\_\_\_
9. \_\_\_\_\_
10. \_\_\_\_\_





Count the total number of small blocks.

Answers

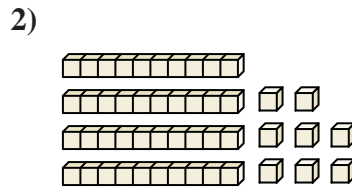
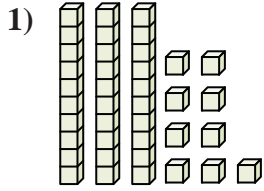


- 1. \_\_\_\_\_
- 2. \_\_\_\_\_
- 3. \_\_\_\_\_
- 4. \_\_\_\_\_
- 5. \_\_\_\_\_
- 6. \_\_\_\_\_
- 7. \_\_\_\_\_
- 8. \_\_\_\_\_
- 9. \_\_\_\_\_
- 10. \_\_\_\_\_
- 11. \_\_\_\_\_
- 12. \_\_\_\_\_

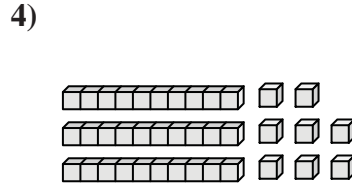
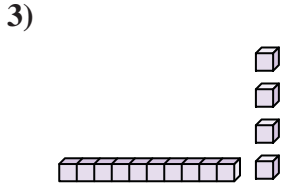


Count the total number of small blocks.

Answers

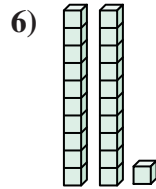
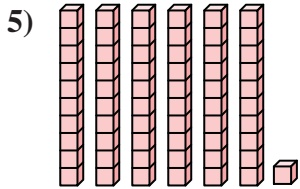


1. 39



2. 48

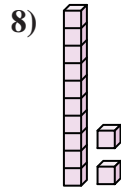
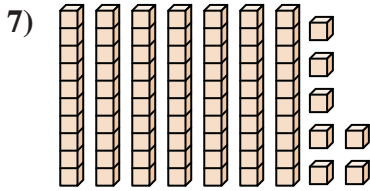
3. 14



4. 38

5. 61

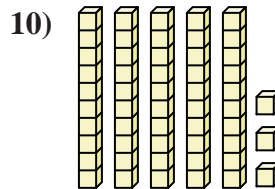
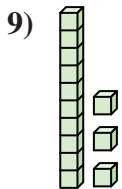
6. 21



7. 77

8. 12

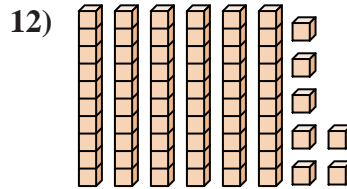
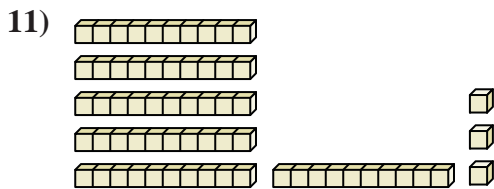
9. 13



10. 53

11. 63

12. 67





Count the total number of small blocks.

Answers

13

21

38

61

12

48

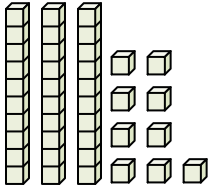
14

39

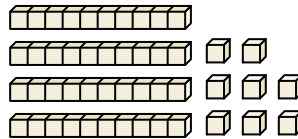
53

77

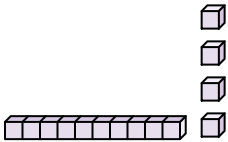
1)



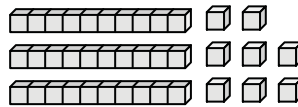
2)



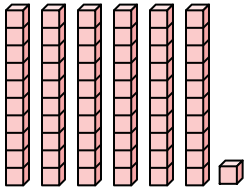
3)



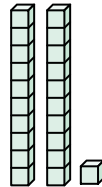
4)



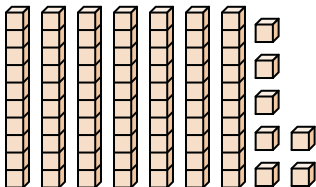
5)



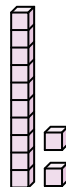
6)



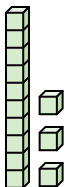
7)



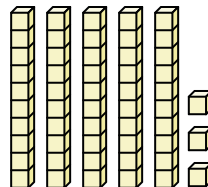
8)



9)



10)

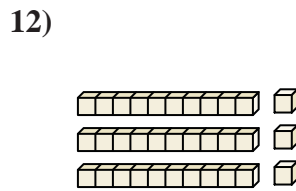
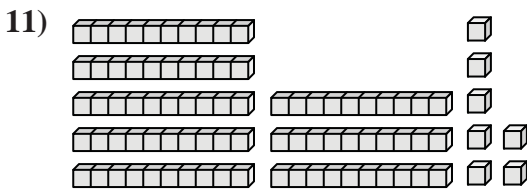
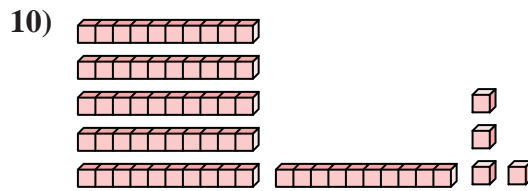
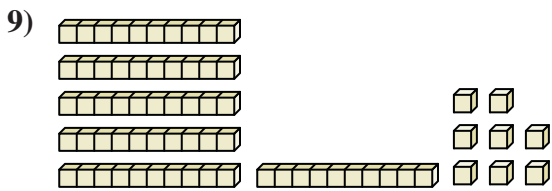
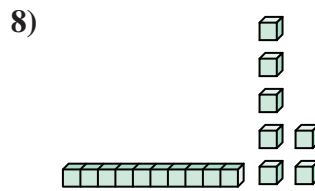
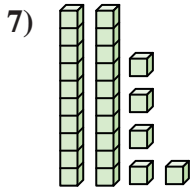
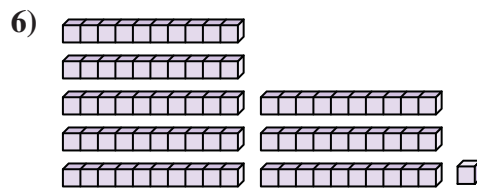
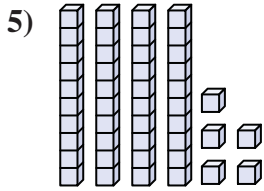
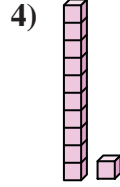
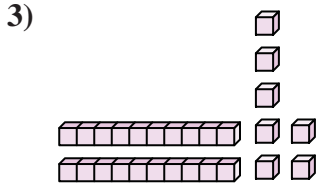
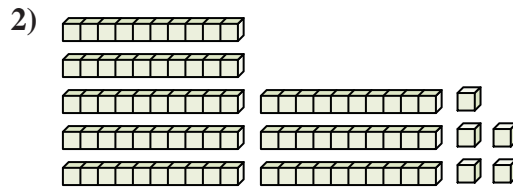
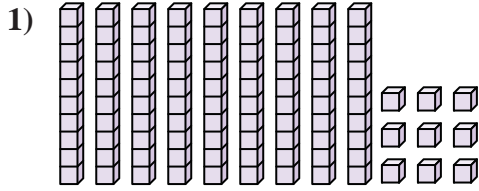


1. \_\_\_\_\_
2. \_\_\_\_\_
3. \_\_\_\_\_
4. \_\_\_\_\_
5. \_\_\_\_\_
6. \_\_\_\_\_
7. \_\_\_\_\_
8. \_\_\_\_\_
9. \_\_\_\_\_
10. \_\_\_\_\_



Count the total number of small blocks.

Answers

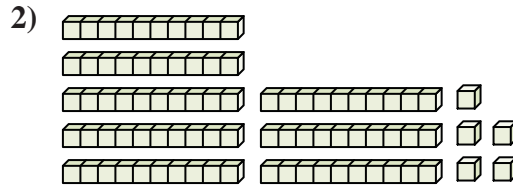
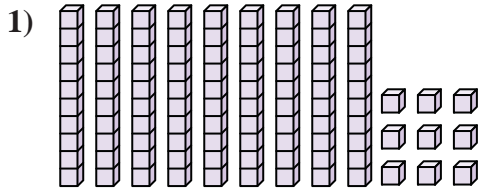


1. \_\_\_\_\_
2. \_\_\_\_\_
3. \_\_\_\_\_
4. \_\_\_\_\_
5. \_\_\_\_\_
6. \_\_\_\_\_
7. \_\_\_\_\_
8. \_\_\_\_\_
9. \_\_\_\_\_
10. \_\_\_\_\_
11. \_\_\_\_\_
12. \_\_\_\_\_

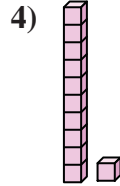
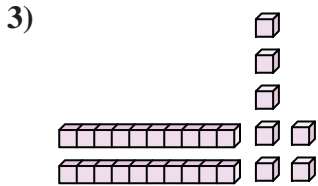


Count the total number of small blocks.

Answers



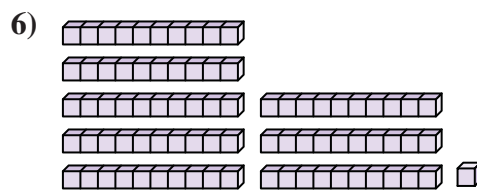
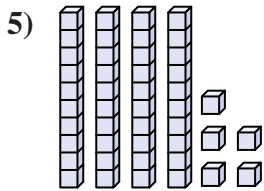
1. 99



2. 85

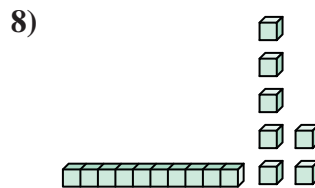
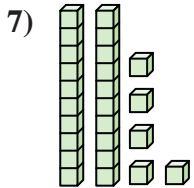
3. 27

4. 11



5. 45

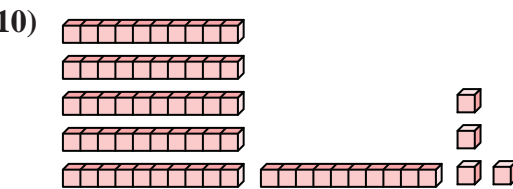
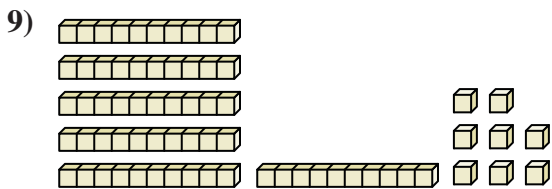
6. 81



7. 25

8. 17

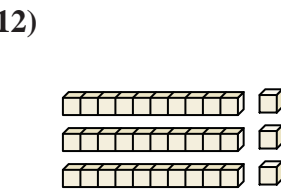
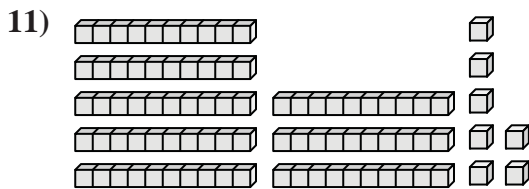
9. 68



10. 64

11. 87

12. 33



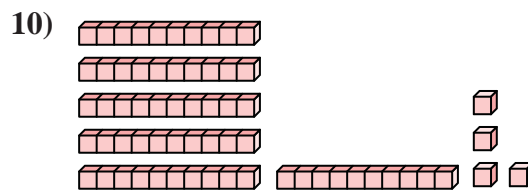
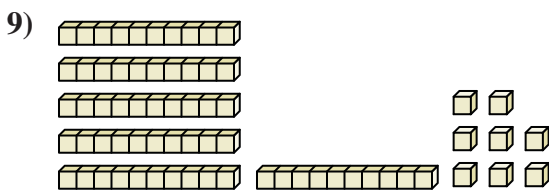
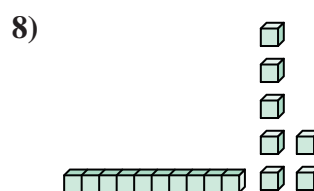
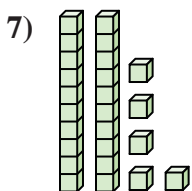
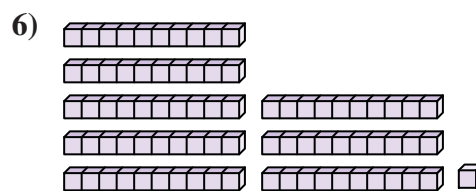
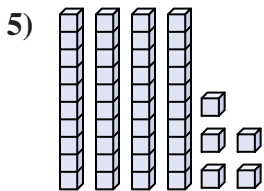
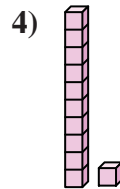
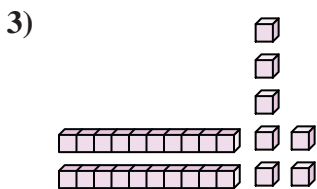
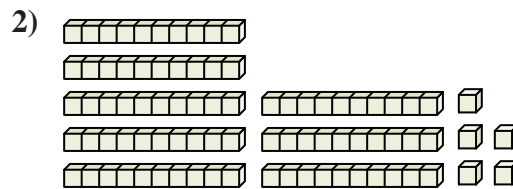
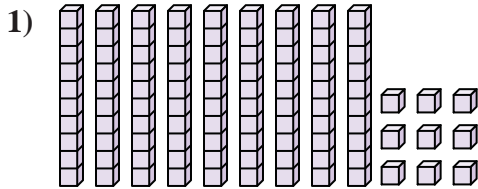


Count the total number of small blocks.

Answers

25	85	45	17	64
99	11	68	27	81

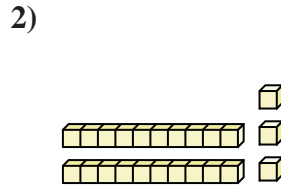
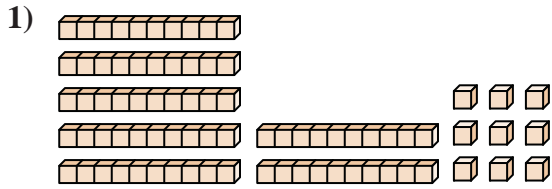
1. \_\_\_\_\_
2. \_\_\_\_\_
3. \_\_\_\_\_
4. \_\_\_\_\_
5. \_\_\_\_\_
6. \_\_\_\_\_
7. \_\_\_\_\_
8. \_\_\_\_\_
9. \_\_\_\_\_
10. \_\_\_\_\_





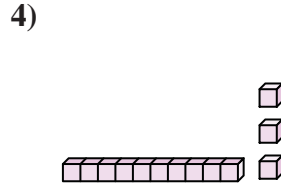
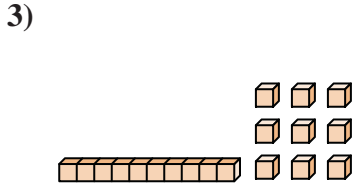
Count the total number of small blocks.

Answers



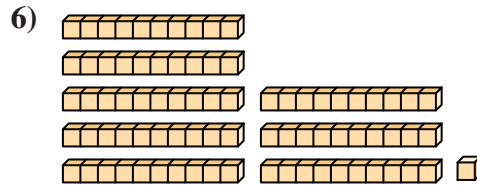
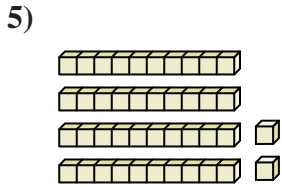
1. \_\_\_\_\_

2. \_\_\_\_\_



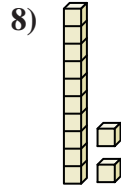
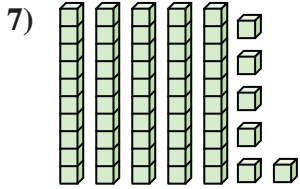
3. \_\_\_\_\_

4. \_\_\_\_\_



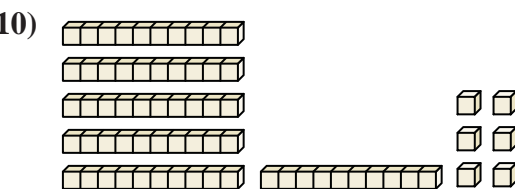
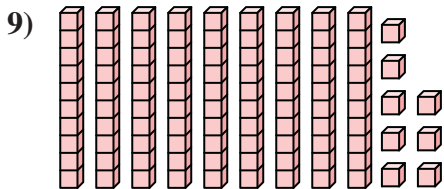
5. \_\_\_\_\_

6. \_\_\_\_\_



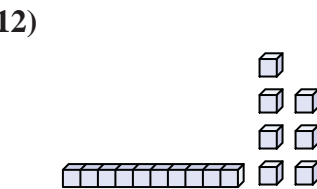
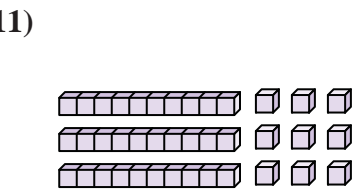
7. \_\_\_\_\_

8. \_\_\_\_\_



9. \_\_\_\_\_

10. \_\_\_\_\_



11. \_\_\_\_\_

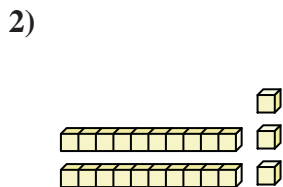
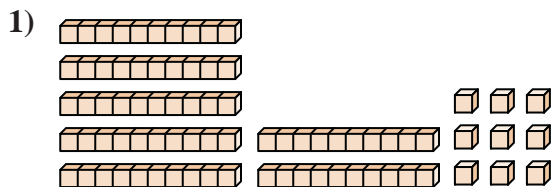
12. \_\_\_\_\_





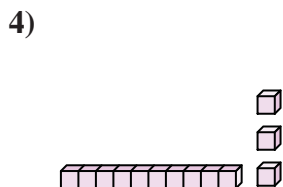
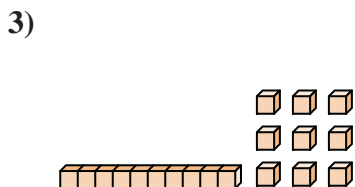
Count the total number of small blocks.

Answers



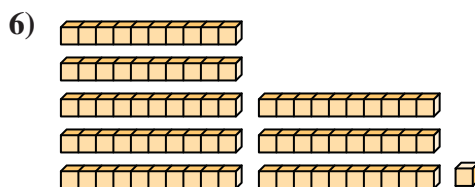
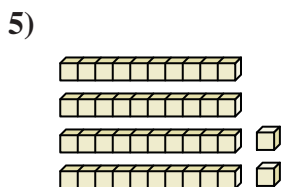
1. 79

2. 23



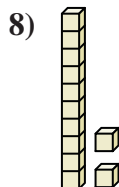
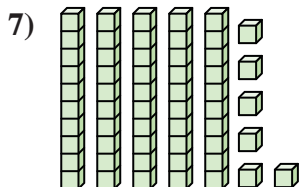
3. 19

4. 13



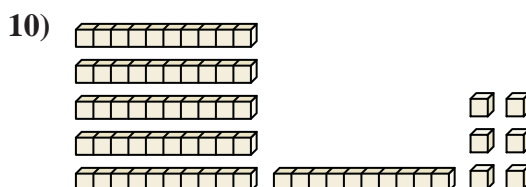
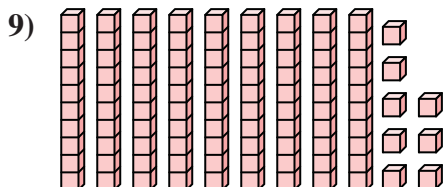
5. 42

6. 81



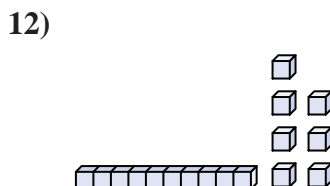
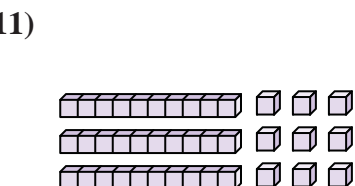
7. 56

8. 12



9. 98

10. 66



11. 39

12. 17

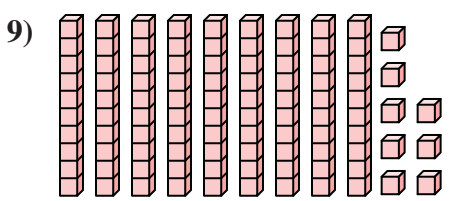
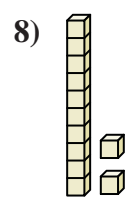
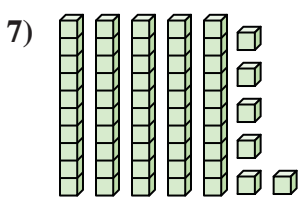
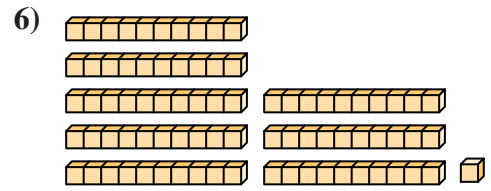
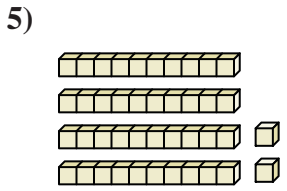
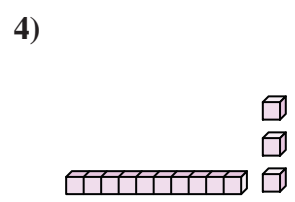
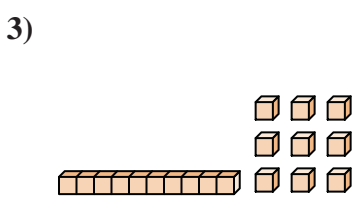
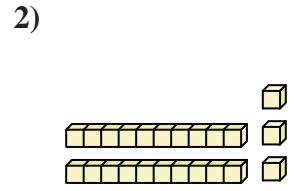
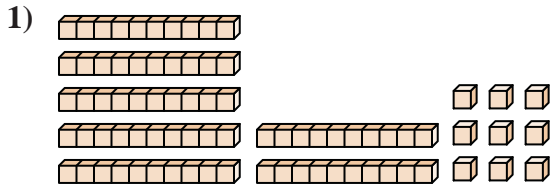


Count the total number of small blocks.

Answers

98	12	13	81	66
23	42	19	79	56

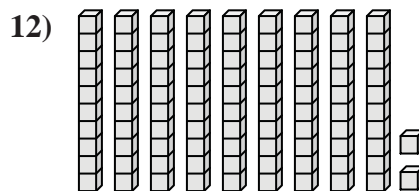
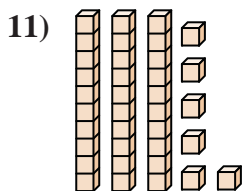
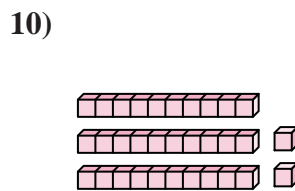
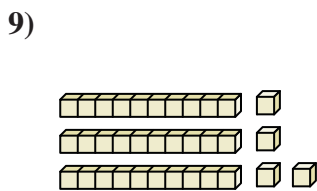
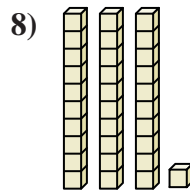
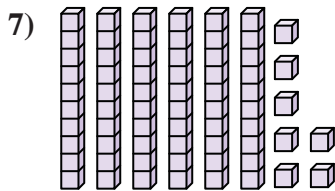
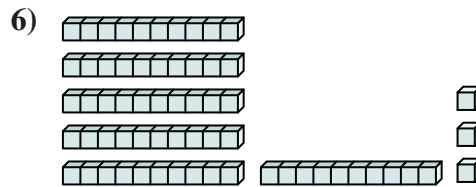
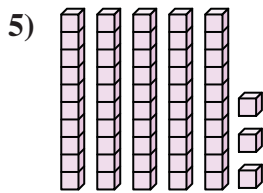
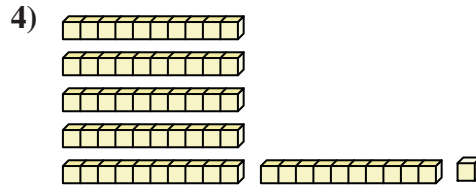
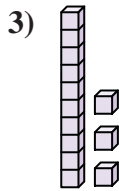
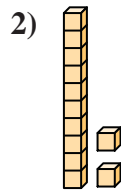
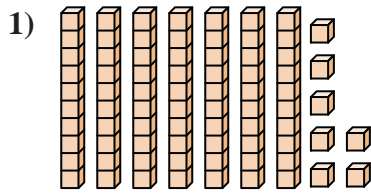
1. \_\_\_\_\_
2. \_\_\_\_\_
3. \_\_\_\_\_
4. \_\_\_\_\_
5. \_\_\_\_\_
6. \_\_\_\_\_
7. \_\_\_\_\_
8. \_\_\_\_\_
9. \_\_\_\_\_
10. \_\_\_\_\_





Count the total number of small blocks.

Answers

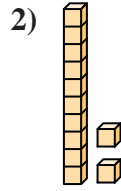
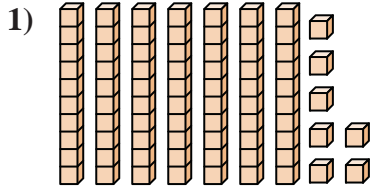


- 1. \_\_\_\_\_
- 2. \_\_\_\_\_
- 3. \_\_\_\_\_
- 4. \_\_\_\_\_
- 5. \_\_\_\_\_
- 6. \_\_\_\_\_
- 7. \_\_\_\_\_
- 8. \_\_\_\_\_
- 9. \_\_\_\_\_
- 10. \_\_\_\_\_
- 11. \_\_\_\_\_
- 12. \_\_\_\_\_



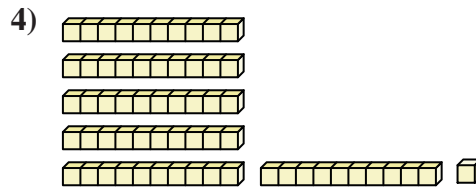
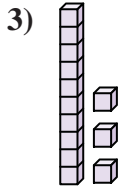
Count the total number of small blocks.

Answers



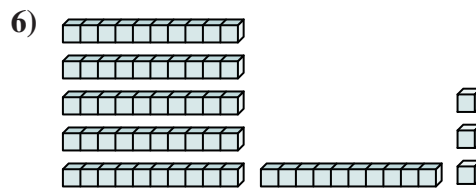
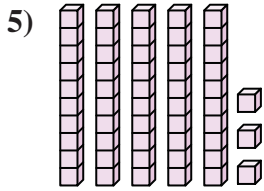
1. 77

2. 12



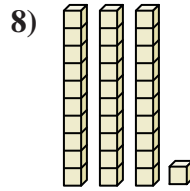
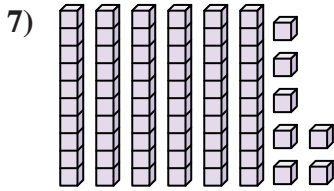
3. 13

4. 61



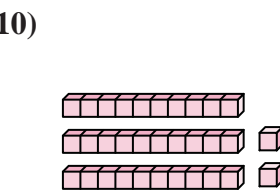
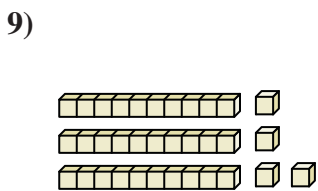
5. 53

6. 63



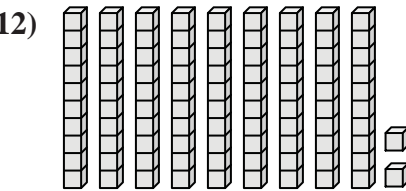
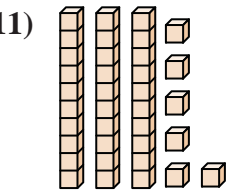
7. 67

8. 31



9. 34

10. 32



11. 36

12. 92



Count the total number of small blocks.

Answers

77

34

67

32

63

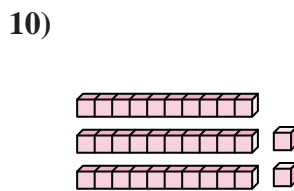
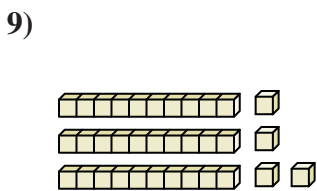
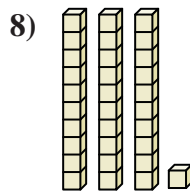
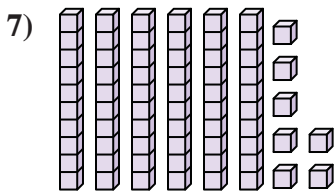
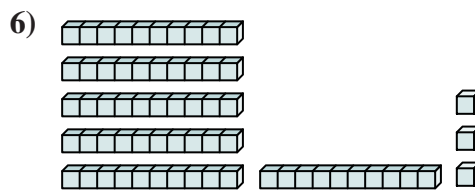

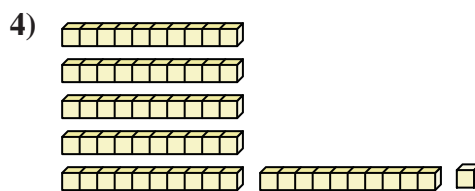
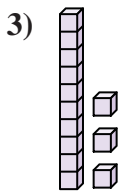
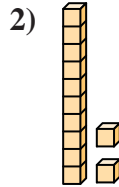
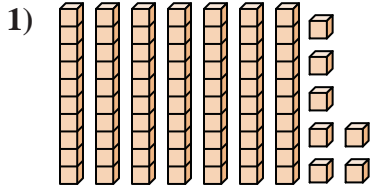
12

31

61

13

53



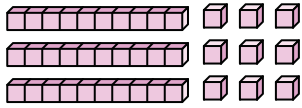
1. \_\_\_\_\_
2. \_\_\_\_\_
3. \_\_\_\_\_
4. \_\_\_\_\_
5. \_\_\_\_\_
6. \_\_\_\_\_
7. \_\_\_\_\_
8. \_\_\_\_\_
9. \_\_\_\_\_
10. \_\_\_\_\_



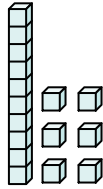
Count the total number of small blocks.

Answers

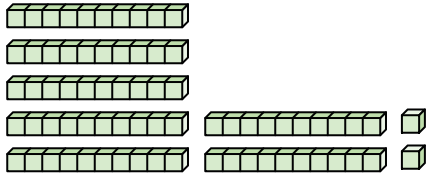
1)



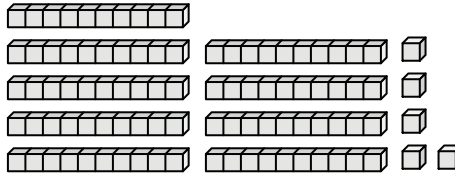
2)



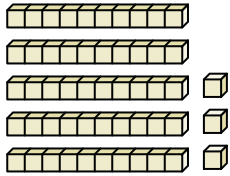
3)



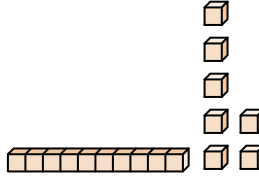
4)



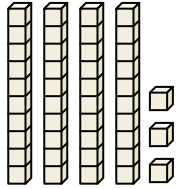
5)



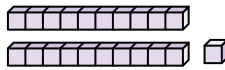
6)



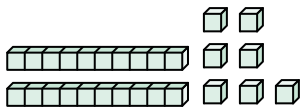
7)



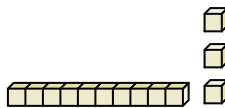
8)




9)



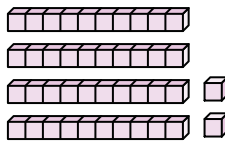
10)



11)



12)



1. \_\_\_\_\_

2. \_\_\_\_\_

3. \_\_\_\_\_

4. \_\_\_\_\_

5. \_\_\_\_\_

6. \_\_\_\_\_

7. \_\_\_\_\_

8. \_\_\_\_\_

9. \_\_\_\_\_

10. \_\_\_\_\_

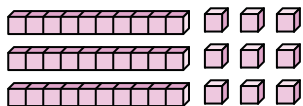
11. \_\_\_\_\_

12. \_\_\_\_\_

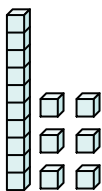


Count the total number of small blocks.

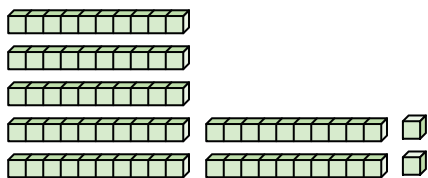
1)



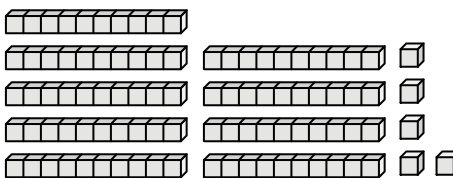
2)



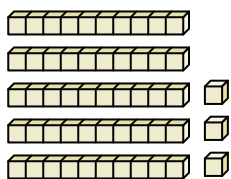
3)



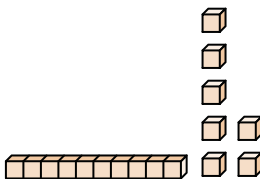
4)



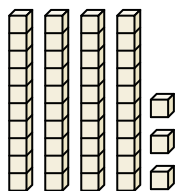
5)



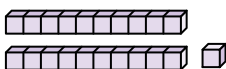
6)



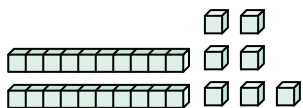
7)




8)



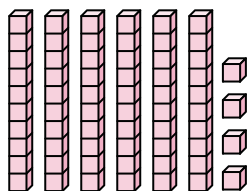
9)



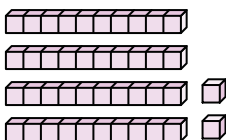
10)



11)



12)



Answers

1. 39

2. 16

3. 72

4. 95

5. 53

6. 17

7. 43

8. 21

9. 27

10. 13

11. 64

12. 42



Count the total number of small blocks.

Answers

13

17

27

53

21

43

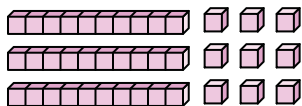
39

72

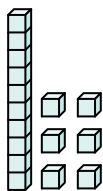
16

95

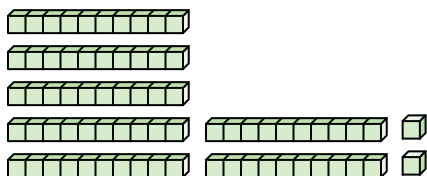
1)



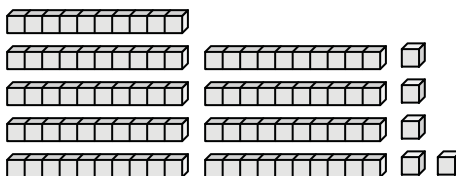
2)



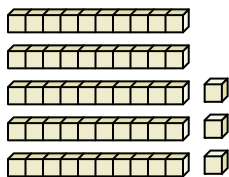
3)



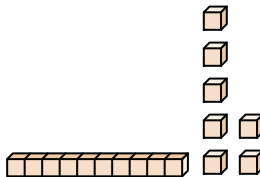
4)



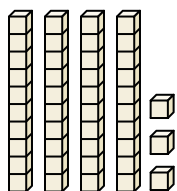
5)



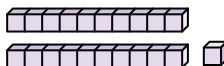
6)



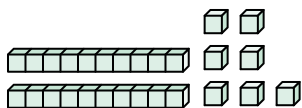
7)




8)



9)



10)



1. \_\_\_\_\_

2. \_\_\_\_\_

3. \_\_\_\_\_

4. \_\_\_\_\_

5. \_\_\_\_\_

6. \_\_\_\_\_

7. \_\_\_\_\_

8. \_\_\_\_\_

9. \_\_\_\_\_

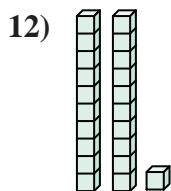
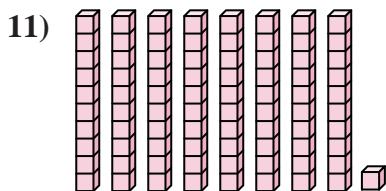
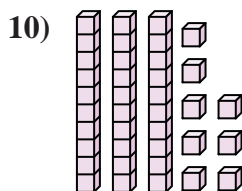
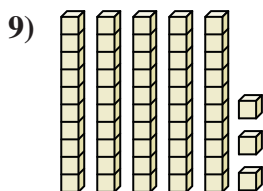
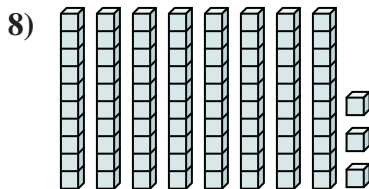
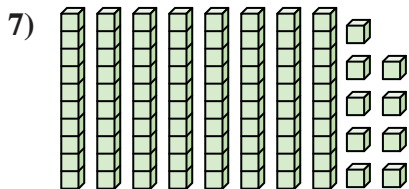
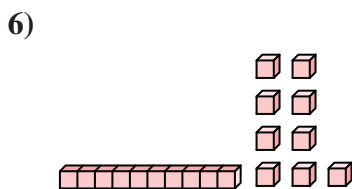
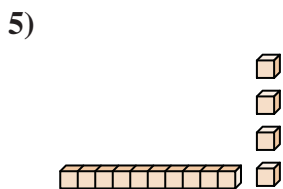
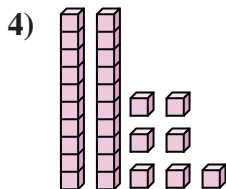
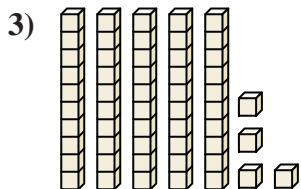
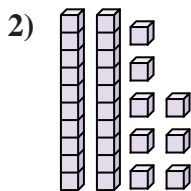
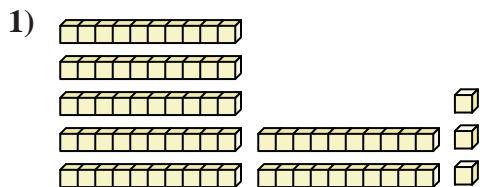
10. \_\_\_\_\_





Count the total number of small blocks.

Answers



1. \_\_\_\_\_

2. \_\_\_\_\_

3. \_\_\_\_\_

4. \_\_\_\_\_

5. \_\_\_\_\_

6. \_\_\_\_\_

7. \_\_\_\_\_

8. \_\_\_\_\_

9. \_\_\_\_\_

10. \_\_\_\_\_

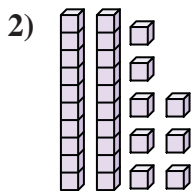
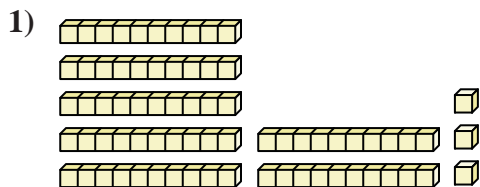
11. \_\_\_\_\_

12. \_\_\_\_\_

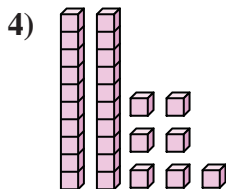
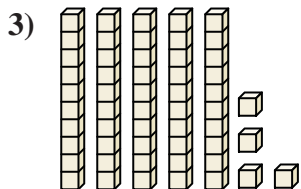


Count the total number of small blocks.

Answers



1. 73

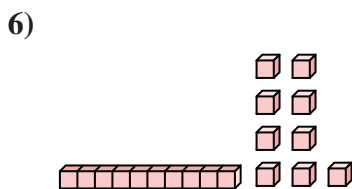
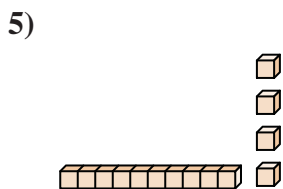


2. 28

3. 54

4. 27

5. 14

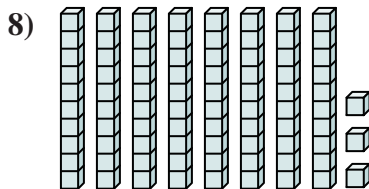
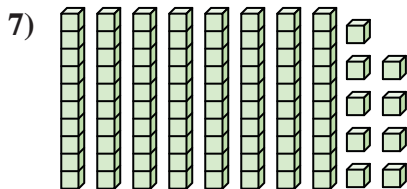


6. 19

7. 89

8. 83

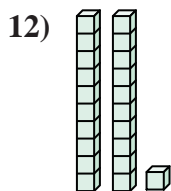
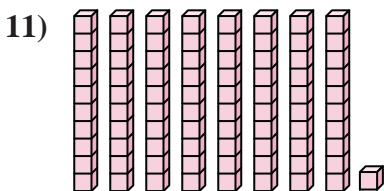
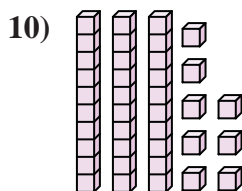
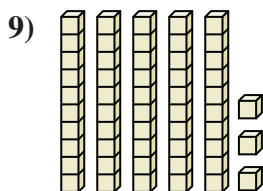
9. 53



10. 38

11. 81

12. 21



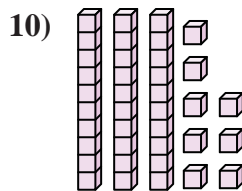

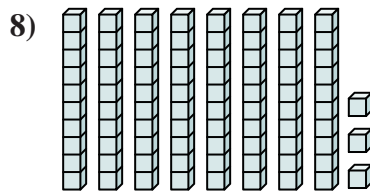
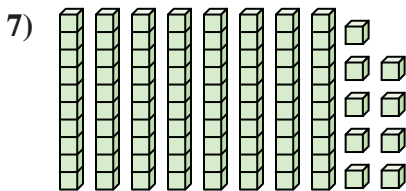
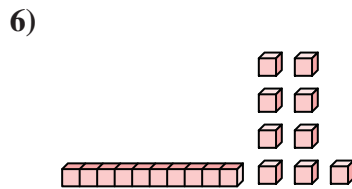
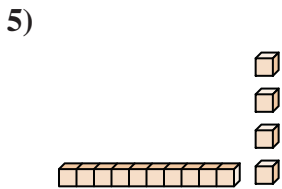
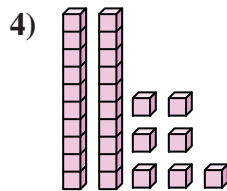
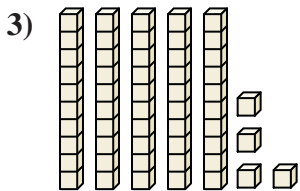
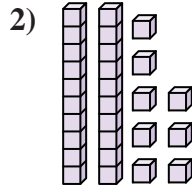
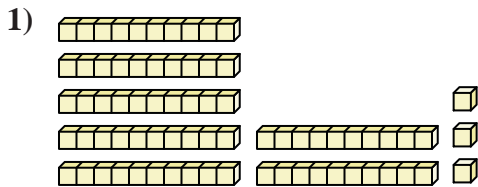


Count the total number of small blocks.

Answers

83	19	89	38	14
28	53	54	73	27

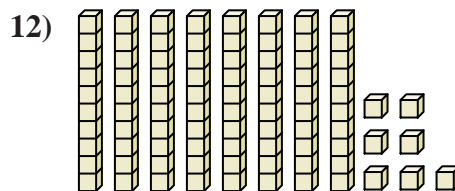
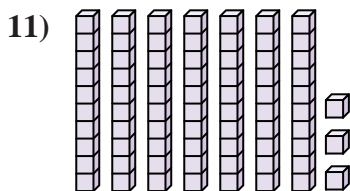
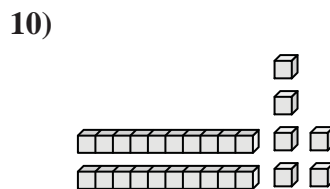
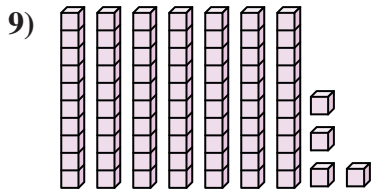
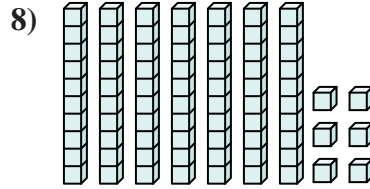
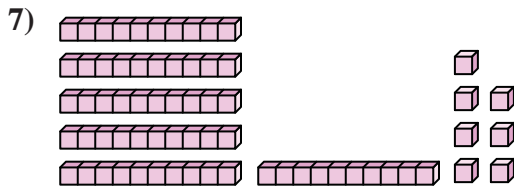
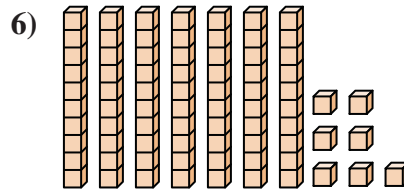
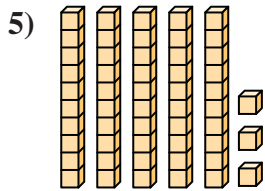
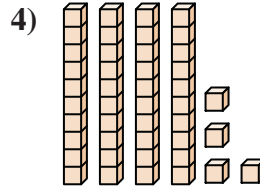
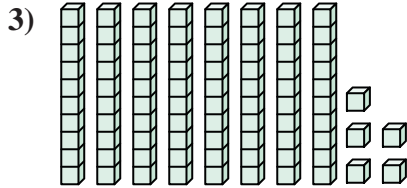
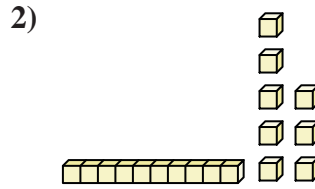
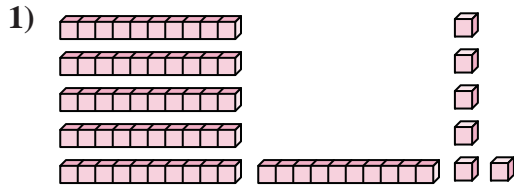
1. \_\_\_\_\_
2. \_\_\_\_\_
3. \_\_\_\_\_
4. \_\_\_\_\_
5. \_\_\_\_\_
6. \_\_\_\_\_
7. \_\_\_\_\_
8. \_\_\_\_\_
9. \_\_\_\_\_
10. \_\_\_\_\_





Count the total number of small blocks.

Answers



1. \_\_\_\_\_

2. \_\_\_\_\_

3. \_\_\_\_\_

4. \_\_\_\_\_

5. \_\_\_\_\_

6. \_\_\_\_\_

7. \_\_\_\_\_

8. \_\_\_\_\_

9. \_\_\_\_\_

10. \_\_\_\_\_

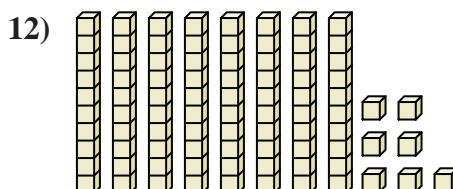
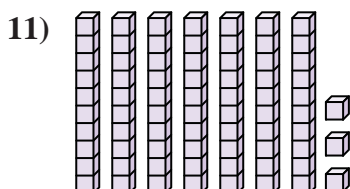
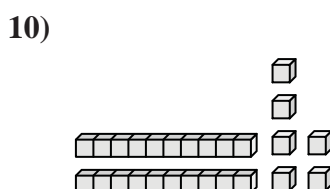
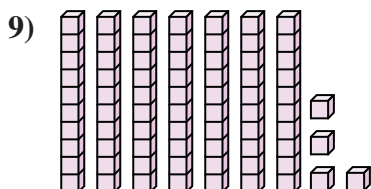
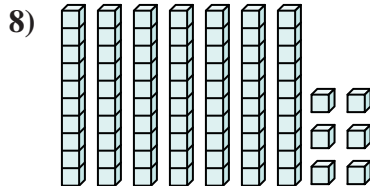
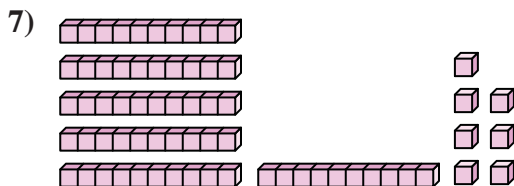
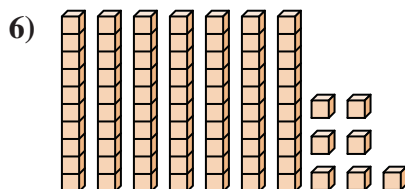
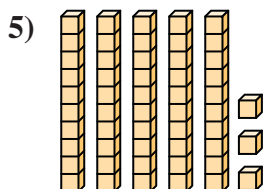
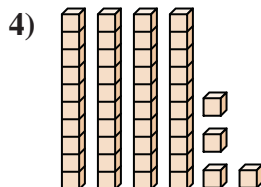

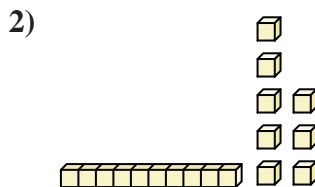
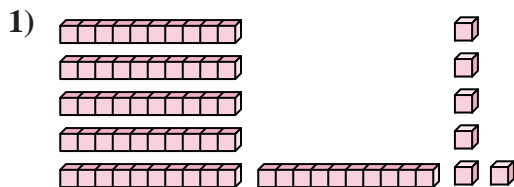
11. \_\_\_\_\_

12. \_\_\_\_\_



Count the total number of small blocks.

Answers



1. 66

2. 18

3. 85

4. 44

5. 53

6. 77

7. 67

8. 76

9. 74

10. 26

11. 73

12. 87



Count the total number of small blocks.

53	66	67	77	85
26	18	76	74	44

Answers

1. \_\_\_\_\_
2. \_\_\_\_\_
3. \_\_\_\_\_
4. \_\_\_\_\_
5. \_\_\_\_\_
6. \_\_\_\_\_
7. \_\_\_\_\_
8. \_\_\_\_\_
9. \_\_\_\_\_
10. \_\_\_\_\_

