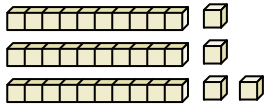




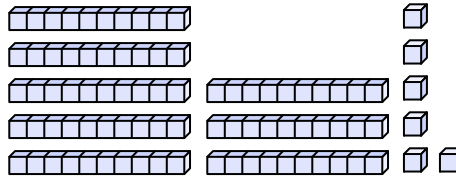
Count the total number of small blocks.

Answers

1)



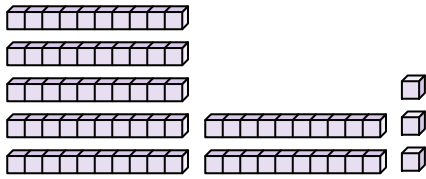
2)



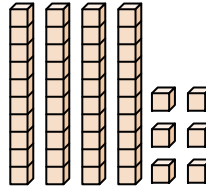
1. _____

2. _____

3)



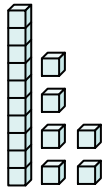
4)



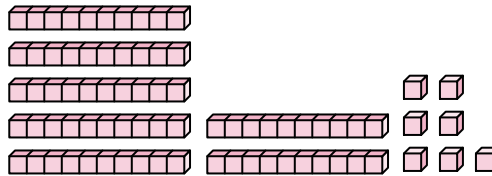
3. _____

4. _____

5)



6)



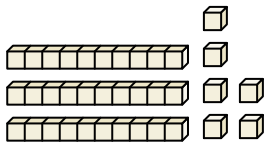
5. _____

6. _____

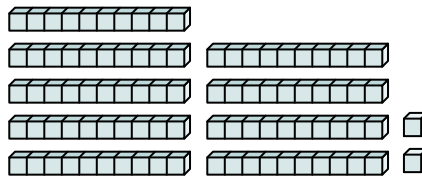
7. _____

8. _____

7)



8)



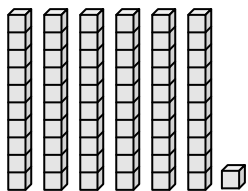
9. _____

10. _____

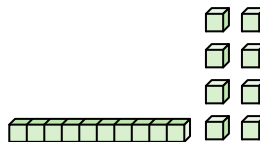
11. _____

12. _____

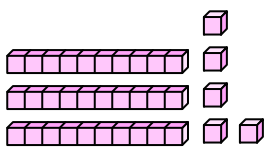
9)



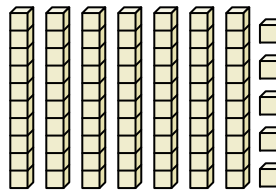
10)



11)



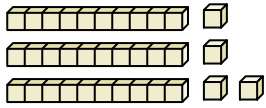
12)



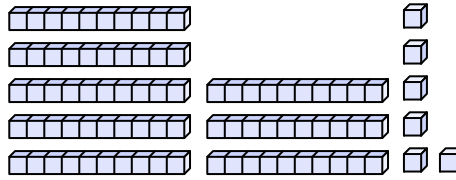


Count the total number of small blocks.

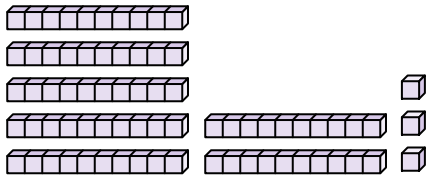
1)



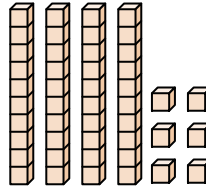
2)



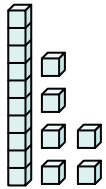
3)



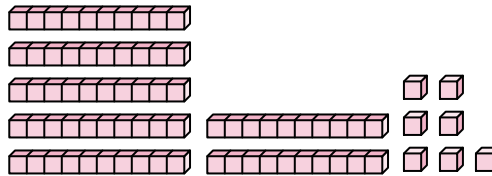
4)



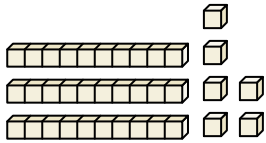
5)



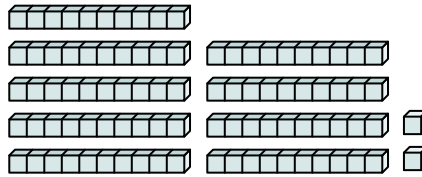
6)



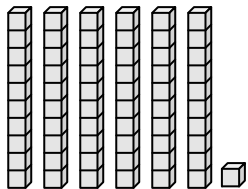
7)



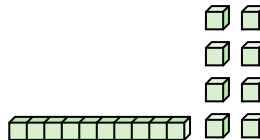
8)



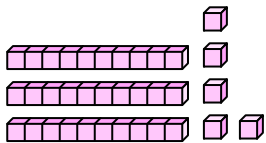
9)



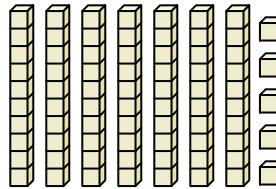
10)



11)



12)



Answers

1. **34**

2. **86**

3. **73**

4. **46**

5. **16**

6. **77**

7. **36**

8. **92**

9. **61**

10. **18**

11. **35**

12. **75**



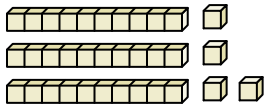
Count the total number of small blocks.

77	16	34	86	46
36	18	73	61	92

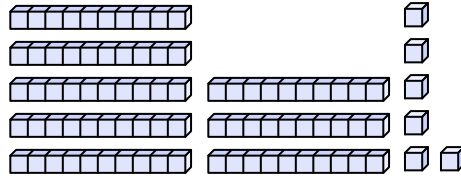
Answers

1. _____
2. _____
3. _____
4. _____
5. _____
6. _____
7. _____
8. _____
9. _____
10. _____

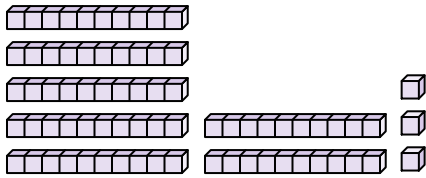
1)



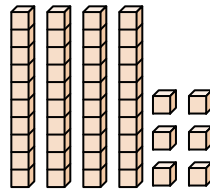
2)



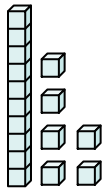
3)



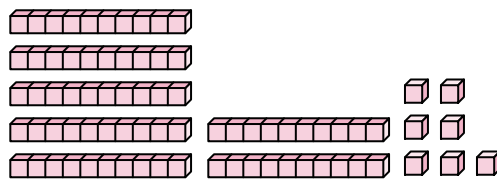
4)



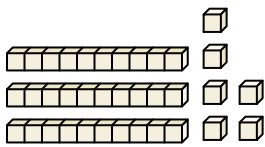
5)



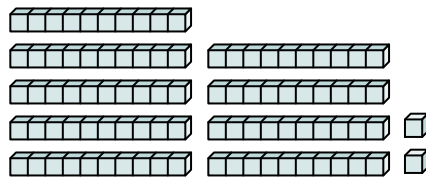
6)



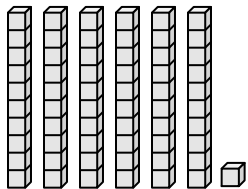
7)



8)



9)



10)

