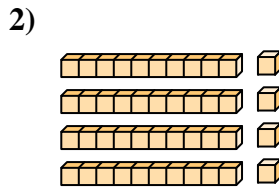
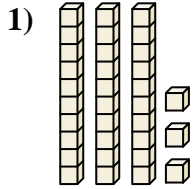




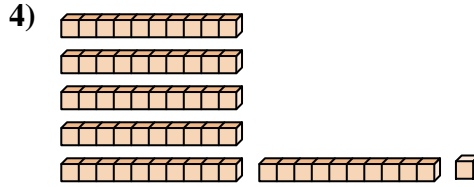
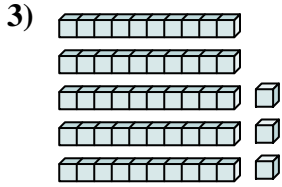
Count the total number of small blocks.

Answers



1. _____

2. _____

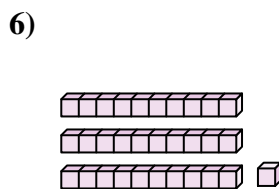
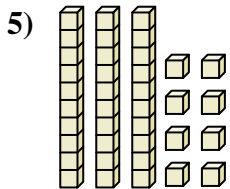


3. _____

4. _____

5. _____

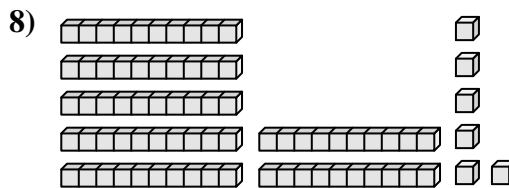
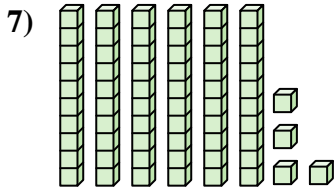
6. _____



7. _____

8. _____

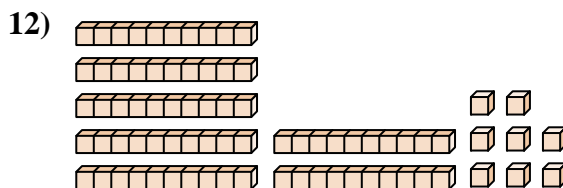
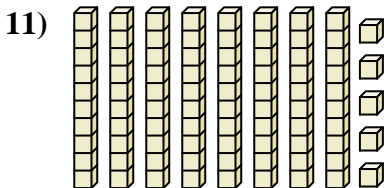
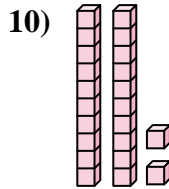
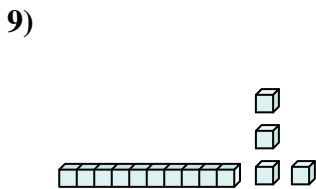
9. _____



10. _____

11. _____

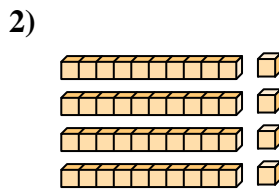
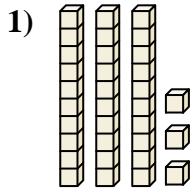
12. _____



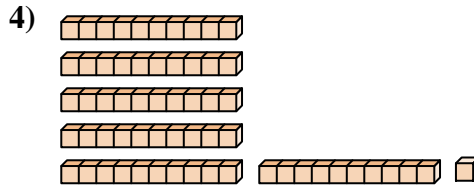
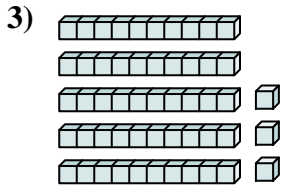


Count the total number of small blocks.

Answers

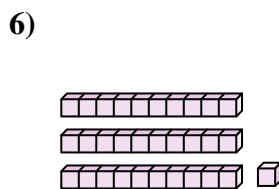
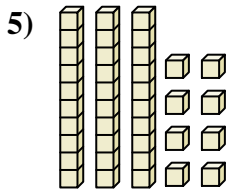


1. 33



2. 44

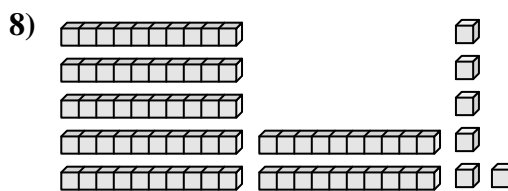
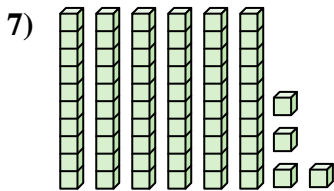
3. 53



4. 61

5. 38

6. 31

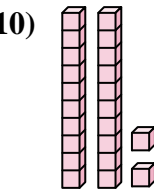
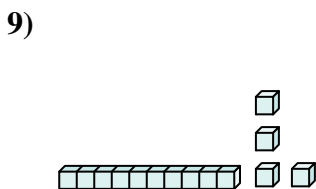


7. 64

8. 76

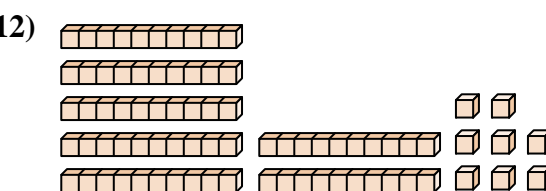
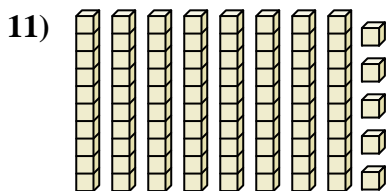
9. 14

10. 22



11. 85

12. 78





Count the total number of small blocks.

31	14	44	53	22
61	76	38	64	33

Answers

1. _____
2. _____
3. _____
4. _____
5. _____
6. _____
7. _____
8. _____
9. _____
10. _____

