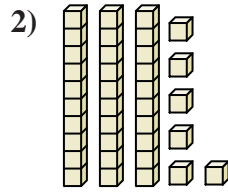
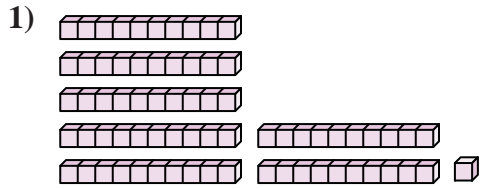




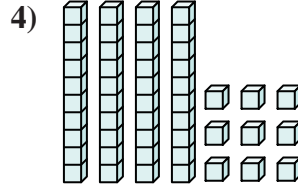
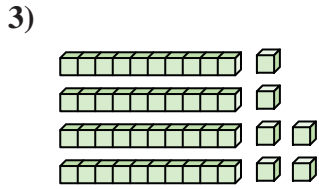
Count the total number of small blocks.

Answers



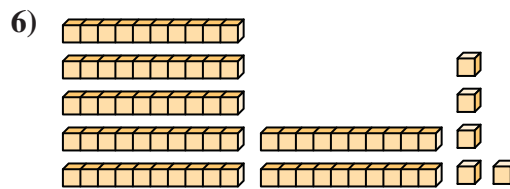
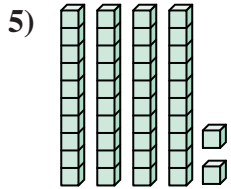
1. \_\_\_\_\_

2. \_\_\_\_\_



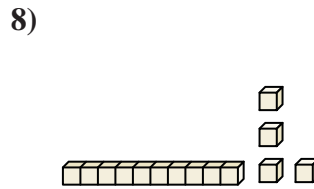
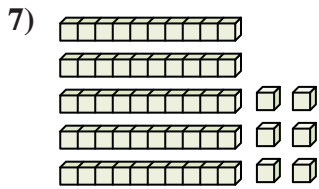
3. \_\_\_\_\_

4. \_\_\_\_\_



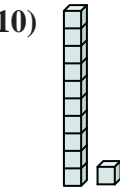
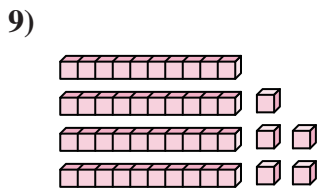
5. \_\_\_\_\_

6. \_\_\_\_\_



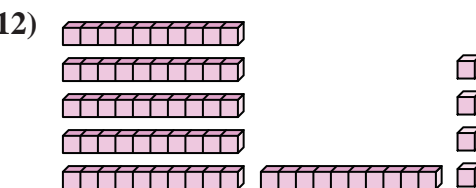
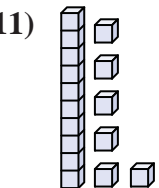
7. \_\_\_\_\_

8. \_\_\_\_\_



9. \_\_\_\_\_

10. \_\_\_\_\_



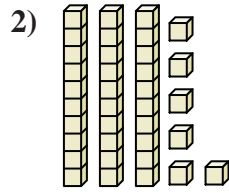
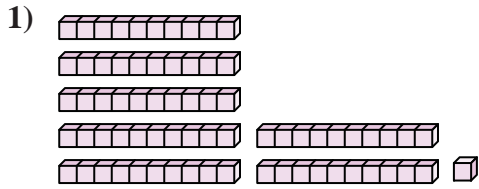
11. \_\_\_\_\_

12. \_\_\_\_\_



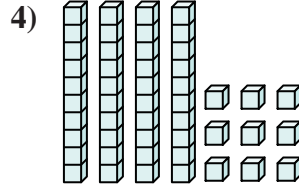
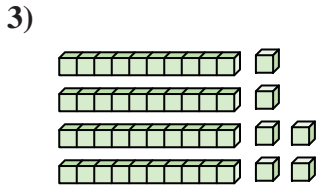
Count the total number of small blocks.

Answers



1. 71

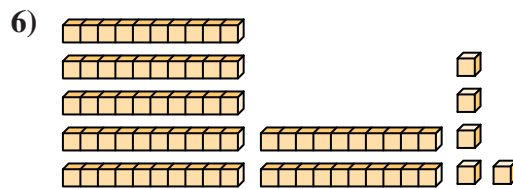
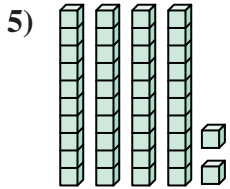
2. 36



3. 46

4. 49

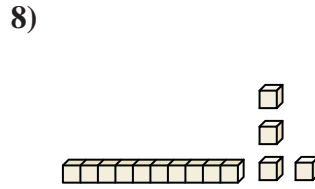
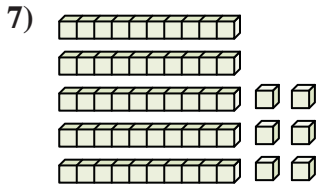
5. 42



6. 75

7. 56

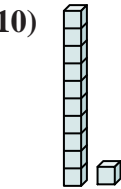
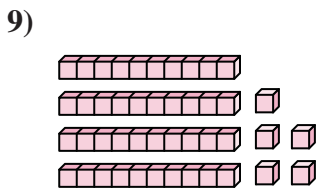
8. 14



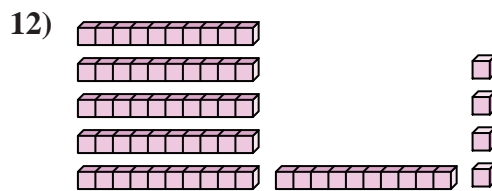
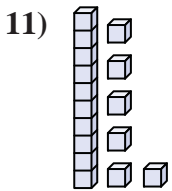
9. 45

10. 11

11. 16



12. 64





Count the total number of small blocks.

Answers

36	42	49	56	71
46	45	75	14	11

1. \_\_\_\_\_
2. \_\_\_\_\_
3. \_\_\_\_\_
4. \_\_\_\_\_
5. \_\_\_\_\_
6. \_\_\_\_\_
7. \_\_\_\_\_
8. \_\_\_\_\_
9. \_\_\_\_\_
10. \_\_\_\_\_

