



Determine how many groups of 100 can be created from the blocks shown.

Ex)

1)

2)

3)

4)

5)

6)

7)

8)

9)

Answers

Ex. 2

1. \_\_\_\_\_

2. \_\_\_\_\_

3. \_\_\_\_\_

4. \_\_\_\_\_

5. \_\_\_\_\_

6. \_\_\_\_\_

7. \_\_\_\_\_

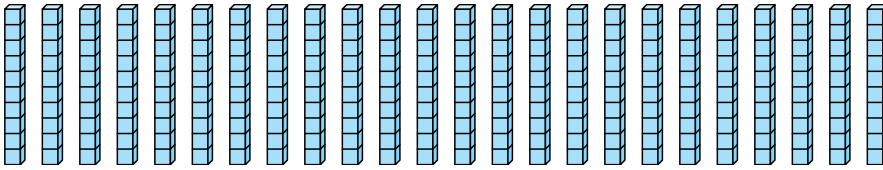
8. \_\_\_\_\_

9. \_\_\_\_\_



Determine how many groups of 100 can be created from the blocks shown.

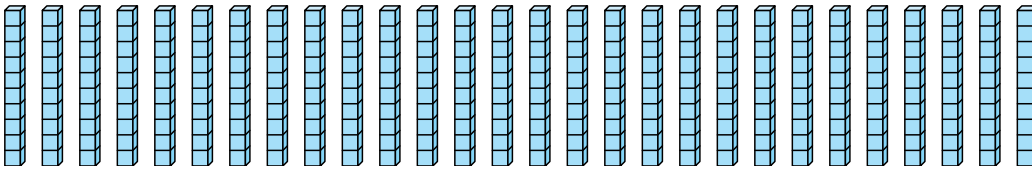
Ex)



Answers

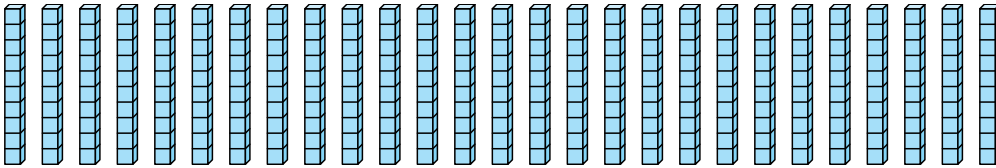
Ex. 2

1)



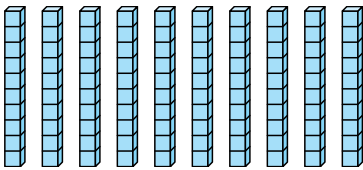
1. 2

2)



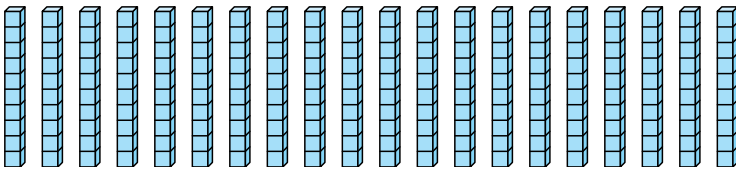
2. 2

3)



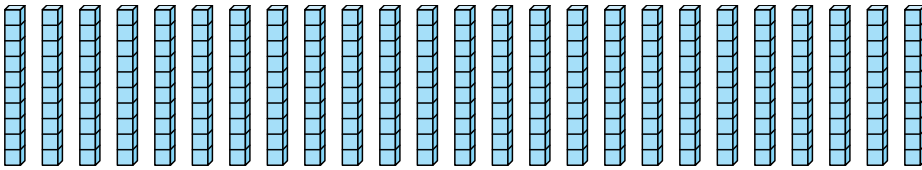
3. 1

4)



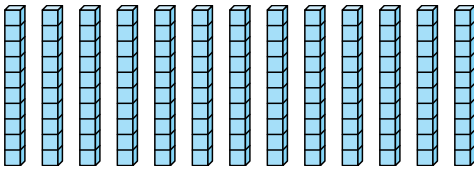
4. 2

5)



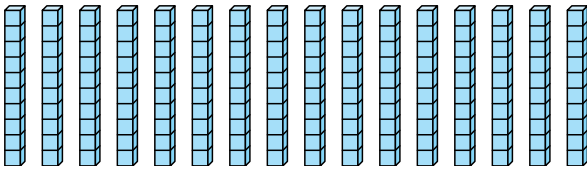
5. 2

6)



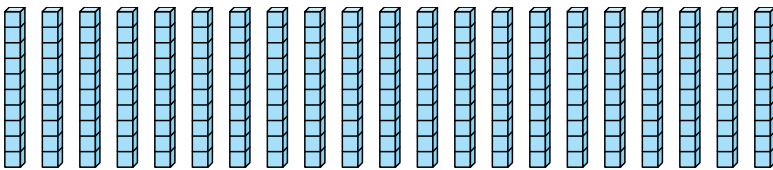
6. 1

7)



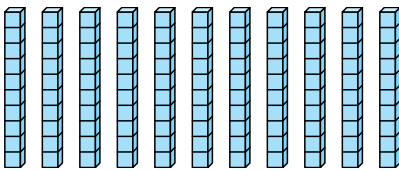
7. 1

8)



8. 2

9)



9. 1