



Solve each problem.

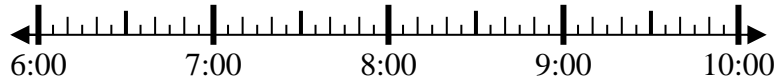
1) Start: _____
 Elapsed: 2 hrs & 10 mins
 End: 4:30



2) Start: _____
 Elapsed: 2 hrs & 40 mins
 End: 10:25



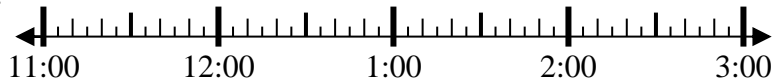
3) Start: _____
 Elapsed: 1 hr & 35 mins
 End: 8:25



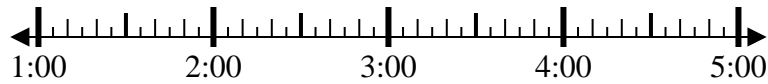
4) Start: _____
 Elapsed: 2 hrs & 35 mins
 End: 4:10



5) Start: _____
 Elapsed: 1 hr & 25 mins
 End: 1:20



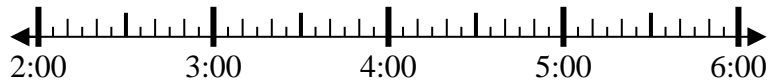
6) Start: _____
 Elapsed: 2 hrs & 35 mins
 End: 4:25



7) Start: _____
 Elapsed: 1 hr & 10 mins
 End: 2:30



8) Start: _____
 Elapsed: 1 hr & 30 mins
 End: 3:50



Answers

1. _____
2. _____
3. _____
4. _____
5. _____
6. _____
7. _____
8. _____

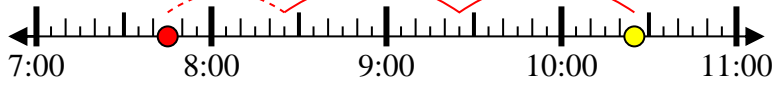


Solve each problem.

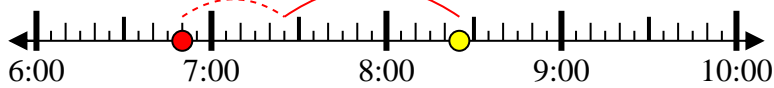
1) Start: 2:20
 Elapsed: 2 hrs & 10 mins
 End: 4:30



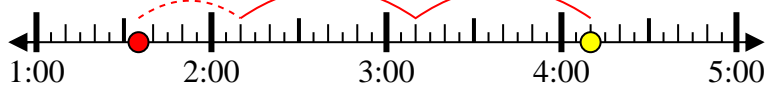
2) Start: 7:45
 Elapsed: 2 hrs & 40 mins
 End: 10:25



3) Start: 6:50
 Elapsed: 1 hr & 35 mins
 End: 8:25



4) Start: 1:35
 Elapsed: 2 hrs & 35 mins
 End: 4:10



5) Start: 11:55
 Elapsed: 1 hr & 25 mins
 End: 1:20



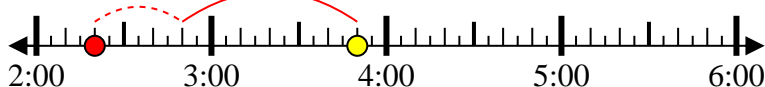
6) Start: 1:50
 Elapsed: 2 hrs & 35 mins
 End: 4:25



7) Start: 1:20
 Elapsed: 1 hr & 10 mins
 End: 2:30



8) Start: 2:20
 Elapsed: 1 hr & 30 mins
 End: 3:50



Answers

1. 2:20
2. 7:45
3. 6:50
4. 1:35
5. 11:55
6. 1:50
7. 1:20
8. 2:20