

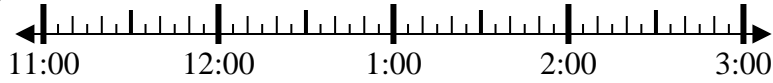


Solve each problem.

Answers

1) Start: _____

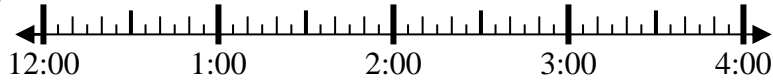
Elapsed: 2 hrs & 45 mins
End: 1:45



1. _____

2) Start: _____

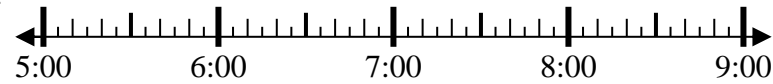
Elapsed: 1 hr & 45 mins
End: 1:55



2. _____

3) Start: _____

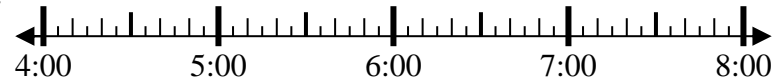
Elapsed: 1 hr & 10 mins
End: 6:30



3. _____

4) Start: _____

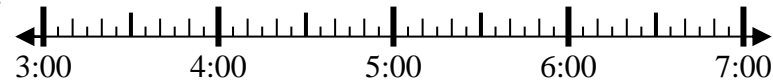
Elapsed: 1 hr & 30 mins
End: 5:30



4. _____

5) Start: _____

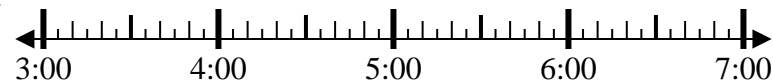
Elapsed: 1 hr & 40 mins
End: 5:15



5. _____

6) Start: _____

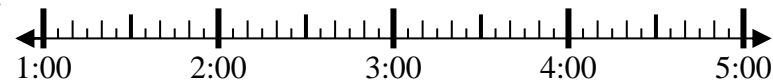
Elapsed: 1 hr & 35 mins
End: 5:00



6. _____

7) Start: _____

Elapsed: 2 hrs & 35 mins
End: 3:55



7. _____

8) Start: _____

Elapsed: 2 hrs & 40 mins
End: 11:05



8. _____



Solve each problem.

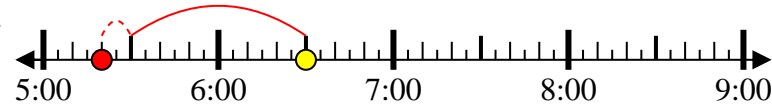
1) Start: 11:00
 Elapsed: 2 hrs & 45 mins
 End: 1:45



2) Start: 12:10
 Elapsed: 1 hr & 45 mins
 End: 1:55



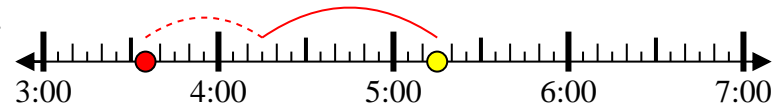
3) Start: 5:20
 Elapsed: 1 hr & 10 mins
 End: 6:30



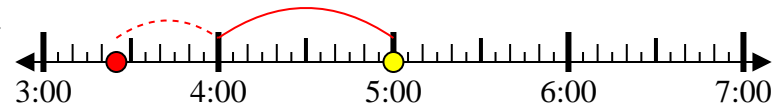
4) Start: 4:00
 Elapsed: 1 hr & 30 mins
 End: 5:30



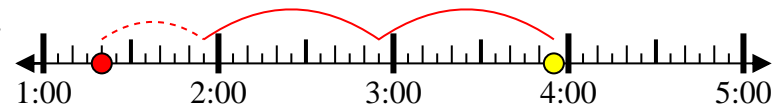
5) Start: 3:35
 Elapsed: 1 hr & 40 mins
 End: 5:15



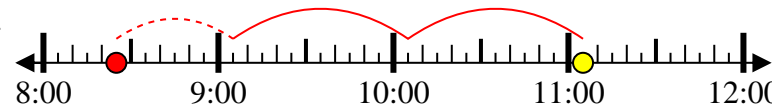
6) Start: 3:25
 Elapsed: 1 hr & 35 mins
 End: 5:00



7) Start: 1:20
 Elapsed: 2 hrs & 35 mins
 End: 3:55



8) Start: 8:25
 Elapsed: 2 hrs & 40 mins
 End: 11:05



Answers

1. 11:00
2. 12:10
3. 5:20
4. 4:00
5. 3:35
6. 3:25
7. 1:20
8. 8:25