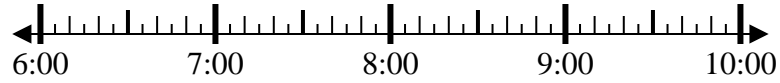




Solve each problem.

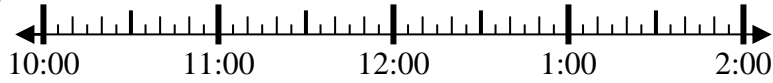
Answers

1) Start: _____
 Elapsed: 2 hrs & 40 mins
 End: 9:30



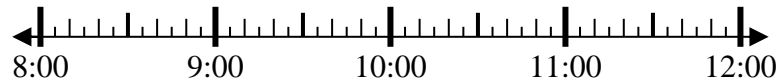
1. _____

2) Start: _____
 Elapsed: 2 hrs & 55 mins
 End: 12:55



2. _____

3) Start: _____
 Elapsed: 2 hrs & 45 mins
 End: 10:55



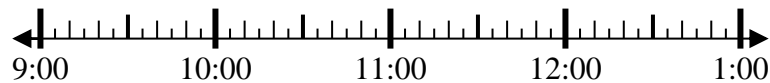
3. _____

4) Start: _____
 Elapsed: 1 hr & 45 mins
 End: 9:00



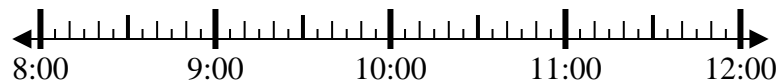
4. _____

5) Start: _____
 Elapsed: 2 hrs & 40 mins
 End: 12:00



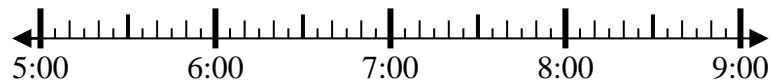
5. _____

6) Start: _____
 Elapsed: 1 hr & 10 mins
 End: 9:25



6. _____

7) Start: _____
 Elapsed: 1 hr & 45 mins
 End: 6:55



7. _____

8) Start: _____
 Elapsed: 1 hr & 35 mins
 End: 10:25

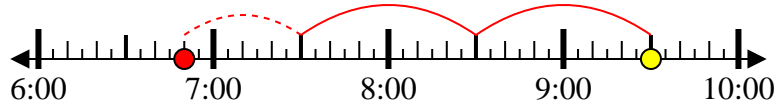


8. _____



Solve each problem.

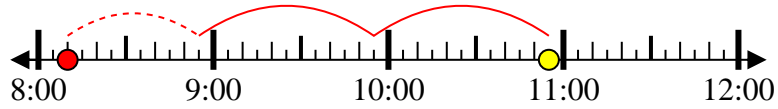
1) Start: 6:50
 Elapsed: 2 hrs & 40 mins
 End: 9:30



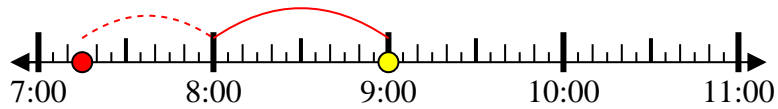
2) Start: 10:00
 Elapsed: 2 hrs & 55 mins
 End: 12:55



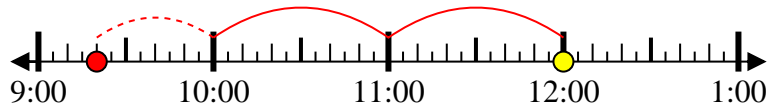
3) Start: 8:10
 Elapsed: 2 hrs & 45 mins
 End: 10:55



4) Start: 7:15
 Elapsed: 1 hr & 45 mins
 End: 9:00



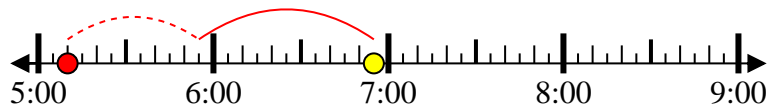
5) Start: 9:20
 Elapsed: 2 hrs & 40 mins
 End: 12:00



6) Start: 8:15
 Elapsed: 1 hr & 10 mins
 End: 9:25



7) Start: 5:10
 Elapsed: 1 hr & 45 mins
 End: 6:55



8) Start: 8:50
 Elapsed: 1 hr & 35 mins
 End: 10:25



Answers

1. 6:50
2. 10:00
3. 8:10
4. 7:15
5. 9:20
6. 8:15
7. 5:10
8. 8:50