

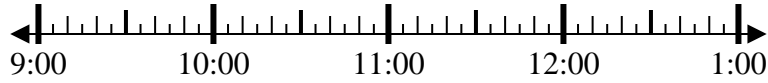


Solve each problem.

1) Start: 9:05

Elapsed: 1 hr & 30 mins

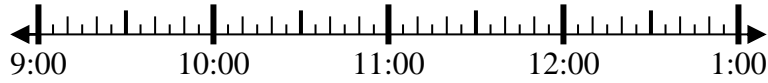
End: _____



2) Start: 9:10

Elapsed: 1 hr & 15 mins

End: _____



3) Start: 1:30

Elapsed: 1 hr & 20 mins

End: _____



4) Start: 7:20

Elapsed: 1 hr & 30 mins

End: _____



5) Start: 8:00

Elapsed: 2 hrs & 15 mins

End: _____



6) Start: 1:25

Elapsed: 2 hrs & 50 mins

End: _____



7) Start: 2:10

Elapsed: 1 hr & 55 mins

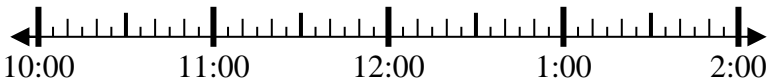
End: _____



8) Start: 10:10

Elapsed: 2 hrs & 10 mins

End: _____



Answers

1. _____
2. _____
3. _____
4. _____
5. _____
6. _____
7. _____
8. _____



Solve each problem.

1) Start: 9:05

Elapsed: 1 hr & 30 mins

End: 10:35



2) Start: 9:10

Elapsed: 1 hr & 15 mins

End: 10:25



3) Start: 1:30

Elapsed: 1 hr & 20 mins

End: 2:50



4) Start: 7:20

Elapsed: 1 hr & 30 mins

End: 8:50



5) Start: 8:00

Elapsed: 2 hrs & 15 mins

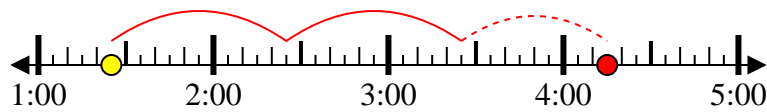
End: 10:15



6) Start: 1:25

Elapsed: 2 hrs & 50 mins

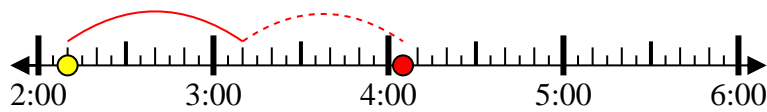
End: 4:15



7) Start: 2:10

Elapsed: 1 hr & 55 mins

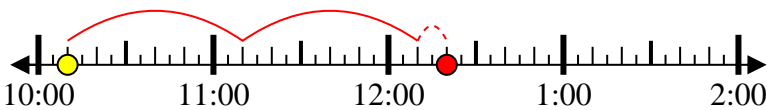
End: 4:05



8) Start: 10:10

Elapsed: 2 hrs & 10 mins

End: 12:20



Answers

1. 10:35
2. 10:25
3. 2:50
4. 8:50
5. 10:15
6. 4:15
7. 4:05
8. 12:20