



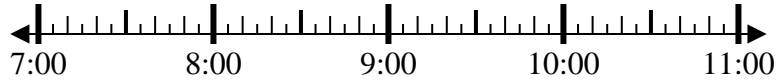
Solve each problem.

Answers

1) Start: 7:25

Elapsed: 1 hr & 10 mins

End: _____



1. _____

2) Start: 1:25

Elapsed: 1 hr & 40 mins

End: _____

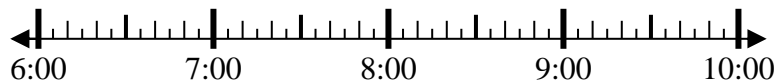


2. _____

3) Start: 6:10

Elapsed: 1 hr & 25 mins

End: _____



3. _____

4) Start: 7:15

Elapsed: 1 hr & 30 mins

End: _____



4. _____

5) Start: 5:55

Elapsed: 2 hrs & 15 mins

End: _____



5. _____

6) Start: 5:50

Elapsed: 2 hrs & 45 mins

End: _____



6. _____

7) Start: 11:20

Elapsed: 1 hr & 30 mins

End: _____



7. _____

8) Start: 4:05

Elapsed: 2 hrs & 30 mins

End: _____



8. _____

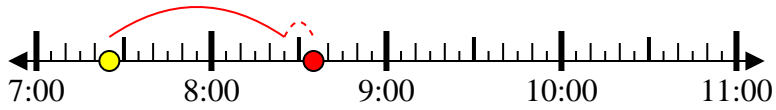


Solve each problem.

1) Start: 7:25

Elapsed: 1 hr & 10 mins

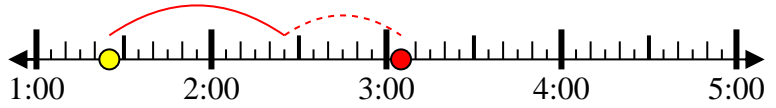
End: 8:35



2) Start: 1:25

Elapsed: 1 hr & 40 mins

End: 3:05



3) Start: 6:10

Elapsed: 1 hr & 25 mins

End: 7:35



4) Start: 7:15

Elapsed: 1 hr & 30 mins

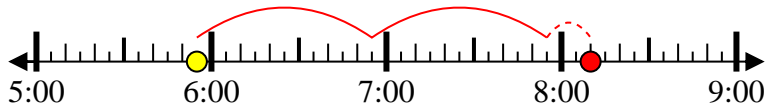
End: 8:45



5) Start: 5:55

Elapsed: 2 hrs & 15 mins

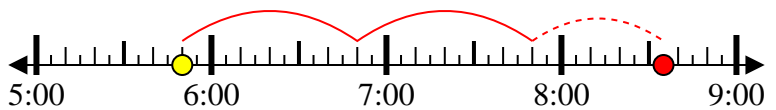
End: 8:10



6) Start: 5:50

Elapsed: 2 hrs & 45 mins

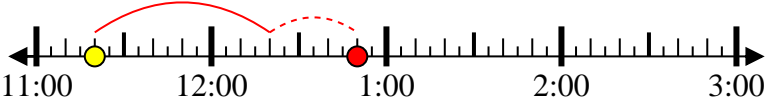
End: 8:35



7) Start: 11:20

Elapsed: 1 hr & 30 mins

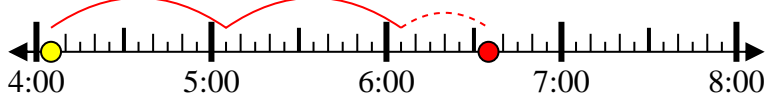
End: 12:50



8) Start: 4:05

Elapsed: 2 hrs & 30 mins

End: 6:35



Answers

1. 8:35

2. 3:05

3. 7:35

4. 8:45

5. 8:10

6. 8:35

7. 12:50

8. 6:35