

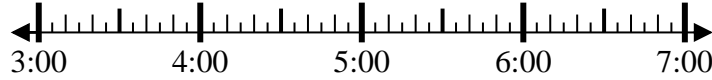


Solve each problem.

Answers

1) Start: 3:05

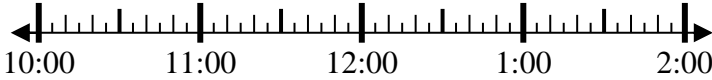
Elapsed: _____
End: 4:50



1. _____

2) Start: 10:05

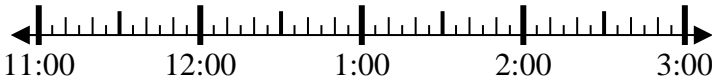
Elapsed: _____
End: 12:35



2. _____

3) Start: 11:40

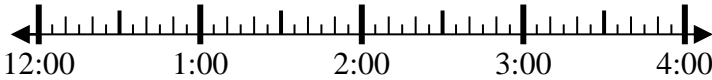
Elapsed: _____
End: 12:55



3. _____

4) Start: 12:05

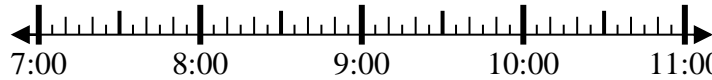
Elapsed: _____
End: 2:45



4. _____

5) Start: 7:25

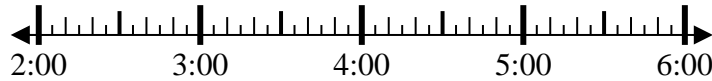
Elapsed: _____
End: 8:50



5. _____

6) Start: 2:35

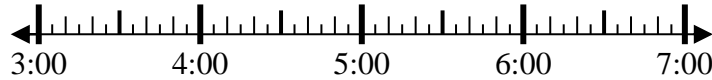
Elapsed: _____
End: 4:05



6. _____

7) Start: 3:10

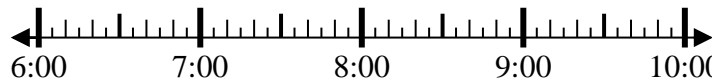
Elapsed: _____
End: 5:30



7. _____

8) Start: 6:00

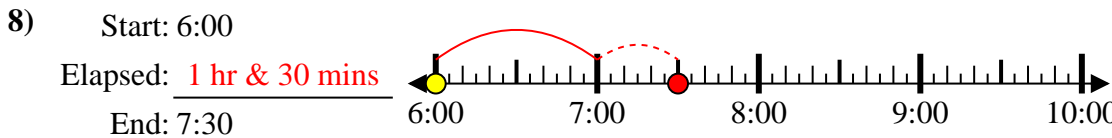
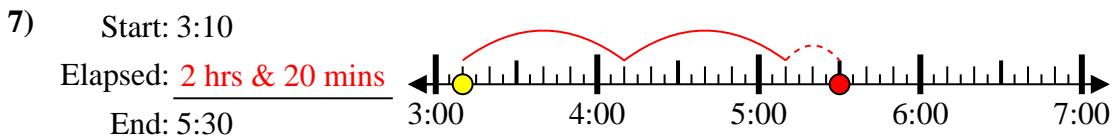
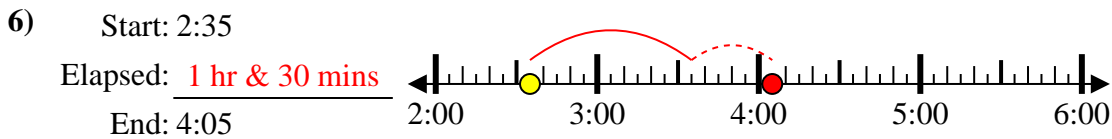
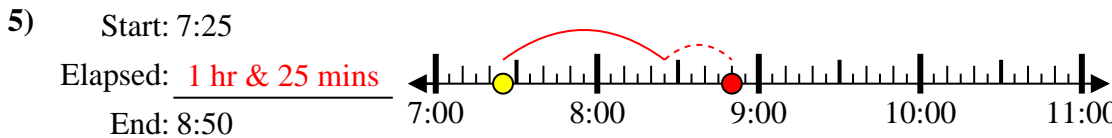
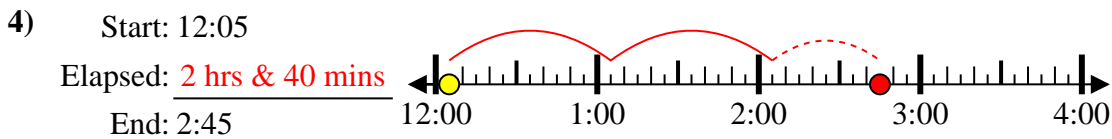
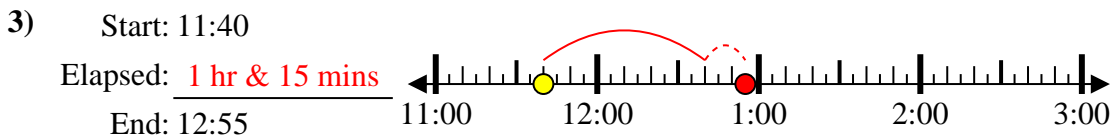
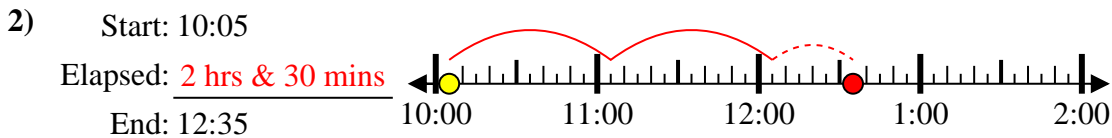
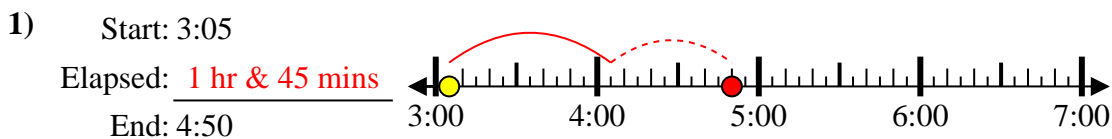
Elapsed: _____
End: 7:30



8. _____



Solve each problem.



Answers

1. 1 hr & 45 mins
2. 2 hrs & 30 mins
3. 1 hr & 15 mins
4. 2 hrs & 40 mins
5. 1 hr & 25 mins
6. 1 hr & 30 mins
7. 2 hrs & 20 mins
8. 1 hr & 30 mins