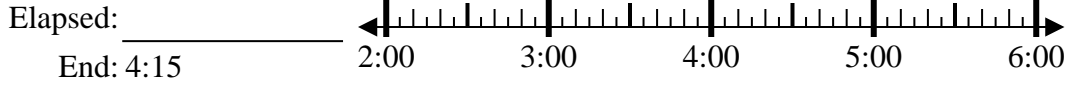


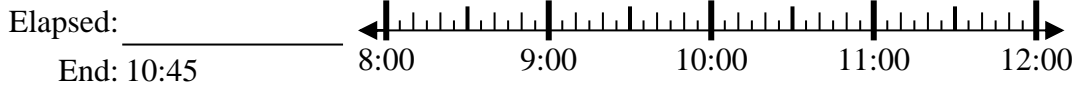


Solve each problem.

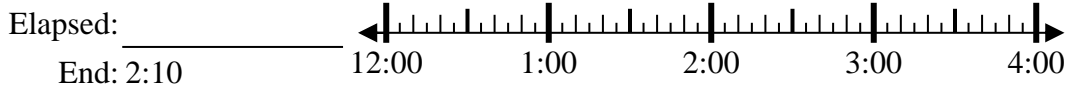
1) Start: 2:40



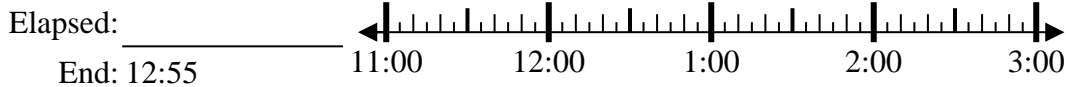
2) Start: 8:10



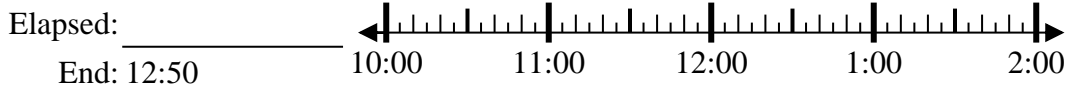
3) Start: 12:45



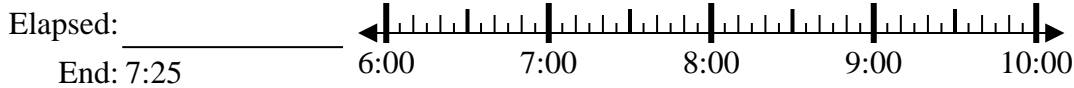
4) Start: 11:25



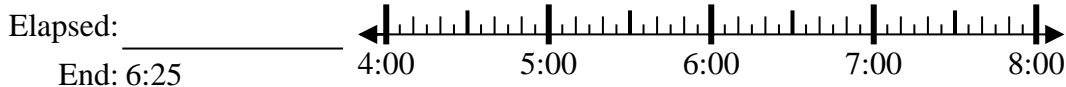
5) Start: 10:35



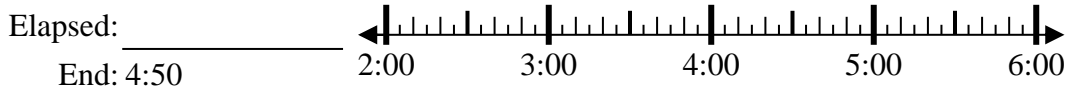
6) Start: 6:15



7) Start: 4:55



8) Start: 2:30



Answers

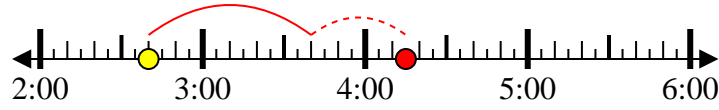
1. _____
2. _____
3. _____
4. _____
5. _____
6. _____
7. _____
8. _____



Solve each problem.

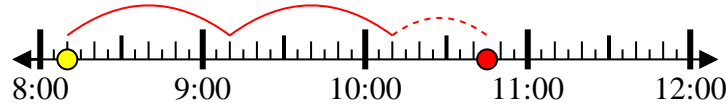
1) Start: 2:40

Elapsed: 1 hr & 35 mins
End: 4:15



2) Start: 8:10

Elapsed: 2 hrs & 35 mins
End: 10:45



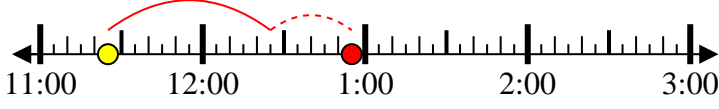
3) Start: 12:45

Elapsed: 1 hr & 25 mins
End: 2:10



4) Start: 11:25

Elapsed: 1 hr & 30 mins
End: 12:55



5) Start: 10:35

Elapsed: 2 hrs & 15 mins
End: 12:50



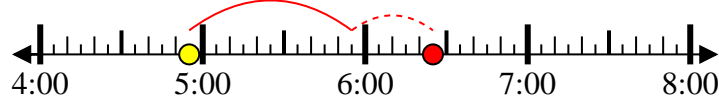
6) Start: 6:15

Elapsed: 1 hr & 10 mins
End: 7:25



7) Start: 4:55

Elapsed: 1 hr & 30 mins
End: 6:25



8) Start: 2:30

Elapsed: 2 hrs & 20 mins
End: 4:50



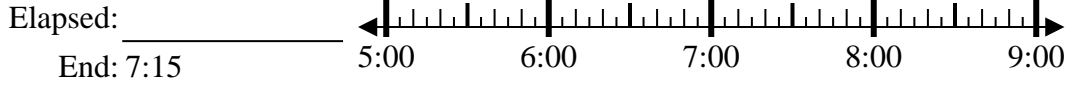
Answers

1. 1 hr & 35 mins
2. 2 hrs & 35 mins
3. 1 hr & 25 mins
4. 1 hr & 30 mins
5. 2 hrs & 15 mins
6. 1 hr & 10 mins
7. 1 hr & 30 mins
8. 2 hrs & 20 mins



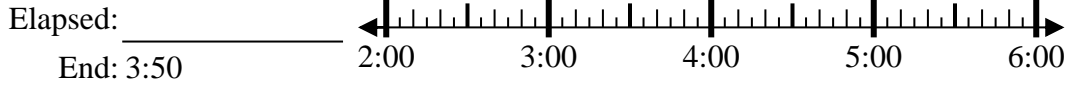
Solve each problem.

1) Start: 5:20



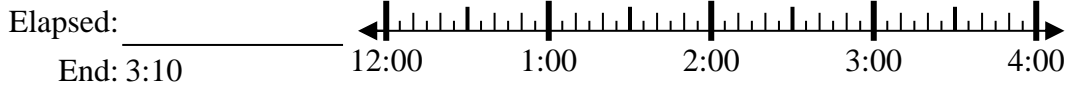
1. _____

2) Start: 2:30



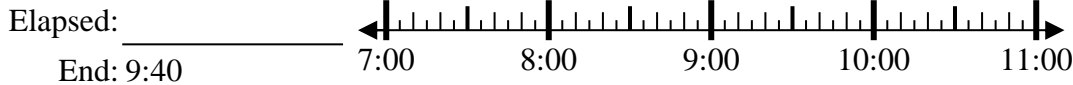
2. _____

3) Start: 12:55



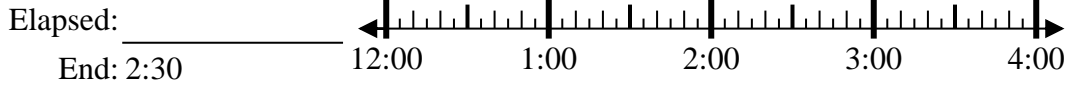
3. _____

4) Start: 7:20



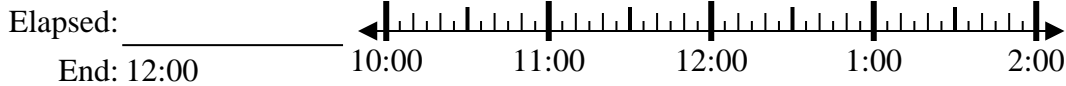
4. _____

5) Start: 12:00



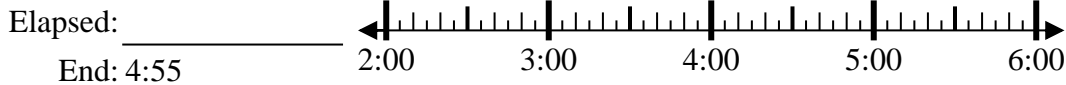
5. _____

6) Start: 10:35



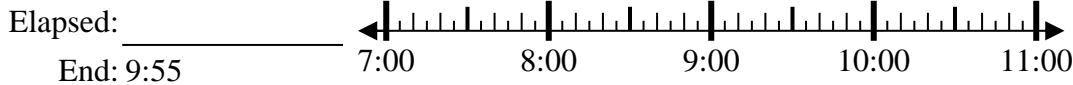
6. _____

7) Start: 2:15



7. _____

8) Start: 7:45



8. _____

Answers



Solve each problem.

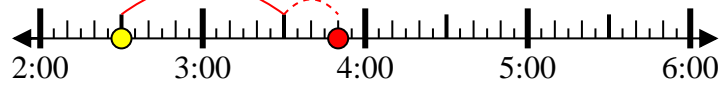
1) Start: 5:20

Elapsed: 1 hr & 55 mins
End: 7:15



2) Start: 2:30

Elapsed: 1 hr & 20 mins
End: 3:50



3) Start: 12:55

Elapsed: 2 hrs & 15 mins
End: 3:10



4) Start: 7:20

Elapsed: 2 hrs & 20 mins
End: 9:40



5) Start: 12:00

Elapsed: 2 hrs & 30 mins
End: 2:30



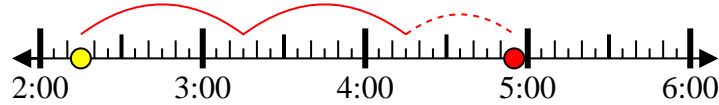
6) Start: 10:35

Elapsed: 1 hr & 25 mins
End: 12:00



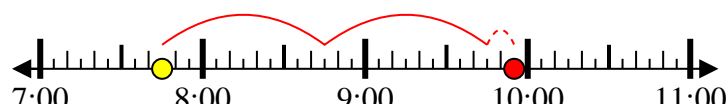
7) Start: 2:15

Elapsed: 2 hrs & 40 mins
End: 4:55



8) Start: 7:45

Elapsed: 2 hrs & 10 mins
End: 9:55



Answers

1. 1 hr & 55 mins

2. 1 hr & 20 mins

3. 2 hrs & 15 mins

4. 2 hrs & 20 mins

5. 2 hrs & 30 mins

6. 1 hr & 25 mins

7. 2 hrs & 40 mins

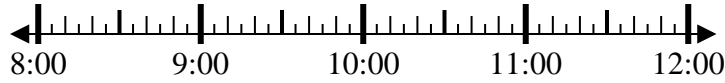
8. 2 hrs & 10 mins



Solve each problem.

1) Start: 8:50

Elapsed: _____
End: 10:15



1. _____

2) Start: 8:20

Elapsed: _____
End: 9:30



2. _____

3) Start: 6:05

Elapsed: _____
End: 8:30



3. _____

4) Start: 6:35

Elapsed: _____
End: 8:05



4. _____

5) Start: 7:50

Elapsed: _____
End: 9:05



5. _____

6) Start: 12:20

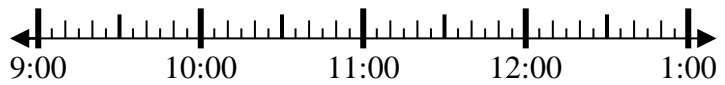
Elapsed: _____
End: 1:55



6. _____

7) Start: 9:00

Elapsed: _____
End: 10:30



7. _____

8) Start: 1:20

Elapsed: _____
End: 2:30



8. _____

Answers



Solve each problem.

1) Start: 8:50

Elapsed: 1 hr & 25 mins
End: 10:15



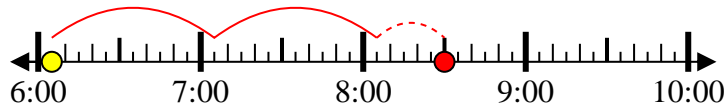
2) Start: 8:20

Elapsed: 1 hr & 10 mins
End: 9:30



3) Start: 6:05

Elapsed: 2 hrs & 25 mins
End: 8:30



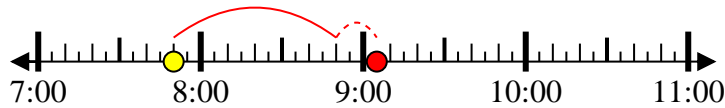
4) Start: 6:35

Elapsed: 1 hr & 30 mins
End: 8:05



5) Start: 7:50

Elapsed: 1 hr & 15 mins
End: 9:05



6) Start: 12:20

Elapsed: 1 hr & 35 mins
End: 1:55



7) Start: 9:00

Elapsed: 1 hr & 30 mins
End: 10:30



8) Start: 1:20

Elapsed: 1 hr & 10 mins
End: 2:30



Answers

1. 1 hr & 25 mins

2. 1 hr & 10 mins

3. 2 hrs & 25 mins

4. 1 hr & 30 mins

5. 1 hr & 15 mins

6. 1 hr & 35 mins

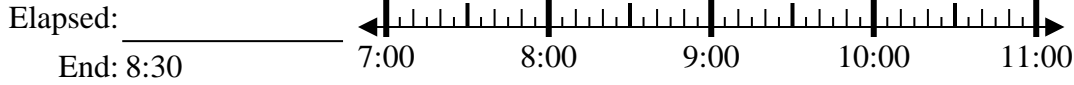
7. 1 hr & 30 mins

8. 1 hr & 10 mins



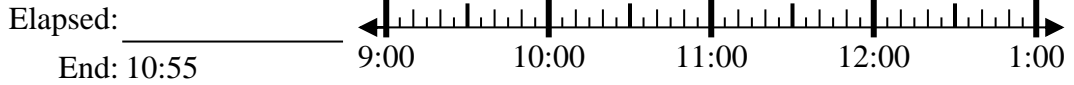
Solve each problem.

1) Start: 7:10



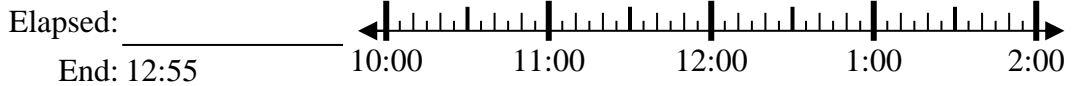
1. _____

2) Start: 9:35



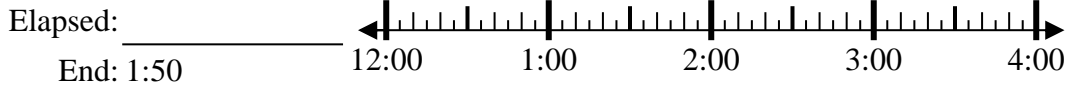
2. _____

3) Start: 10:15



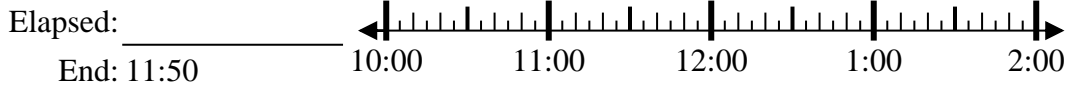
3. _____

4) Start: 12:20



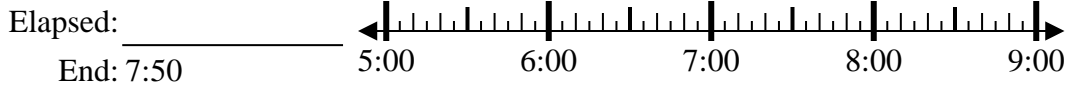
4. _____

5) Start: 10:35



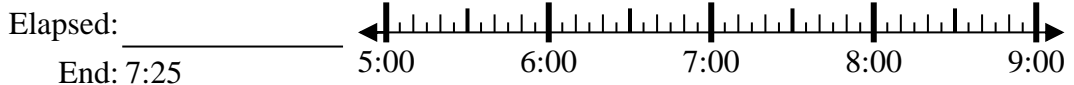
5. _____

6) Start: 5:15



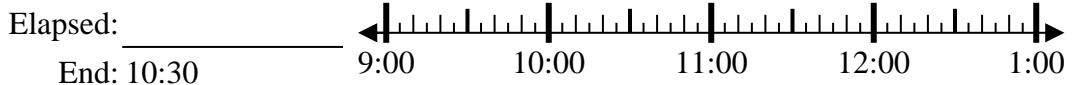
6. _____

7) Start: 5:00



7. _____

8) Start: 9:05



8. _____

Answers



Solve each problem.

1) Start: 7:10

Elapsed: 1 hr & 20 mins
End: 8:30



2) Start: 9:35

Elapsed: 1 hr & 20 mins
End: 10:55



3) Start: 10:15

Elapsed: 2 hrs & 40 mins
End: 12:55



4) Start: 12:20

Elapsed: 1 hr & 30 mins
End: 1:50



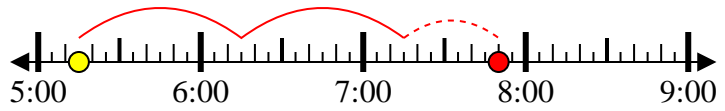
5) Start: 10:35

Elapsed: 1 hr & 15 mins
End: 11:50



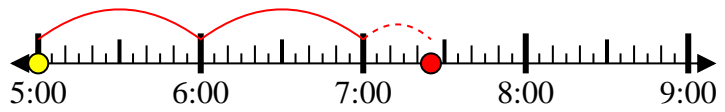
6) Start: 5:15

Elapsed: 2 hrs & 35 mins
End: 7:50



7) Start: 5:00

Elapsed: 2 hrs & 25 mins
End: 7:25



8) Start: 9:05

Elapsed: 1 hr & 25 mins
End: 10:30



Answers

1. 1 hr & 20 mins

2. 1 hr & 20 mins

3. 2 hrs & 40 mins

4. 1 hr & 30 mins

5. 1 hr & 15 mins

6. 2 hrs & 35 mins

7. 2 hrs & 25 mins

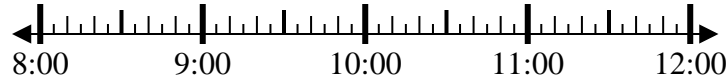
8. 1 hr & 25 mins



Solve each problem.

1) Start: 8:45

Elapsed: _____
End: 11:25



1. _____

2) Start: 4:35

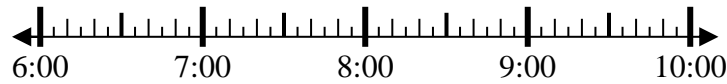
Elapsed: _____
End: 6:50



2. _____

3) Start: 6:25

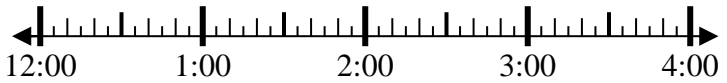
Elapsed: _____
End: 8:05



3. _____

4) Start: 12:20

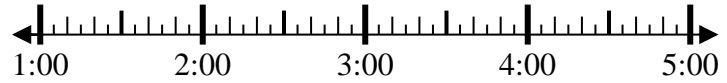
Elapsed: _____
End: 1:30



4. _____

5) Start: 1:35

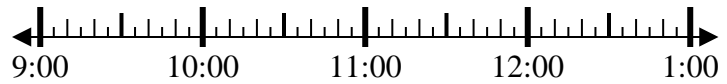
Elapsed: _____
End: 3:05



5. _____

6) Start: 9:20

Elapsed: _____
End: 11:55



6. _____

7) Start: 2:00

Elapsed: _____
End: 4:35



7. _____

8) Start: 3:30

Elapsed: _____
End: 5:55

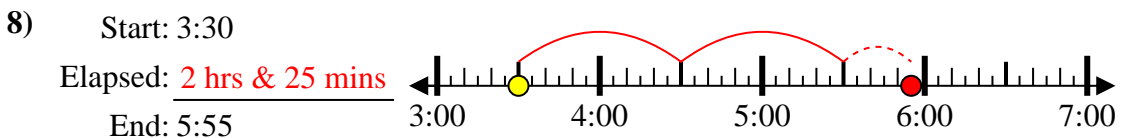
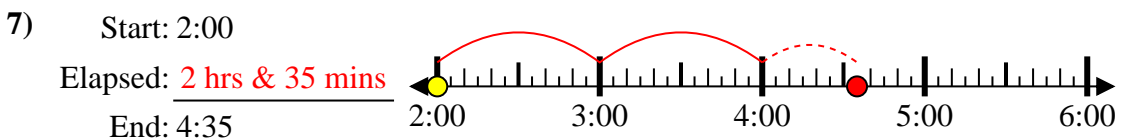
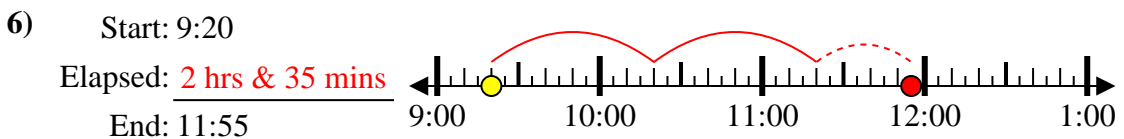
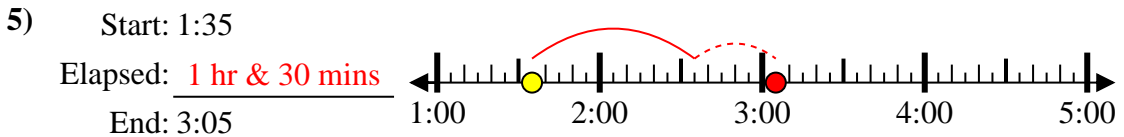
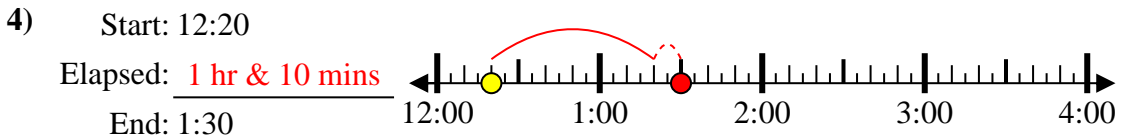
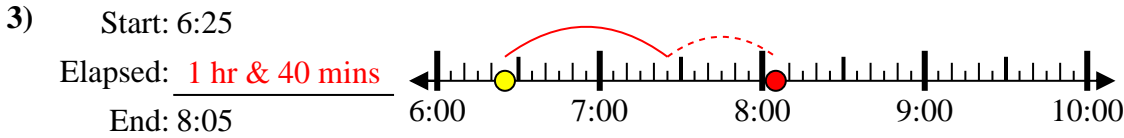
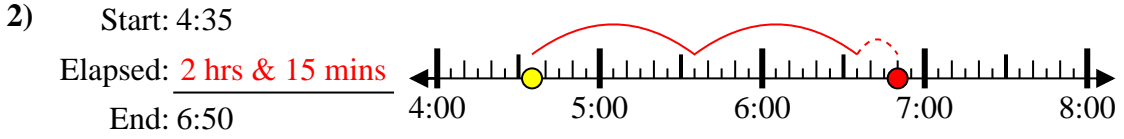
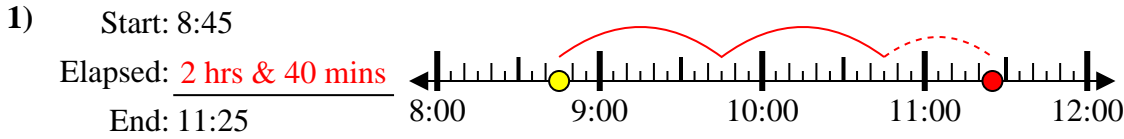


8. _____

Answers



Solve each problem.



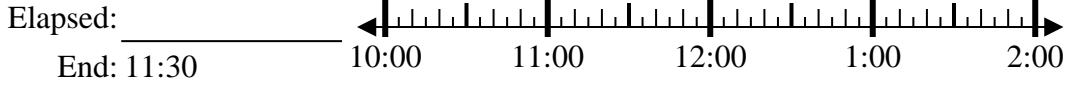
Answers

1. 2 hrs & 40 mins
2. 2 hrs & 15 mins
3. 1 hr & 40 mins
4. 1 hr & 10 mins
5. 1 hr & 30 mins
6. 2 hrs & 35 mins
7. 2 hrs & 35 mins
8. 2 hrs & 25 mins



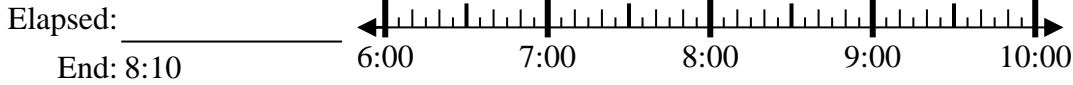
Solve each problem.

1) Start: 10:10



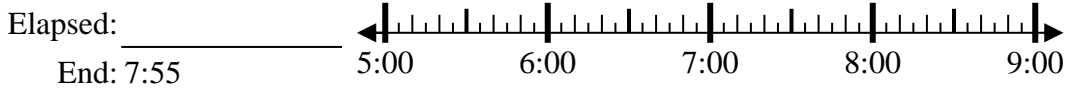
1. _____

2) Start: 6:00



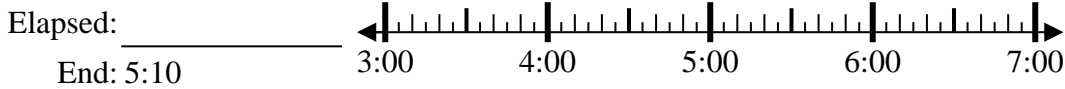
2. _____

3) Start: 5:30



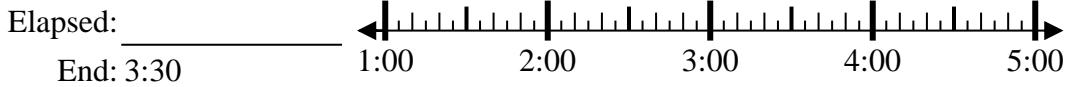
3. _____

4) Start: 3:25



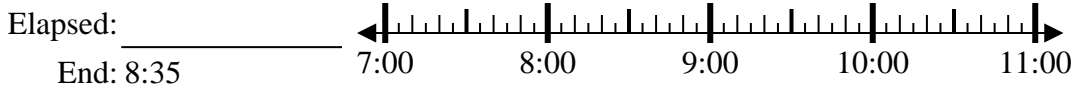
4. _____

5) Start: 1:05



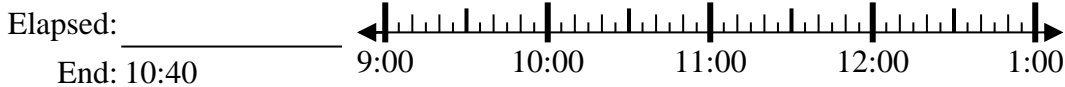
5. _____

6) Start: 7:05



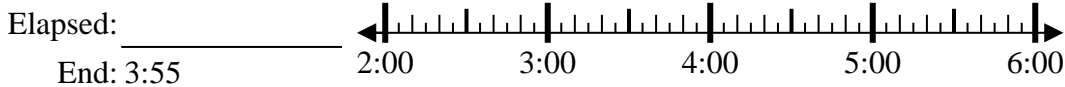
6. _____

7) Start: 9:30



7. _____

8) Start: 2:20



8. _____

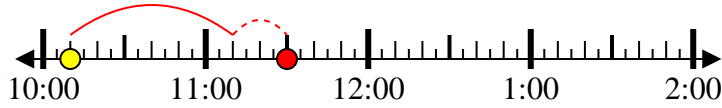
Answers



Solve each problem.

1) Start: 10:10

Elapsed: 1 hr & 20 mins
End: 11:30



2) Start: 6:00

Elapsed: 2 hrs & 10 mins
End: 8:10



3) Start: 5:30

Elapsed: 2 hrs & 25 mins
End: 7:55



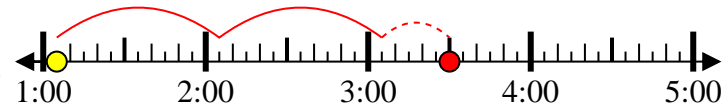
4) Start: 3:25

Elapsed: 1 hr & 45 mins
End: 5:10



5) Start: 1:05

Elapsed: 2 hrs & 25 mins
End: 3:30



6) Start: 7:05

Elapsed: 1 hr & 30 mins
End: 8:35



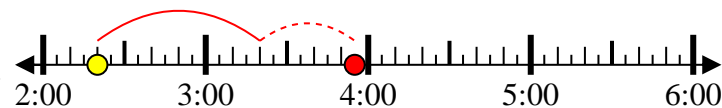
7) Start: 9:30

Elapsed: 1 hr & 10 mins
End: 10:40



8) Start: 2:20

Elapsed: 1 hr & 35 mins
End: 3:55



Answers

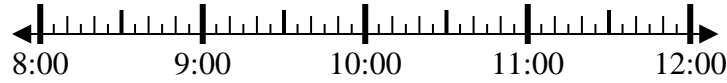
1. 1 hr & 20 mins
2. 2 hrs & 10 mins
3. 2 hrs & 25 mins
4. 1 hr & 45 mins
5. 2 hrs & 25 mins
6. 1 hr & 30 mins
7. 1 hr & 10 mins
8. 1 hr & 35 mins



Solve each problem.

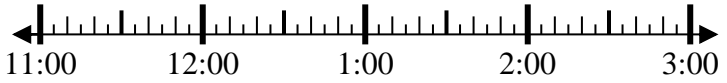
1) Start: 8:05

Elapsed: _____
End: 9:50



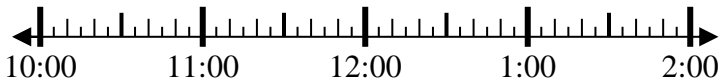
2) Start: 11:10

Elapsed: _____
End: 12:55



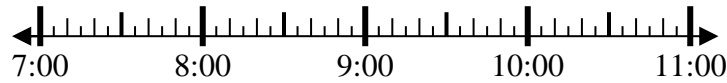
3) Start: 10:35

Elapsed: _____
End: 12:25



4) Start: 7:45

Elapsed: _____
End: 9:05



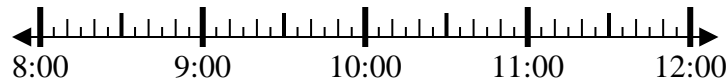
5) Start: 1:35

Elapsed: _____
End: 3:10



6) Start: 8:30

Elapsed: _____
End: 9:40



7) Start: 2:35

Elapsed: _____
End: 4:05



8) Start: 11:20

Elapsed: _____
End: 12:30

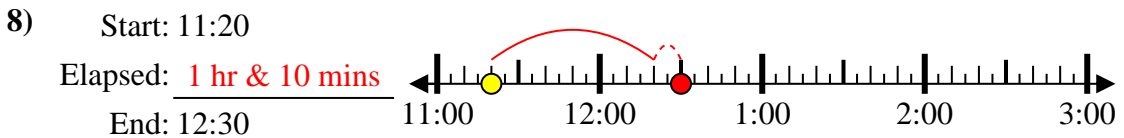
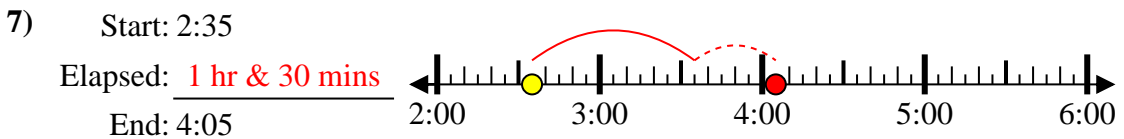
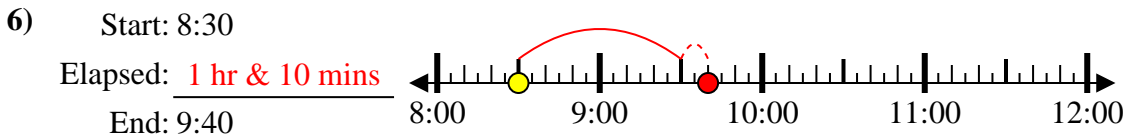
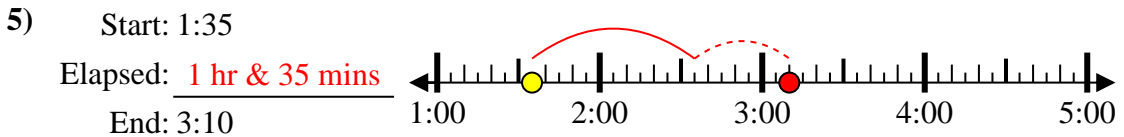
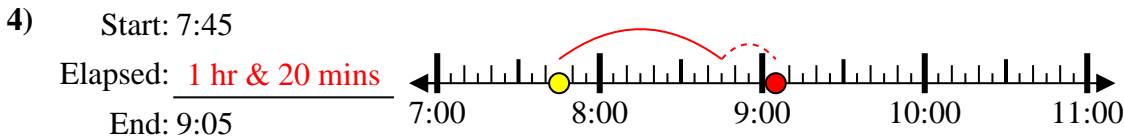
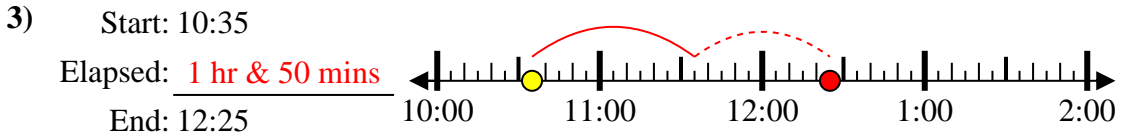
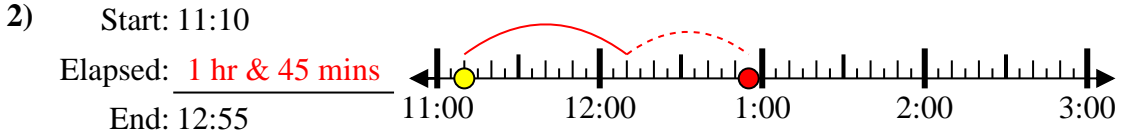
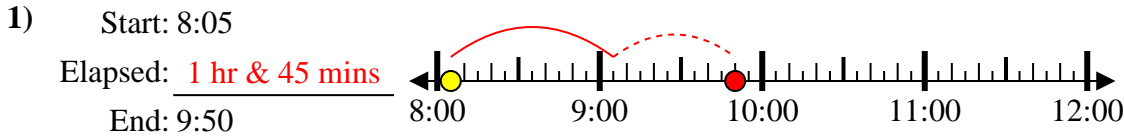


Answers

1. _____
2. _____
3. _____
4. _____
5. _____
6. _____
7. _____
8. _____



Solve each problem.



Answers

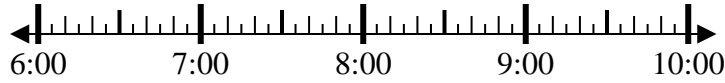
1. 1 hr & 45 mins
2. 1 hr & 45 mins
3. 1 hr & 50 mins
4. 1 hr & 20 mins
5. 1 hr & 35 mins
6. 1 hr & 10 mins
7. 1 hr & 30 mins
8. 1 hr & 10 mins



Solve each problem.

1) Start: 6:35

Elapsed: _____
End: 7:50



1. _____

2) Start: 2:35

Elapsed: _____
End: 4:50



2. _____

3) Start: 1:15

Elapsed: _____
End: 2:45



3. _____

4) Start: 2:45

Elapsed: _____
End: 3:55



4. _____

5) Start: 2:55

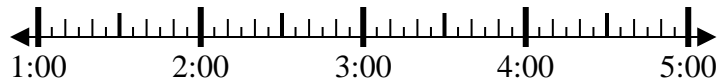
Elapsed: _____
End: 5:25



5. _____

6) Start: 1:50

Elapsed: _____
End: 3:25



6. _____

7) Start: 6:25

Elapsed: _____
End: 8:15



7. _____

8) Start: 7:45

Elapsed: _____
End: 9:15



8. _____

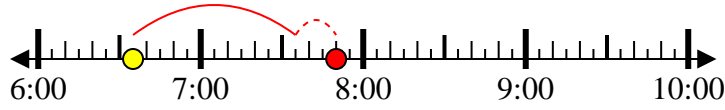
Answers



Solve each problem.

1) Start: 6:35

Elapsed: 1 hr & 15 mins
End: 7:50



2) Start: 2:35

Elapsed: 2 hrs & 15 mins
End: 4:50



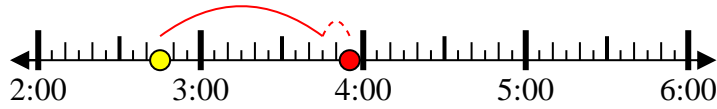
3) Start: 1:15

Elapsed: 1 hr & 30 mins
End: 2:45



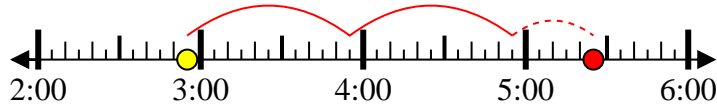
4) Start: 2:45

Elapsed: 1 hr & 10 mins
End: 3:55



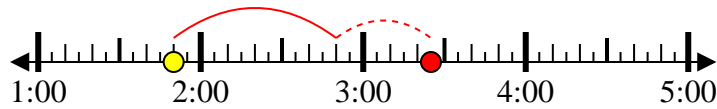
5) Start: 2:55

Elapsed: 2 hrs & 30 mins
End: 5:25



6) Start: 1:50

Elapsed: 1 hr & 35 mins
End: 3:25



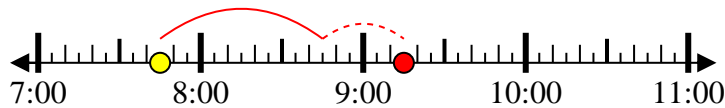
7) Start: 6:25

Elapsed: 1 hr & 50 mins
End: 8:15



8) Start: 7:45

Elapsed: 1 hr & 30 mins
End: 9:15



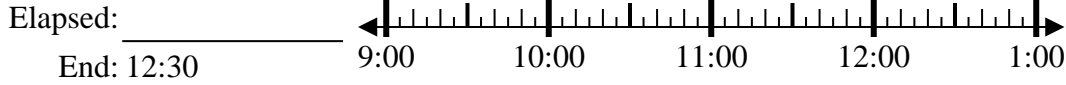
Answers

1. 1 hr & 15 mins
2. 2 hrs & 15 mins
3. 1 hr & 30 mins
4. 1 hr & 10 mins
5. 2 hrs & 30 mins
6. 1 hr & 35 mins
7. 1 hr & 50 mins
8. 1 hr & 30 mins



Solve each problem.

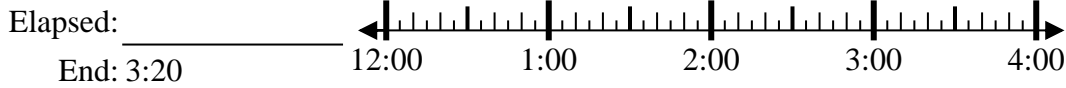
1) Start: 9:45



1. _____

2. _____

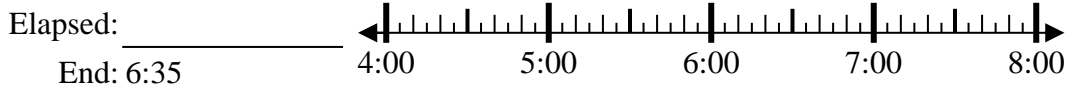
2) Start: 12:45



3. _____

4. _____

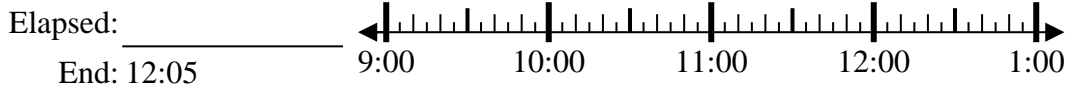
3) Start: 4:45



5. _____

6. _____

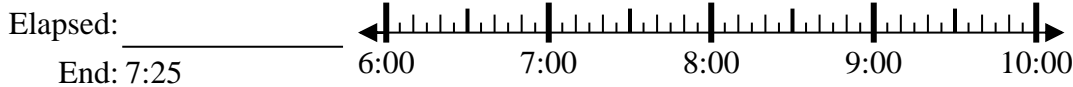
4) Start: 9:40



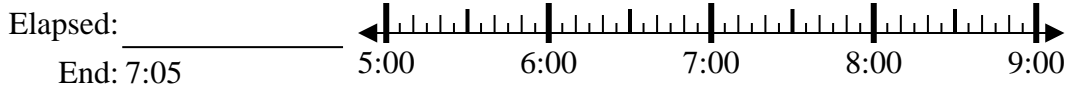
7. _____

8. _____

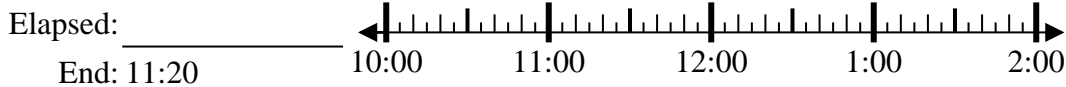
5) Start: 6:00



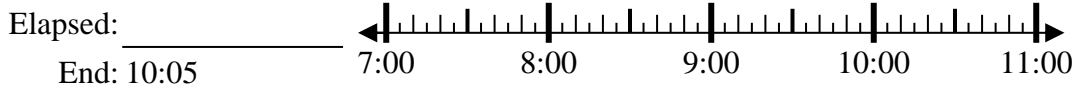
6) Start: 5:35



7) Start: 10:10



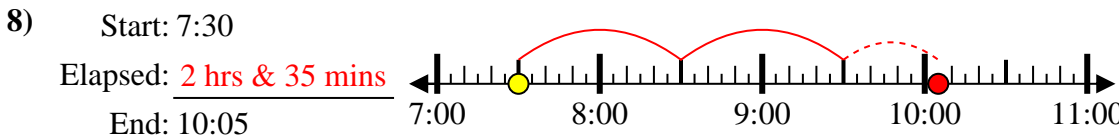
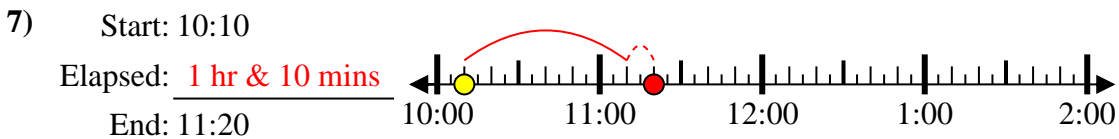
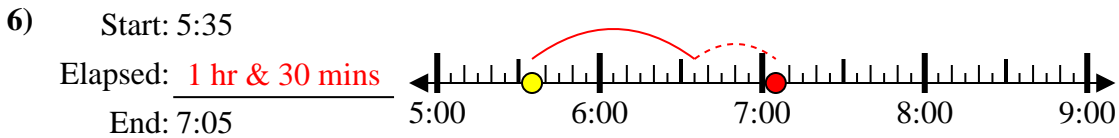
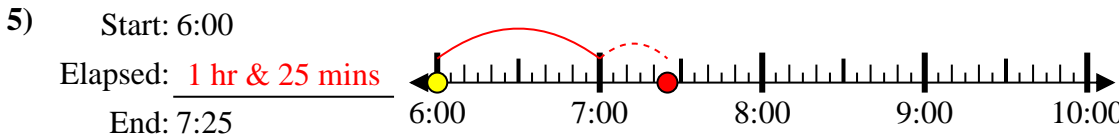
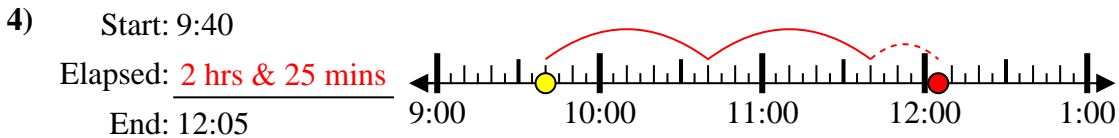
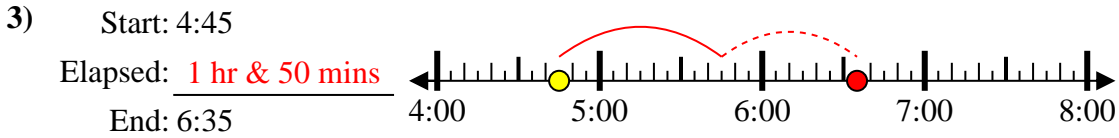
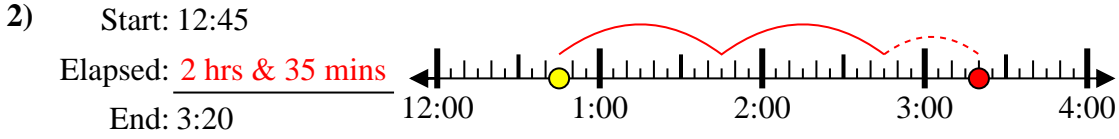
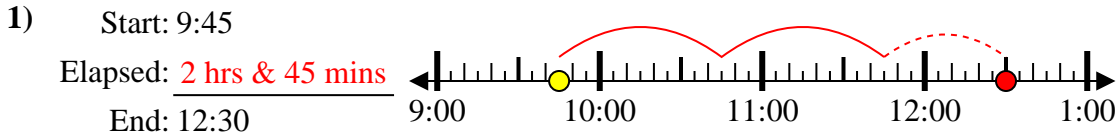
8) Start: 7:30



Answers



Solve each problem.



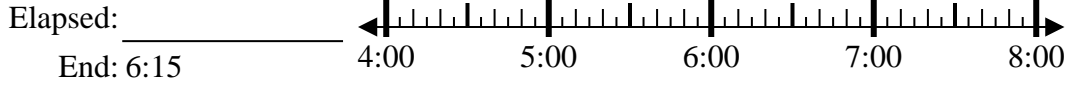
Answers

1. 2 hrs & 45 mins
2. 2 hrs & 35 mins
3. 1 hr & 50 mins
4. 2 hrs & 25 mins
5. 1 hr & 25 mins
6. 1 hr & 30 mins
7. 1 hr & 10 mins
8. 2 hrs & 35 mins



Solve each problem.

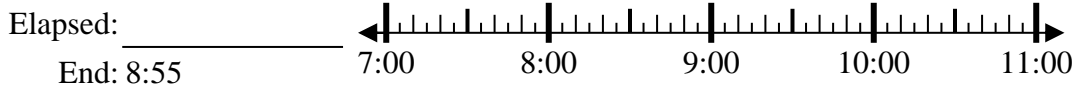
1) Start: 4:30



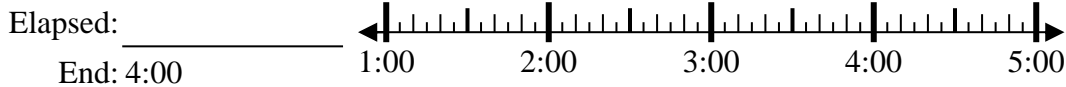
2) Start: 2:50



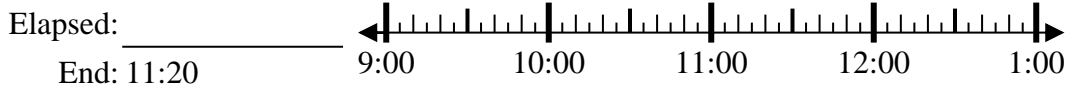
3) Start: 7:20



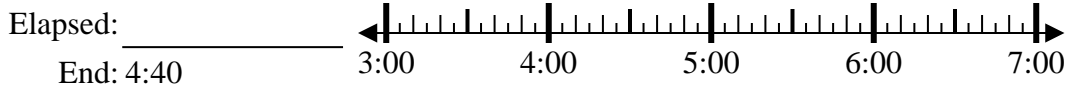
4) Start: 1:40



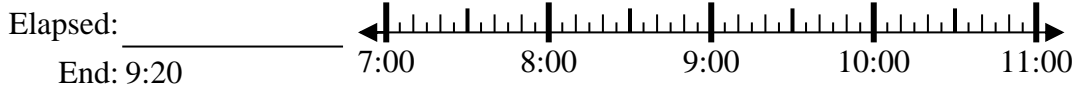
5) Start: 9:10



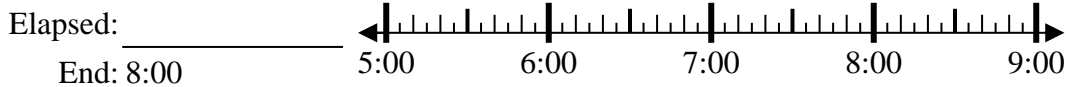
6) Start: 3:25



7) Start: 7:35



8) Start: 5:35



Answers

1. _____
2. _____
3. _____
4. _____
5. _____
6. _____
7. _____
8. _____



Solve each problem.

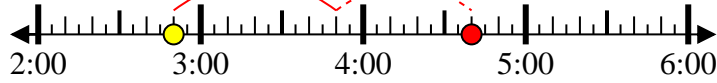
1) Start: 4:30

Elapsed: 1 hr & 45 mins
End: 6:15



2) Start: 2:50

Elapsed: 1 hr & 50 mins
End: 4:40



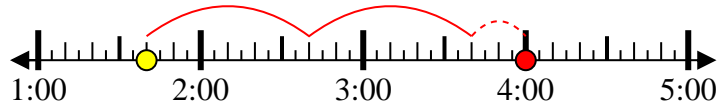
3) Start: 7:20

Elapsed: 1 hr & 35 mins
End: 8:55



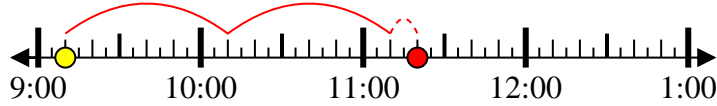
4) Start: 1:40

Elapsed: 2 hrs & 20 mins
End: 4:00



5) Start: 9:10

Elapsed: 2 hrs & 10 mins
End: 11:20



6) Start: 3:25

Elapsed: 1 hr & 15 mins
End: 4:40



7) Start: 7:35

Elapsed: 1 hr & 45 mins
End: 9:20



8) Start: 5:35

Elapsed: 2 hrs & 25 mins
End: 8:00



Answers

1. 1 hr & 45 mins

2. 1 hr & 50 mins

3. 1 hr & 35 mins

4. 2 hrs & 20 mins

5. 2 hrs & 10 mins

6. 1 hr & 15 mins

7. 1 hr & 45 mins

8. 2 hrs & 25 mins