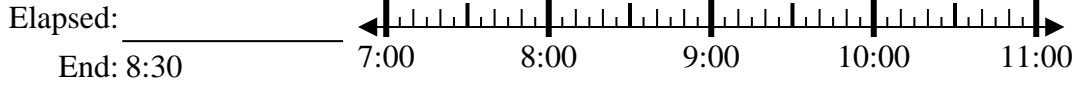




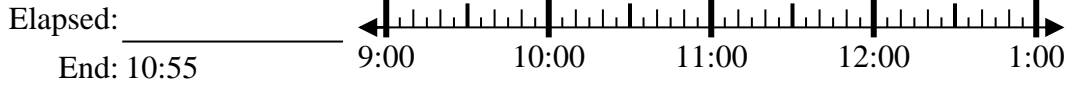
Solve each problem.

1) Start: 7:10



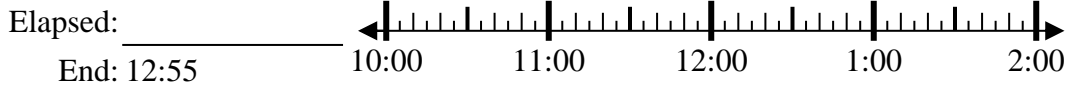
1. _____

2) Start: 9:35



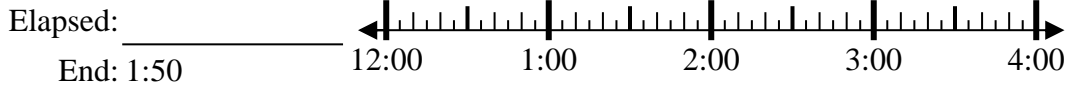
2. _____

3) Start: 10:15



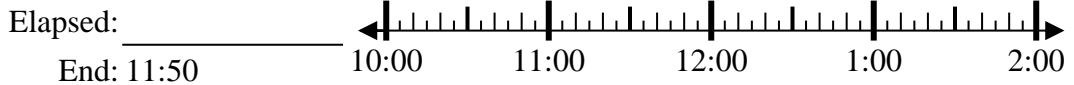
3. _____

4) Start: 12:20



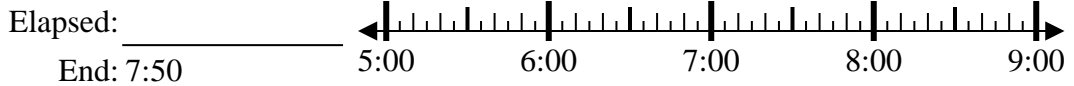
4. _____

5) Start: 10:35



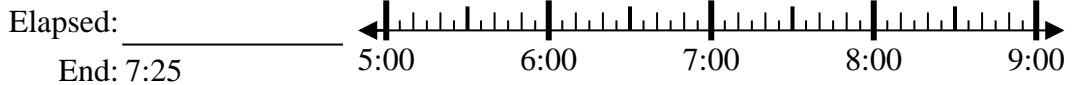
5. _____

6) Start: 5:15



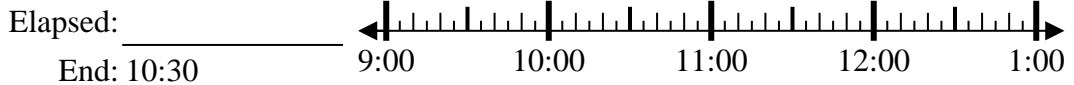
6. _____

7) Start: 5:00



7. _____

8) Start: 9:05



8. _____

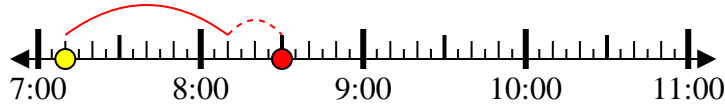
Answers



Solve each problem.

1) Start: 7:10

Elapsed: 1 hr & 20 mins
End: 8:30



2) Start: 9:35

Elapsed: 1 hr & 20 mins
End: 10:55



3) Start: 10:15

Elapsed: 2 hrs & 40 mins
End: 12:55



4) Start: 12:20

Elapsed: 1 hr & 30 mins
End: 1:50



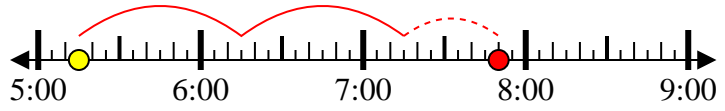
5) Start: 10:35

Elapsed: 1 hr & 15 mins
End: 11:50



6) Start: 5:15

Elapsed: 2 hrs & 35 mins
End: 7:50



7) Start: 5:00

Elapsed: 2 hrs & 25 mins
End: 7:25



8) Start: 9:05

Elapsed: 1 hr & 25 mins
End: 10:30



Answers

1. 1 hr & 20 mins

2. 1 hr & 20 mins

3. 2 hrs & 40 mins

4. 1 hr & 30 mins

5. 1 hr & 15 mins

6. 2 hrs & 35 mins

7. 2 hrs & 25 mins

8. 1 hr & 25 mins