



Match each table with the appropriate graph.

Answers

1)

Month	Snow (cm)
Oct	
Nov	
Dec	
Jan	
Feb	

2)

Month	Snow (cm)
Oct	
Nov	
Dec	
Jan	
Feb	

3)

Month	Snow (cm)
Oct	
Nov	
Dec	
Jan	
Feb	

4)

Month	Snow (cm)
Oct	
Nov	
Dec	
Jan	
Feb	

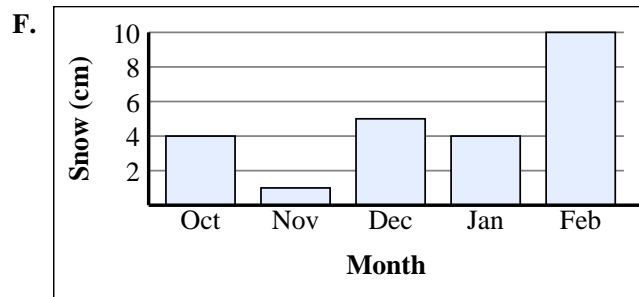
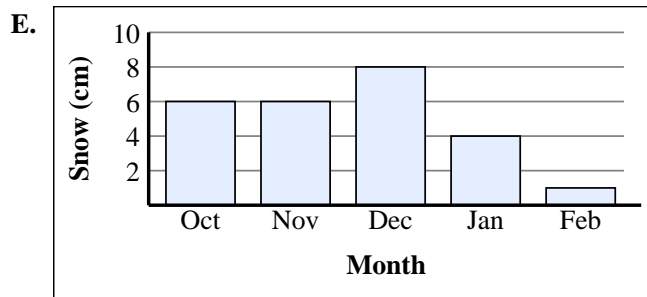
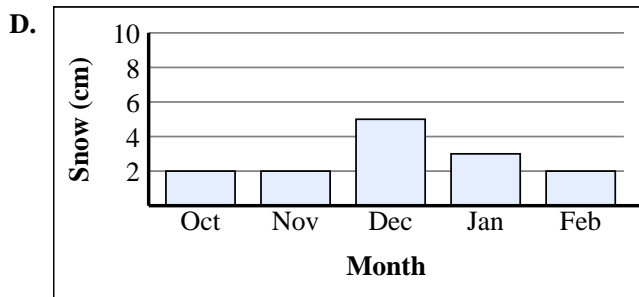
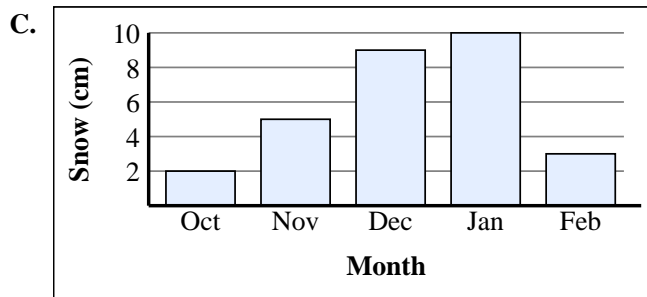
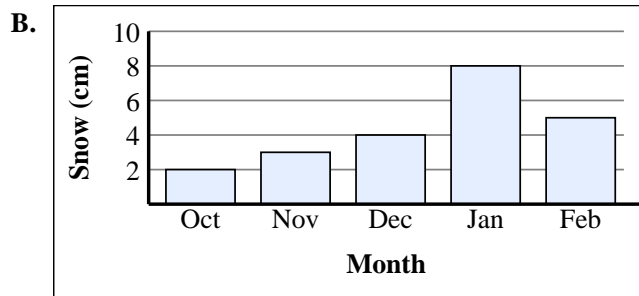
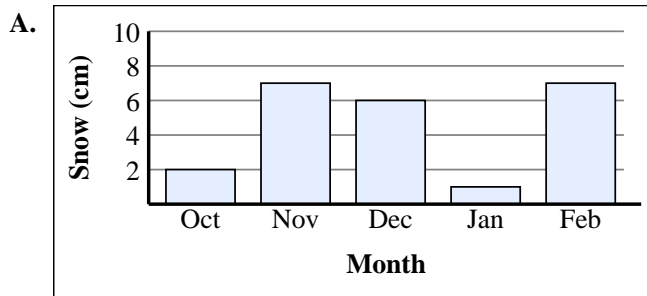
5)

Month	Snow (cm)
Oct	
Nov	
Dec	
Jan	
Feb	

6)

Month	Snow (cm)
Oct	
Nov	
Dec	
Jan	
Feb	

1. _____
2. _____
3. _____
4. _____
5. _____
6. _____





Match each table with the appropriate graph.

1)

Month	Snow (cm)
Oct	
Nov	
Dec	
Jan	
Feb	

2)

Month	Snow (cm)
Oct	
Nov	
Dec	
Jan	
Feb	

3)

Month	Snow (cm)
Oct	
Nov	
Dec	
Jan	
Feb	

4)

Month	Snow (cm)
Oct	
Nov	
Dec	
Jan	
Feb	

5)

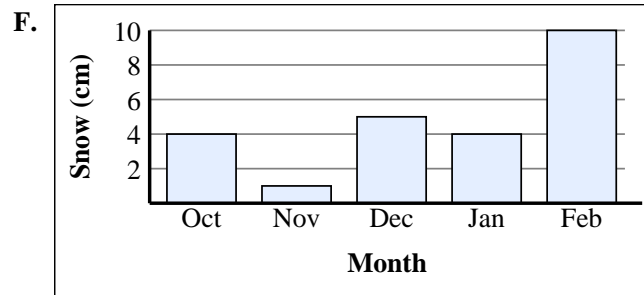
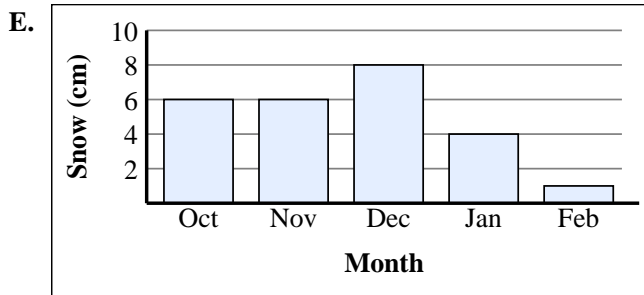
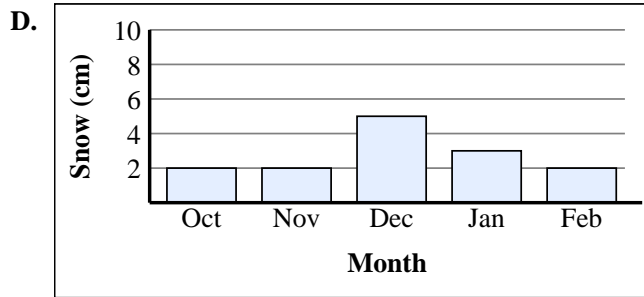
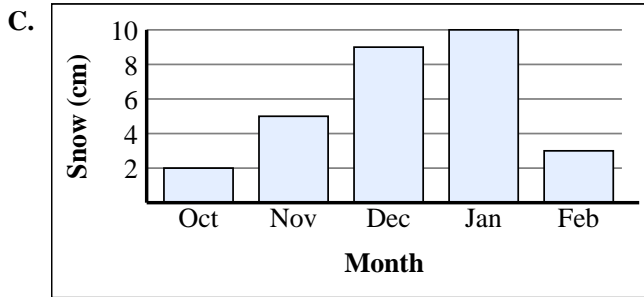
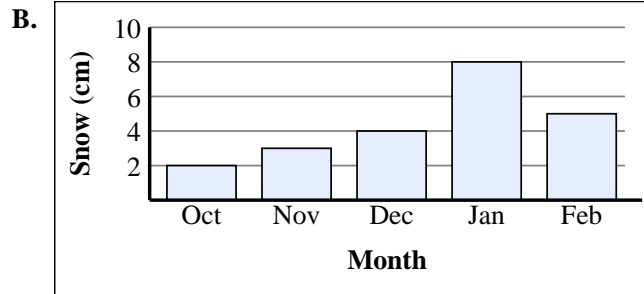
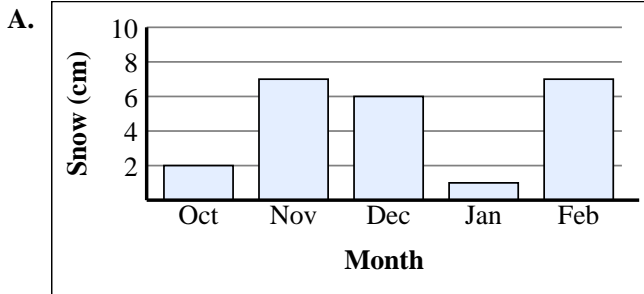
Month	Snow (cm)
Oct	
Nov	
Dec	
Jan	
Feb	

6)

Month	Snow (cm)
Oct	
Nov	
Dec	
Jan	
Feb	

Answers

- B**
- A**
- E**
- D**
- C**
- F**





Match each table with the appropriate graph.

Answers

1)

Day	Toys Sold
Mon	
Tue	
Wed	
Thu	
Fri	

2)

Day	Toys Sold
Mon	
Tue	
Wed	
Thu	
Fri	

3)

Day	Toys Sold
Mon	
Tue	
Wed	
Thu	
Fri	

4)

Day	Toys Sold
Mon	
Tue	
Wed	
Thu	
Fri	

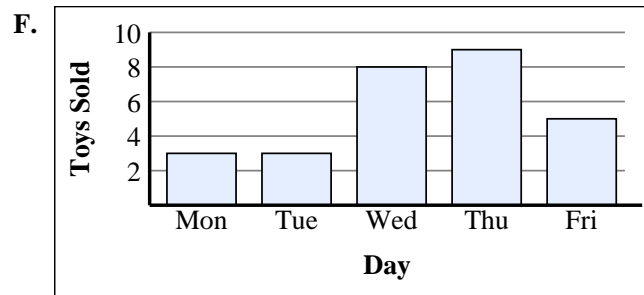
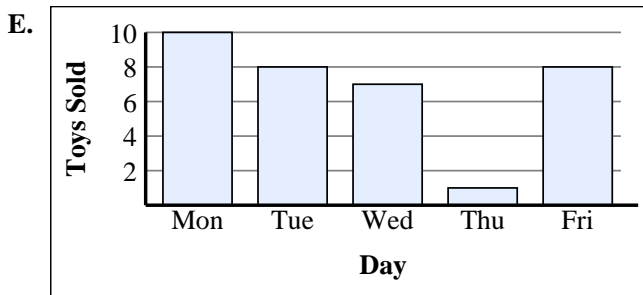
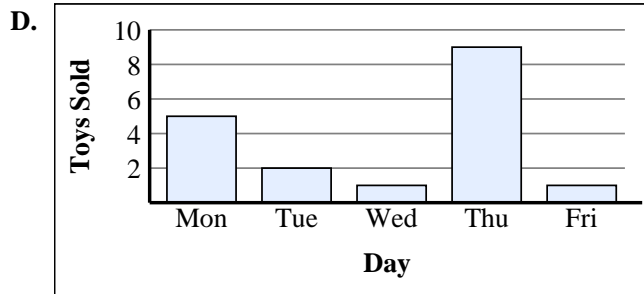
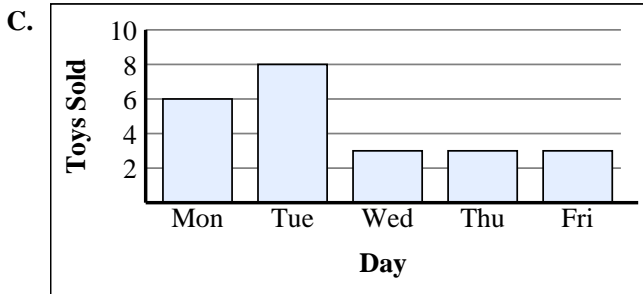
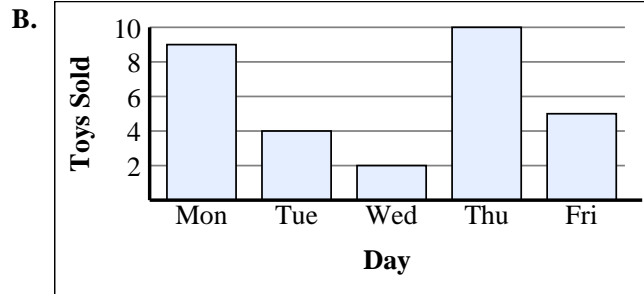
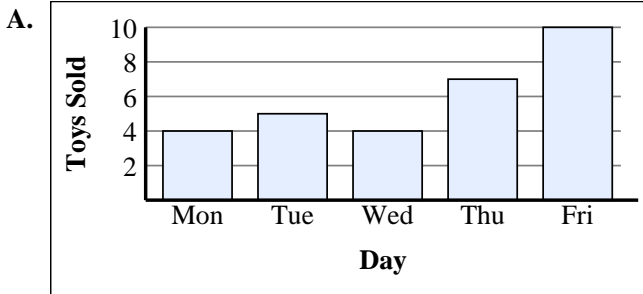
5)

Day	Toys Sold
Mon	
Tue	
Wed	
Thu	
Fri	

6)

Day	Toys Sold
Mon	
Tue	
Wed	
Thu	
Fri	

1. _____
2. _____
3. _____
4. _____
5. _____
6. _____





Match each table with the appropriate graph.

1)

Day	Toys Sold
Mon	
Tue	
Wed	
Thu	
Fri	

2)

Day	Toys Sold
Mon	
Tue	
Wed	
Thu	
Fri	

3)

Day	Toys Sold
Mon	
Tue	
Wed	
Thu	
Fri	

4)

Day	Toys Sold
Mon	
Tue	
Wed	
Thu	
Fri	

5)

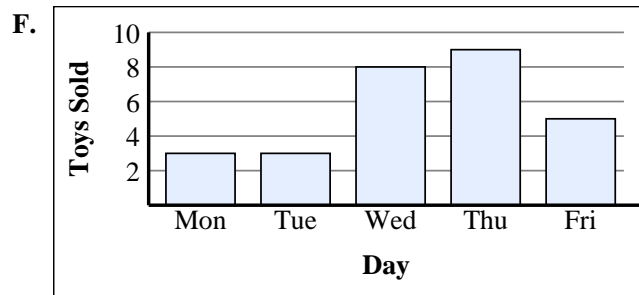
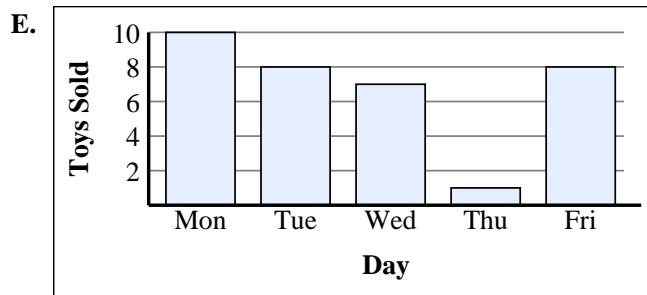
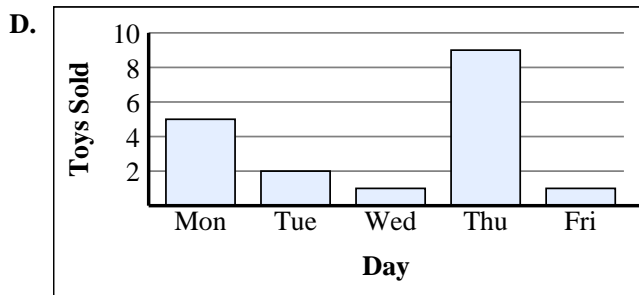
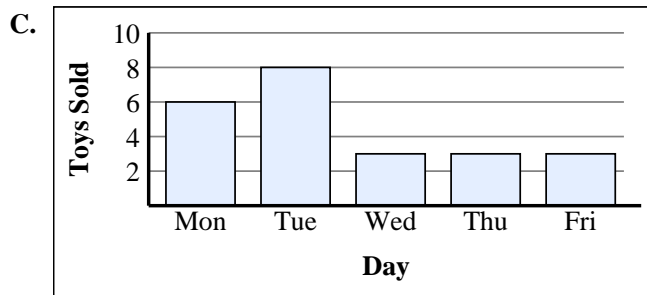
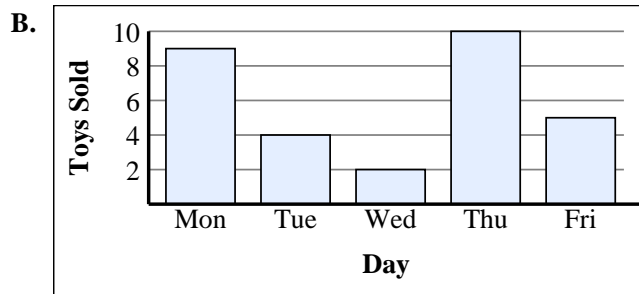
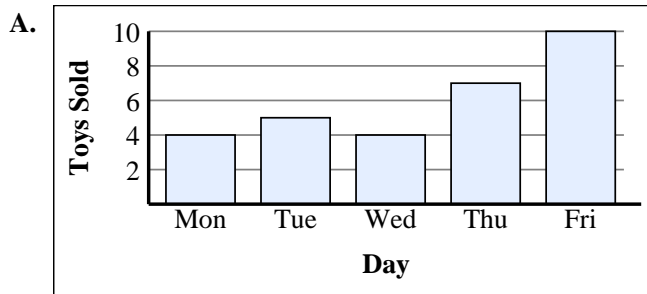
Day	Toys Sold
Mon	
Tue	
Wed	
Thu	
Fri	

6)

Day	Toys Sold
Mon	
Tue	
Wed	
Thu	
Fri	

Answers

1. **E**
2. **C**
3. **F**
4. **B**
5. **D**
6. **A**





Match each table with the appropriate graph.

Answers

1)

Time	Pizzas Sold
1pm	
2pm	
3pm	
4pm	
5pm	

2)

Time	Pizzas Sold
1pm	
2pm	
3pm	
4pm	
5pm	

3)

Time	Pizzas Sold
1pm	
2pm	
3pm	
4pm	
5pm	

4)

Time	Pizzas Sold
1pm	
2pm	
3pm	
4pm	
5pm	

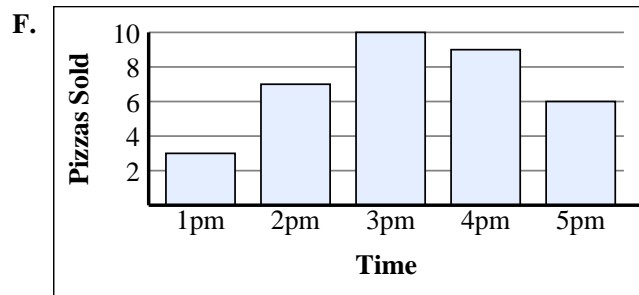
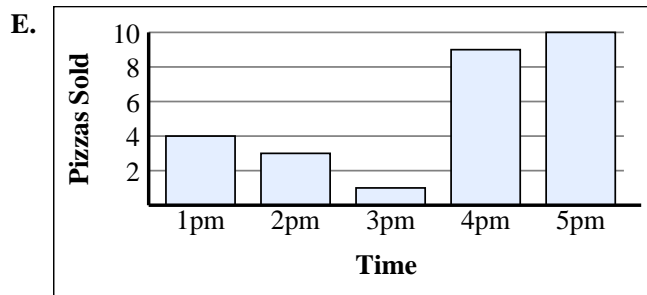
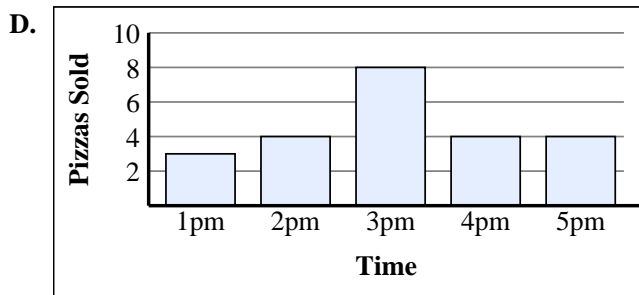
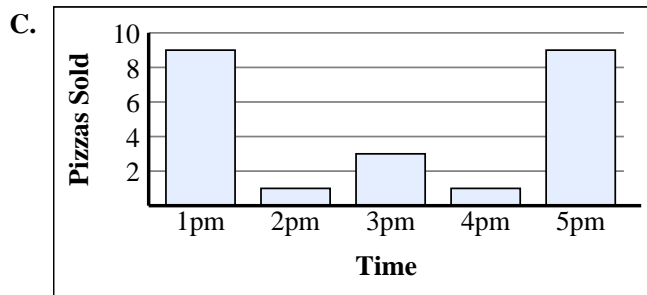
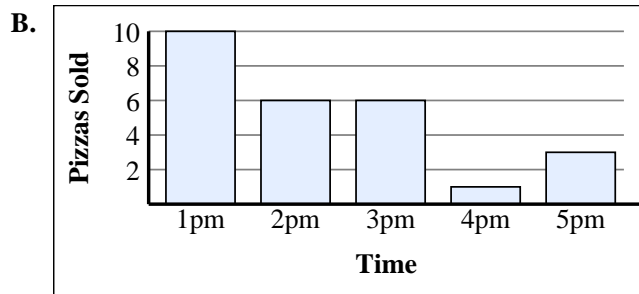
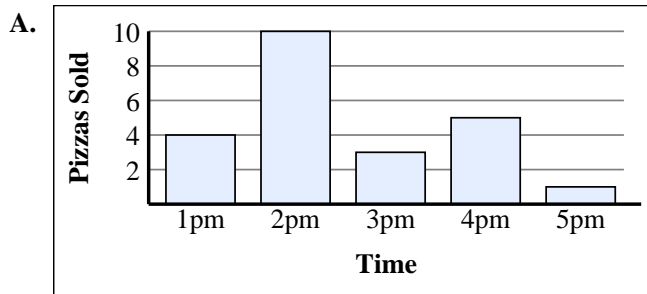
5)

Time	Pizzas Sold
1pm	
2pm	
3pm	
4pm	
5pm	

6)

Time	Pizzas Sold
1pm	
2pm	
3pm	
4pm	
5pm	

1. _____
2. _____
3. _____
4. _____
5. _____
6. _____





Match each table with the appropriate graph.

1)

Time	Pizzas Sold
1pm	
2pm	
3pm	
4pm	
5pm	

2)

Time	Pizzas Sold
1pm	
2pm	
3pm	
4pm	
5pm	

3)

Time	Pizzas Sold
1pm	
2pm	
3pm	
4pm	
5pm	

4)

Time	Pizzas Sold
1pm	
2pm	
3pm	
4pm	
5pm	

5)

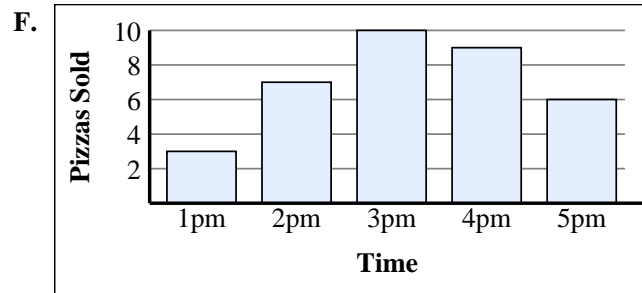
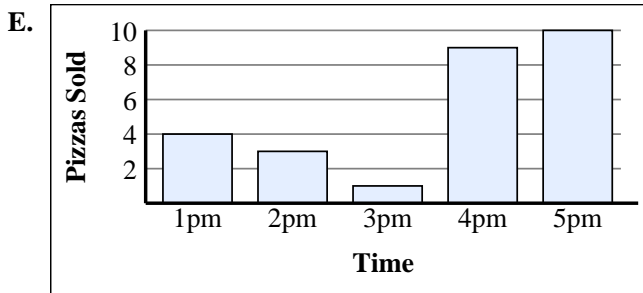
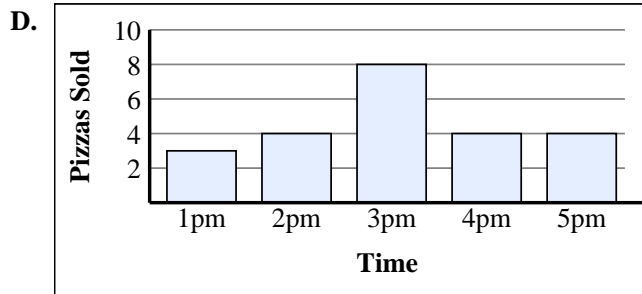
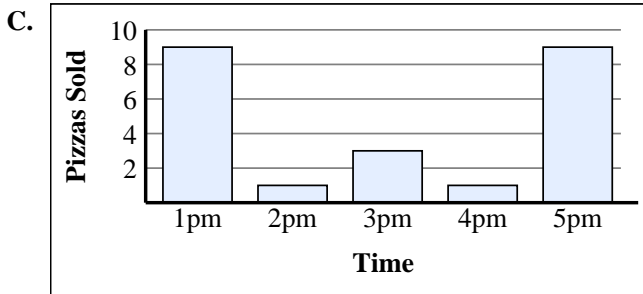
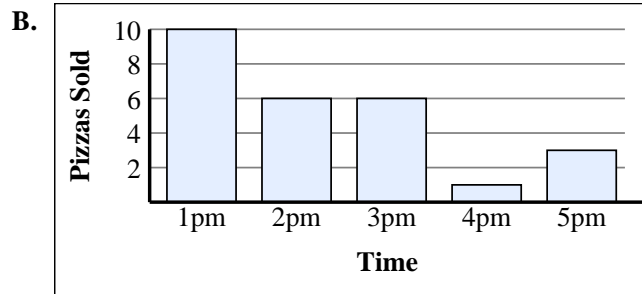
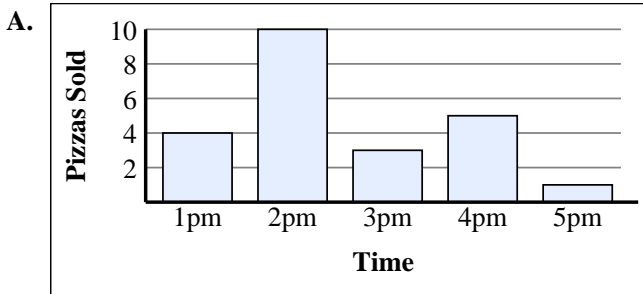
Time	Pizzas Sold
1pm	
2pm	
3pm	
4pm	
5pm	

6)

Time	Pizzas Sold
1pm	
2pm	
3pm	
4pm	
5pm	

Answers

1. **D**
2. **E**
3. **F**
4. **A**
5. **B**
6. **C**





Match each table with the appropriate graph.

Answers

1)

Game	Home Runs
Game 1	
Game 2	
Game 3	
Game 4	
Game 5	

2)

Game	Home Runs
Game 1	
Game 2	
Game 3	
Game 4	
Game 5	

3)

Game	Home Runs
Game 1	
Game 2	
Game 3	
Game 4	
Game 5	

4)

Game	Home Runs
Game 1	
Game 2	
Game 3	
Game 4	
Game 5	


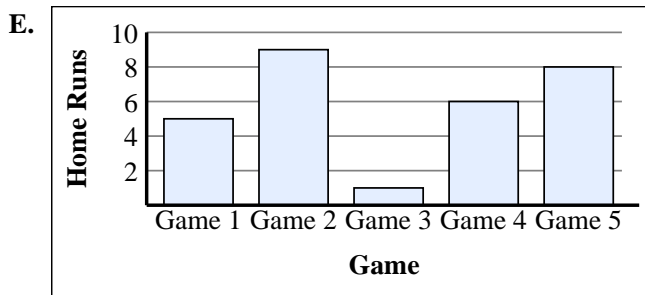
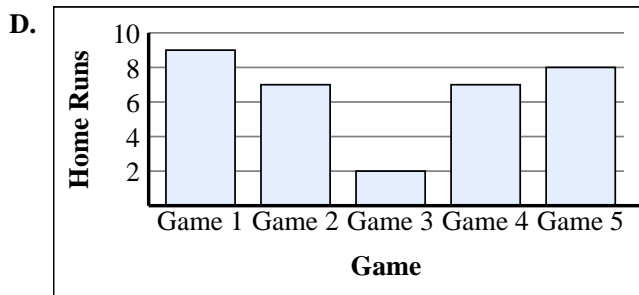
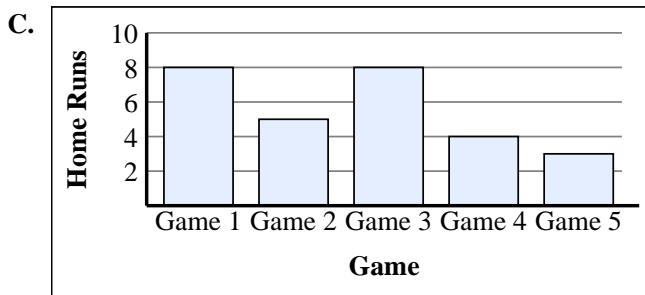
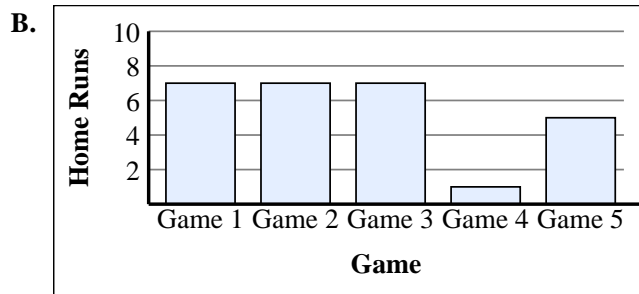
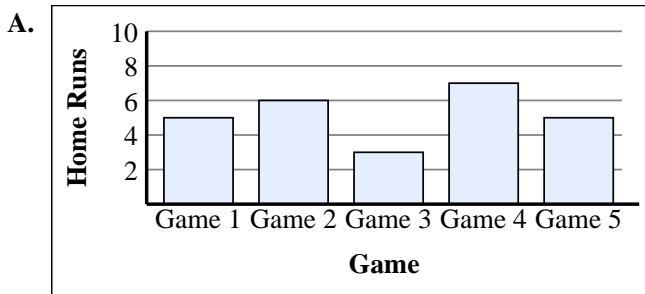
5)

Game	Home Runs
Game 1	
Game 2	
Game 3	
Game 4	
Game 5	

6)

Game	Home Runs
Game 1	
Game 2	
Game 3	
Game 4	
Game 5	

1. _____
2. _____
3. _____
4. _____
5. _____
6. _____





Match each table with the appropriate graph.

1)

Game	Home Runs
Game 1	
Game 2	
Game 3	
Game 4	
Game 5	

2)

Game	Home Runs
Game 1	
Game 2	
Game 3	
Game 4	
Game 5	

3)

Game	Home Runs
Game 1	
Game 2	
Game 3	
Game 4	
Game 5	

4)

Game	Home Runs
Game 1	
Game 2	
Game 3	
Game 4	
Game 5	

5)


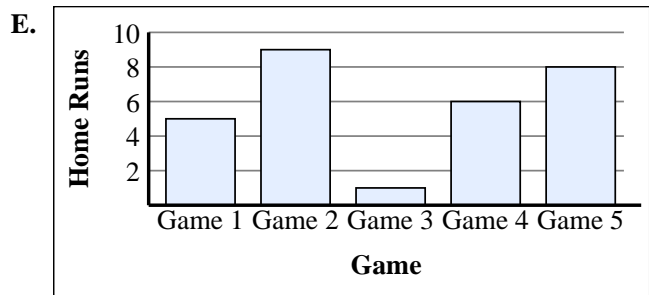
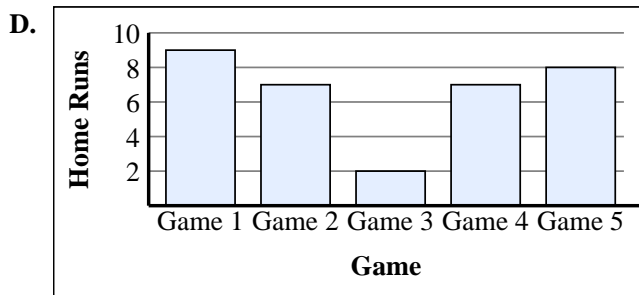
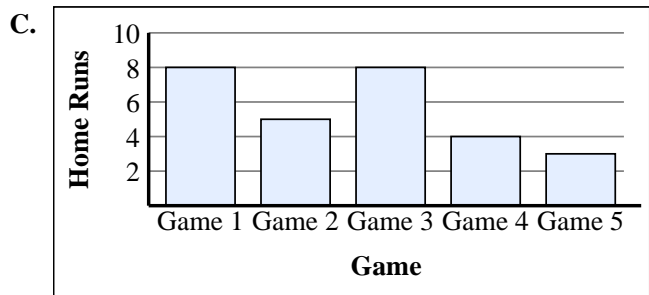
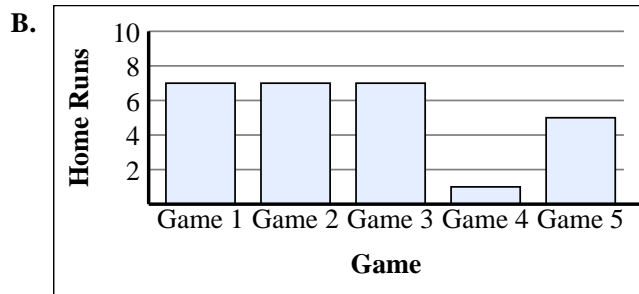
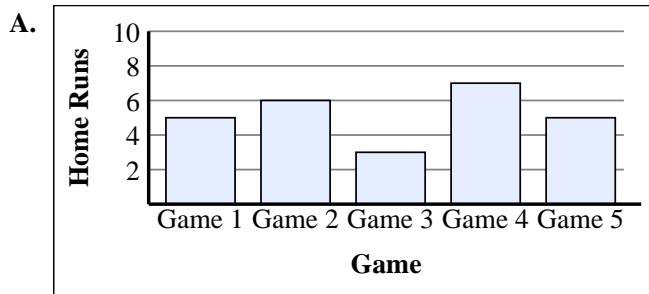
Game	Home Runs
Game 1	
Game 2	
Game 3	
Game 4	
Game 5	

6)

Game	Home Runs
Game 1	
Game 2	
Game 3	
Game 4	
Game 5	

Answers

1. **C**
2. **A**
3. **F**
4. **D**
5. **B**
6. **E**





Match each table with the appropriate graph.

1)

Team	Points Scored
Cubs	
Turtles	
Hawks	
Panthers	
Rangers	

2)

Team	Points Scored
Cubs	
Turtles	
Hawks	
Panthers	
Rangers	

3)

Team	Points Scored
Cubs	
Turtles	
Hawks	
Panthers	
Rangers	

4)

Team	Points Scored
Cubs	
Turtles	
Hawks	
Panthers	
Rangers	

5)

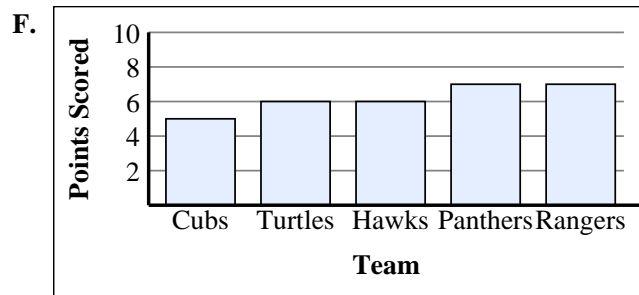
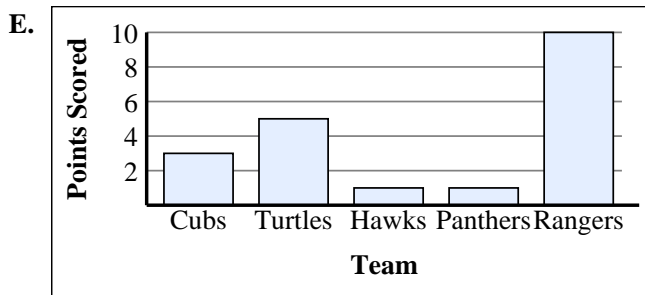
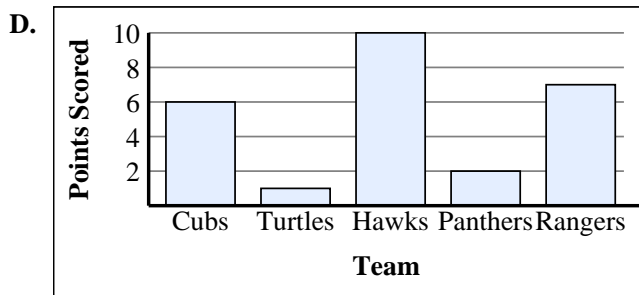
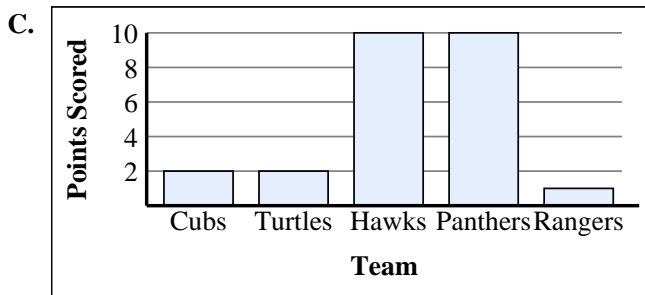
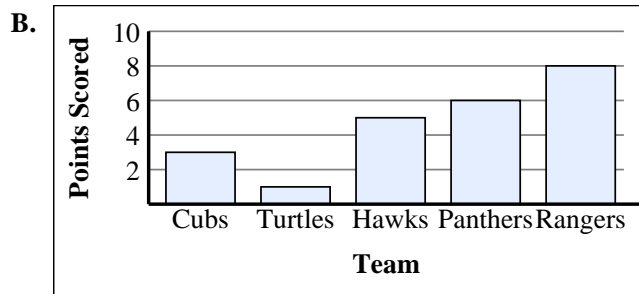
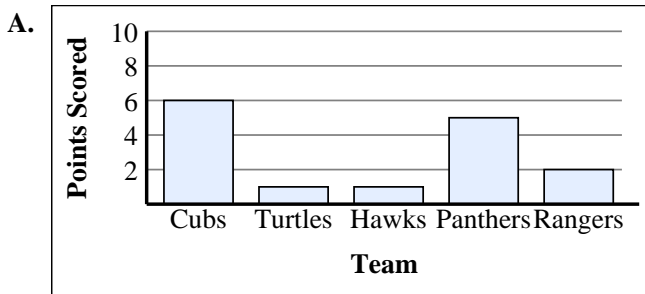
Team	Points Scored
Cubs	
Turtles	
Hawks	
Panthers	
Rangers	

6)

Team	Points Scored
Cubs	
Turtles	
Hawks	
Panthers	
Rangers	

Answers

1. _____
2. _____
3. _____
4. _____
5. _____
6. _____





Match each table with the appropriate graph.

1)

Team	Points Scored
Cubs	
Turtles	
Hawks	
Panthers	
Rangers	

2)

Team	Points Scored
Cubs	
Turtles	
Hawks	
Panthers	
Rangers	

3)

Team	Points Scored
Cubs	
Turtles	
Hawks	
Panthers	
Rangers	

4)

Team	Points Scored
Cubs	
Turtles	
Hawks	
Panthers	
Rangers	

5)

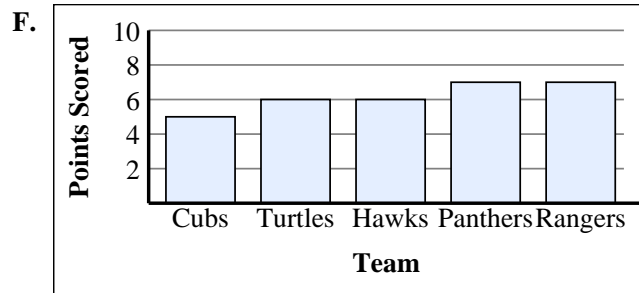
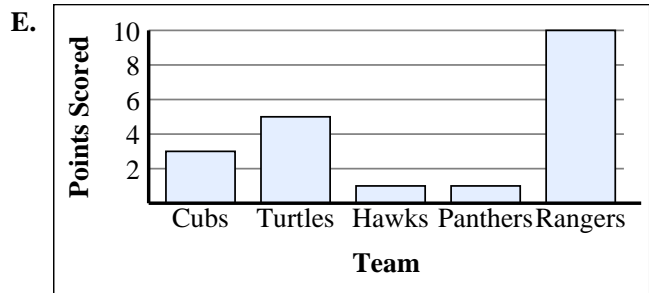
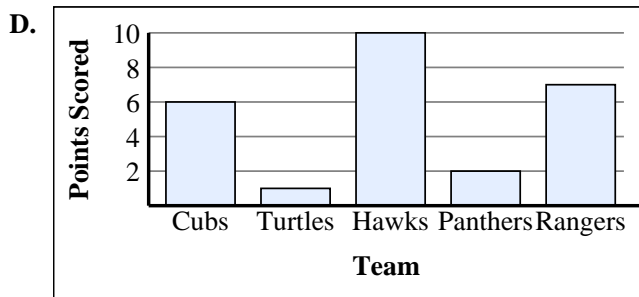
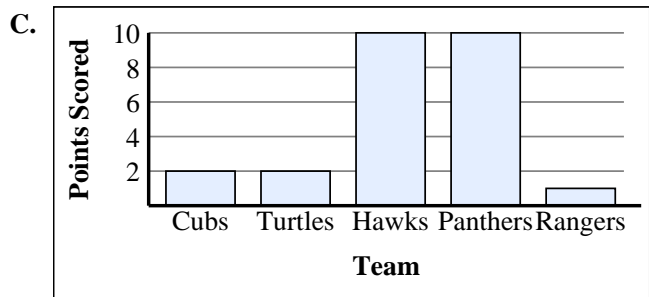
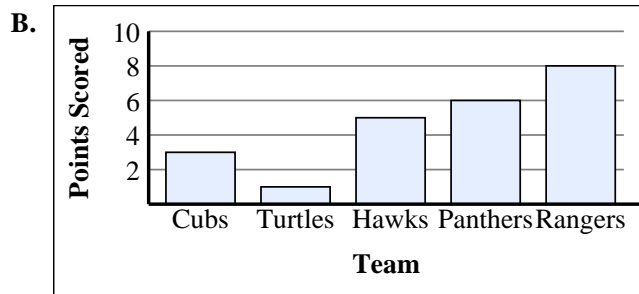
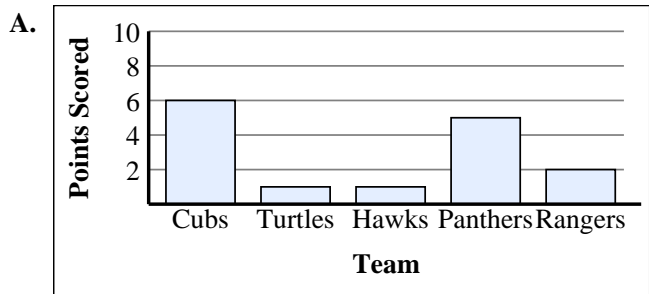
Team	Points Scored
Cubs	
Turtles	
Hawks	
Panthers	
Rangers	

6)

Team	Points Scored
Cubs	
Turtles	
Hawks	
Panthers	
Rangers	

Answers

1. **A**
2. **F**
3. **D**
4. **E**
5. **B**
6. **C**





Match each table with the appropriate graph.

Answers

1)

Day	Hours Worked
Mon	
Tue	
Wed	
Thu	
Fri	

2)

Day	Hours Worked
Mon	
Tue	
Wed	
Thu	
Fri	

3)

Day	Hours Worked
Mon	
Tue	
Wed	
Thu	
Fri	

4)

Day	Hours Worked
Mon	
Tue	
Wed	
Thu	
Fri	

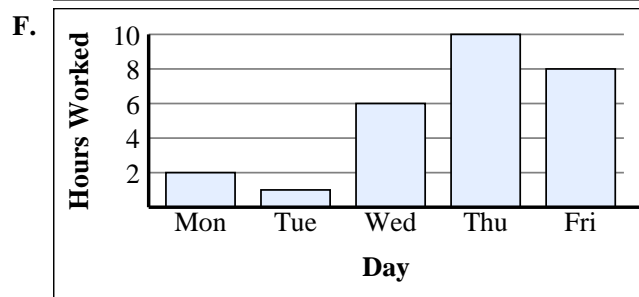
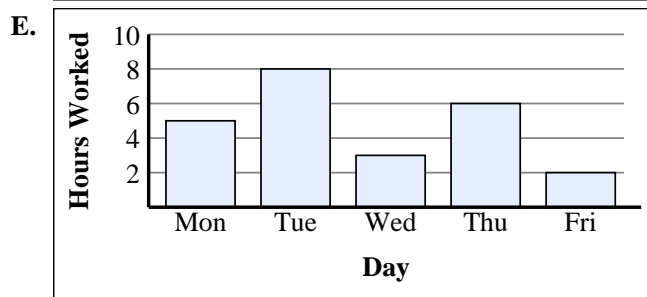
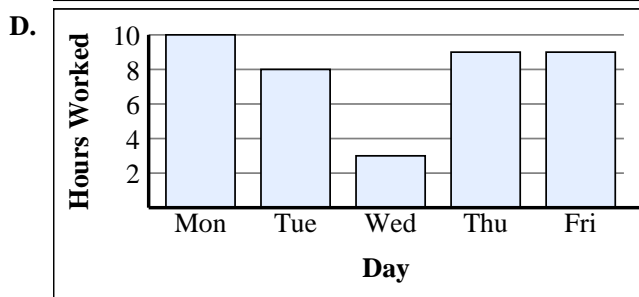
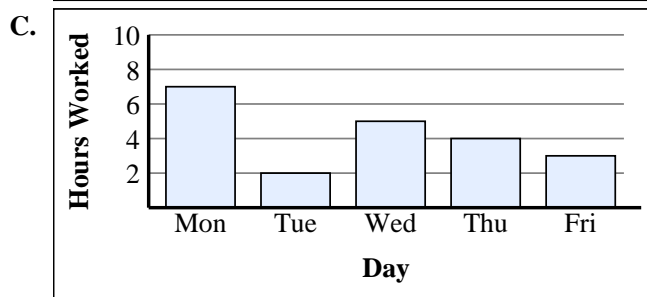
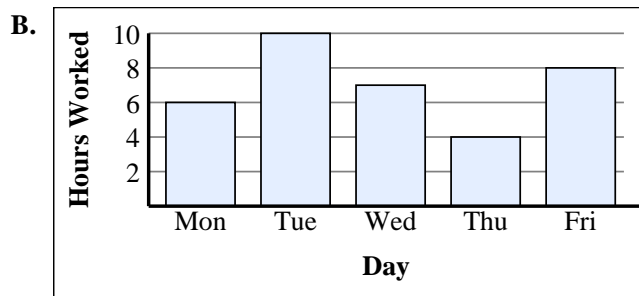
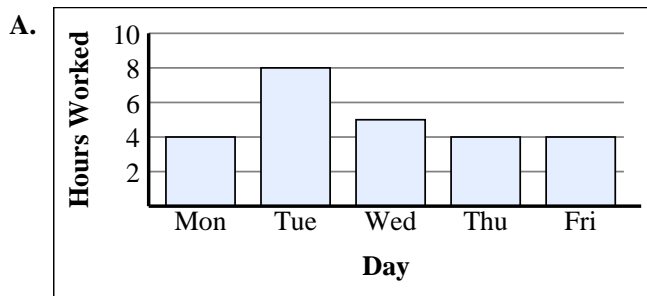
5)

Day	Hours Worked
Mon	
Tue	
Wed	
Thu	
Fri	

6)

Day	Hours Worked
Mon	
Tue	
Wed	
Thu	
Fri	

1. _____
2. _____
3. _____
4. _____
5. _____
6. _____





Match each table with the appropriate graph.

1)

Day	Hours Worked
Mon	
Tue	
Wed	
Thu	
Fri	

2)

Day	Hours Worked
Mon	
Tue	
Wed	
Thu	
Fri	

3)

Day	Hours Worked
Mon	
Tue	
Wed	
Thu	
Fri	

4)

Day	Hours Worked
Mon	
Tue	
Wed	
Thu	
Fri	

5)

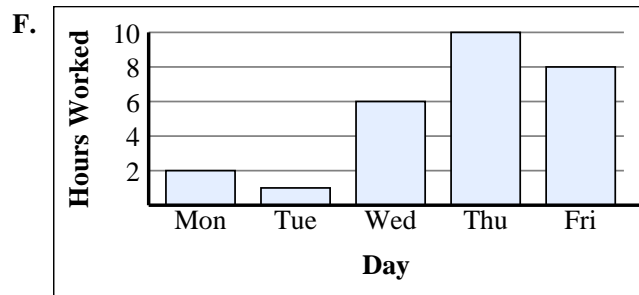
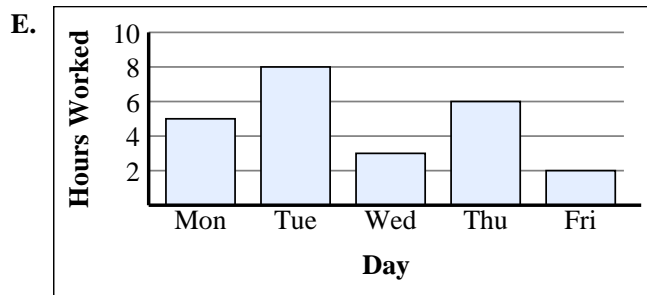
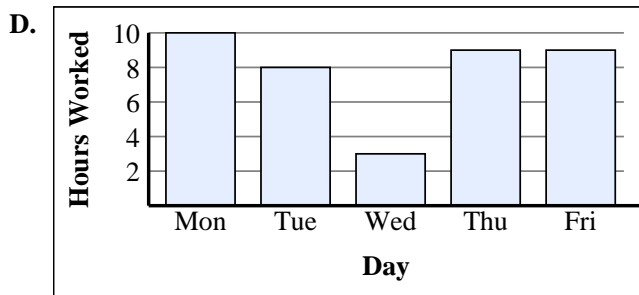
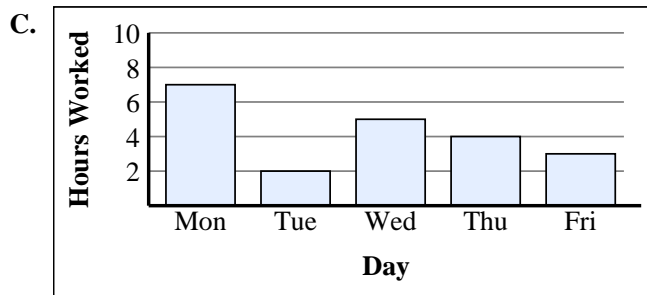
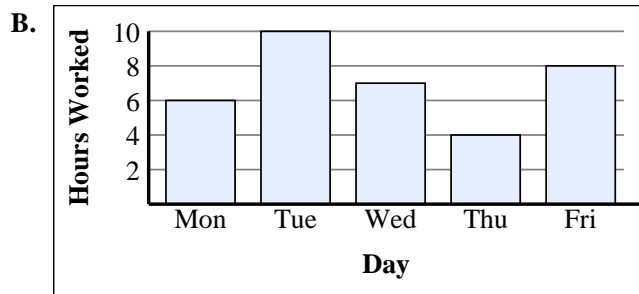
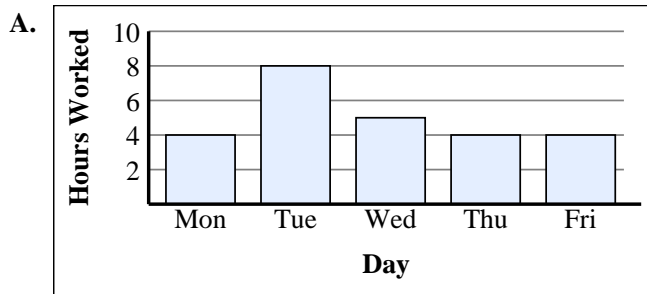
Day	Hours Worked
Mon	
Tue	
Wed	
Thu	
Fri	

6)

Day	Hours Worked
Mon	
Tue	
Wed	
Thu	
Fri	

Answers

1. **A**
2. **E**
3. **F**
4. **C**
5. **D**
6. **B**





Match each table with the appropriate graph.

Answers

1)

Team	Pies Eaten
Alpha	
Beta	
Delta	
Gamma	
Zeta	

2)

Team	Pies Eaten
Alpha	
Beta	
Delta	
Gamma	
Zeta	

3)

Team	Pies Eaten
Alpha	
Beta	
Delta	
Gamma	
Zeta	

4)

Team	Pies Eaten
Alpha	
Beta	
Delta	
Gamma	
Zeta	


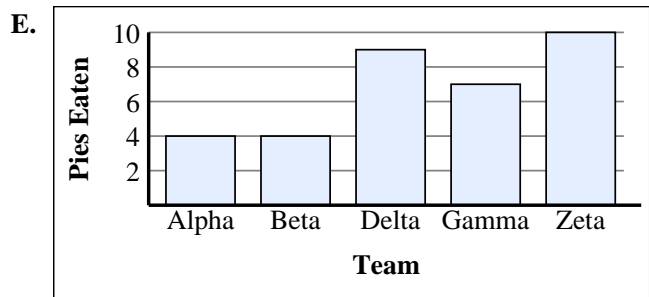




5)

Team	Pies Eaten
Alpha	
Beta	
Delta	
Gamma	
Zeta	

6)

Team	Pies Eaten
Alpha	
Beta	
Delta	
Gamma	
Zeta	

1. _____
2. _____
3. _____
4. _____
5. _____
6. _____





Match each table with the appropriate graph.

1)

Team	Pies Eaten
Alpha	
Beta	
Delta	
Gamma	
Zeta	

2)

Team	Pies Eaten
Alpha	
Beta	
Delta	
Gamma	
Zeta	

3)

Team	Pies Eaten
Alpha	
Beta	
Delta	
Gamma	
Zeta	

4)

Team	Pies Eaten
Alpha	
Beta	
Delta	
Gamma	
Zeta	

5)


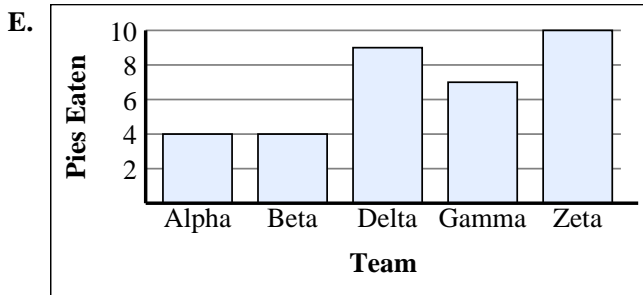




Team	Pies Eaten
Alpha	
Beta	
Delta	
Gamma	
Zeta	

6)

Team	Pies Eaten
Alpha	
Beta	
Delta	
Gamma	
Zeta	

Answers

1. **F**
2. **B**
3. **C**
4. **A**
5. **E**
6. **D**





Match each table with the appropriate graph.

Answers

1)

Name	Cans Recycled
Allen	
Beth	
Rick	
Andrea	
Dale	

2)

Name	Cans Recycled
Allen	
Beth	
Rick	
Andrea	
Dale	

3)

Name	Cans Recycled
Allen	
Beth	
Rick	
Andrea	
Dale	

4)

Name	Cans Recycled
Allen	
Beth	
Rick	
Andrea	
Dale	

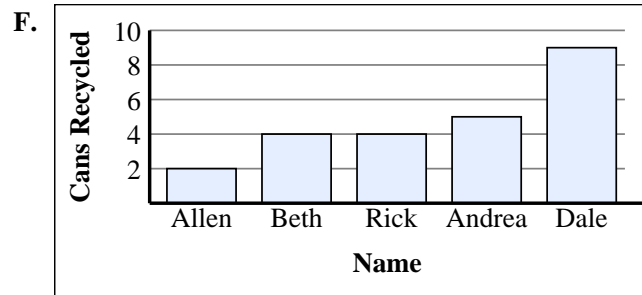
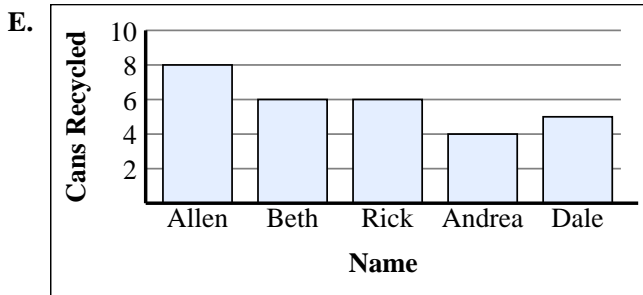
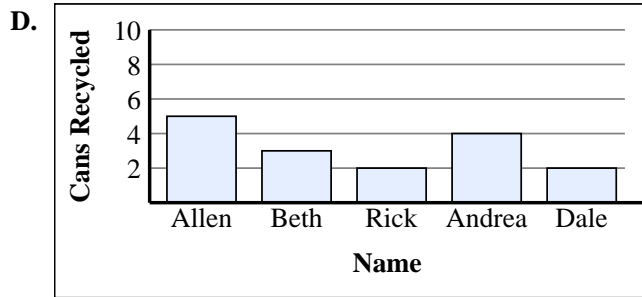
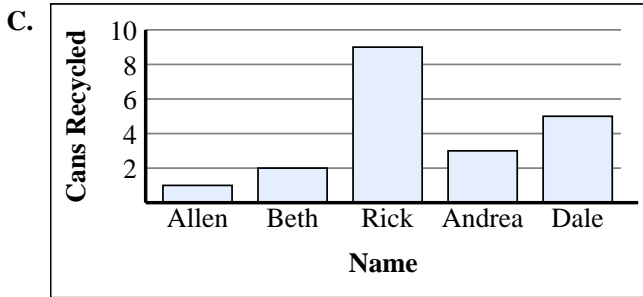
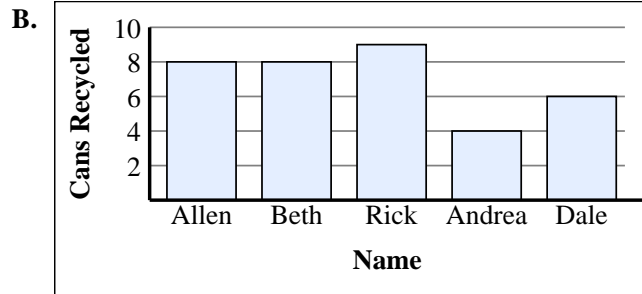
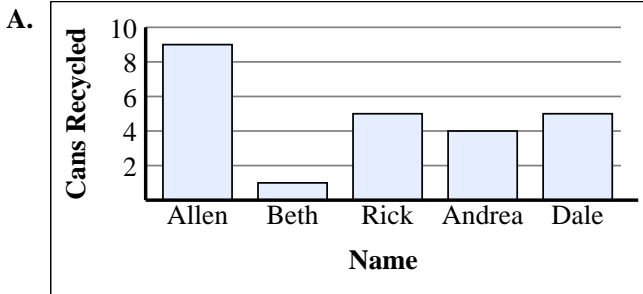
5)

Name	Cans Recycled
Allen	
Beth	
Rick	
Andrea	
Dale	

6)

Name	Cans Recycled
Allen	
Beth	
Rick	
Andrea	
Dale	

1. _____
2. _____
3. _____
4. _____
5. _____
6. _____





Match each table with the appropriate graph.

1)

Name	Cans Recycled
Allen	
Beth	
Rick	
Andrea	
Dale	

2)

Name	Cans Recycled
Allen	
Beth	
Rick	
Andrea	
Dale	

3)

Name	Cans Recycled
Allen	
Beth	
Rick	
Andrea	
Dale	

4)

Name	Cans Recycled
Allen	
Beth	
Rick	
Andrea	
Dale	

5)

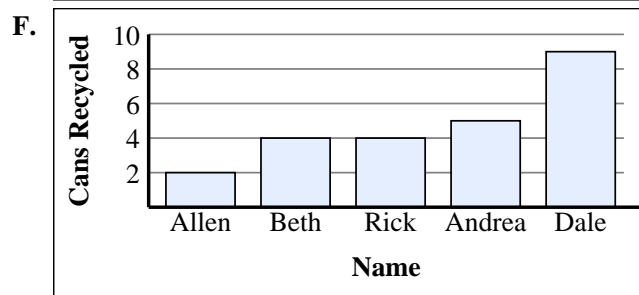
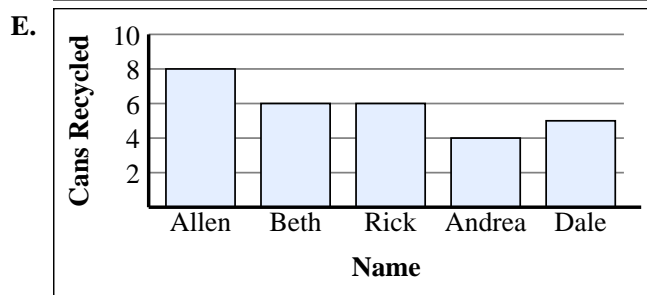
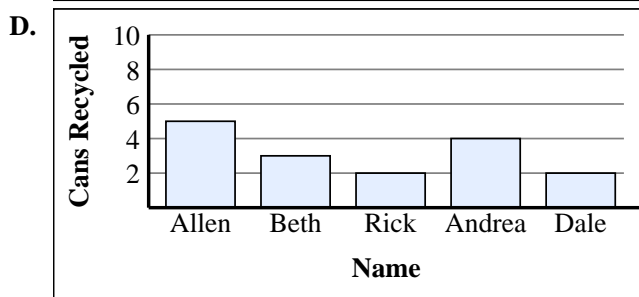
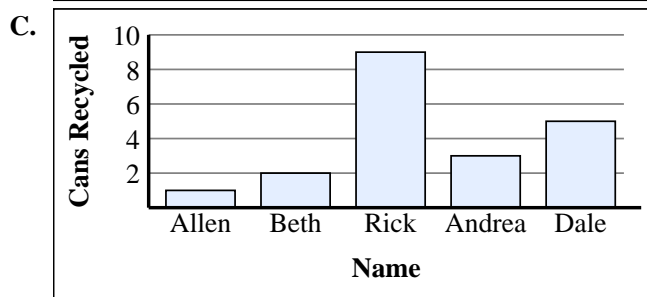
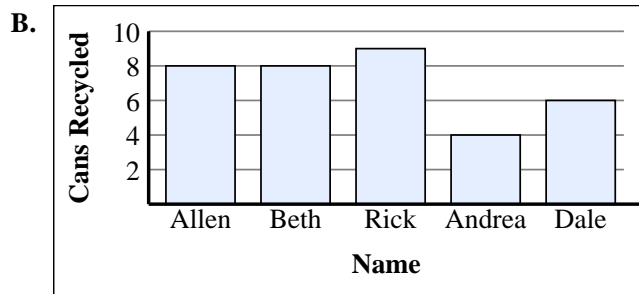
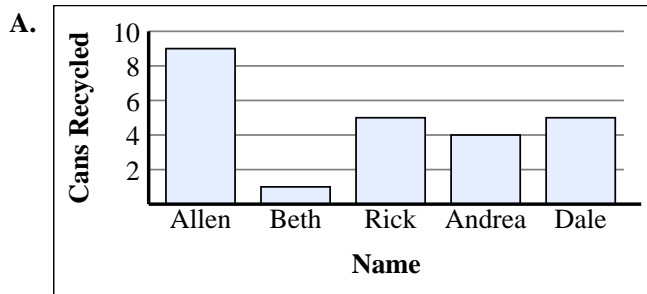
Name	Cans Recycled
Allen	
Beth	
Rick	
Andrea	
Dale	

6)

Name	Cans Recycled
Allen	
Beth	
Rick	
Andrea	
Dale	

Answers

1. **C**
2. **E**
3. **F**
4. **D**
5. **B**
6. **A**





Match each table with the appropriate graph.

Answers

1)

Name	Money Earned
Harry	
Dan	
Will	
Sarah	
Annie	

2)

Name	Money Earned
Harry	
Dan	
Will	
Sarah	
Annie	

3)

Name	Money Earned
Harry	
Dan	
Will	
Sarah	
Annie	

4)

Name	Money Earned
Harry	
Dan	
Will	
Sarah	
Annie	

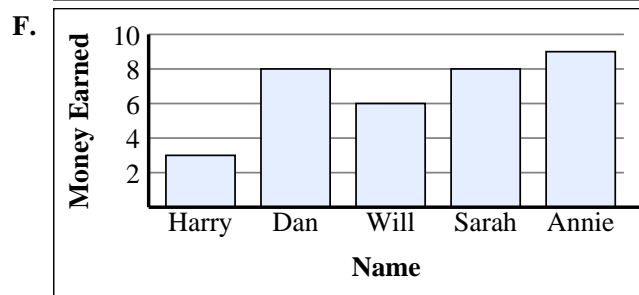
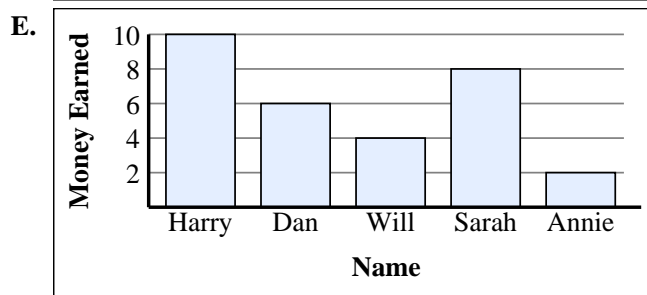
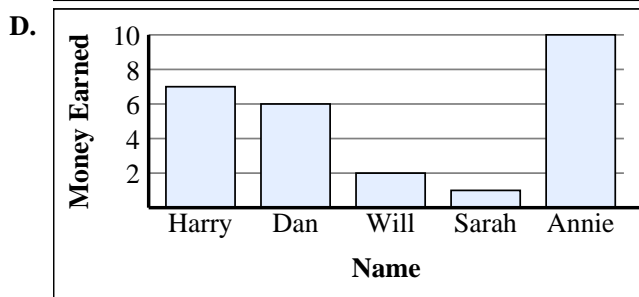
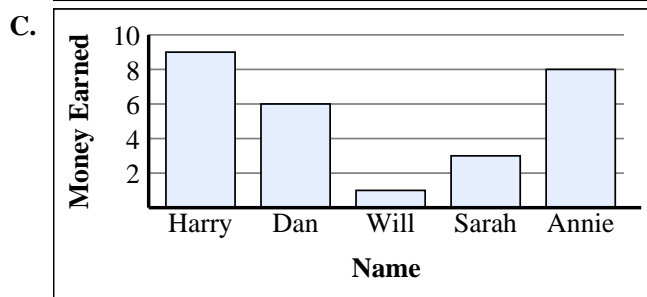
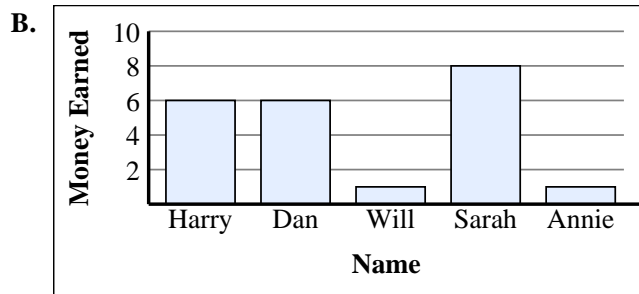
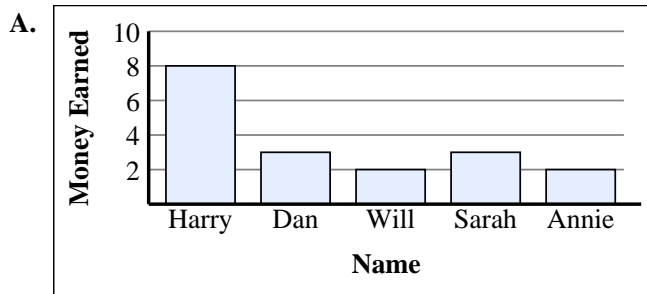
5)

Name	Money Earned
Harry	
Dan	
Will	
Sarah	
Annie	

6)

Name	Money Earned
Harry	
Dan	
Will	
Sarah	
Annie	

1. _____
2. _____
3. _____
4. _____
5. _____
6. _____





Match each table with the appropriate graph.

1)

Name	Money Earned
Harry	
Dan	
Will	
Sarah	
Annie	

2)

Name	Money Earned
Harry	
Dan	
Will	
Sarah	
Annie	

3)

Name	Money Earned
Harry	
Dan	
Will	
Sarah	
Annie	

4)

Name	Money Earned
Harry	
Dan	
Will	
Sarah	
Annie	

5)

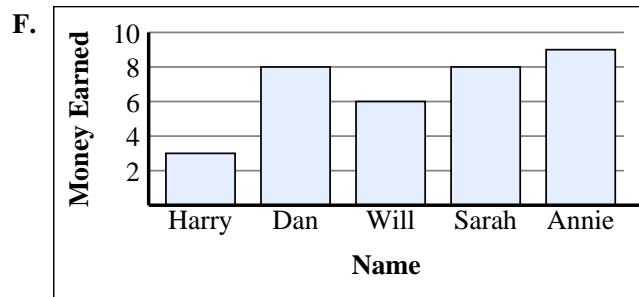
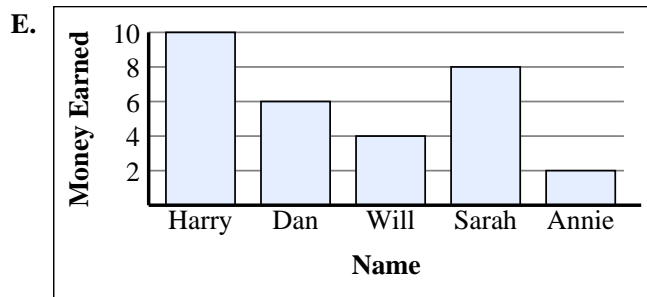
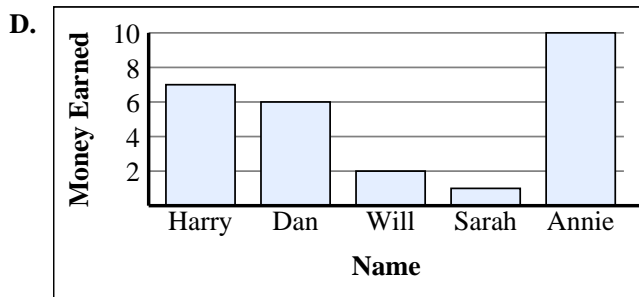
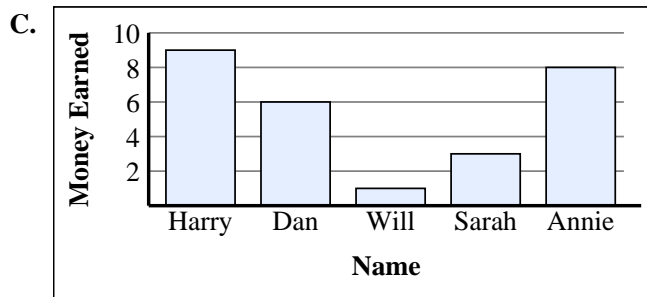
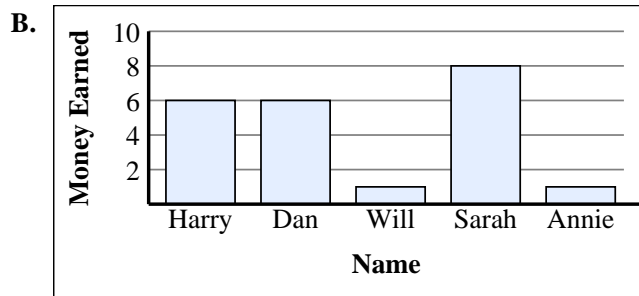
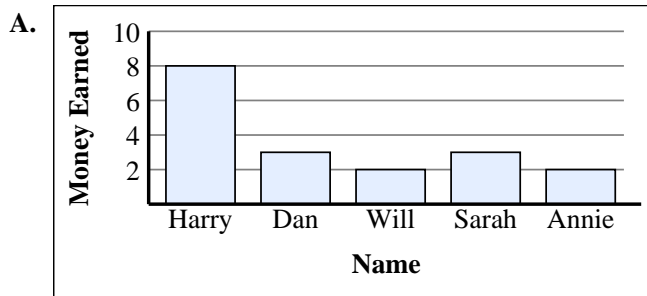
Name	Money Earned
Harry	
Dan	
Will	
Sarah	
Annie	

6)

Name	Money Earned
Harry	
Dan	
Will	
Sarah	
Annie	

Answers

1. **A**
2. **D**
3. **E**
4. **C**
5. **B**
6. **F**





Match each table with the appropriate graph.

1)

Class	Books Read
Smith	
Jones	
Adams	
Wilson	
Reed	

2)

Class	Books Read
Smith	
Jones	
Adams	
Wilson	
Reed	

3)

Class	Books Read
Smith	
Jones	
Adams	
Wilson	
Reed	

4)

Class	Books Read
Smith	
Jones	
Adams	
Wilson	
Reed	

5)



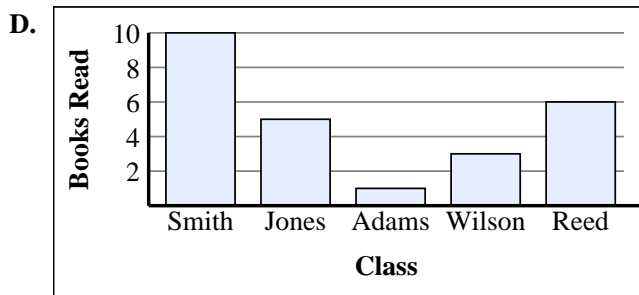

Class	Books Read
Smith	
Jones	
Adams	
Wilson	
Reed	

6)

Class	Books Read
Smith	
Jones	
Adams	
Wilson	
Reed	

Answers

1. _____
2. _____
3. _____
4. _____
5. _____
6. _____





Match each table with the appropriate graph.

1)

Class	Books Read
Smith	
Jones	
Adams	
Wilson	
Reed	

2)

Class	Books Read
Smith	
Jones	
Adams	
Wilson	
Reed	

3)

Class	Books Read
Smith	
Jones	
Adams	
Wilson	
Reed	

4)

Class	Books Read
Smith	
Jones	
Adams	
Wilson	
Reed	

5)

Class	Books Read
Smith	
Jones	
Adams	
Wilson	
Reed	

6)

Class	Books Read
Smith	
Jones	
Adams	
Wilson	
Reed	

Answers

1. **C**
2. **E**
3. **D**
4. **A**
5. **F**
6. **B**

