



Match each table with the appropriate graph.

**Answers**

1)

Name	Money Earned
Harry	
Dan	
Will	
Sarah	
Annie	

2)

Name	Money Earned
Harry	
Dan	
Will	
Sarah	
Annie	

3)

Name	Money Earned
Harry	
Dan	
Will	
Sarah	
Annie	

4)

Name	Money Earned
Harry	
Dan	
Will	
Sarah	
Annie	

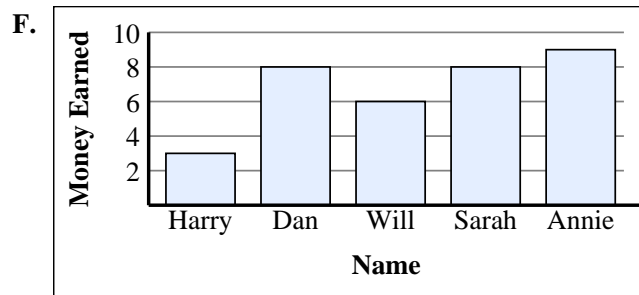
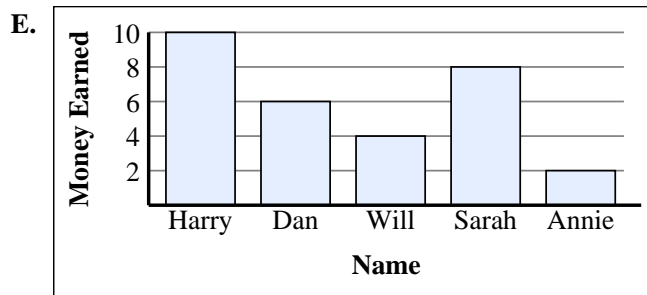
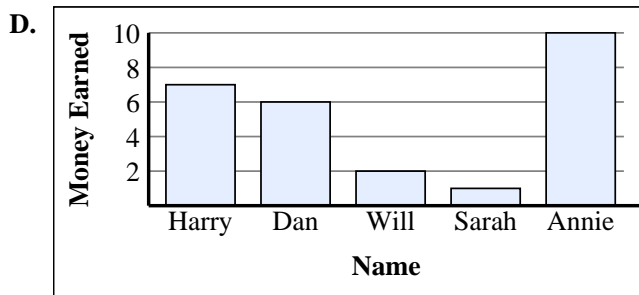
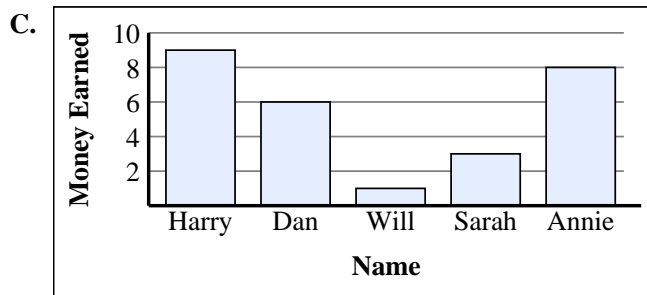
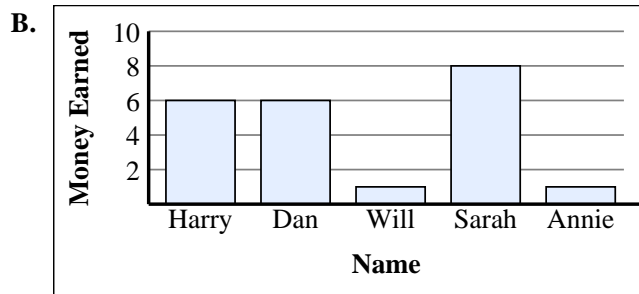
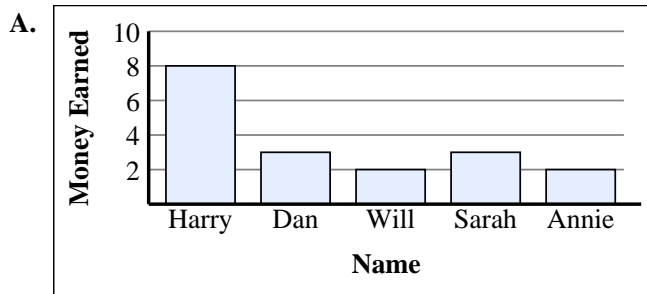
5)

Name	Money Earned
Harry	
Dan	
Will	
Sarah	
Annie	

6)

Name	Money Earned
Harry	
Dan	
Will	
Sarah	
Annie	

1. \_\_\_\_\_
2. \_\_\_\_\_
3. \_\_\_\_\_
4. \_\_\_\_\_
5. \_\_\_\_\_
6. \_\_\_\_\_





Match each table with the appropriate graph.

1)

Name	Money Earned
Harry	
Dan	
Will	
Sarah	
Annie	

2)

Name	Money Earned
Harry	
Dan	
Will	
Sarah	
Annie	

3)

Name	Money Earned
Harry	
Dan	
Will	
Sarah	
Annie	

4)

Name	Money Earned
Harry	
Dan	
Will	
Sarah	
Annie	

5)

Name	Money Earned
Harry	
Dan	
Will	
Sarah	
Annie	

6)

Name	Money Earned
Harry	
Dan	
Will	
Sarah	
Annie	

**Answers**

1. **A**
2. **D**
3. **E**
4. **C**
5. **B**
6. **F**

