



Match each table with the appropriate graph.

Answers

1)

Class	Books Read
Smith	
Jones	
Adams	
Wilson	
Reed	

2)

Class	Books Read
Smith	
Jones	
Adams	
Wilson	
Reed	

3)

Class	Books Read
Smith	
Jones	
Adams	
Wilson	
Reed	

4)

Class	Books Read
Smith	
Jones	
Adams	
Wilson	
Reed	



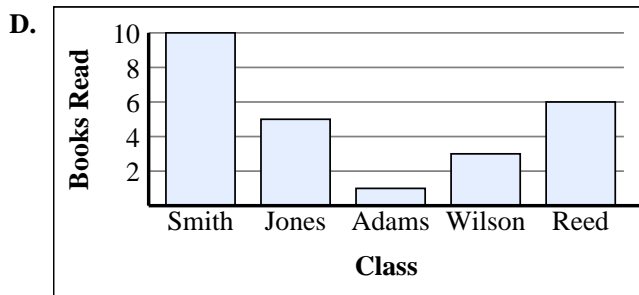

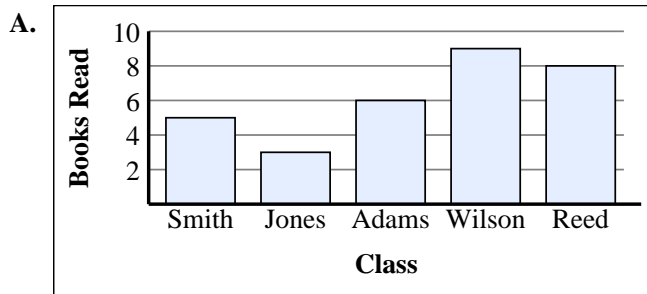
5)

Class	Books Read
Smith	
Jones	
Adams	
Wilson	
Reed	

6)

Class	Books Read
Smith	
Jones	
Adams	
Wilson	
Reed	

1. _____
2. _____
3. _____
4. _____
5. _____
6. _____





Match each table with the appropriate graph.

1)

Class	Books Read
Smith	
Jones	
Adams	
Wilson	
Reed	

2)

Class	Books Read
Smith	
Jones	
Adams	
Wilson	
Reed	

3)

Class	Books Read
Smith	
Jones	
Adams	
Wilson	
Reed	

4)

Class	Books Read
Smith	
Jones	
Adams	
Wilson	
Reed	

5)

Class	Books Read
Smith	
Jones	
Adams	
Wilson	
Reed	

6)

Class	Books Read
Smith	
Jones	
Adams	
Wilson	
Reed	

Answers

1. **C**
2. **E**
3. **D**
4. **A**
5. **F**
6. **B**

