



Match each table with the appropriate graph.

Answers

1)

Month	Snow (cm)
Oct	
Nov	
Dec	
Jan	
Feb	

2)

Month	Snow (cm)
Oct	
Nov	
Dec	
Jan	
Feb	

3)

Month	Snow (cm)
Oct	
Nov	
Dec	
Jan	
Feb	

4)

Month	Snow (cm)
Oct	
Nov	
Dec	
Jan	
Feb	

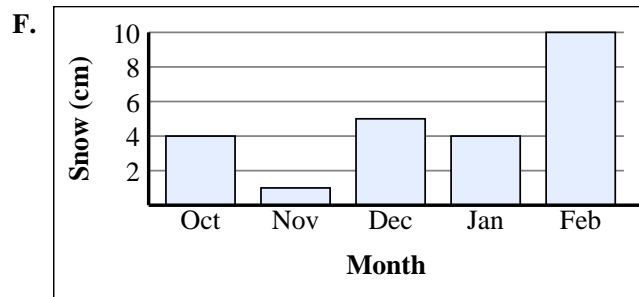
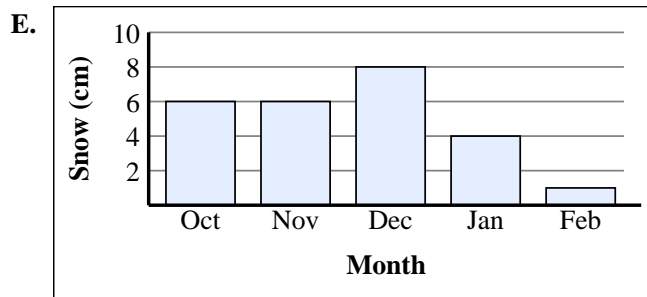
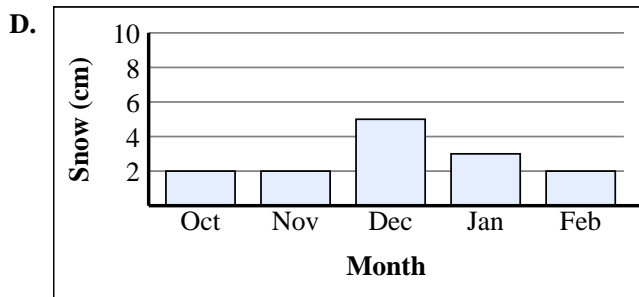
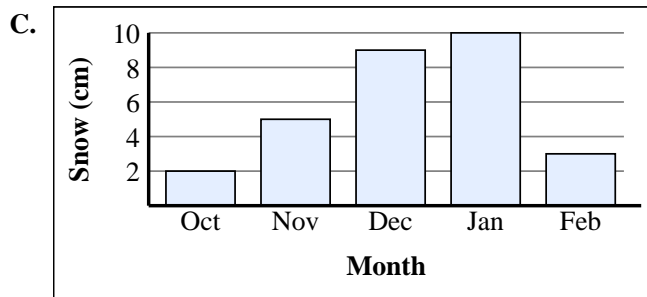
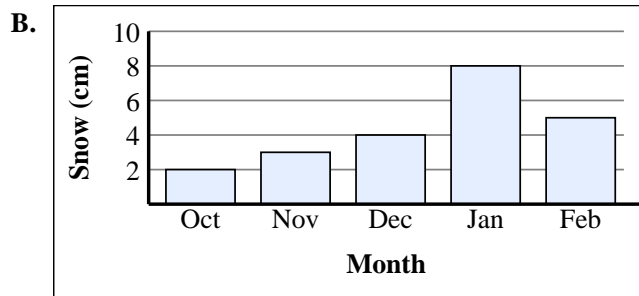
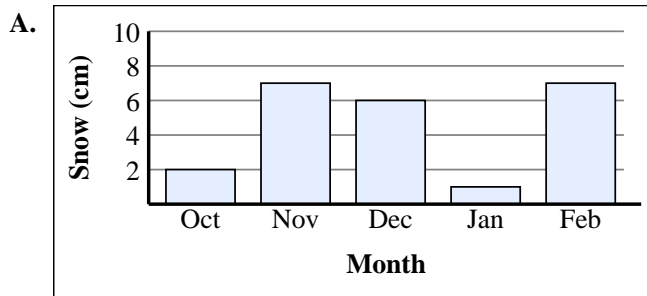
5)

Month	Snow (cm)
Oct	
Nov	
Dec	
Jan	
Feb	

6)

Month	Snow (cm)
Oct	
Nov	
Dec	
Jan	
Feb	

1. _____
2. _____
3. _____
4. _____
5. _____
6. _____





Match each table with the appropriate graph.

1)

Month	Snow (cm)
Oct	
Nov	
Dec	
Jan	
Feb	

2)

Month	Snow (cm)
Oct	
Nov	
Dec	
Jan	
Feb	

3)

Month	Snow (cm)
Oct	
Nov	
Dec	
Jan	
Feb	

4)

Month	Snow (cm)
Oct	
Nov	
Dec	
Jan	
Feb	

5)

Month	Snow (cm)
Oct	
Nov	
Dec	
Jan	
Feb	

6)

Month	Snow (cm)
Oct	
Nov	
Dec	
Jan	
Feb	

Answers

- B**
- A**
- E**
- D**
- C**
- F**

