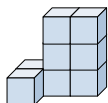




Solve each problem.

Answers

1) If you were looking at the 3d shape from the back what would you see?



A.



B.

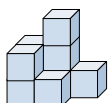


C.



1. _____

2) If you were looking at the 3d shape from the left side what would you see?



A.



B.

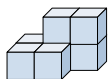


C.



2. _____

3) If you were looking at the 3d shape from the left side what would you see?



A.



B.

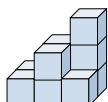


C.



3. _____

4) If you were looking at the 3d shape from the right side what would you see?



A.



B.

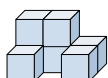


C.



4. _____

5) If you were looking at the 3d shape from the right side what would you see?



A.



B.



C.

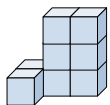





5. _____



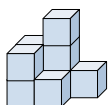
Solve each problem.




1) If you were looking at the 3d shape from the back what would you see?



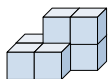
- A.  B.  C. 




2) If you were looking at the 3d shape from the left side what would you see?



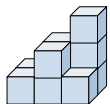
- A.  B.  C. 




3) If you were looking at the 3d shape from the left side what would you see?



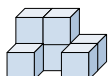
- A.  B.  C. 




4) If you were looking at the 3d shape from the right side what would you see?



- A.  B.  C. 

5) If you were looking at the 3d shape from the right side what would you see?



- A.  B.  C. 

Answers

1. **A**

2. **B**

3. **A**

4. **B**

5. **A**