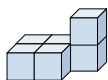




Solve each problem.

Answers

1) If you were looking at the 3d shape from above what would you see?



A.



B.

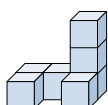


C.



1. \_\_\_\_\_

2) If you were looking at the 3d shape from the left side what would you see?



A.



B.

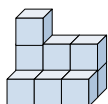


C.



2. \_\_\_\_\_

3) If you were looking at the 3d shape from the back what would you see?



A.



B.

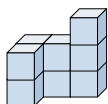


C.



3. \_\_\_\_\_

4) If you were looking at the 3d shape from the left side what would you see?



A.



B.

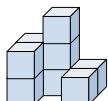


C.



4. \_\_\_\_\_

5) If you were looking at the 3d shape from the left side what would you see?



A.



B.



C.

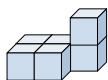


5. \_\_\_\_\_

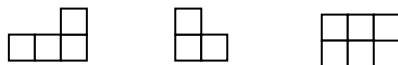


Solve each problem.

1) If you were looking at the 3d shape from above what would you see?



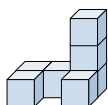
A.                      B.                      C.



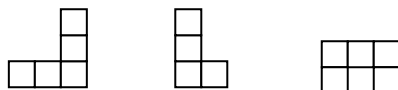
Answers

1.           **C**          

2) If you were looking at the 3d shape from the left side what would you see?

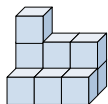


A.                      B.                      C.

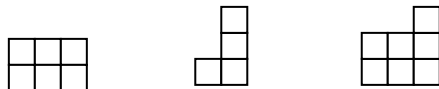


2.           **B**          

3) If you were looking at the 3d shape from the back what would you see?

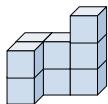


A.                      B.                      C.

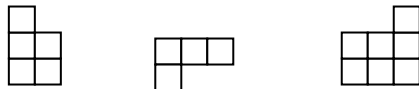


3.           **C**          

4) If you were looking at the 3d shape from the left side what would you see?

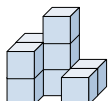


A.                      B.                      C.

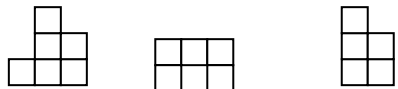


4.           **A**          

5) If you were looking at the 3d shape from the left side what would you see?



A.                      B.                      C.



5.           **C**