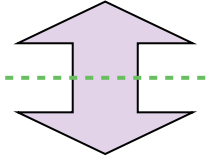


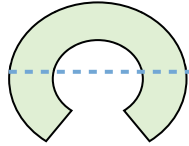


Determine if the line through each figure is a line of symmetry.

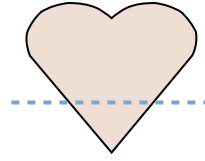
Ex)



1)



2)



Answers

Ex. yes

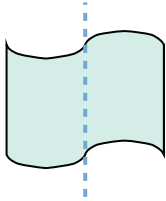
1. _____

2. _____

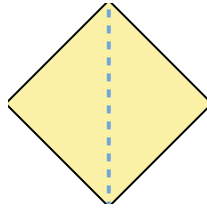
3. _____

4. _____

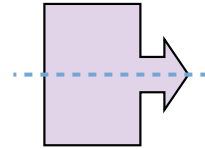
3)



4)



5)



5. _____

6. _____

7. _____

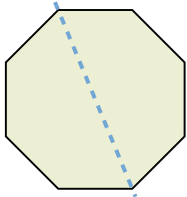
8. _____

9. _____

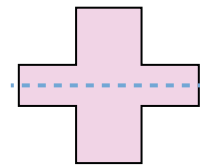
10. _____

11. _____

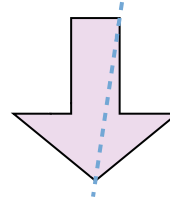
6)




7)



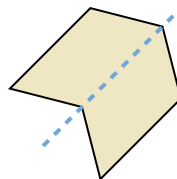
8)



9)



10)



11)

