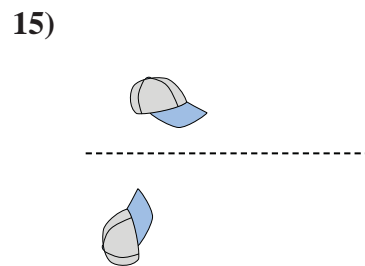
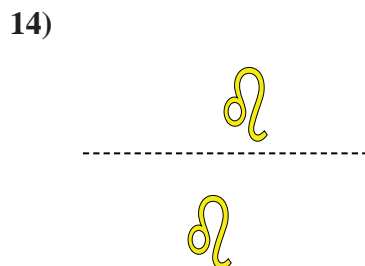
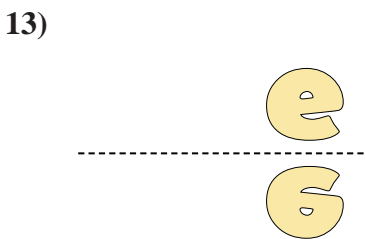
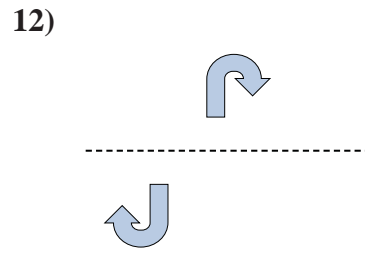
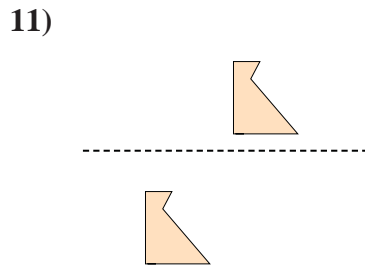
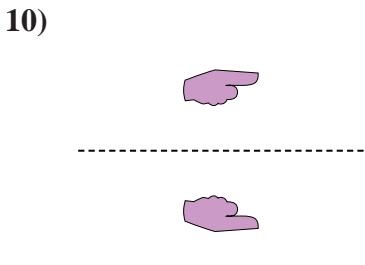
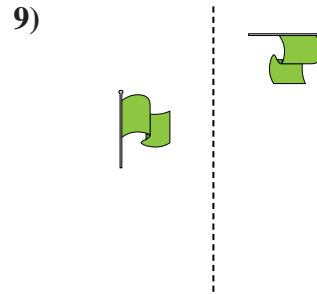
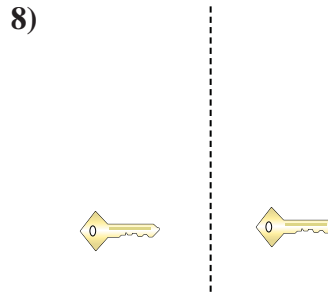
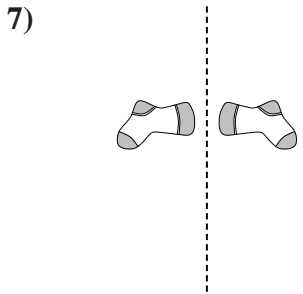
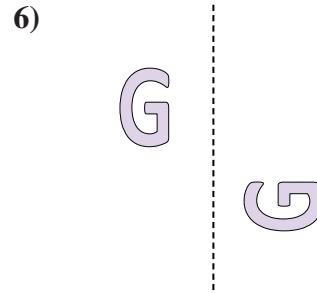
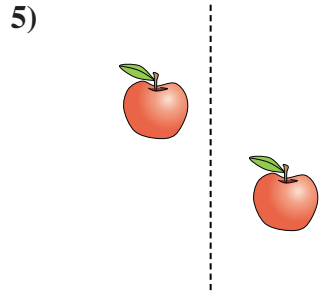
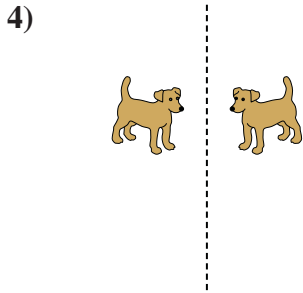
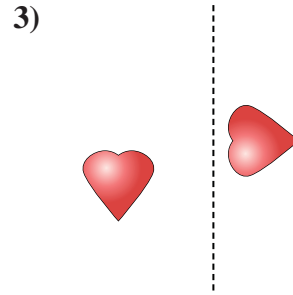
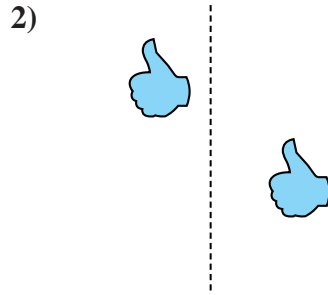
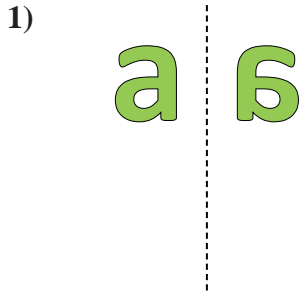




Determine if the shape is translating (slide), rotating (turn) or reflecting (flip).

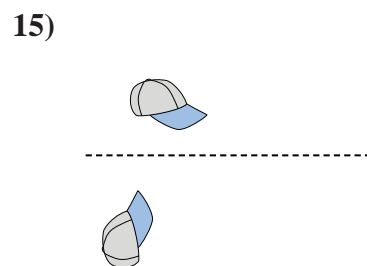
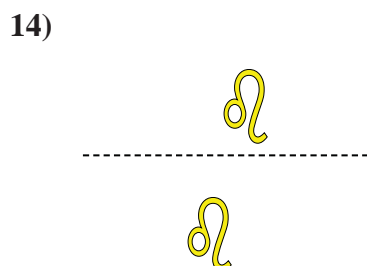
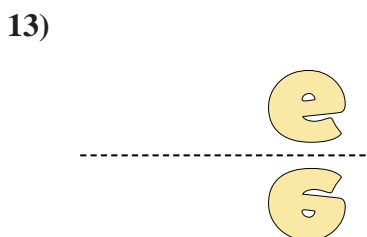
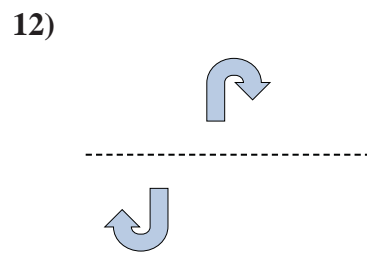
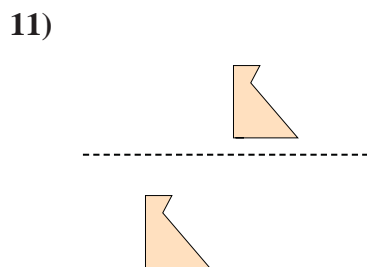
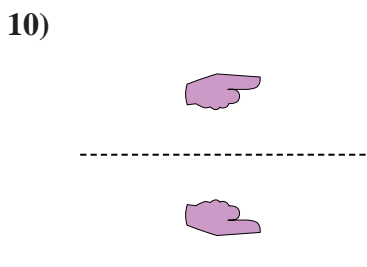
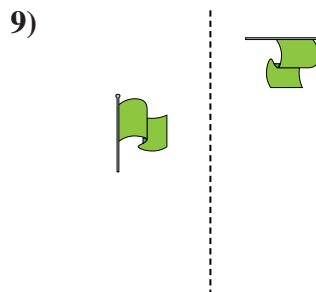
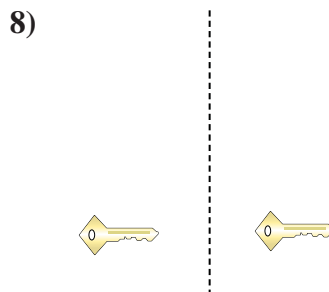
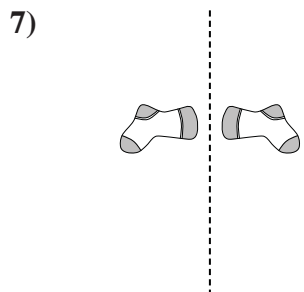
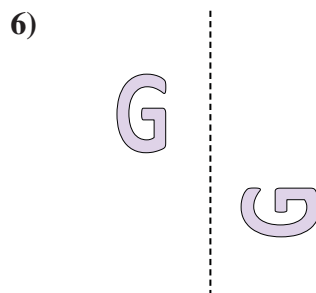
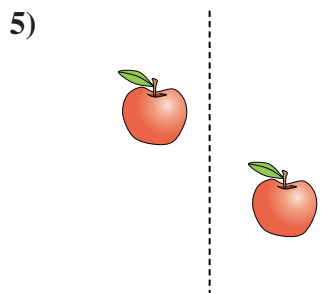
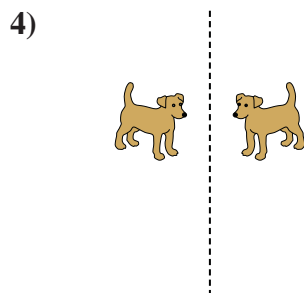
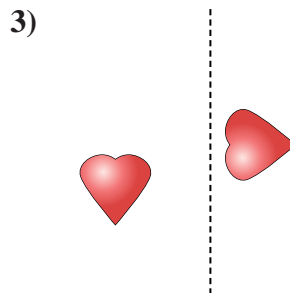
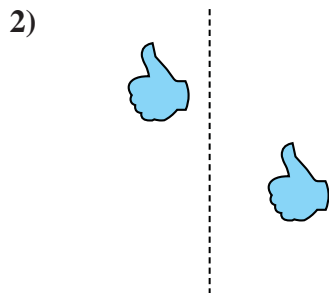
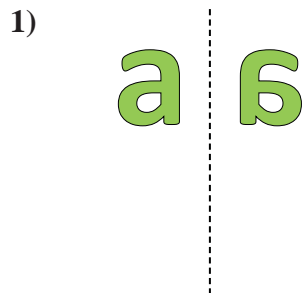
Answers



1. _____
2. _____
3. _____
4. _____
5. _____
6. _____
7. _____
8. _____
9. _____
10. _____
11. _____
12. _____
13. _____
14. _____
15. _____



Determine if the shape is translating (slide), rotating (turn) or reflecting (flip).



Answers

1. reflecting

2. translating

3. rotating

4. reflecting

5. translating

6. rotating

7. reflecting

8. translating

9. rotating

10. reflecting

11. translating

12. rotating

13. reflecting

14. translating

15. rotating



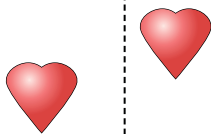
Determine if the shape is translating (slide), rotating (turn) or reflecting (flip).

Answers


1)



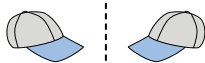
2)



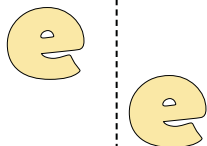
3)



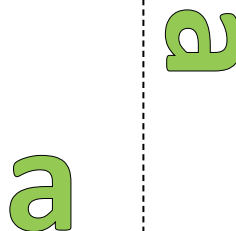
4)



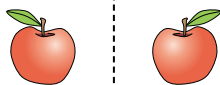
5)



6)



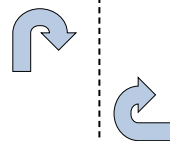
7)



8)



9)



10)



11)



12)



13)



14)



15)



1. _____
2. _____
3. _____
4. _____
5. _____
6. _____
7. _____
8. _____
9. _____
10. _____
11. _____
12. _____
13. _____
14. _____
15. _____

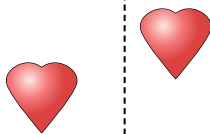


Determine if the shape is translating (slide), rotating (turn) or reflecting (flip).


1)



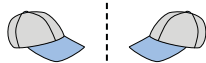
2)



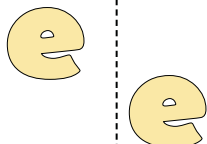
3)



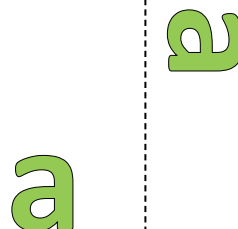
4)



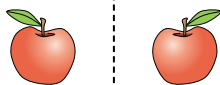
5)



6)



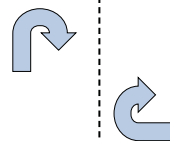
7)



8)



9)



10)



11)



12)



13)



14)



15)



Answers

1. reflecting

2. translating

3. rotating

4. reflecting

5. translating

6. rotating

7. reflecting

8. translating

9. rotating

10. reflecting

11. translating

12. rotating

13. reflecting

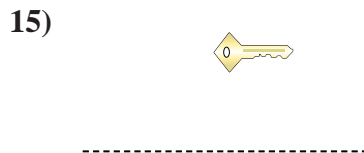


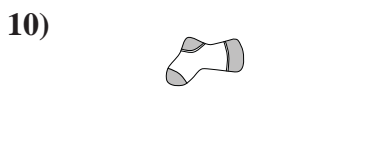
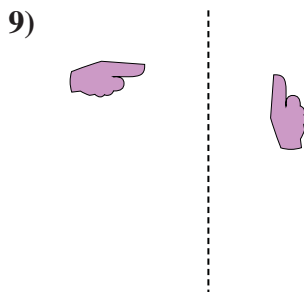
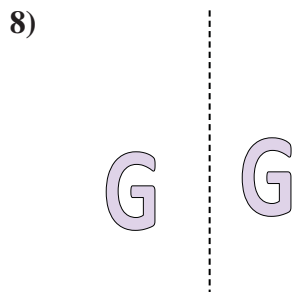
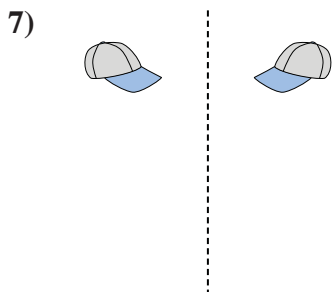
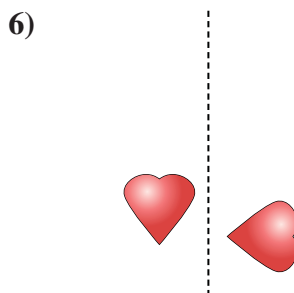
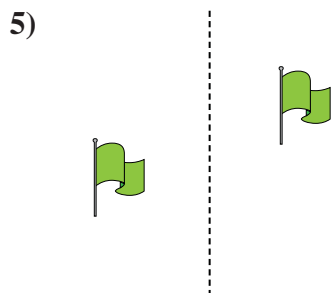
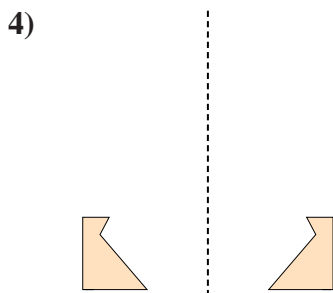
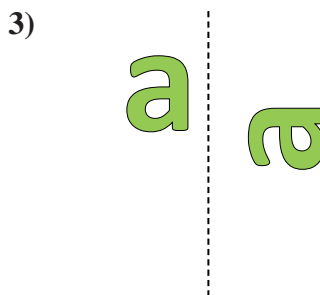

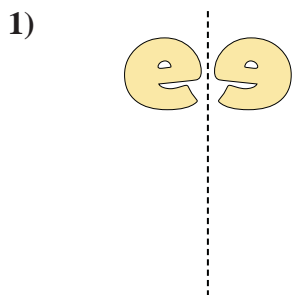
14. translating

15. rotating



Determine if the shape is translating (slide), rotating (turn) or reflecting (flip).

Answers

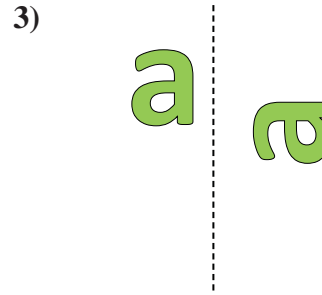
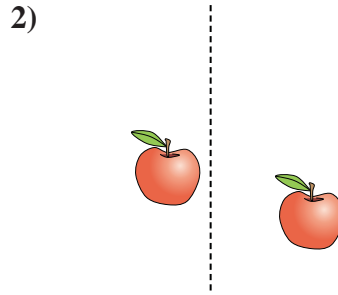
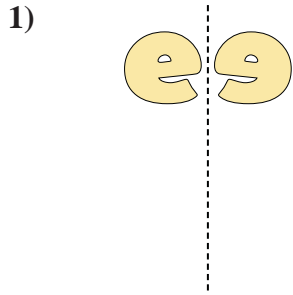


1. _____
2. _____
3. _____
4. _____
5. _____
6. _____
7. _____
8. _____
9. _____
10. _____
11. _____
12. _____
13. _____
14. _____
15. _____



Determine if the shape is translating (slide), rotating (turn) or reflecting (flip).

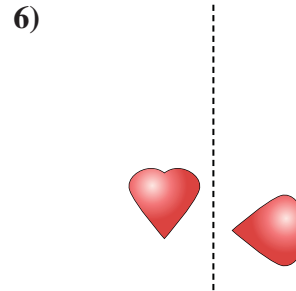
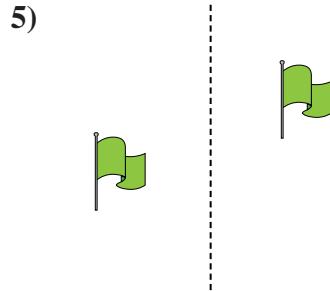
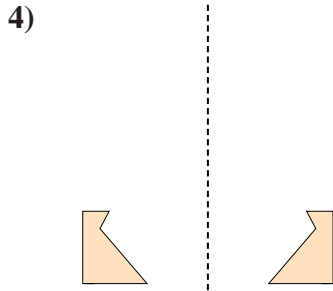
Answers



1. reflecting

2. translating

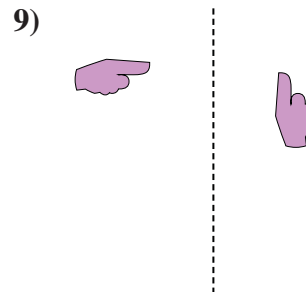
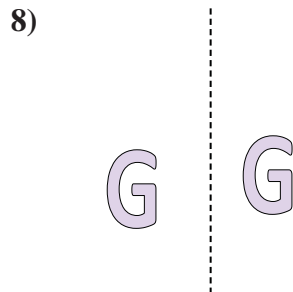
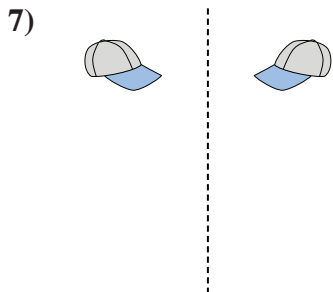
3. rotating



4. reflecting

5. translating

6. rotating




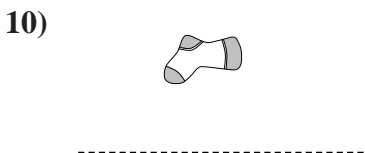
7. reflecting

8. translating

9. rotating

10. reflecting

11. translating


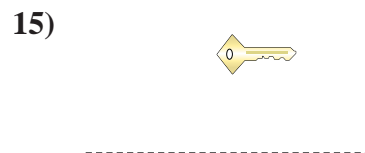


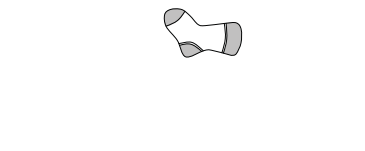


12. rotating

13. reflecting

14. translating

15. rotating

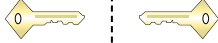




Determine if the shape is translating (slide), rotating (turn) or reflecting (flip).

Answers

1)



2)



3)



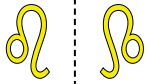
1. _____

2. _____

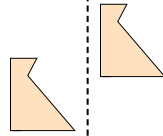
3. _____

4. _____

4)



5)



6)

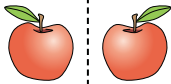


5. _____

6. _____

7. _____

7)



8)



9)



8. _____

9. _____

10. _____

11. _____

10)



11)



12)



12. _____

13. _____

14. _____

15. _____

13)



14)



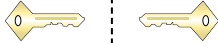
15)





Determine if the shape is translating (slide), rotating (turn) or reflecting (flip).

1)



2)



3)



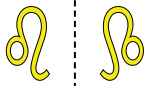
Answers

1. reflecting

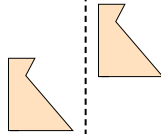
2. translating

3. rotating

4)



5)



6)

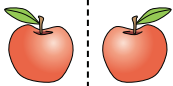


4. reflecting

5. translating

6. rotating

7)



8)



9)



7. reflecting

8. translating

9. rotating

10. reflecting

11. translating

10)



11)



12)



12. rotating

13. reflecting

14. translating

15. rotating

13)



14)



15)

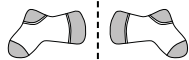




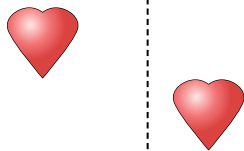
Determine if the shape is translating (slide), rotating (turn) or reflecting (flip).

Answers

1)



2)



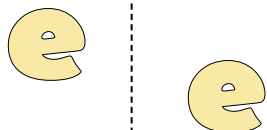
3)



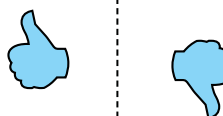
4)



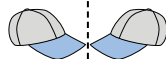
5)




6)



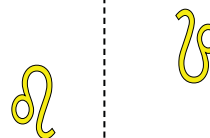
7)



8)



9)



10)



11)



12)



13)



14)



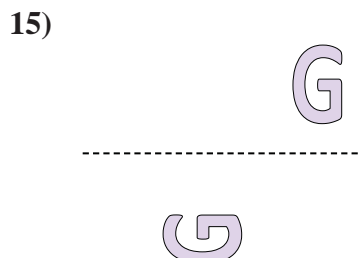
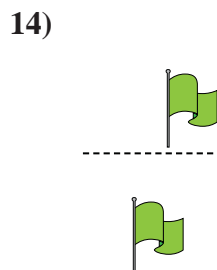
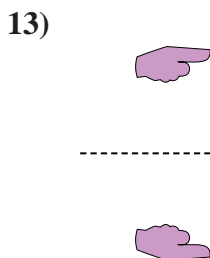
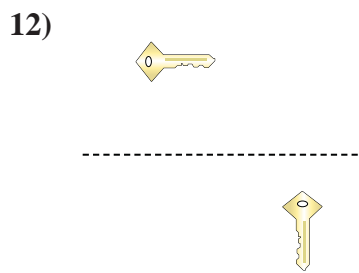
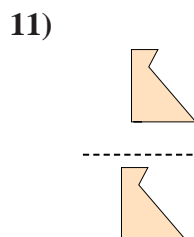
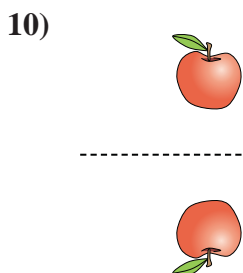


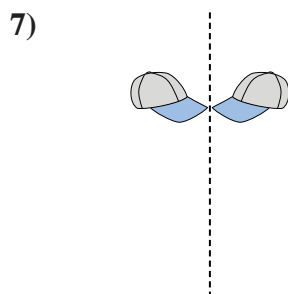
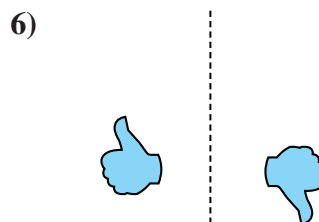
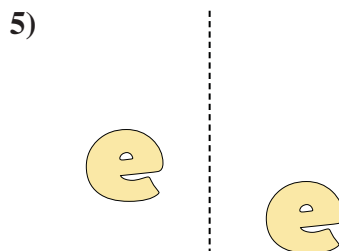
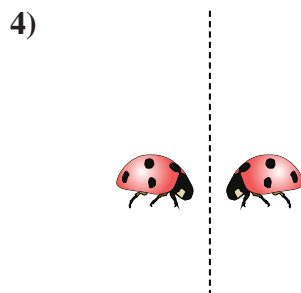
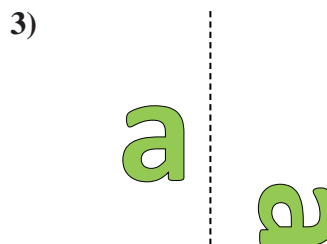
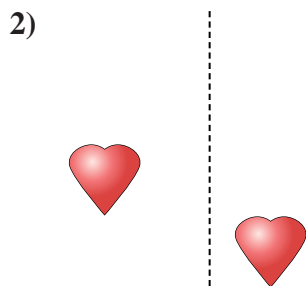
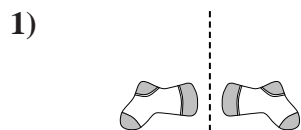
15)



1. _____
2. _____
3. _____
4. _____
5. _____
6. _____
7. _____
8. _____
9. _____
10. _____
11. _____
12. _____
13. _____
14. _____
15. _____



Determine if the shape is translating (slide), rotating (turn) or reflecting (flip).



Answers

1. reflecting

2. translating

3. rotating

4. reflecting

5. translating

6. rotating

7. reflecting

8. translating

9. rotating

10. reflecting

11. translating

12. rotating

13. reflecting

14. translating


15. rotating




Determine if the shape is translating (slide), rotating (turn) or reflecting (flip).

Answers

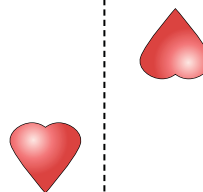
1)



2)



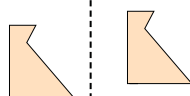
3)



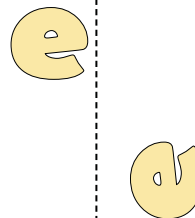
4)



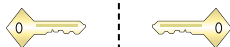
5)




6)



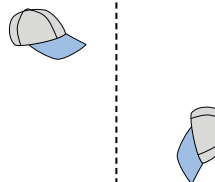
7)



8)



9)



10)



11)



12)



13)



14)



15)

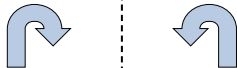


1. _____
2. _____
3. _____
4. _____
5. _____
6. _____
7. _____
8. _____
9. _____
10. _____
11. _____
12. _____
13. _____
14. _____
15. _____




Determine if the shape is translating (slide), rotating (turn) or reflecting (flip).

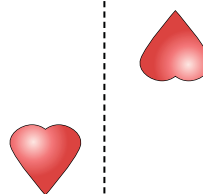
1)



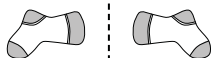
2)



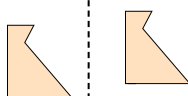
3)



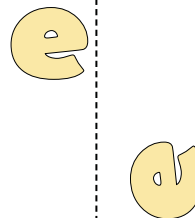
4)



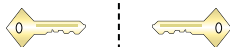
5)




6)



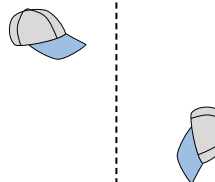
7)



8)



9)



10)



11)



12)



13)



14)



15)



Answers

1. reflecting

2. translating

3. rotating

4. reflecting

5. translating

6. rotating

7. reflecting

8. translating

9. rotating

10. reflecting

11. translating

12. rotating

13. reflecting

14. translating


15. rotating



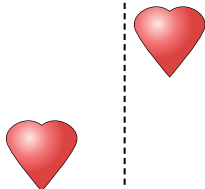
Determine if the shape is translating (slide), rotating (turn) or reflecting (flip).

Answers

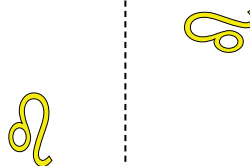
1)




2)



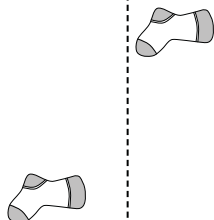
3)



4)




5)




6)



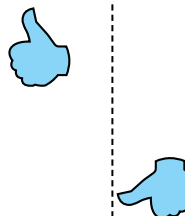
7)



8)



9)



10)



11)



12)



13)



14)



15)




1. _____
2. _____
3. _____
4. _____
5. _____
6. _____
7. _____
8. _____
9. _____
10. _____
11. _____
12. _____
13. _____
14. _____
15. _____



Determine if the shape is translating (slide), rotating (turn) or reflecting (flip).

1)




2)



3)



4)




5)



6)



7)



8)



9)



10)



11)



12)



13)



14)



15)



Answers

1. reflecting

2. translating

3. rotating

4. reflecting

5. translating

6. rotating

7. reflecting

8. translating

9. rotating

10. reflecting

11. translating

12. rotating

13. reflecting

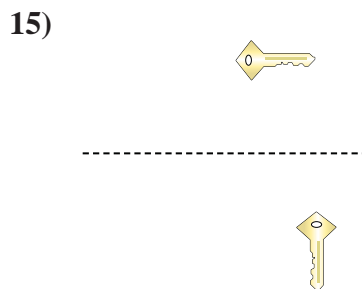
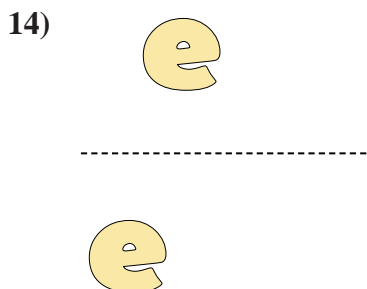
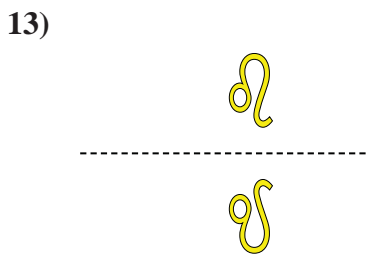

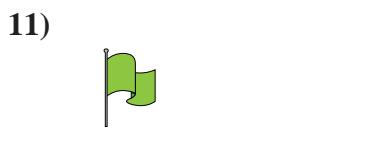

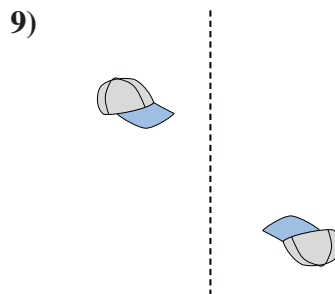
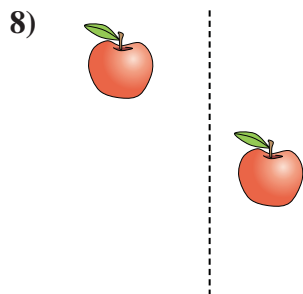
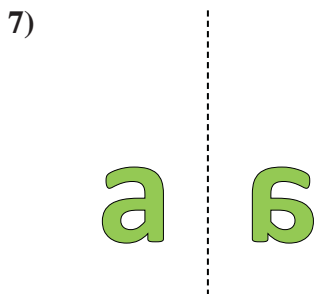
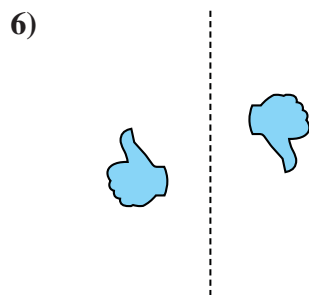
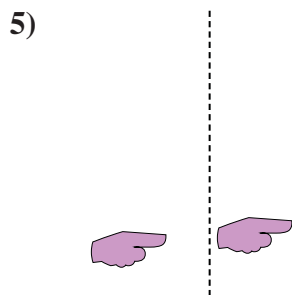
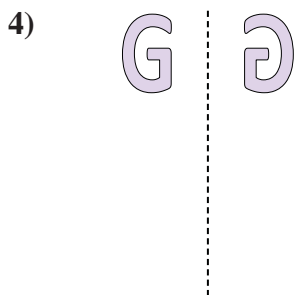
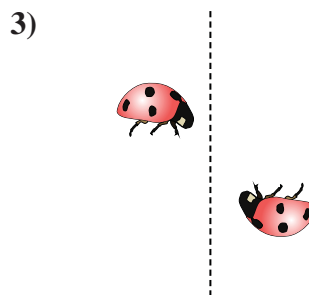
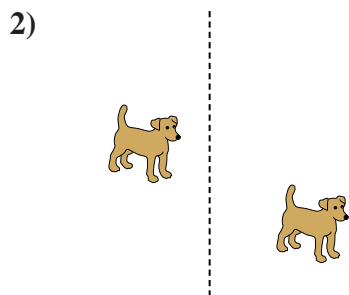
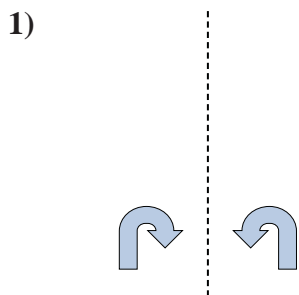
14. translating

15. rotating



Determine if the shape is translating (slide), rotating (turn) or reflecting (flip).

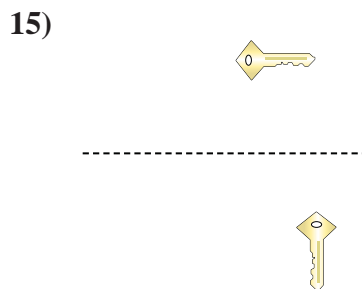
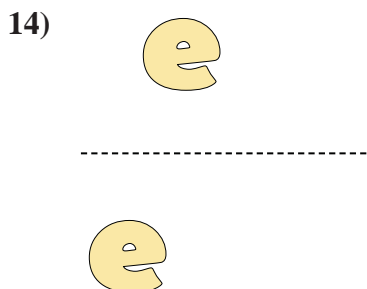
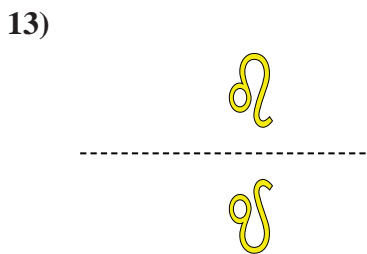

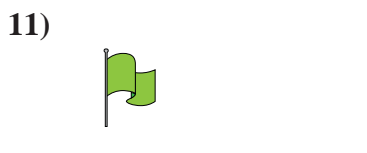

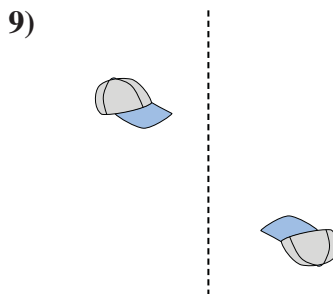
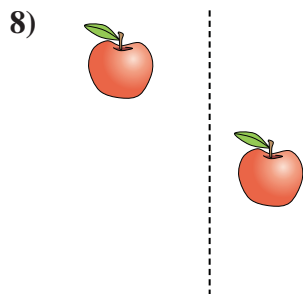
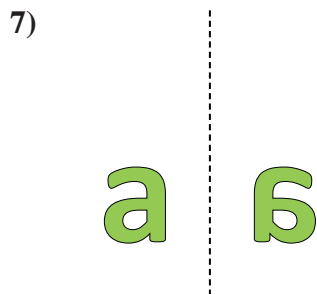
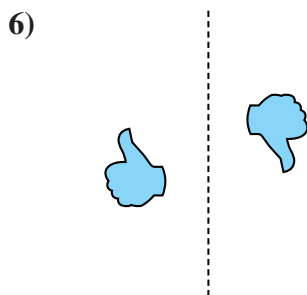
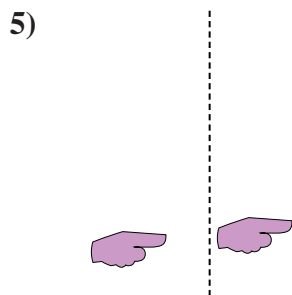
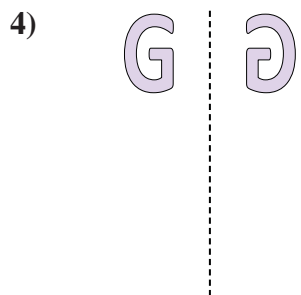
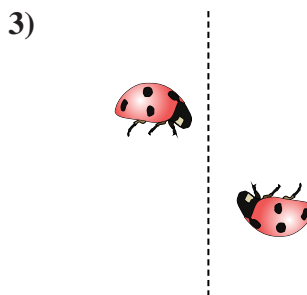
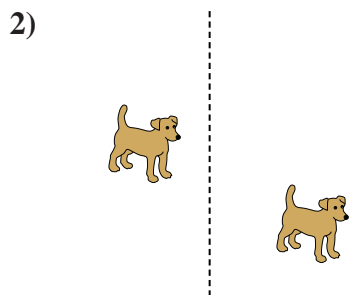
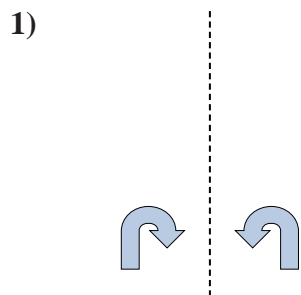
Answers



1. _____
2. _____
3. _____
4. _____
5. _____
6. _____
7. _____
8. _____
9. _____
10. _____
11. _____
12. _____
13. _____
14. _____
15. _____



Determine if the shape is translating (slide), rotating (turn) or reflecting (flip).



Answers

1. reflecting

2. translating

3. rotating

4. reflecting

5. translating

6. rotating

7. reflecting

8. translating

9. rotating

10. reflecting

11. translating

12. rotating

13. reflecting

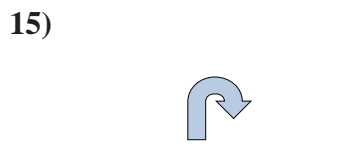


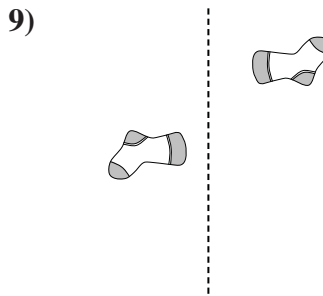
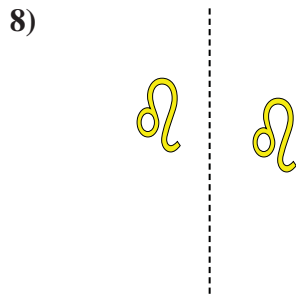
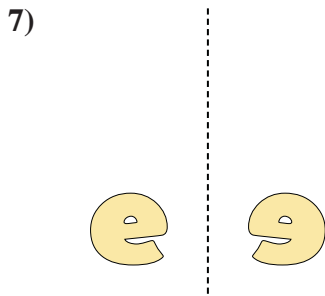
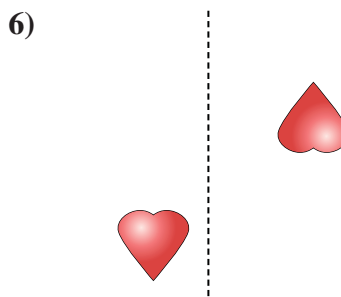
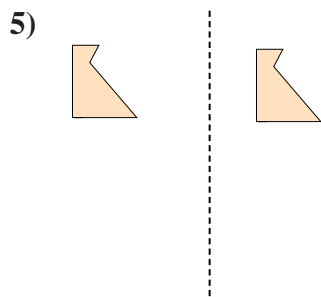
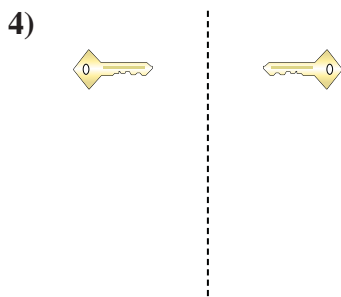
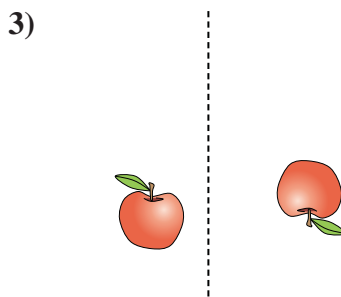
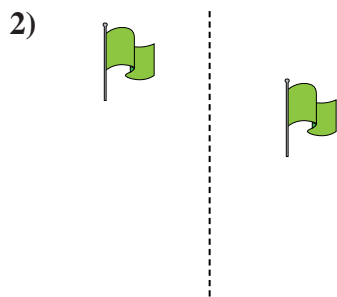
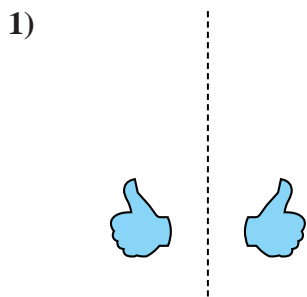
14. translating

15. rotating



Determine if the shape is translating (slide), rotating (turn) or reflecting (flip).

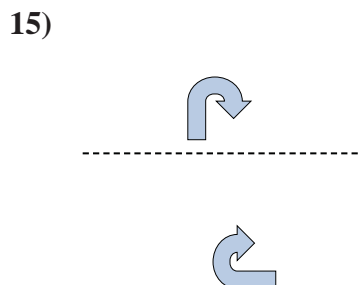
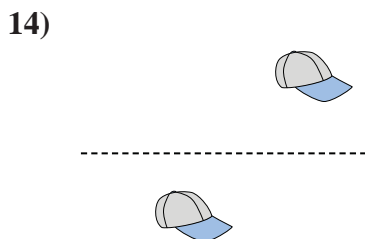
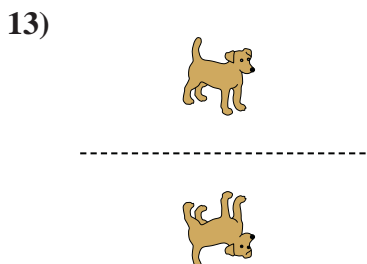


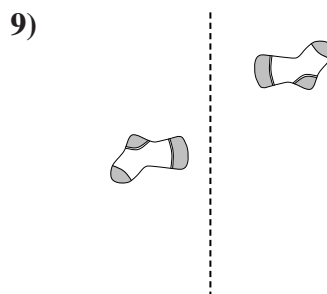
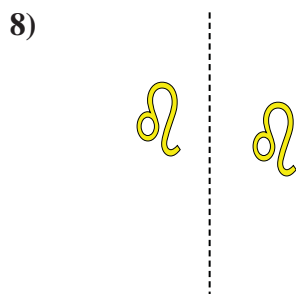
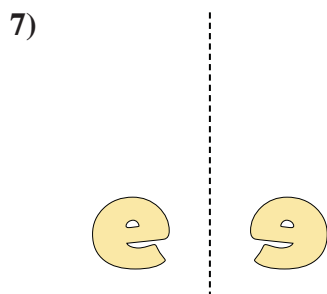
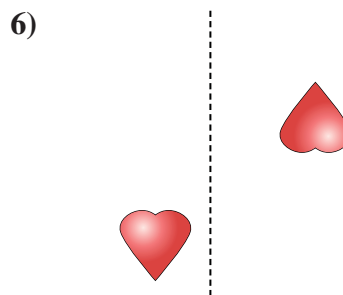
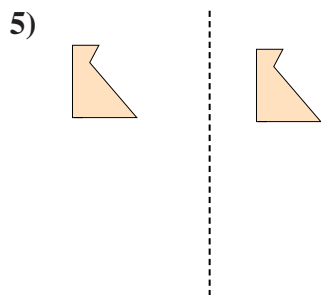
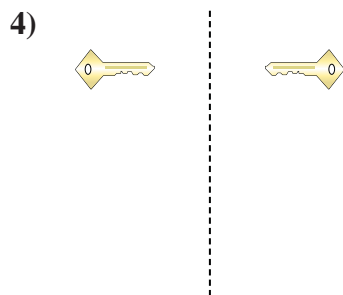
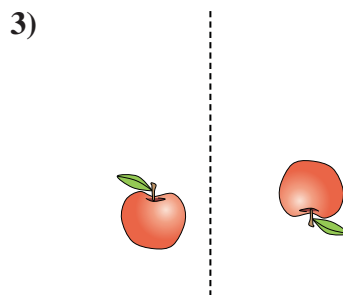
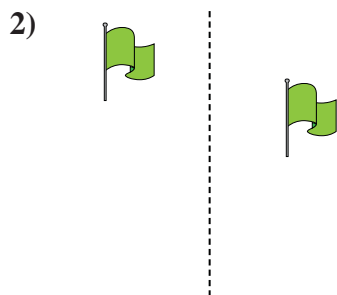
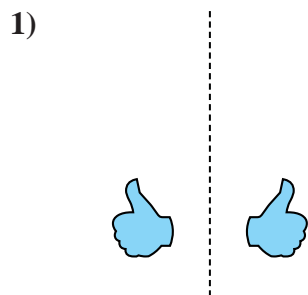
Answers



1. _____
2. _____
3. _____
4. _____
5. _____
6. _____
7. _____
8. _____
9. _____
10. _____
11. _____
12. _____
13. _____
14. _____
15. _____



Determine if the shape is translating (slide), rotating (turn) or reflecting (flip).



Answers

1. reflecting

2. translating

3. rotating

4. reflecting

5. translating

6. rotating

7. reflecting

8. translating

9. rotating

10. reflecting

11. translating

12. rotating

13. reflecting

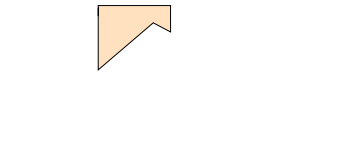
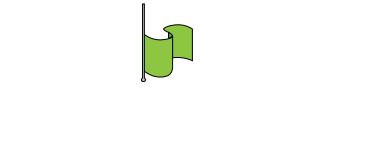
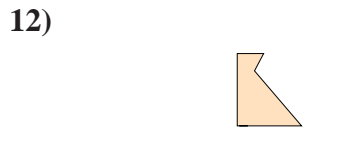

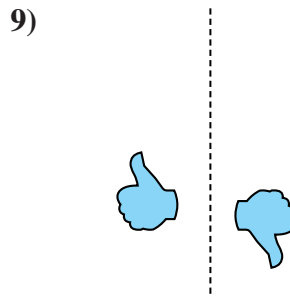
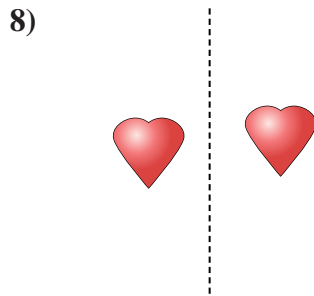
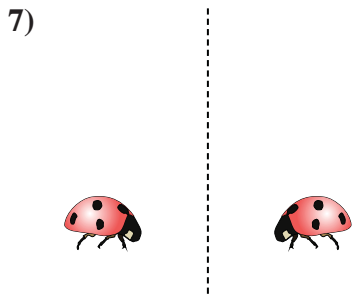

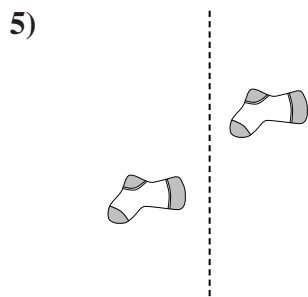
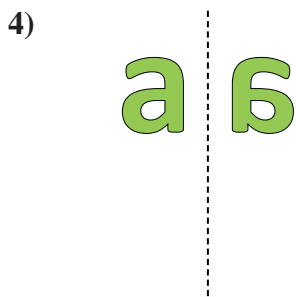
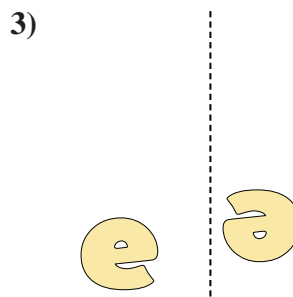
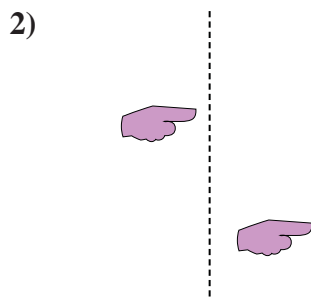
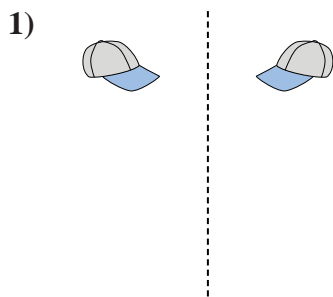
14. translating

15. rotating



Determine if the shape is translating (slide), rotating (turn) or reflecting (flip).






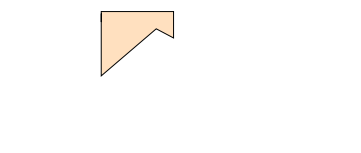
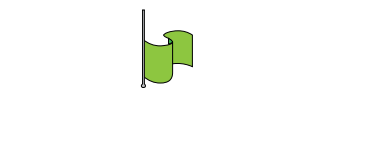
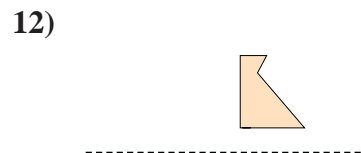

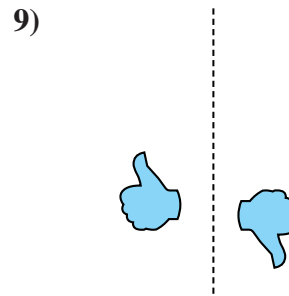
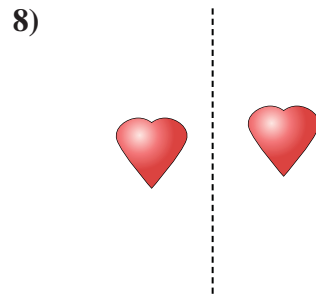
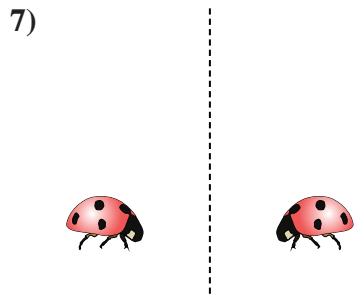

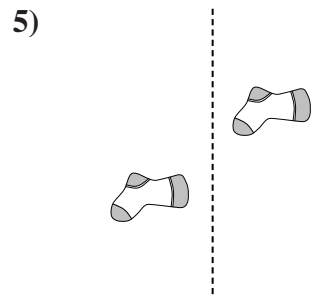
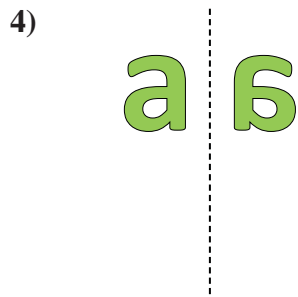
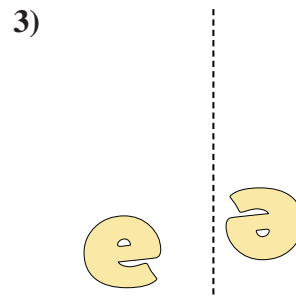
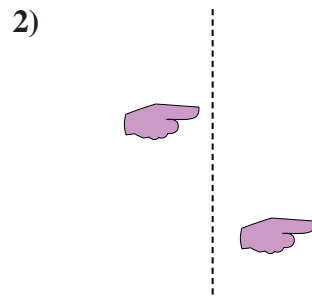
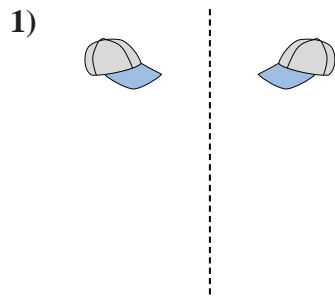
Answers



1. _____
2. _____
3. _____
4. _____
5. _____
6. _____
7. _____
8. _____
9. _____
10. _____
11. _____
12. _____
13. _____
14. _____
15. _____



Determine if the shape is translating (slide), rotating (turn) or reflecting (flip).



Answers

1. reflecting

2. translating

3. rotating

4. reflecting

5. translating

6. rotating

7. reflecting

8. translating

9. rotating

10. reflecting

11. translating

12. rotating

13. reflecting

14. translating

15. rotating