




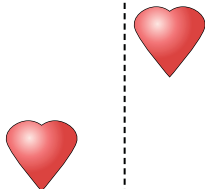
Determine if the shape is translating (slide), rotating (turn) or reflecting (flip).

Answers

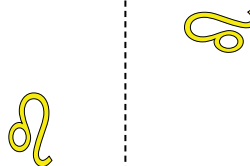
1)




2)



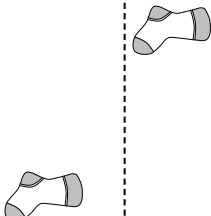
3)



4)




5)




6)



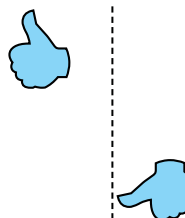
7)



8)



9)



10)



11)



12)



13)



14)



15)




1. \_\_\_\_\_
2. \_\_\_\_\_
3. \_\_\_\_\_
4. \_\_\_\_\_
5. \_\_\_\_\_
6. \_\_\_\_\_
7. \_\_\_\_\_
8. \_\_\_\_\_
9. \_\_\_\_\_
10. \_\_\_\_\_
11. \_\_\_\_\_
12. \_\_\_\_\_
13. \_\_\_\_\_
14. \_\_\_\_\_
15. \_\_\_\_\_

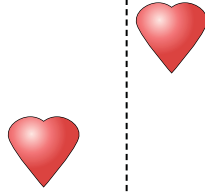


Determine if the shape is translating (slide), rotating (turn) or reflecting (flip).

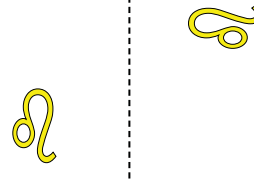
1)



2)



3)



Answers

1. reflecting

2. translating

3. rotating

4. reflecting

5. translating

6. rotating

7. reflecting

8. translating

9. rotating

10. reflecting

11. translating


12. rotating

13. reflecting

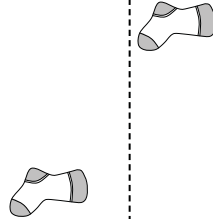
14. translating

15. rotating

4)



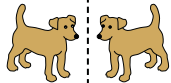
5)



6)



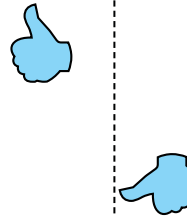
7)



8)



9)



10)



11)



12)



13)



14)



15)

