



Determine if the shape is translating (slide), rotating (turn) or reflecting (flip).

Answers

1)



2)



3)



1. _____

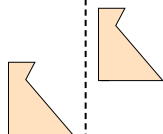
2. _____

3. _____

4)



5)



6)



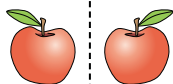
4. _____

5. _____

6. _____

7. _____

7)



8)



9)



8. _____

9. _____

10. _____

11. _____

10)



11)



12)



12. _____

13. _____

14. _____

15. _____

13)



14)



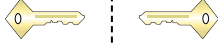
15)





Determine if the shape is translating (slide), rotating (turn) or reflecting (flip).

1)



2)



3)



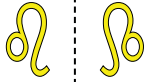
Answers

1. reflecting

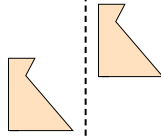
2. translating

3. rotating

4)



5)



6)

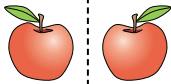


4. reflecting

5. translating

6. rotating

7)



8)



9)



7. reflecting

8. translating

9. rotating

10. reflecting

11. translating

10)



11)



12)



12. rotating

13. reflecting

14. translating

15. rotating

13)



14)



15)

