




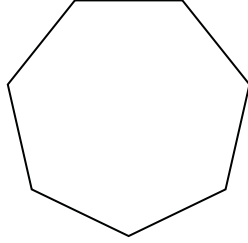
Determine if the shape shown is a regular shape or an irregular shape.

Answers

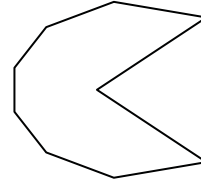
1)



2)



3)



1. _____

2. _____

3. _____

4. _____

5. _____

6. _____

7. _____

8. _____

9. _____

10. _____

11. _____

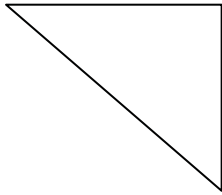
12. _____

13. _____

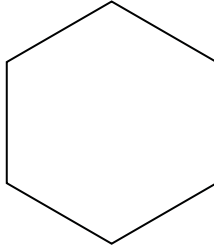
14. _____

15. _____


4)



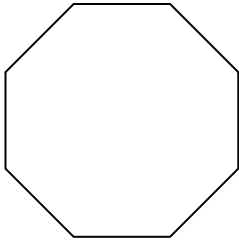
5)



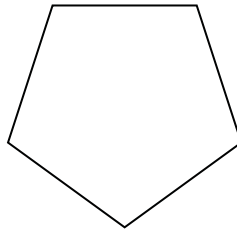
6)



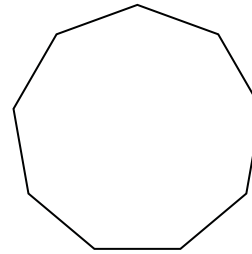
7)



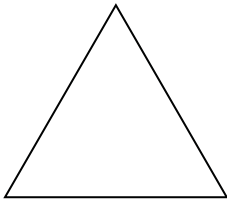
8)



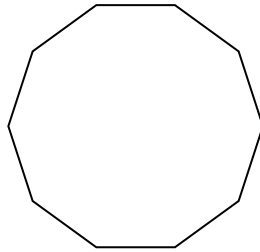
9)



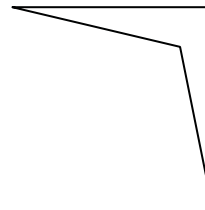
10)




11)




12)



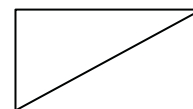
13)



14)




15)



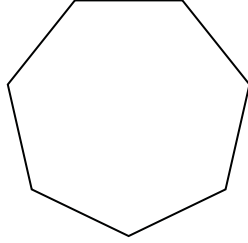


Determine if the shape shown is a regular shape or an irregular shape.

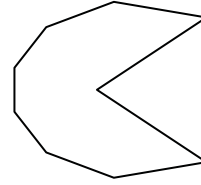
1)



2)



3)



Answers

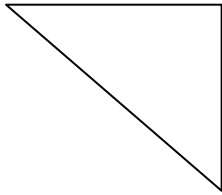
1. irregular

2. regular

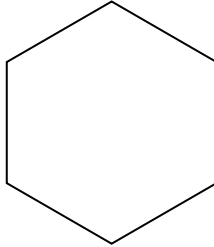
3. irregular

4. irregular


4)



5)



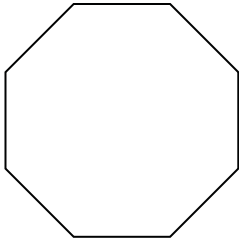
6)



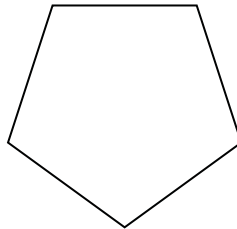
5. regular

6. irregular

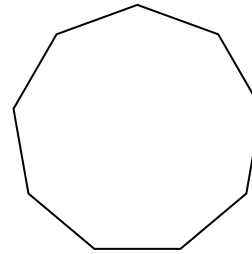
7)



8)



9)

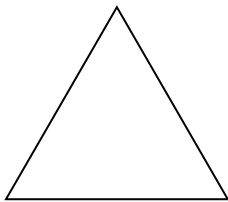


7. regular

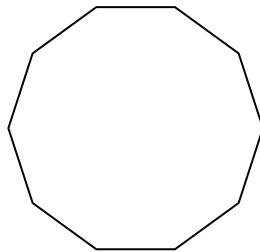
8. regular

9. regular

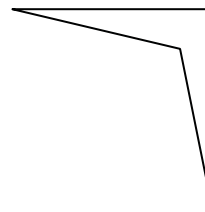
10)



11)



12)




10. regular

11. regular


12. irregular

13. irregular

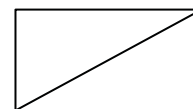
13)



14)



15)



14. regular

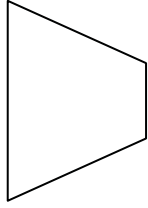
15. irregular



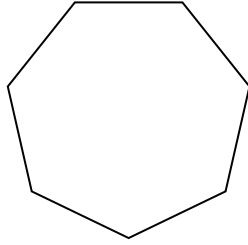
Determine if the shape shown is a regular shape or an irregular shape.

Answers

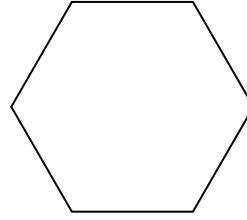
1)



2)



3)

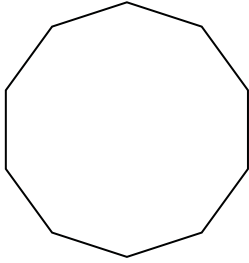


1. _____


2. _____

3. _____

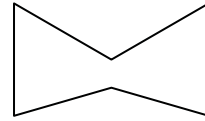
4)



5)



6)

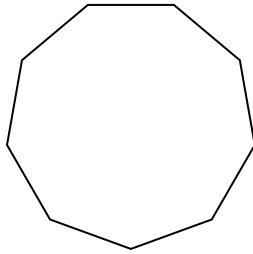


4. _____

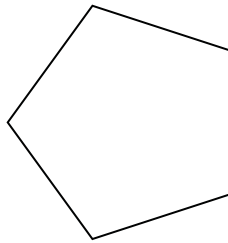
5. _____

6. _____

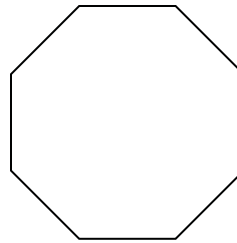
7)



8)



9)

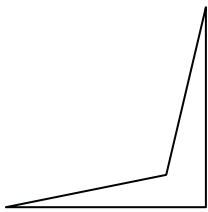


7. _____

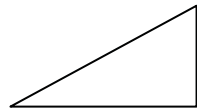
8. _____

9. _____


10)



11)



12)



10. _____

11. _____

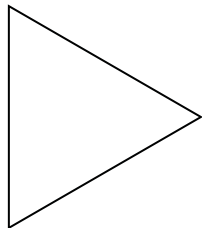
12. _____

13. _____


14. _____

15. _____

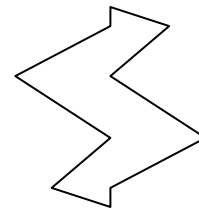
13)



14)



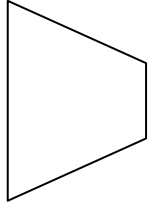
15)



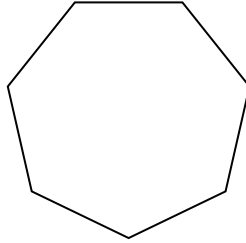


Determine if the shape shown is a regular shape or an irregular shape.

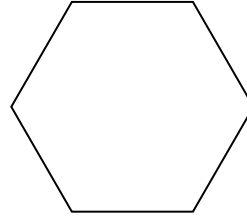
1)



2)



3)



Answers

1. irregular

2. regular

3. regular

4. regular

5. irregular

6. irregular

7. regular

8. regular

9. regular

10. irregular

11. irregular

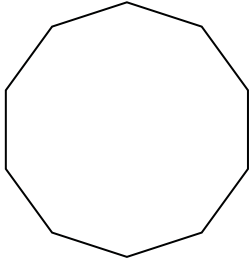
12. irregular

13. regular


14. irregular

15. irregular

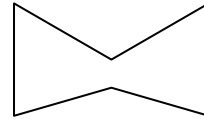
4)



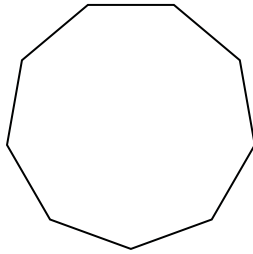
5)



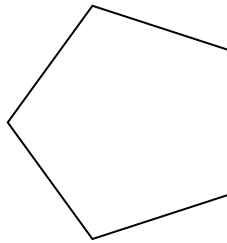
6)



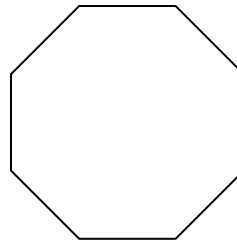
7)



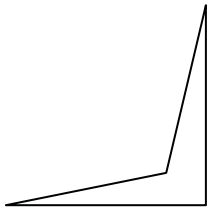
8)



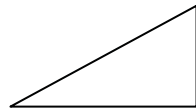
9)




10)



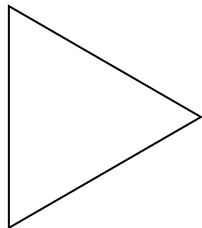
11)




12)



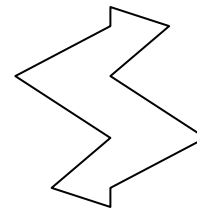
13)



14)



15)

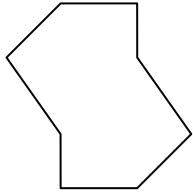




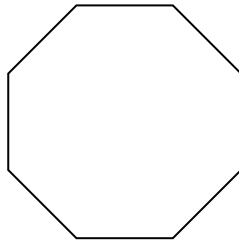
Determine if the shape shown is a regular shape or an irregular shape.

Answers

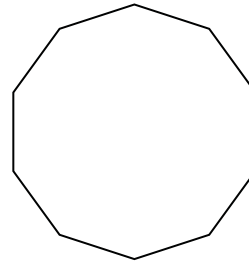
1)



2)



3)

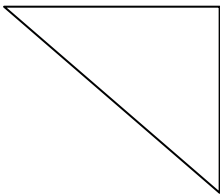


1. _____


2. _____

3. _____

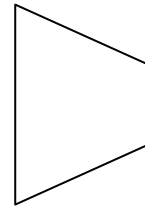
4)



5)



6)

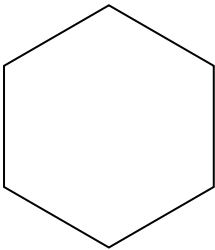


4. _____

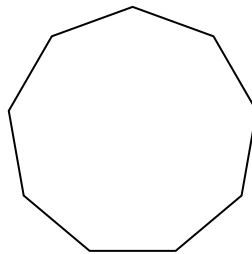
5. _____

6. _____


7)



8)



9)



7. _____

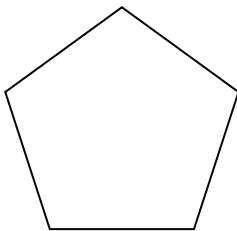
8. _____

9. _____


10. _____

11. _____

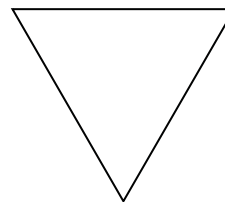
10)



11)



12)



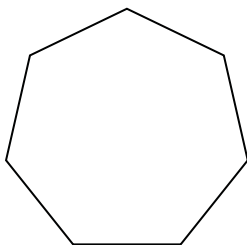
12. _____

13. _____

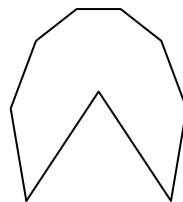
14. _____

15. _____


13)



14)



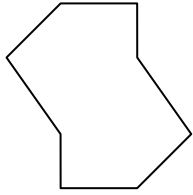
15)



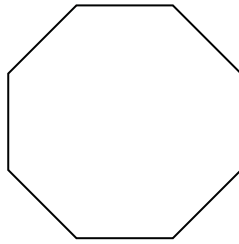


Determine if the shape shown is a regular shape or an irregular shape.

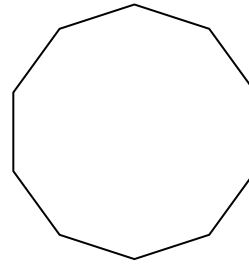
1)



2)



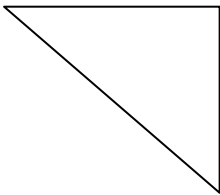
3)




Answers

1. irregular

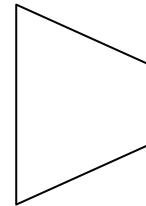
4)



5)



6)



2. regular

3. regular

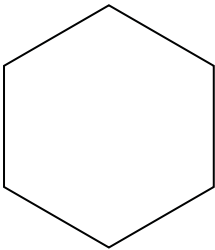
4. irregular

5. irregular

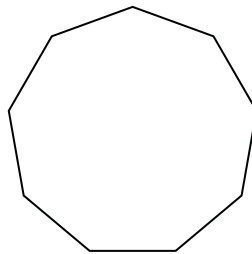
6. irregular

7. regular


7)



8)



9)



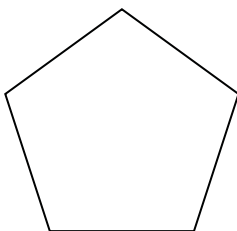
8. regular

9. irregular


10. regular

11. irregular

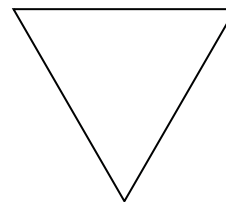
10)



11)



12)



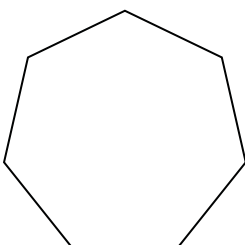
12. regular

13. regular

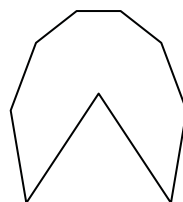
14. irregular

15. regular


13)



14)



15)






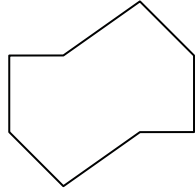
Determine if the shape shown is a regular shape or an irregular shape.

Answers

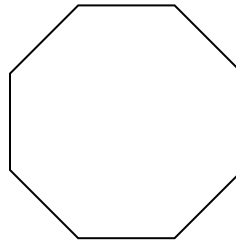
1)



2)



3)

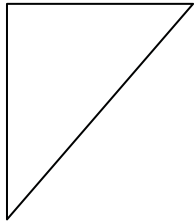


1. _____


2. _____

3. _____

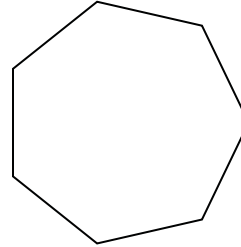
4)



5)



6)

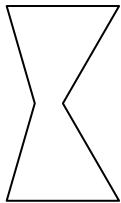


4. _____


5. _____

6. _____


7)



8)



9)



7. _____

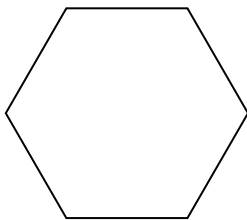
8. _____

9. _____

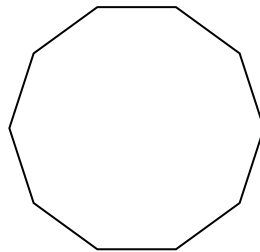
10. _____

11. _____


10)



11)



12)



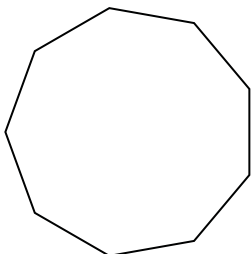
12. _____

13. _____


14. _____

15. _____

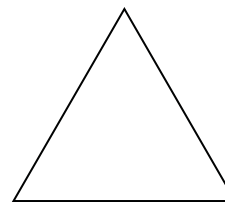
13)



14)




15)



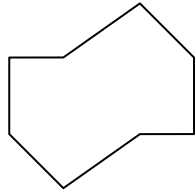


Determine if the shape shown is a regular shape or an irregular shape.

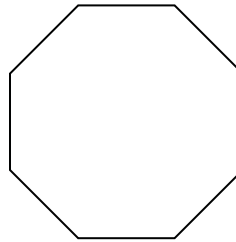
1)



2)



3)



Answers

1. irregular

2. irregular

3. regular

4. irregular

5. irregular

6. regular

7. irregular

8. regular

9. irregular

10. regular

11. regular

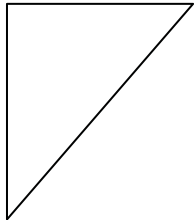
12. irregular

13. regular


14. irregular

15. regular

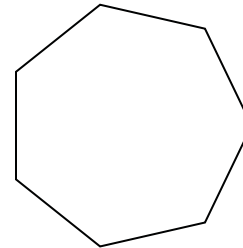
4)



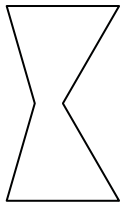
5)




6)




7)



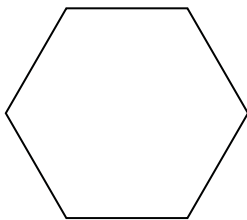
8)



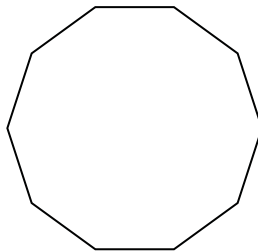
9)




10)



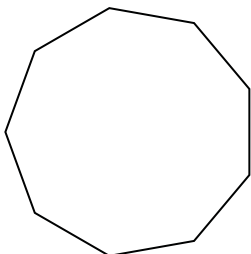
11)




12)



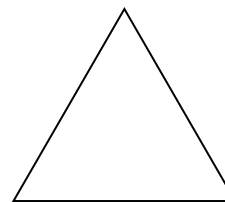
13)



14)



15)





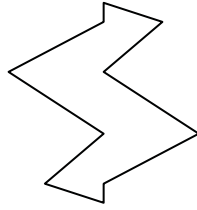
Determine if the shape shown is a regular shape or an irregular shape.

Answers

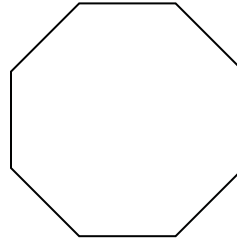
1)



2)



3)




1. _____

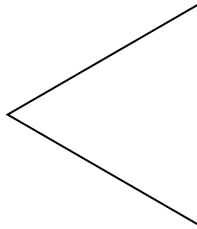
2. _____

3. _____

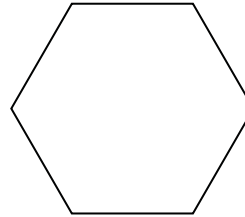
4)



5)



6)

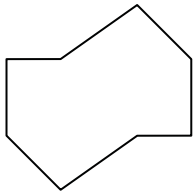


4. _____

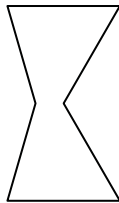
5. _____

6. _____

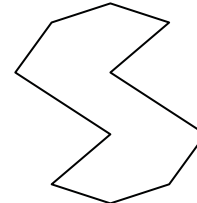
7)



8)



9)



7. _____

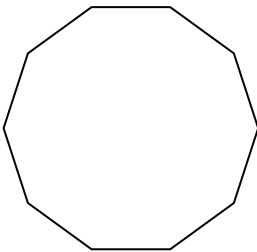
8. _____

9. _____


10. _____

11. _____


10)



11)



12)




12. _____

13. _____

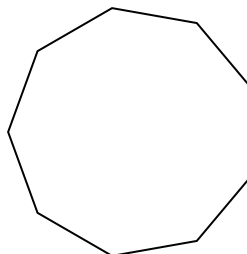
14. _____

15. _____

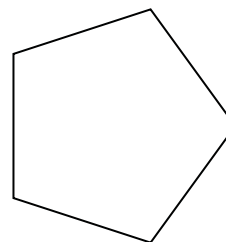
13)



14)



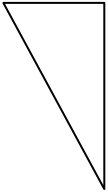
15)



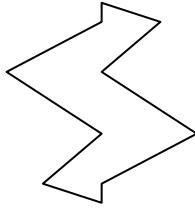


Determine if the shape shown is a regular shape or an irregular shape.

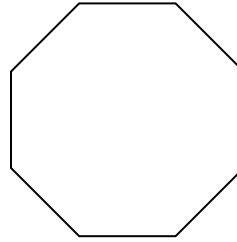
1)



2)



3)




Answers

1. irregular

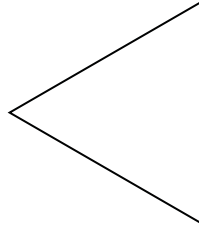
2. irregular

3. regular

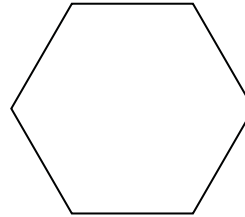
4)



5)



6)

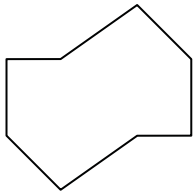


4. irregular

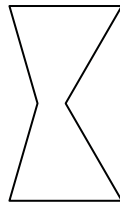
5. regular

6. regular

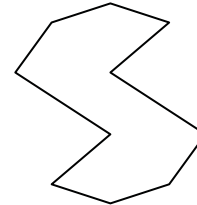
7)



8)



9)



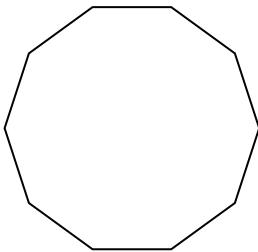
7. irregular

8. irregular


9. irregular

10. regular


10)



11)



12)




11. irregular

12. irregular

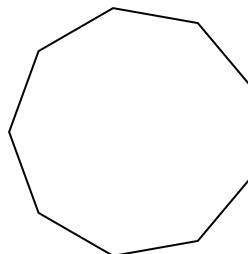
13. regular

14. regular

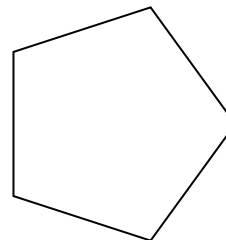
13)



14)



15)




15. regular



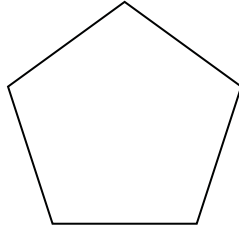
Determine if the shape shown is a regular shape or an irregular shape.

Answers

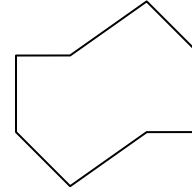
1)



2)



3)




1. _____

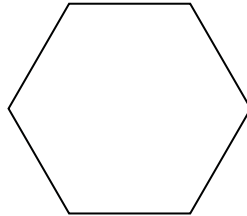
2. _____

3. _____

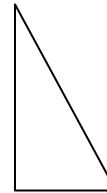
4)



5)



6)




4. _____

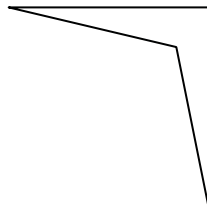
5. _____

6. _____

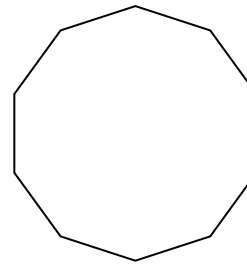
7)



8)



9)




7. _____

8. _____

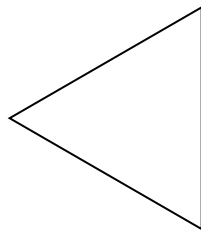
9. _____

10. _____


10)



11)



12)



11. _____

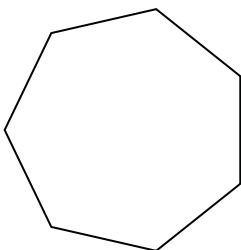
12. _____

13. _____

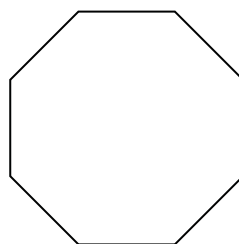
14. _____

15. _____

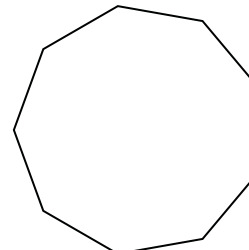
13)



14)




15)



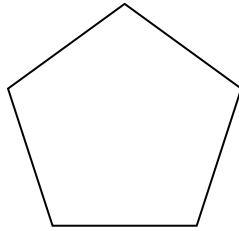


Determine if the shape shown is a regular shape or an irregular shape.

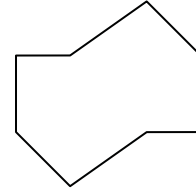
1)



2)



3)



Answers

1. irregular

2. regular

3. irregular

4. irregular

5. regular

6. irregular

7. irregular

8. irregular

9. regular

10. regular

11. regular


12. irregular

13. regular

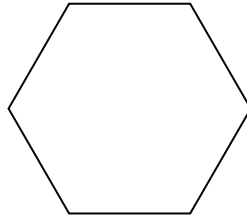
14. regular

15. regular

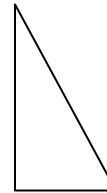
4)




5)



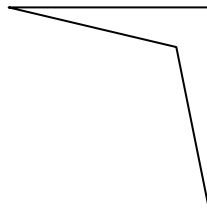
6)



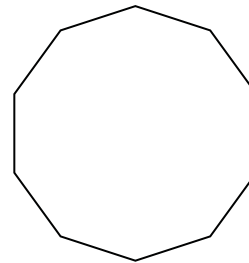
7)




8)



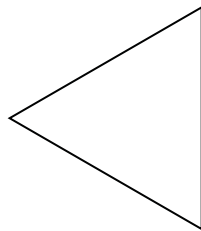
9)




10)



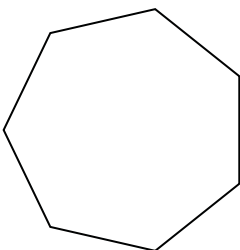
11)



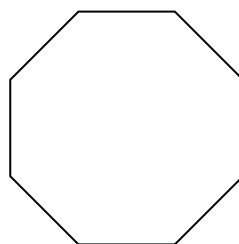
12)



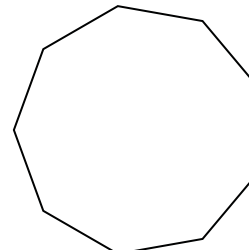
13)



14)



15)

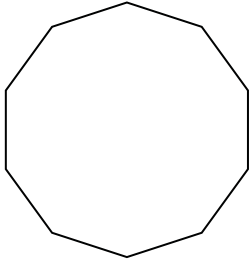




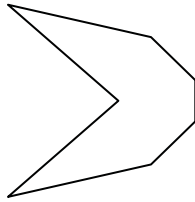
Determine if the shape shown is a regular shape or an irregular shape.

Answers

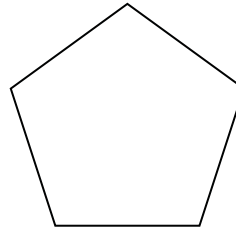
1)



2)



3)



1. _____

2. _____

3. _____

4. _____

5. _____

6. _____

7. _____

8. _____

9. _____

10. _____

11. _____

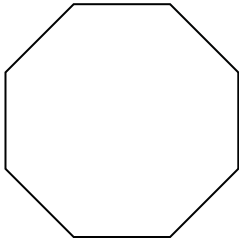
12. _____

13. _____

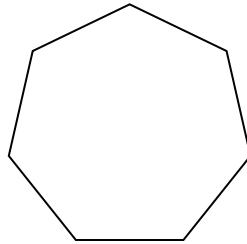
14. _____

15. _____


4)



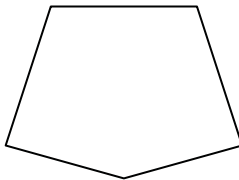
5)



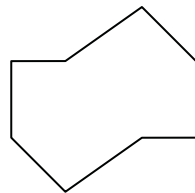
6)




7)



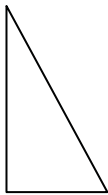
8)



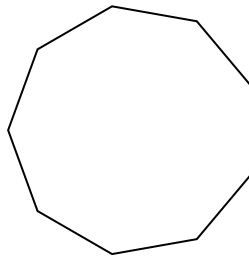
9)



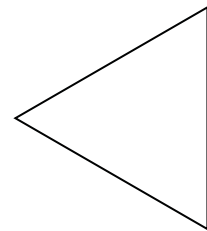
10)



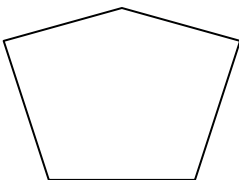
11)



12)



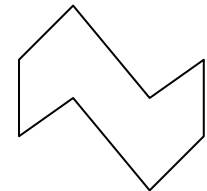
13)



14)



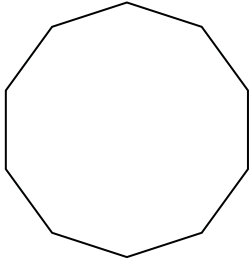
15)



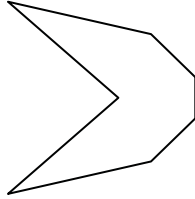


Determine if the shape shown is a regular shape or an irregular shape.

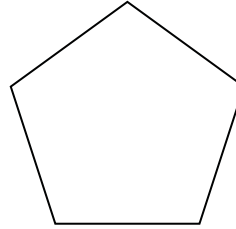
1)



2)



3)



Answers

1. regular

2. irregular

3. regular

4. regular

5. regular

6. regular

7. irregular

8. irregular

9. irregular

10. irregular

11. regular

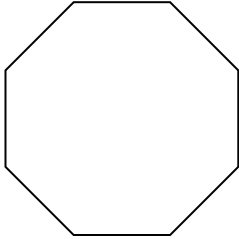
12. regular

13. irregular

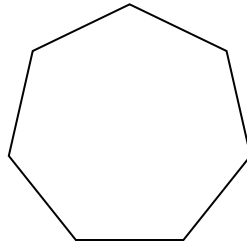
14. irregular

15. irregular


4)



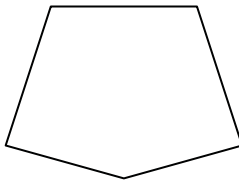
5)



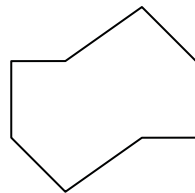
6)




7)



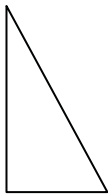
8)



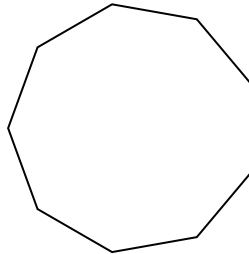
9)



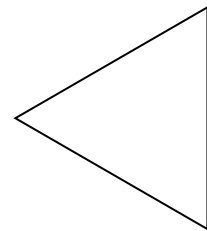
10)



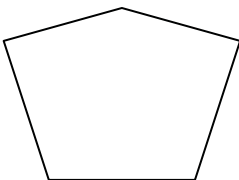
11)



12)



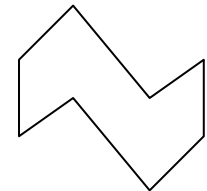
13)



14)



15)

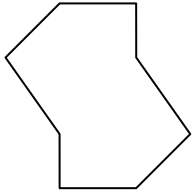




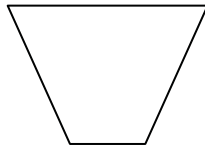
Determine if the shape shown is a regular shape or an irregular shape.

Answers


1)



2)



3)



1. _____

2. _____

3. _____

4. _____

5. _____

6. _____

7. _____

8. _____

9. _____

10. _____

11. _____

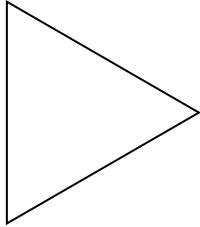
12. _____

13. _____


14. _____

15. _____

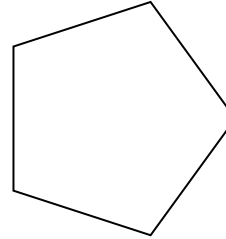
4)



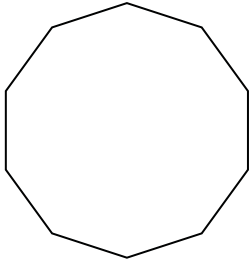
5)




6)



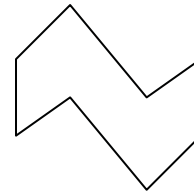
7)



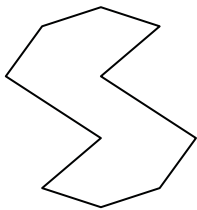
8)



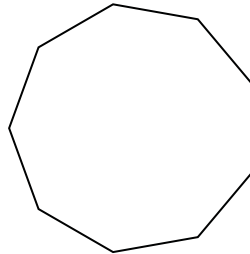
9)



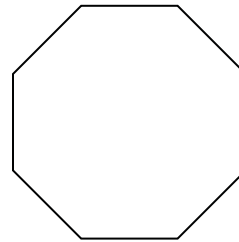
10)



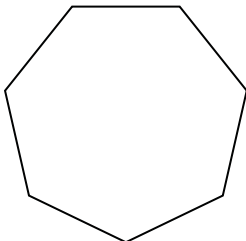
11)



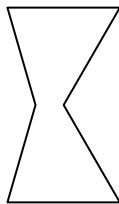
12)



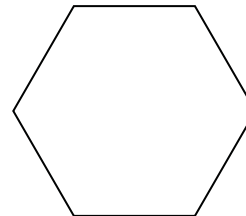
13)



14)



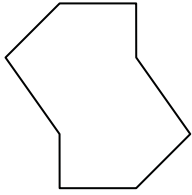
15)



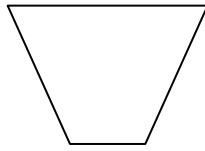


Determine if the shape shown is a regular shape or an irregular shape.


1)



2)



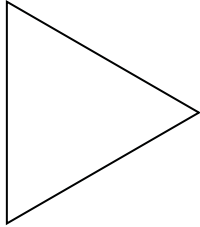
3)




Answers

1. irregular

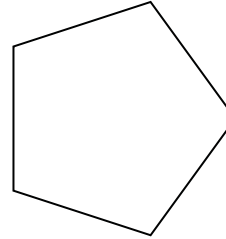
4)



5)



6)



2. irregular

3. irregular

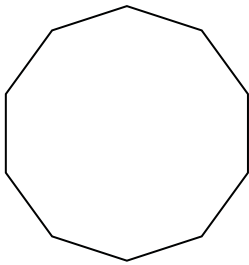
4. regular

5. regular


6. regular

7. regular

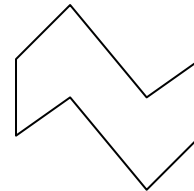
7)



8)



9)

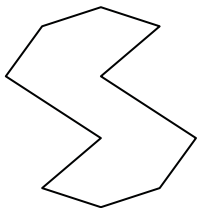


8. irregular

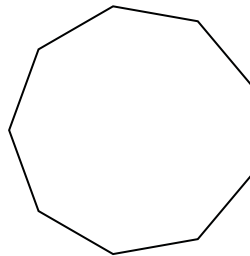
9. irregular

10. irregular

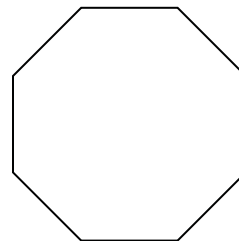
10)



11)



12)



11. regular

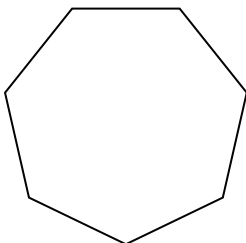
12. regular

13. regular

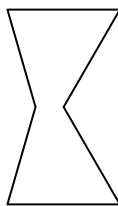
14. irregular

15. regular

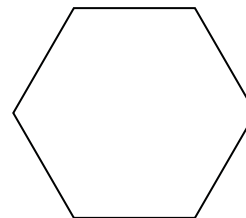
13)



14)




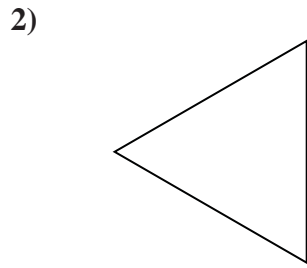

15)





Determine if the shape shown is a regular shape or an irregular shape.

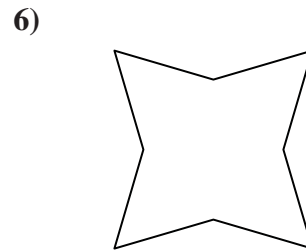
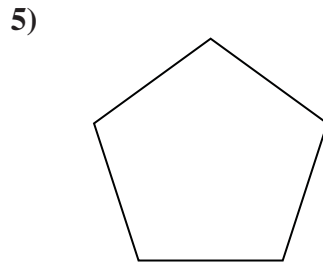
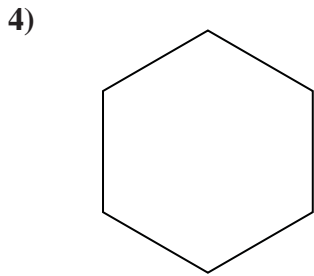
Answers



1. _____

2. _____

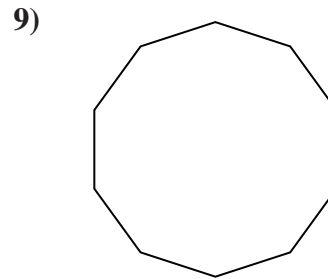
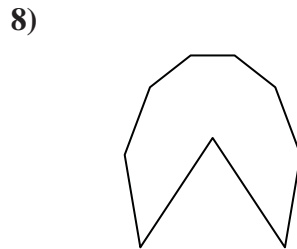
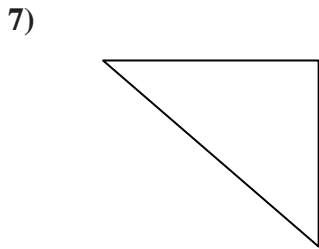
3. _____



4. _____

5. _____

6. _____



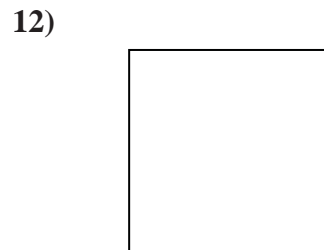
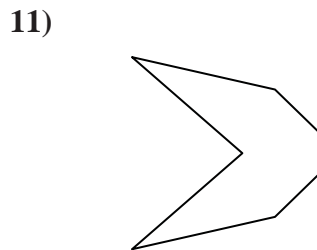
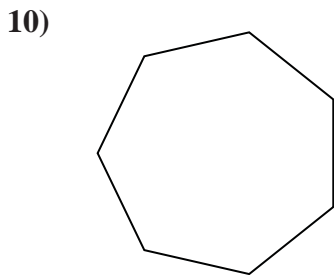
7. _____

8. _____

9. _____

10. _____

11. _____

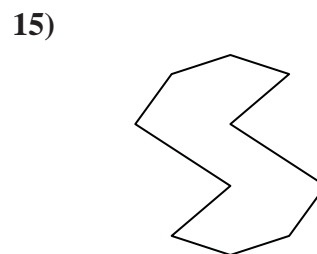
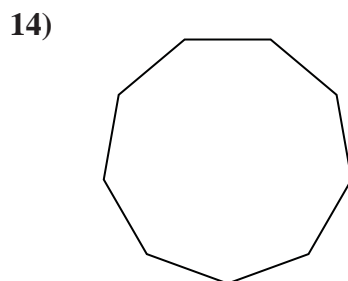
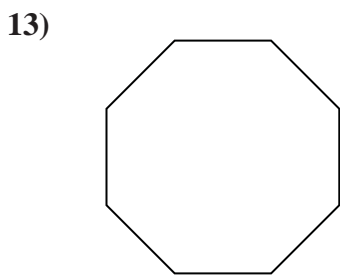


12. _____

13. _____

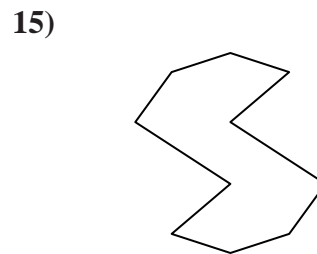
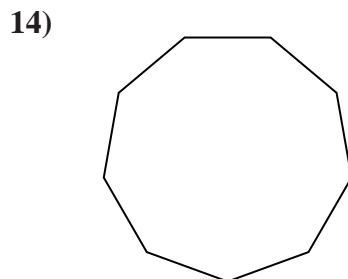
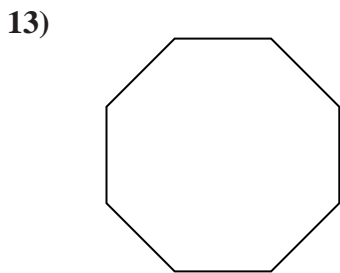
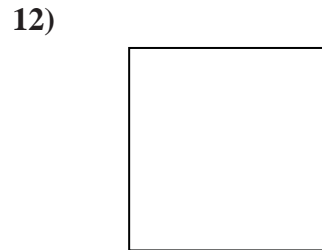
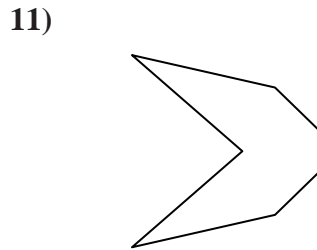
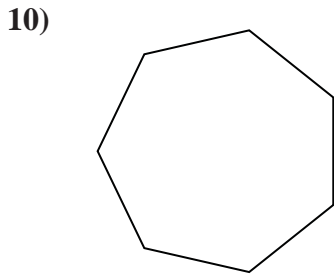
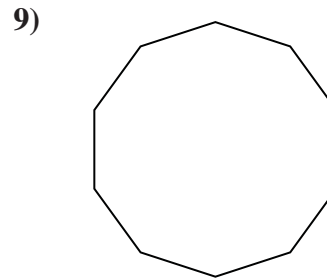
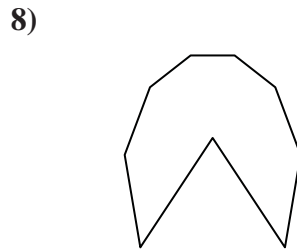
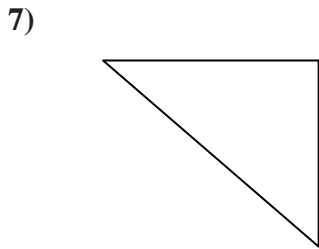
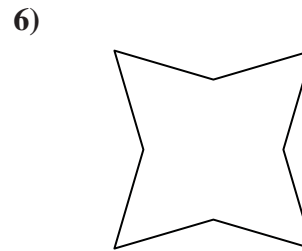
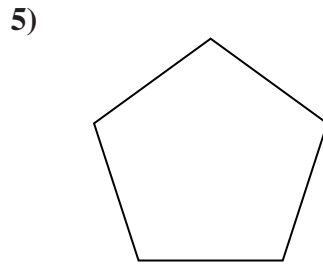
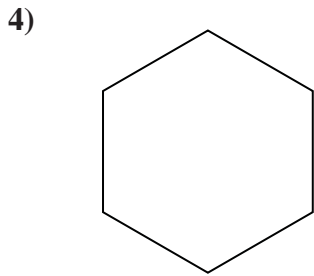

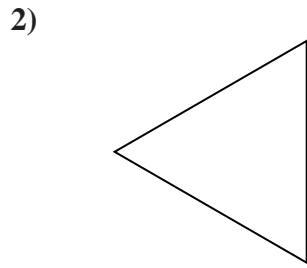

14. _____

15. _____





Determine if the shape shown is a regular shape or an irregular shape.



Answers

1. irregular

2. regular

3. irregular

4. regular

5. regular

6. irregular

7. irregular

8. irregular

9. regular

10. regular

11. irregular

12. regular

13. regular

14. regular

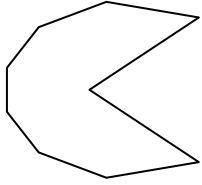
15. irregular




Determine if the shape shown is a regular shape or an irregular shape.

Answers

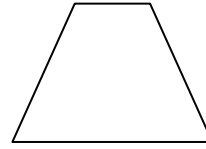
1)



2)



3)

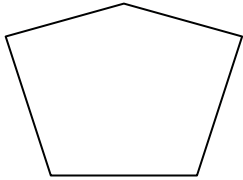


1. _____

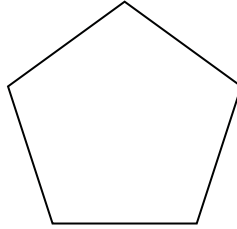
2. _____

3. _____

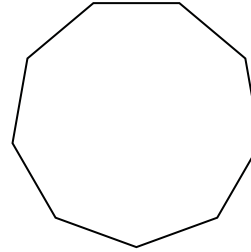
4)



5)



6)

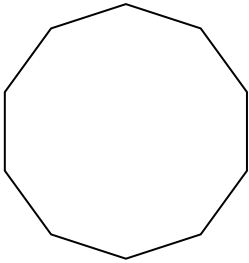


4. _____


5. _____

6. _____

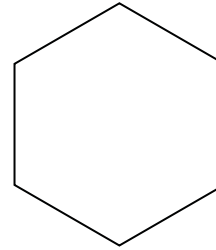
7)



8)



9)

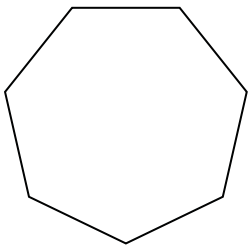


7. _____


8. _____

9. _____

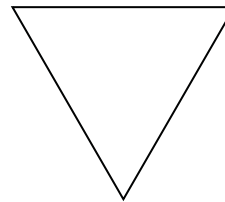
10)



11)



12)



10. _____

11. _____

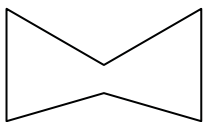
12. _____

13. _____


14. _____

15. _____

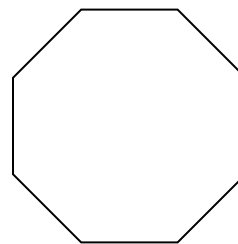
13)



14)



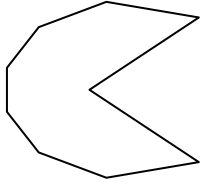
15)






Determine if the shape shown is a regular shape or an irregular shape.

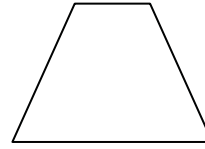
1)



2)



3)



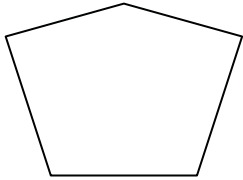
Answers

1. irregular

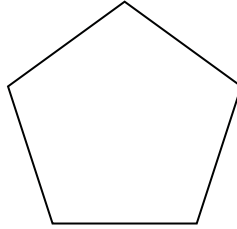
2. irregular

3. irregular

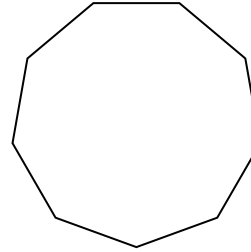
4)



5)



6)

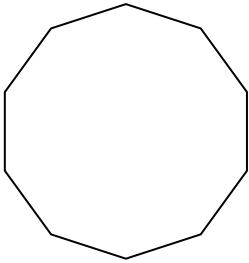


4. irregular


5. regular

6. regular

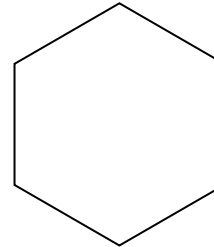
7)



8)



9)

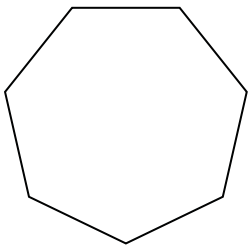


7. regular


8. regular

9. regular

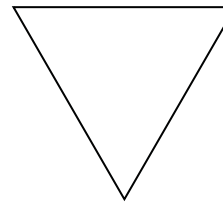
10)



11)



12)



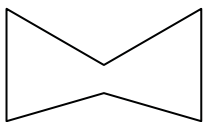
10. regular

11. irregular


12. regular

13. irregular

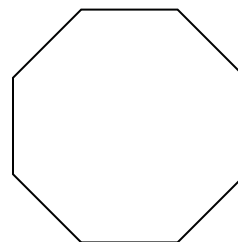
13)



14)



15)



14. irregular

15. regular