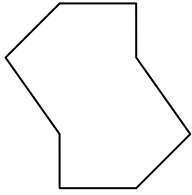




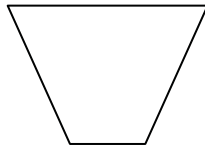
Determine if the shape shown is a regular shape or an irregular shape.

Answers


1)



2)



3)



1. \_\_\_\_\_

2. \_\_\_\_\_

3. \_\_\_\_\_

4. \_\_\_\_\_

5. \_\_\_\_\_

6. \_\_\_\_\_

7. \_\_\_\_\_

8. \_\_\_\_\_

9. \_\_\_\_\_

10. \_\_\_\_\_

11. \_\_\_\_\_

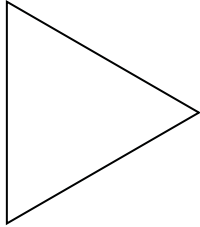
12. \_\_\_\_\_

13. \_\_\_\_\_


14. \_\_\_\_\_

15. \_\_\_\_\_

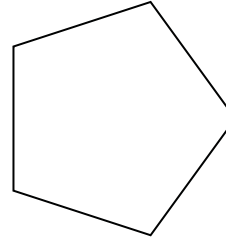
4)



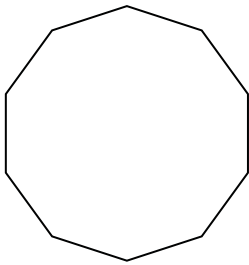
5)




6)



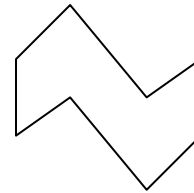
7)



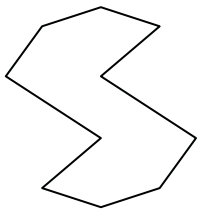
8)



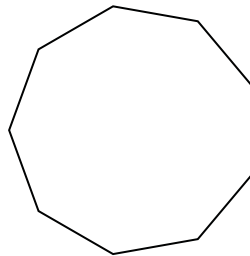
9)



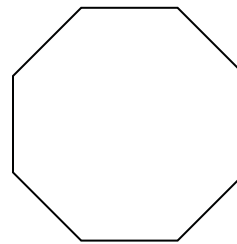
10)



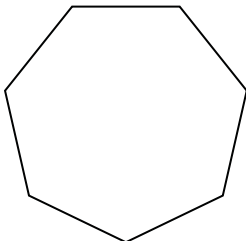
11)



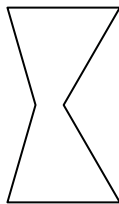
12)



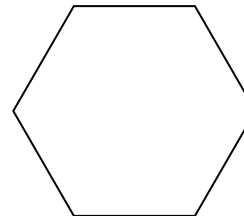
13)



14)



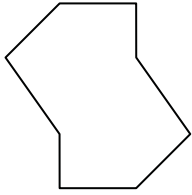
15)



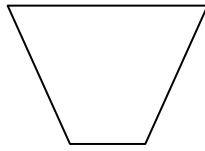


Determine if the shape shown is a regular shape or an irregular shape.


1)



2)



3)



Answers

1. irregular

2. irregular

3. irregular

4. regular

5. regular

6. regular

7. regular

8. irregular

9. irregular

10. irregular

11. regular

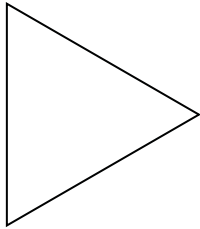
12. regular

13. regular


14. irregular

15. regular

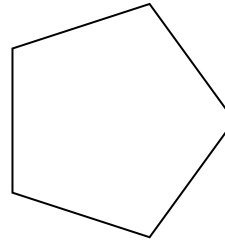
4)



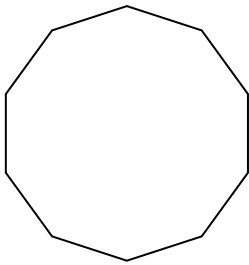
5)




6)



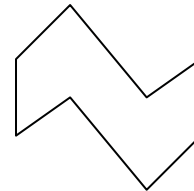
7)



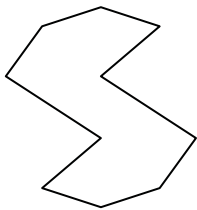
8)



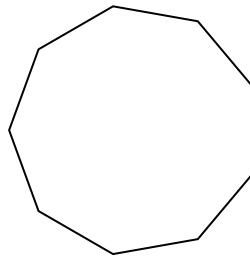
9)



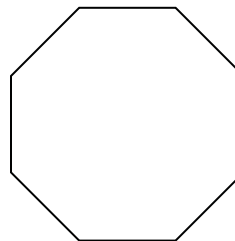
10)



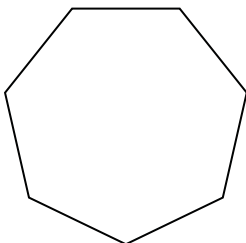
11)



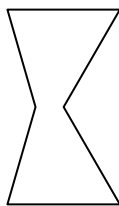
12)



13)



14)



15)

