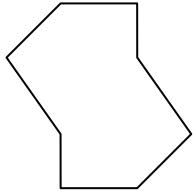




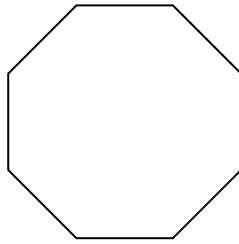
Determine if the shape shown is a regular shape or an irregular shape.

Answers

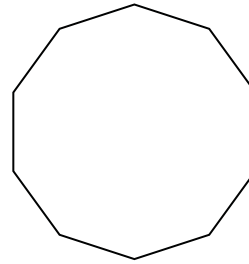
1)



2)



3)

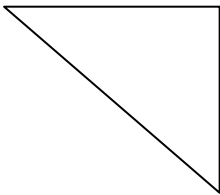


1. \_\_\_\_\_


2. \_\_\_\_\_

3. \_\_\_\_\_

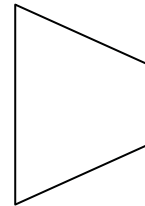
4)



5)



6)

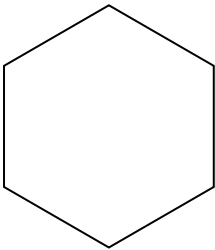


4. \_\_\_\_\_

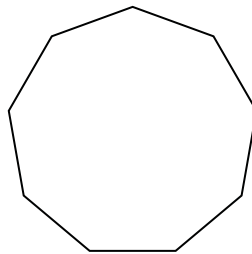
5. \_\_\_\_\_

6. \_\_\_\_\_


7)



8)



9)



7. \_\_\_\_\_

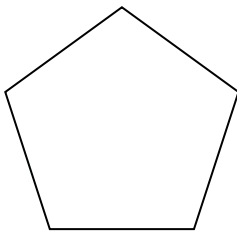
8. \_\_\_\_\_

9. \_\_\_\_\_


10. \_\_\_\_\_

11. \_\_\_\_\_

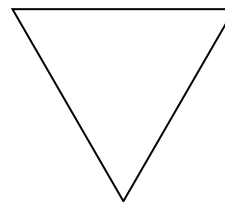
10)



11)



12)



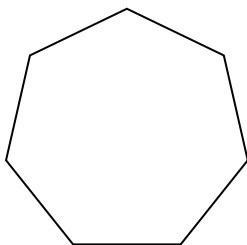
12. \_\_\_\_\_

13. \_\_\_\_\_

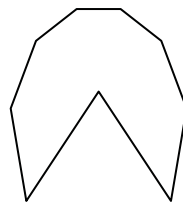
14. \_\_\_\_\_

15. \_\_\_\_\_


13)



14)



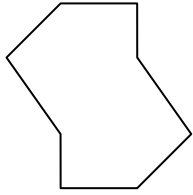
15)



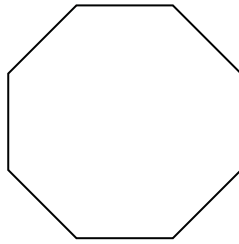


Determine if the shape shown is a regular shape or an irregular shape.

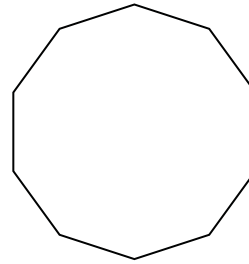
1)



2)



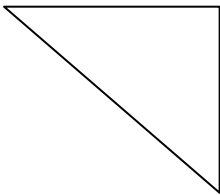
3)




Answers

1. irregular

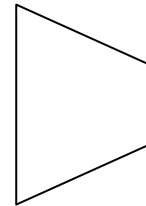
4)



5)



6)



2. regular

3. regular

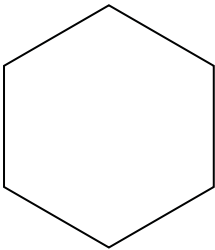
4. irregular

5. irregular

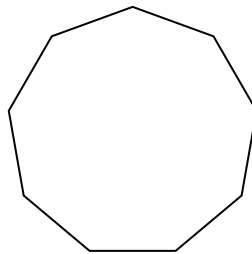
6. irregular

7. regular


7)



8)



9)



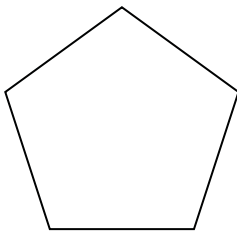
8. regular

9. irregular


10. regular

11. irregular

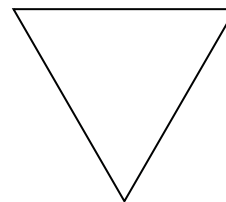
10)



11)



12)



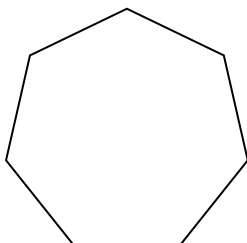
12. regular

13. regular

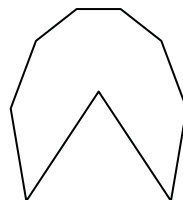
14. irregular

15. regular

13)



14)



15)

