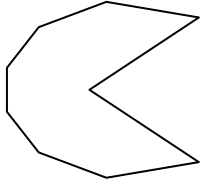





Determine if the shape shown is a regular shape or an irregular shape.

**Answers**

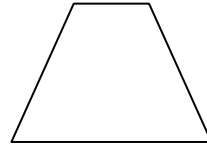
1)



2)



3)



1. \_\_\_\_\_

2. \_\_\_\_\_

3. \_\_\_\_\_

4. \_\_\_\_\_

5. \_\_\_\_\_

6. \_\_\_\_\_

7. \_\_\_\_\_

8. \_\_\_\_\_

9. \_\_\_\_\_

10. \_\_\_\_\_

11. \_\_\_\_\_

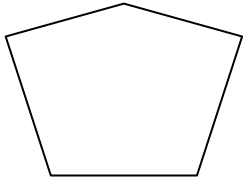
12. \_\_\_\_\_

13. \_\_\_\_\_

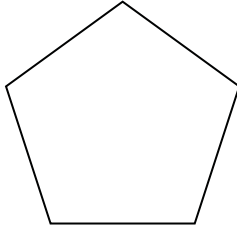
14. \_\_\_\_\_

15. \_\_\_\_\_

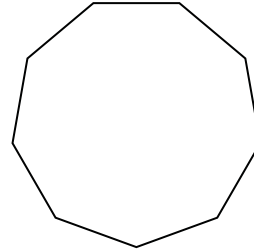
4)



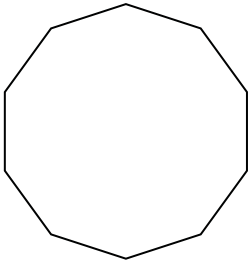
5)



6)



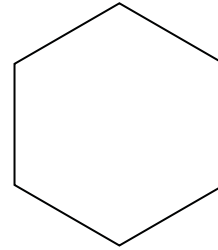
7)



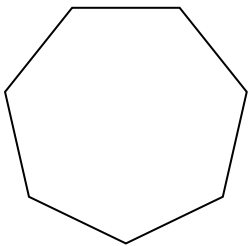
8)




9)



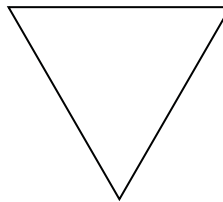
10)



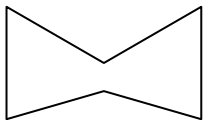
11)




12)



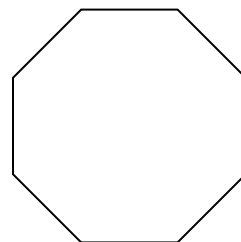
13)



14)



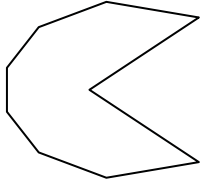
15)






Determine if the shape shown is a regular shape or an irregular shape.

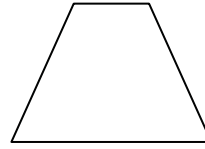
1)



2)



3)



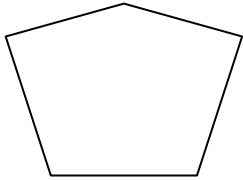
Answers

1. irregular

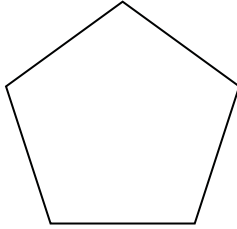
2. irregular

3. irregular

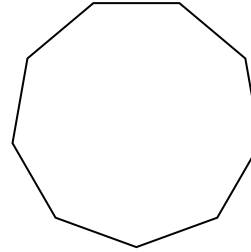
4)



5)



6)

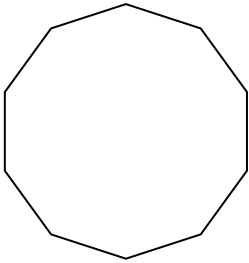


4. irregular


5. regular

6. regular

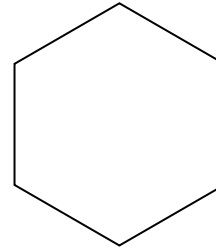
7)



8)



9)

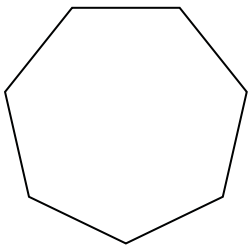


7. regular


8. regular

9. regular

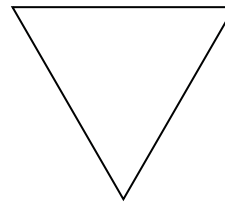
10)



11)



12)



10. regular

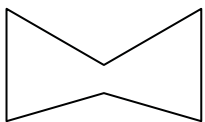
11. irregular

12. regular


13. irregular

14. irregular

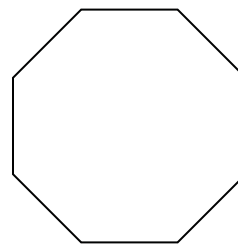
13)



14)



15)



15. regular