




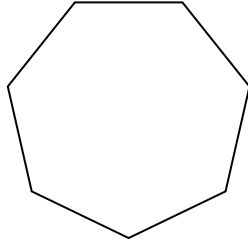
Determine if the shape shown is a regular shape or an irregular shape.

Answers

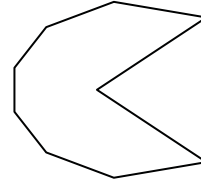
1)



2)



3)

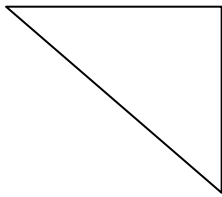


1. _____

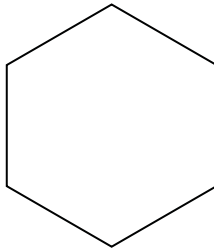
2. _____

3. _____


4)



5)



6)

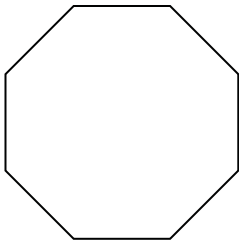


4. _____

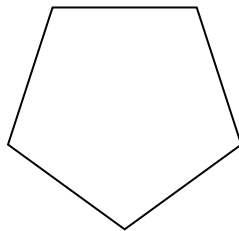
5. _____

6. _____

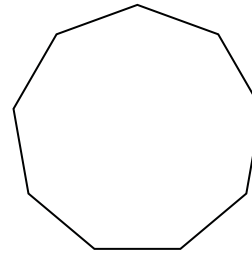
7)



8)



9)

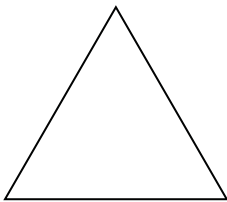


7. _____

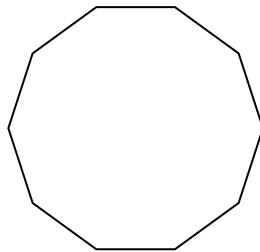
8. _____

9. _____

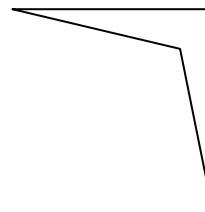
10)



11)



12)



10. _____

11. _____


12. _____

13. _____


14. _____

15. _____

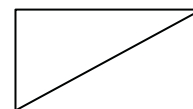
13)



14)




15)



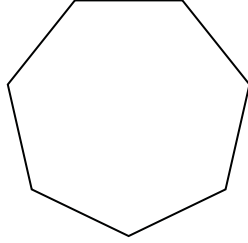


Determine if the shape shown is a regular shape or an irregular shape.

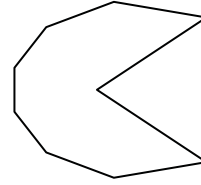
1)



2)



3)



Answers

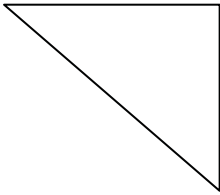
1. irregular

2. regular

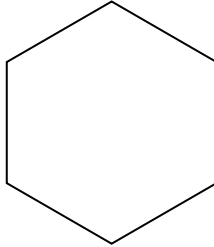
3. irregular

4. irregular


4)



5)



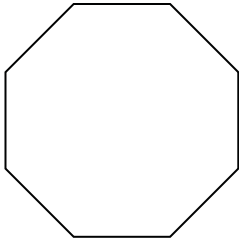
6)



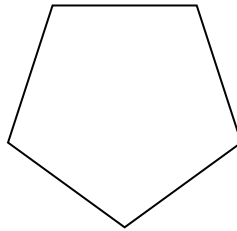
5. regular

6. irregular

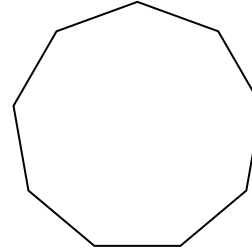
7)



8)



9)

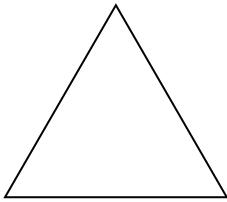


7. regular

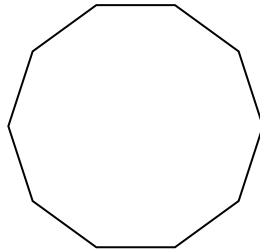
8. regular

9. regular

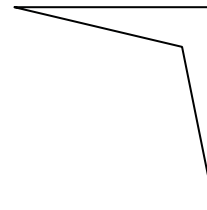
10)



11)



12)




10. regular

11. regular


12. irregular

13. irregular

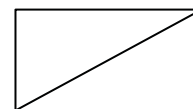
13)



14)



15)



14. regular

15. irregular