



Determine if each triangle is acute(A), obtuse(O) or right(R) and if it is an equilateral(E), isosceles(I) or scalene(S).

Answers

Acute Triangle:

All angles are less than 90° .

Obtuse Triangle:

One angle is greater than 90° .

Right Triangle:

One angle is 90° .

Equilateral Triangle:

3 equal sides. 3 equal angles.

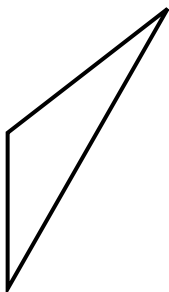
Isosceles Triangle:

2 equal sides. 2 equal angles.

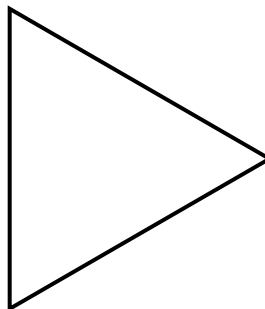
Scalene Triangle:

No equal sides. No equal angles.

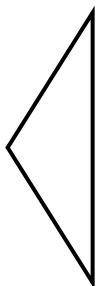
1)



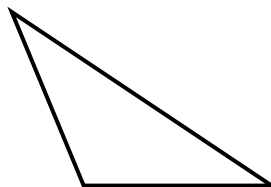
2)



3)



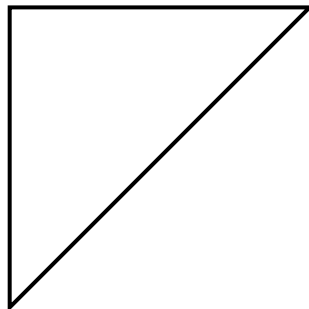
4)



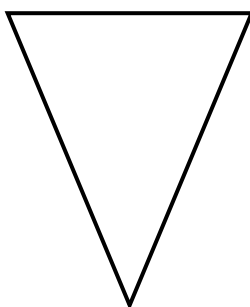
5)



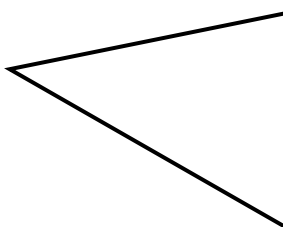
6)



7)



8)



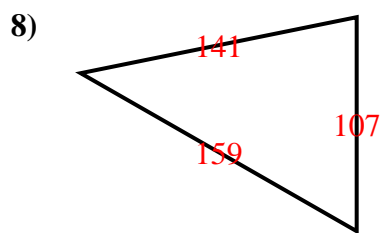
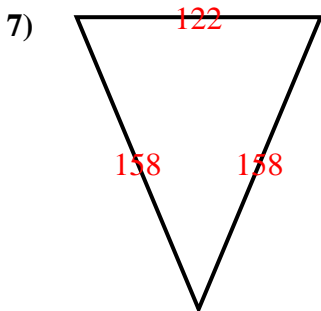
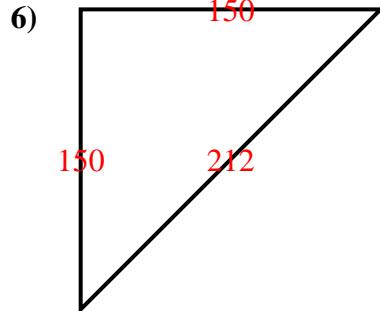
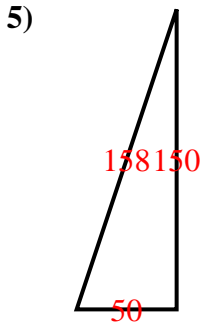
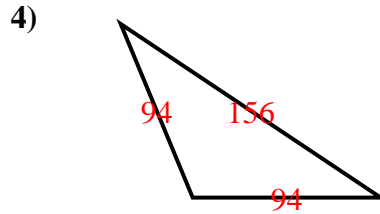
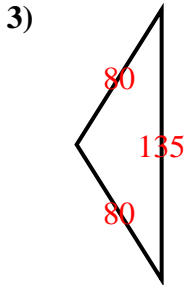
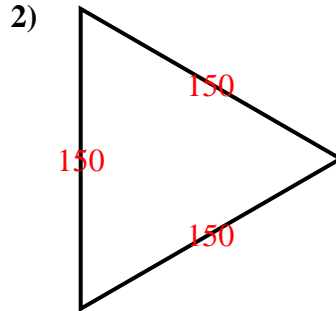
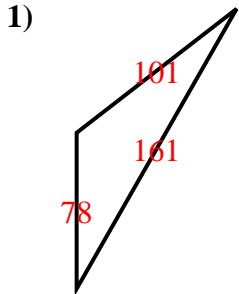
- 1. _____
- 2. _____
- 3. _____
- 4. _____
- 5. _____
- 6. _____
- 7. _____
- 8. _____



Determine if each triangle is acute(A), obtuse(O) or right(R) and if it is an equilateral(E), isosceles(I) or scalene(S).

<p>Acute Triangle: All angles are less than 90°.</p> <p>Obtuse Triangle: One angle is greater than 90°.</p> <p>Right Triangle: One angle is 90°.</p>	<p>Equilateral Triangle: 3 equal sides. 3 equal angles.</p> <p>Isosceles Triangle: 2 equal sides. 2 equal angles.</p> <p>Scalene Triangle: No equal sides. No equal angles.</p>
---	--

Answers



1. OS
2. AE
3. OI
4. OI
5. RS
6. RI
7. AI
8. AS