

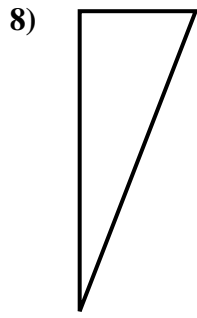
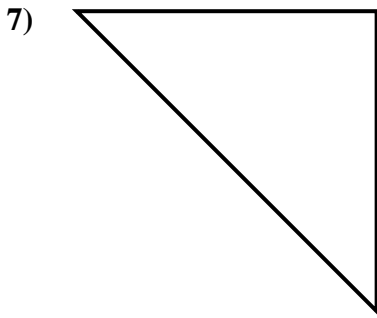
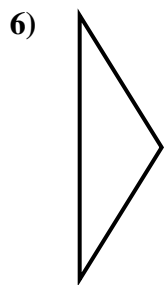
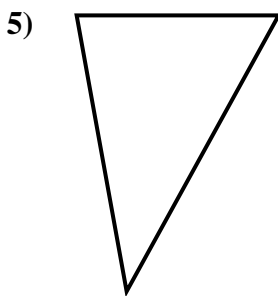
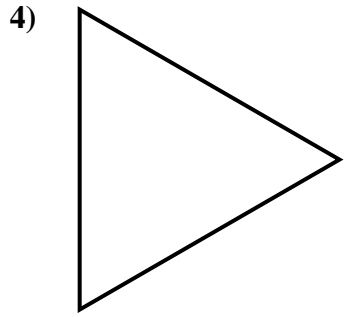
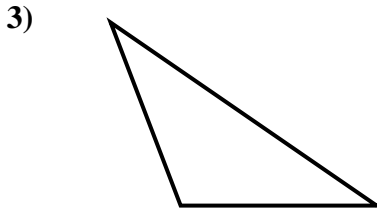
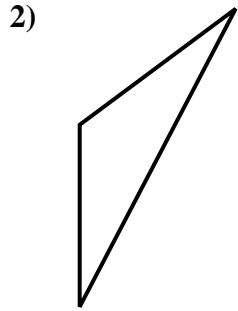
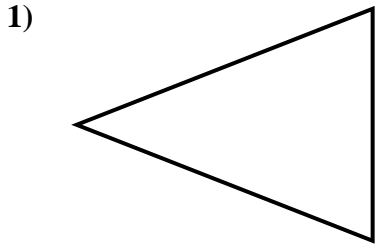


Determine if each triangle is acute(A), obtuse(O) or right(R) and if it is an equilateral(E), isosceles(I) or scalene(S).

Answers

<p>Acute Triangle: All angles are less than 90°.</p> <p>Obtuse Triangle: One angle is greater than 90°.</p> <p>Right Triangle: One angle is 90°.</p>	<p>Equilateral Triangle: 3 equal sides. 3 equal angles.</p> <p>Isosceles Triangle: 2 equal sides. 2 equal angles.</p> <p>Scalene Triangle: No equal sides. No equal angles.</p>
---	--

1. _____
2. _____
3. _____
4. _____
5. _____
6. _____
7. _____
8. _____

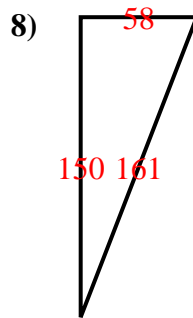
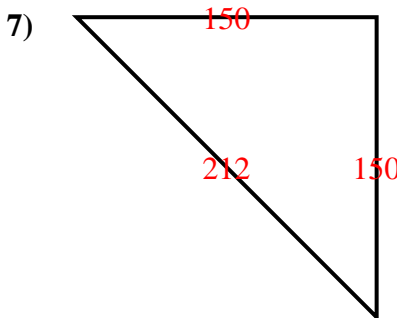
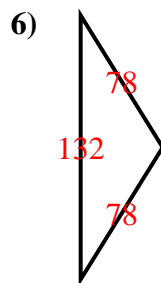
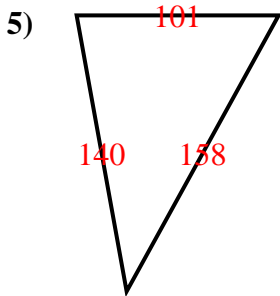
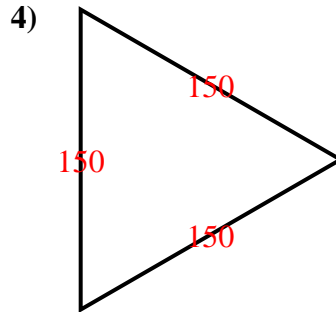
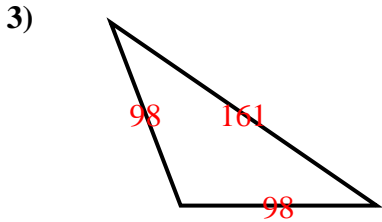
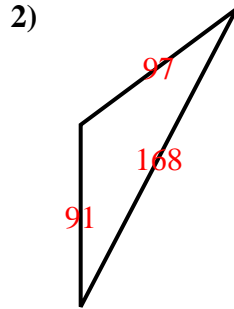
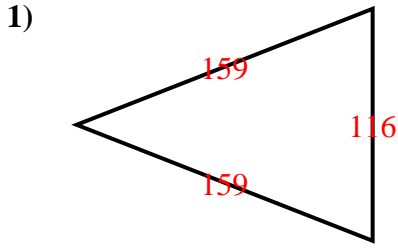




Determine if each triangle is acute(A), obtuse(O) or right(R) and if it is an equilateral(E), isosceles(I) or scalene(S).

<p>Acute Triangle: All angles are less than 90°.</p> <p>Obtuse Triangle: One angle is greater than 90°.</p> <p>Right Triangle: One angle is 90°.</p>	<p>Equilateral Triangle: 3 equal sides. 3 equal angles.</p> <p>Isosceles Triangle: 2 equal sides. 2 equal angles.</p> <p>Scalene Triangle: No equal sides. No equal angles.</p>
---	--

Answers



1. AI
2. OS
3. OI
4. AE
5. AS
6. OI
7. RI
8. RS