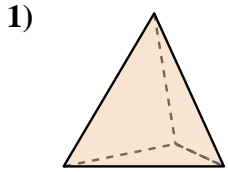
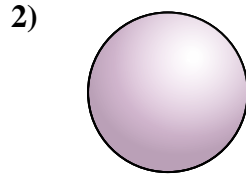




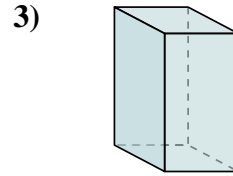
Determine which choice BEST describes the shape shown.



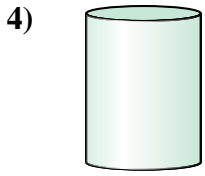
- 1) A. Triangular Pyramid
- B. Triangular Prism
- C. Sphere
- D. Rectangular Prism



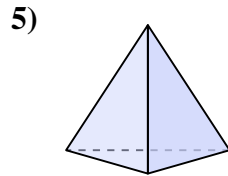
- 2) A. Sphere
- B. Rectangular Pyramid
- C. Rectangular Prism
- D. Cone



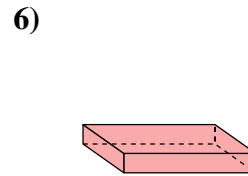
- 3) A. Cube
- B. Rectangular Prism
- C. Cylinder
- D. Triangular Prism



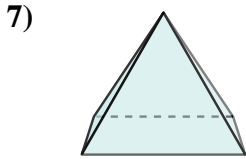
- 4) A. Rectangular Prism
- B. Rectangular Pyramid
- C. Sphere
- D. Cylinder



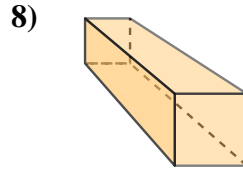
- 5) A. Cube
- B. Rectangular Pyramid
- C. Triangular Prism
- D. Triangular Pyramid



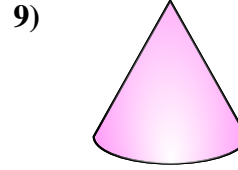
- 6) A. Rectangular Prism
- B. Triangular Pyramid
- C. Cone
- D. Cube



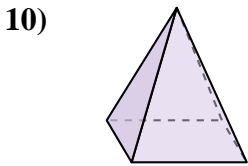
- 7) A. Cone
- B. Cylinder
- C. Rectangular Pyramid
- D. Cube



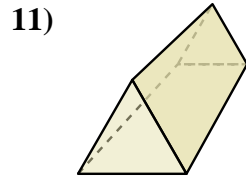
- 8) A. Cylinder
- B. Rectangular Prism
- C. Triangular Prism
- D. Cone



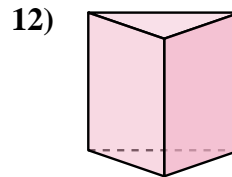
- 9) A. Sphere
- B. Triangular Prism
- C. Cube
- D. Cone



- 10) A. Sphere
- B. Cube
- C. Cylinder
- D. Rectangular Pyramid



- 11) A. Triangular Pyramid
- B. Cone
- C. Triangular Prism
- D. Cube



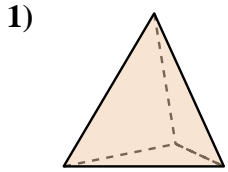
- 12) A. Cylinder
- B. Cone
- C. Rectangular Pyramid
- D. Triangular Prism

Answers

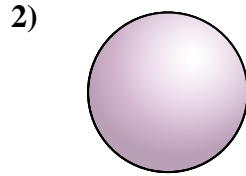
- 1. _____
- 2. _____
- 3. _____
- 4. _____
- 5. _____
- 6. _____
- 7. _____
- 8. _____
- 9. _____
- 10. _____
- 11. _____
- 12. _____



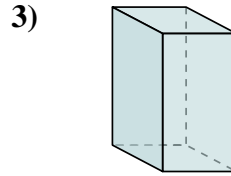
Determine which choice BEST describes the shape shown.



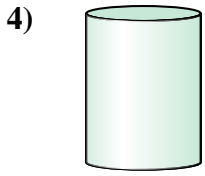
- 1) A. Triangular Pyramid
- B. Triangular Prism
- C. Sphere
- D. Rectangular Prism



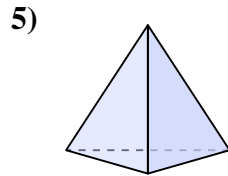
- 2) A. Sphere
- B. Rectangular Pyramid
- C. Rectangular Prism
- D. Cone



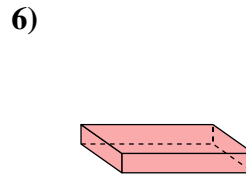
- 3) A. Cube
- B. Rectangular Prism
- C. Cylinder
- D. Triangular Prism



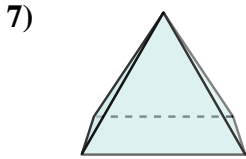
- 4) A. Rectangular Prism
- B. Rectangular Pyramid
- C. Sphere
- D. Cylinder



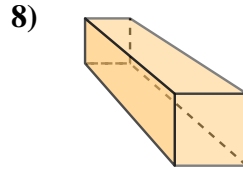
- 5) A. Cube
- B. Rectangular Pyramid
- C. Triangular Prism
- D. Triangular Pyramid



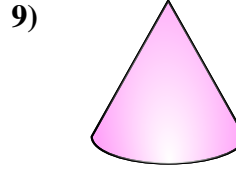
- 6) A. Rectangular Prism
- B. Triangular Pyramid
- C. Cone
- D. Cube



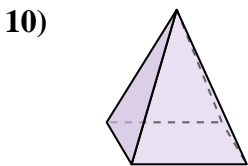
- 7) A. Cone
- B. Cylinder
- C. Rectangular Pyramid
- D. Cube



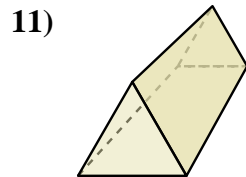
- 8) A. Cylinder
- B. Rectangular Prism
- C. Triangular Prism
- D. Cone



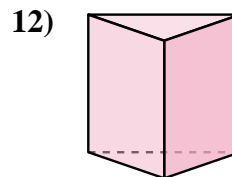
- 9) A. Sphere
- B. Triangular Prism
- C. Cube
- D. Cone



- 10) A. Sphere
- B. Cube
- C. Cylinder
- D. Rectangular Pyramid



- 11) A. Triangular Pyramid
- B. Cone
- C. Triangular Prism
- D. Cube



- 12) A. Cylinder
- B. Cone
- C. Rectangular Pyramid
- D. Triangular Prism

Answers

1. **A**

2. **A**

3. **B**

4. **D**

5. **D**

6. **A**

7. **C**

8. **B**

9. **D**

10. **D**

11. **C**

12. **D**