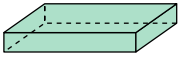




Determine which choice BEST describes the shape shown.

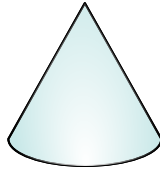
Answers

1)



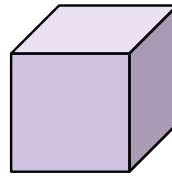
- A. Rectangular Prism
- B. Rectangular Pyramid
- C. Sphere
- D. Cube

2)



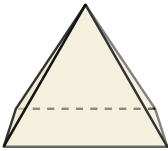
- A. Cylinder
- B. Triangular Prism
- C. Sphere
- D. Cone

3)




- A. Triangular Pyramid
- B. Rectangular Prism
- C. Cube
- D. Sphere

4)



- A. Triangular Prism
- B. Sphere
- C. Cone
- D. Rectangular Pyramid

5)



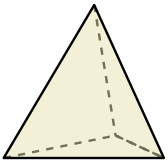
- A. Cone
- B. Sphere
- C. Rectangular Pyramid
- D. Cylinder

6)



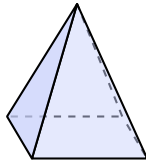
- A. Rectangular Prism
- B. Rectangular Pyramid
- C. Cube
- D. Cylinder

7)



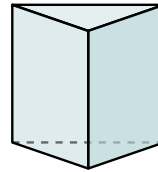
- A. Cylinder
- B. Triangular Prism
- C. Cube
- D. Triangular Pyramid

8)



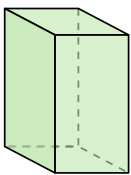
- A. Cone
- B. Cube
- C. Rectangular Pyramid
- D. Triangular Prism

9)



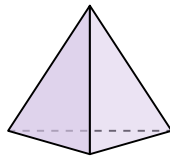
- A. Rectangular Pyramid
- B. Sphere
- C. Triangular Pyramid
- D. Triangular Prism

10)



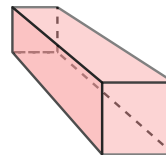
- A. Sphere
- B. Rectangular Prism
- C. Cone
- D. Triangular Prism

11)



- A. Triangular Prism
- B. Cube
- C. Triangular Pyramid
- D. Cone

12)



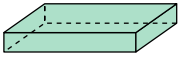
- A. Triangular Pyramid
- B. Triangular Prism
- C. Rectangular Prism
- D. Sphere

1. _____
2. _____
3. _____
4. _____
5. _____
6. _____
7. _____
8. _____
9. _____
10. _____
11. _____
12. _____



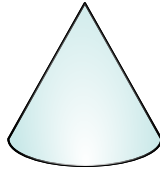
Determine which choice BEST describes the shape shown.

1)



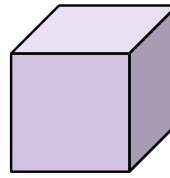
- A. Rectangular Prism
- B. Rectangular Pyramid
- C. Sphere
- D. Cube

2)



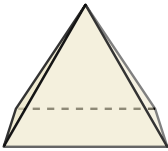
- A. Cylinder
- B. Triangular Prism
- C. Sphere
- D. Cone

3)




- A. Triangular Pyramid
- B. Rectangular Prism
- C. Cube
- D. Sphere

4)



- A. Triangular Prism
- B. Sphere
- C. Cone
- D. Rectangular Pyramid

5)



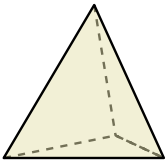
- A. Cone
- B. Sphere
- C. Rectangular Pyramid
- D. Cylinder

6)



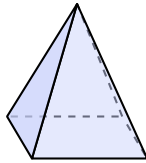
- A. Rectangular Prism
- B. Rectangular Pyramid
- C. Cube
- D. Cylinder

7)



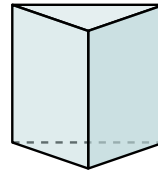
- A. Cylinder
- B. Triangular Prism
- C. Cube
- D. Triangular Pyramid

8)



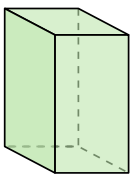
- A. Cone
- B. Cube
- C. Rectangular Pyramid
- D. Triangular Prism

9)



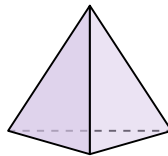
- A. Rectangular Pyramid
- B. Sphere
- C. Triangular Pyramid
- D. Triangular Prism

10)



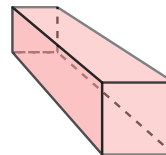
- A. Sphere
- B. Rectangular Prism
- C. Cone
- D. Triangular Prism

11)



- A. Triangular Prism
- B. Cube
- C. Triangular Pyramid
- D. Cone

12)



- A. Triangular Pyramid
- B. Triangular Prism
- C. Rectangular Prism
- D. Sphere

Answers

1. **A**

2. **D**

3. **C**

4. **D**

5. **B**

6. **D**

7. **D**

8. **C**

9. **D**

10. **B**

11. **C**

12. **C**